

Measurement of the Boltzmann constant by Einstein. Problem of the 5-th Experimental Physics Olympiad. Sofia 9 December 2017

Todor M. Mishonov, Emil G. Petkov, Aleksander A. Stefanov, Aleksander P. Petkov*
*Physics Faculty,
St. Clement of Ohrid University at Sofia,
5 James Bourchier blvd, BG-1164 Sofia*

Iglika M. Dimitrova
*Faculty of Chemical Technologies,
Department of Physical Chemistry,
University of Chemical Technology and Metallurgy,
8, Kliment Ohridski blvd, BG-1756 Sofia*

Stojan G. Manolev†
*Middle school Goce Delchev,
Purvomaiska str. 3,
MKD-2460 Valandovo, R. Macedonia*

Simona I. Ilieva‡
*Department of Atomic Physics, Physics Faculty,
St. Clement of Ohrid University at Sofia,
5 James Bourchier blvd, BG-1164 Sofia*

Albert M. Varonov§
*Department of Theoretical Physics, Physics Faculty,
St. Clement of Ohrid University at Sofia,
5 James Bourchier blvd, BG-1164 Sofia
(Dated: September 14, 2022)*

Several consecutive experiments with specifically built set-up are described. Performing of the consecutive experimental tasks enables possibility to determine Boltzmann's constant k_B . The fluctuations of the voltage $U(t)$ of series of capacitors connected in parallel with a constant resistance are measured. The voltage is amplified 1 million times $Y = 10^6$. The amplified voltage $YU(t)$ is applied to a device, which give the voltage mean squared in time $U_2 = \langle (YU(t))^2 \rangle / U_0$. This voltage U_2 is measured with a multimeter. A series of measurements gives the possibility to determine the Boltzmann's constant from the equipartition theorem $C \langle U^2 \rangle = k_B T$. In order to determine the set-up constant U_0 a series of problems connected with Ohm's law are given that are addressed to the senior students. For the junior high school students, the basic problem is to analyse the analog mean squaring. The students works are graded in four age groups S, M, L, XL. The last age group contains problems that are for university students (XL category) and include theoretical research of the set-up as an engineering device. This problem is given at the Fifth Experimental Physics Olympiad "Day of the Electron", on December 2017 in Sofia, organized by the Sofia Branch of the Union of Physicists in Bulgaria with the cooperation of the Physics Faculty of Sofia University and the Society of Physicists of the Republic of Macedonia, Strumica.

I. INTRODUCTION

111 years ago Albert Einstein¹ offered a method for Boltzmann's constant measurement k_B by examination of the mean thermal energy $C \langle U^2 \rangle = k_B T$. Strangely, that experiment has never been conducted so far and you are the first ones that will be able to do it after our team makes this idea a reality. The technological progress during the last century made possible that scientific problem to be adapted to the level of a school problem. We begin with the tasks that can be solved by the junior students and the difficulty arises gradually. Each participant works as far as he/she can. The last tasks are for the university students.

Tasks for further work. The participants in the Olympiad receive from the organizers the experimental set-up they have worked with, as one of the most important goals of the Olympiad is the careful repetition of the experiment up to the point of having a detailed measurement of the Boltzmann's constant and the comprehensive understanding of the theory. The problem's solution will be published on the Cornell University library server and some details of scanned works of participants will be published on the Sofia Branch of Union of Physicists in Bulgaria website. After reading the solution, we expect the participants to conduct all described experiments in it and obtain the Boltzmann's constant. k_B . This first determination of a fundamental constant throws upon us the glare of a great epoch in the development of physics, when the quanta and atoms were subjects of entertainment for the boys who created the contemporary physics.

Similar experiments are given only in the best universities^{2,3} and whoever has an access to the set-ups' descriptions may compare the accuracy with our high school experiment.

The theoretical subproblems are a good exercise in Ohm's law, which give the opportunity for comprehensive understanding of the set-up's operation, and are also a good starting point for understanding the electronics that is the basis of many physical devices. The experimental set-ups are gifts from the Olympiad organizers to the participants, who can use them and make demonstrations in physics classes. After the end of the school year, these set-ups should be given to the physics classroom in the school in which the participants study.

II. INITIAL EASY TASKS. S

1. Measure the voltages of the four 9 V batteries and measure with maximal accuracy the voltage of the 1.5 V battery.
2. Place the 1.5 V battery in its holder, connect it potentiometrically and measure the interval of voltages which you get by rotating the axis of the potentiometer. This will be the voltage source in the next tasks. Reversing polarity changes the voltage sign.
3. Connect the 9 V batteries with the connection clips by buckling the electrodes..

III. ANALOGUE SQUARING. M

4. **Attention! From this moment on there is a possibility to burn the integral circuits, if you connect the batteries improperly.** Orient the set-up you work with so that both wires at the edge to be on the right side and the sign "COM" to be on the right at the bottom. Take a look at the schematics in Fig. 1.
5. Carefully connect the 9 V female connector to the right hand side 3-pin male connectors on the circuit board, label to label. Work carefully – if you make an error with the polarity you will burn the integral circuits.
6. Connect the potentiometrically connected battery with the input wire of the set-up at the top with a label "IN" and the other electrode of the potentiometer connect to the wire comes from the "ground" of the circuit with a sign "COM".
7. Parallel to the potentiometer and "IN"–"COM" inputs of the circuit, connect the first voltmeter, which shows voltage U_1 .
8. At proper connectivity of the circuit, when you rotate the potentiometer axis, the voltage U_1 should change approximately between 0 and the battery voltage 1.5 V.
9. The second voltmeter, that shows voltage U_2 , connect between the output wire of the circuit "OUT" and the common point "COM". This way U_2 is the voltage between "OUT" and "COM" points.
10. Check whether the "COM" electrodes of both multimeters and the set-up are connected.
11. Rotate the potentiometer axis, wait 1 minute and write down the voltages U_1 and U_2 . Switch the polarity of the voltage source and repeat the measurements of the input voltage U_1 and the output voltage U_2 . Arrange the results in a table with columns: number of measurement i , U_1 and U_2 .
12. Represent the results in a graph in the plane U_1 abscissa (horizontal) and U_2 ordinate (vertical).
13. Add a column to the table $(U_1)^2$ and represent the results graphically in the plane $(U_1)^2$ abscissa and U_2 ordinate. Draw a straight line that passes most closely to the experimental points. This fitting (approximating) line is described by the equation $U_2 = (U_1)^2/U_0 + \text{const}$. Select two points on the straight line, measure the differences in abscissa $\Delta(U_1^2)$, and in ordinate $\Delta(U_2)$ and determine the parameter with dimension voltage from the slope $U_0 = \Delta(U_1^2)/\Delta(U_2)$. This parameter of analogue multiplying schematics is essential for the determination of the Boltzmann's constant k_B and this is described in the subproblems of the next section.

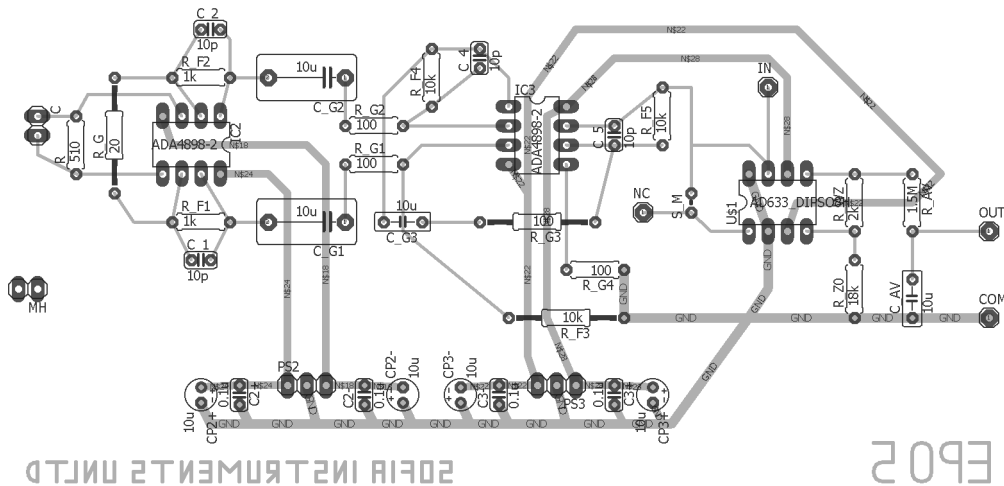


FIG. 1: PCB

IV. VOLTAGE FLUCTOSCOPY. DETERMINATION OF BOLTZMANN'S CONSTANT. L

14. Disconnect the potentiometer and the voltmeter, measuring the “IN”–“COM” voltage U_1 .
15. Carefully connect the second voltage source with two 9 V batteries. Label to label, orange mark to orange mark, otherwise the integral circuit will be damaged.
16. This is the most dangerous moment for the integrated circuits (ADA4898-2). Mount both integrated circuits on the board. Again: green mark to green mark, label to label. If you make a mistake you will burn the integrated circuit.
17. You should have available a set of capacitors soldered to connectors. The capacity C of each capacitor is written in nanofarads ($1 \text{ nF} = 10^{-9} \text{ F}$) on the label glued to the connector. You can arrange the capacitors by the size of their capacity and write down those capacities C_n in a table; the index n shows the consecutive number.
18. What follows is the most important measurement – determining the thermal fluctuations of the voltage of the capacitor. Keep the wire connected to the “NC” label of the set-up away from the power supplies. Attach in a succession each of the capacitors on the connector at the left end of the set-up. Wait for 2 minutes and write down the voltage U_2 shown by the voltmeter connected between the “OUT” and “COM” electrodes of the set-up. Arrange the results in a table with columns n , C_n and U_2 .
19. The fluctuating voltage U of the capacitor C is amplified one million times, more precisely, the gain coefficient is $Y = 1.01 \times 10^6$, compare that to the amplifier of the Habicht brothers.⁴ Calculate the parameter $U^* = U_0/Y^2$. It has dimension of voltage and is important for the experiment. Do not be alarmed by the powers, this is a really small voltage of the order of picovolt ($1 \text{ pV} = 10^{-12} \text{ V}$).
20. Evaluate the room temperature and write it down in Kelvins ($0 \text{ K} \approx -273^\circ\text{C}$).
21. Add two new columns to the table: $y_n = U_{2,n}U^*/T$ and $x_n = 1/C_n$; This is the most important experimental data.
22. The results in the table should be represented visually by a graph in the x - y plane. Think for a few moments what the proper scaling should be.
23. If you have worked correctly the individual points should be close to a straight line. Draw the line $y = k_B x + \text{const}$, which you think is closest to all the points. This is a standard mathematical procedure, called linear regression and is implemented numerically in a lot of calculators so you may, if you want, get the solution numerically.
24. Choose two points from the line and determine the difference in their coordinates on the y axis - Δy , and the x axis - Δx . Write down those differences.

25. Calculate the slope of the line $k_B = \Delta y / \Delta x$ and draw a box around the result. Congratulations, you have just measured a fundamental constant - Boltzmann's constant k_B ! Just determining the order correctly is a big success.

V. THEORETICAL PROBLEMS FOR OHM'S LAW RELATED TO THE EXPERIMENTAL SET-UP. XL

This is an Olympiad in experimental physics, solving the problems in this section will give you only a few points, and their impact on the final score may be insignificant.

The results from the solution of those problems will be used only for differentiating works in which the experiments were performed equally well, or for non-zero results in cases in which the participant has burnt the integrated circuits by not following correctly the assembly instructions.

The circuits shown in Figures 3, 4, 5 and 6 contain triangles. The left vertical side of each triangle has inputs, denoted by (+) and (-). The output is on the right and is denoted by (0). The output current I_0 is such that the input voltages equalize $U_+ = U_-$. The currents at the inputs (+) and (-) are negligible. Such device is called an operational amplifier.

26. By using the Ohm's law show that the relation between voltages and currents is given by the equation $y_1 = V_2/V_1 = 1 + R_f/r_g$, Fig. 3.
27. Analogously, for the symmetric variant of the same circuit $y_1 = (V_2 - V_4)/(V_1 - V_3) = R_f/r_g + 1$, Fig. 4.
28. $y_2 = V_7/(V_5 - V_6) = -R_f/r_g$. Fig. 5.
29. $y_3 = V_9/V_8 = -R_f/r_g$. Fig. 6.
30. If a large capacitor C_g is connected in series with a resistor r_g show that, for frequencies such that $\omega r_g C_g \gg 1$, the effect of the capacitor is negligible.
31. For which frequencies, we can ignore the effect of a small capacitor C_f , connected in parallel with a large resistor R_f ?
32. If the three amplifiers, are connected in series, the total gain is $Y = y_1 y_2 y_3$. Make an estimate for the frequency interval (f_1, f_h) , for which the gain coefficient Y is approximately constant. Use the numerical values of the parameters in table I; $f = \omega/2\pi$
33. In the circuits in Fig. 7 the voltage $U_W = U_X U_Y / U_m + U_Z$, with $U_X = U_Y$, and the constant $U_m = 10$ V for the used amplifier AD633. Express U_Z through U_W and show that $U_W = U_X^2 / \tilde{U}$, where $\tilde{U} = U_m R_1 / (R_1 + R_2)$.
34. Show that $U_2 = R_V \langle U_W \rangle / (R_{av} + R_V)$, where R_V , most frequently 1 M Ω , is the internal resistance of the ohmmeter, and the brackets $\langle U_W \rangle$ denote time average.
35. Show that $U_2 = U_X^2 / U_0$, where $U_0 = U_m R_1 / (R_1 + R_2)$.
36. Finally, the main equation for our set-up is $U_2 = \langle U^2 \rangle / U^*$, where U is the capacitor voltage at the input of the device, and

$$\frac{1}{U^*} = \frac{Y^2}{U_m} \frac{R_1 + R_2}{R_1} \frac{R_V}{R_{av} + R_V} = Y^2 / \tilde{U}.$$

37. Calculate the values of the parameter U^* by using the parameters in Table I.

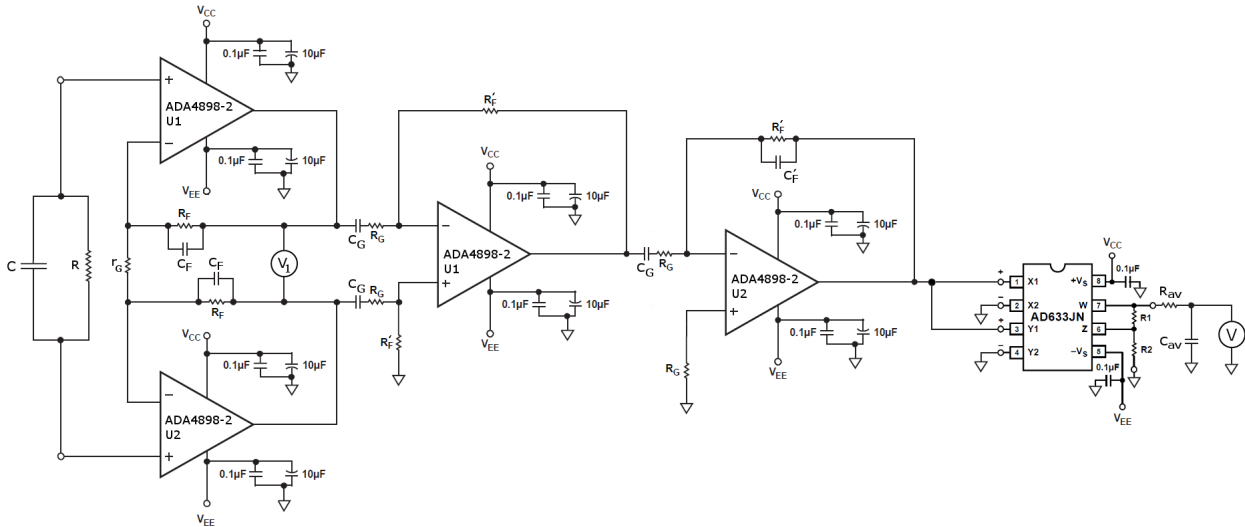


FIG. 2: Circuit.

Circuit element	Value
R	510Ω
r_G	20Ω
R_F	$1 \text{ k}\Omega$
C_F	10 pF
C_G	$10 \mu\text{F}$
R_G	100Ω
R'_F	$10 \text{ k}\Omega$
C'_F	10 pF
R_1	$2 \text{ k}\Omega$
R_2	$18 \text{ k}\Omega$
R_{av}	$1.5 \text{ M}\Omega$
C_{av}	$10 \mu\text{F}$
R_V	$\approx 1 \text{ M}\Omega$
V_{CC}	$+18 \text{ V}$
V_{EE}	-18 V

TABLE I: Table of the numerical values of the circuit elements from Fig. 2.

VI. HOMEWORK PROBLEM, THE SOLUTION TO WHICH MUST BE SEND DURING THE NIGHT AFTER THE OLYMPIAD, BY SUNRISE, AT THE E-MAIL OF THE OLYMPIAD. DERIVE THE FORMULAS USED FOR DETERMINING BOLZMANN'S CONSTANT k_B . SOMMERFELD REWARD WITH A MONETARY EQUIVALENT OF DM137. XL

Instructions. Start with the equipartition theorem applied to the energy of the temperature fluctuations. $\frac{1}{2}C \langle U^2 \rangle = \frac{1}{2}k_B T$. By analyzing the electronic circuit of the set-up, express the mean-square of voltage $\langle U^2 \rangle = U_2 U^*$ by the experimentally measured voltage U_2 . Express the coefficient U^* in the linear regression formula $U_2 U^* / T = \langle U^2 \rangle / T = k_B (1/C) + \text{const}$, from which, by the slope of the line, you can determine the Boltzmann's constant k_B . In a few words, write an article showing how the idea of Einstein for determining Boltzmann's constant is realized with our set-up. Show what improvements to the set-up would increase the accuracy of the experiment.

You can work as a group with other participants in the Olympiad, you can also consult with professionals, but you must give the names of the consultants and the full list of authors.

The best article will be rewarded the a Sommerfeld reward with a monetary equivalent of DM137. The prize is given personally and only in the day in which the results are announced - 10.12.2017.

VII. PROBLEMS FOR FURTHER WORK

The Olympiad is created with the idea of helping students, deprived of quality education, students coming from schools where the physics classrooms are closed. For this reason, do not get upset if you are not satisfied

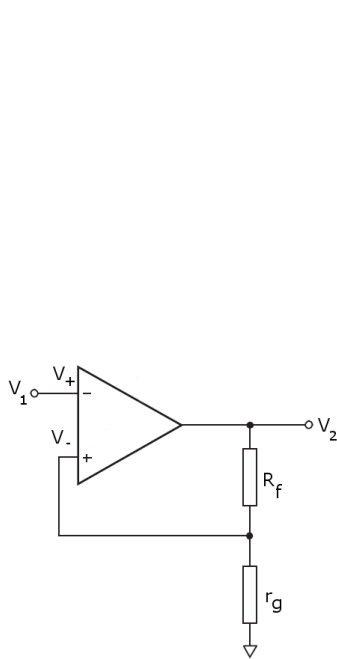


FIG. 3: Non-inverting amplifier

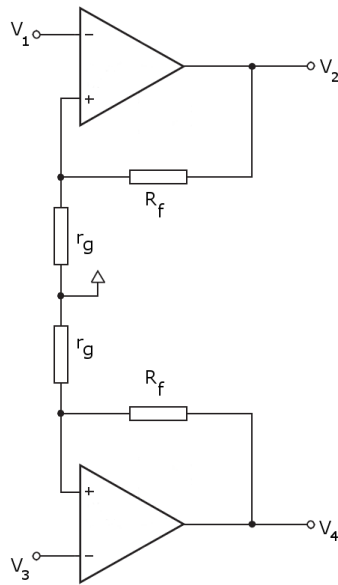


FIG. 4: Buffer

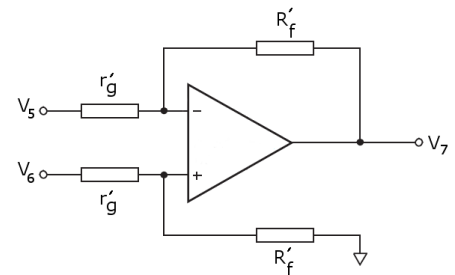


FIG. 5: Differential amplifier

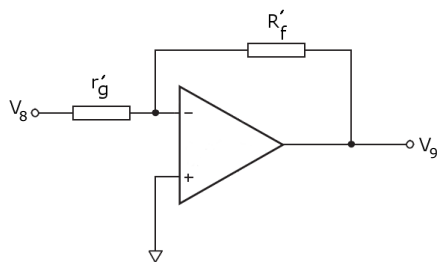


FIG. 6: Inverting amplifier

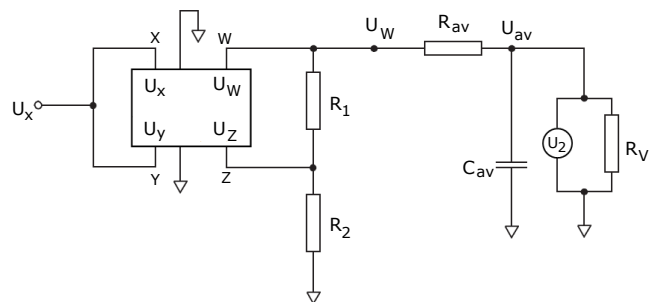


FIG. 7: Analog multiplier

with the achieved results. Ask your teacher if there is an appropriate measuring apparatus for measuring the capacitors more precisely. Do the same experiment calmly in your home and you will see that it is simple. If you can measure a fundamental constant in your home, then you have a flying start for all natural and technical sciences. If you have the opportunity, say in your physics club, demonstrate the set-up in your school.

Please, write us a short text containing your opinion about the Olympiad. We highly value your recommendations, and will try to take them into account for the next issue of the Olympiad - EPO6, next year at the same time.

The experimental set-up is indeed unique. You have in your hands an amplifier, capable of amplifying a million times, with a noise level of $1 \text{ nV}/\sqrt{\text{Hz}}$.

With the proper modification the set-up can be used for measurement of the electron charge and the absolute temperature. Furthermore, with a minimal modification, the device can be used as a lock-in voltmeter, which can measure alternating voltages even smaller than 1 microvolt ($1 \mu\text{V} = 10^{-6} \text{ V}$). For those reasons, there is an output, denoted by "NC", which is not used in the problems for the Olympiad. For more details, please follow the publications of the authors, on the server, containing the problems and

their solutions from the previous issues of the Olympiad.

* E-mail: mishonov@gmail.com, mishonov@bgphysics.eu

† E-mail: manolest@yahoo.com

‡ E-mail: simonailieva24@gmail.com

§ E-mail: akofmg@gmail.com

¹ A. Einstein, “Über die Gültigkeitsgrenze des Satzes vom thermodynamischen Gleichgewicht und über die Möglichkeit einer neuen Bestimmung der Elementarquanta (On the boundaries of the applicability of the law of thermodynamic equilibrium and on the opportunity of a new definition of the elementary quanta),” *Ann. Phys.* **22**, 569-572 (1907),

http://myweb.rz.uni-augsburg.de/~eckern/adp/history/einstein-papers/1907_22_569-572.pdf.

² D. B. Pengra, R. Van Dyck and J. Stoltenberg, “Fundamental noise and fundamental constants”, University of Washington Modern Physics Laboratory – Condensed Matter (2012), http://courses.washington.edu/phys431/noise/new_noise_old_box.pdf.

³ “Johnson Noise and Shot Noise: The Determination of the Boltzmann Constant, Absolute Zero Temperature and the Charge of the Electron”, MIT Department of Physics (2013),

“Johnson Noise and Shot Noise”, MIT Junior Lab Regular Experiment, (2013), <http://web.mit.edu/8.13/www/43.shtml>, <http://web.mit.edu/8.13/www/JLExperiments/JLExp43.pdf>, Used equipment: Low-noise voltage preamplifier, SR560 – DC to 1 MHz, <http://thinksrs.com/downloads/PDFs/Catalog/SR560c.pdf>, $e_N = 4 \text{ nV}/\sqrt{\text{Hz}}$, \$2595; Krohn-Hite 3BS8TB-1k/50kg, 8-pole Butterworth, cutoff accuracy 2%, <http://www.krohn-hite.com/htm/filters/PDF/ModulesData.pdf>.

⁴ C. Habicht and P. Habicht, “Elektrostatistischer Potentialmultiplikator nach A. Einstein,” *Phys. Ztschr.* **11**, 532-555 (1910); Amplification 360000 (111 dB); $\delta U = 300 \mu\text{V}$.