

Location of incenters and Fermat points in variable triangles

Anthony Várilly

Harvard University, Cambridge, MA 02138

Abstract

The Guinand circle of a nonequilateral triangle has diameter GH , joining the centroid to the orthocenter. We show that the incenters of triangles with a given Euler line simply cover the interior of the Guinand circle, and that their Fermat points also lie within this circle.

1 Introduction

Triangle geometry is often believed to be exhausted, although both Davis [3] and Oldknow [6] have expressed the hope that the use of computers may revive it. New results do appear occasionally, such as Eppstein's recent construction of two new triangle centers [4]. This article establishes some relations among special points of the triangle, which were indeed found by using computer software.

An interesting result, discovered less than twenty years ago, is Guinand's theorem [5], which states that the incenter I of any (nonequilateral) triangle lies inside, and the excenters lie outside, the circle whose diameter joins the centroid to the orthocenter. Guinand constructed a family of locus curves for I which cover the interior of this circle twice, showing that there are no other restrictions on the positions of the incenter with respect to the Euler line. Here we show that the Fermat point lies inside the same circle. We also construct a simpler family of curves for I , covering the interior once only except for the nine-point center N , which corresponds to the limiting case of an equilateral triangle.

2 The locus of the incenter

In the standard notation [1], the basic centers of a triangle ABC are the centroid G , the orthocenter H , the incenter I , the nine-point center N , and the circumcenter O . The radii of the circumcircle and the incircle are R and r , respectively. If equilateral triangles BPC , AQC and ARB are constructed externally on the sides of the triangle ABC , then the lines AP , BQ and CR are concurrent and meet at the Fermat point T . This point minimizes the distance $TA + TB + TC$ for triangles whose largest angle is $\leq 120^\circ$ [2].

The points O , G , N , and H lie (in that order) on the Euler line, and $OG : GN : NH = 2 : 1 : 3$. They are distinct unless ABC is equilateral. We shall call the circle whose diameter is GH the *Guinand circle*.

Guinand noticed that Euler's relation $OI^2 = R(R-2r)$ [1, p. 85] and Feuerbach's theorem $IN = \frac{1}{2}R - r$ [1, p. 105] together imply that

$$OI^2 - 4IN^2 = R(R-2r) - (R-2r)^2 = 2r(R-2r) = \frac{2r}{R}OI^2 > 0.$$

Therefore, $OI > 2IN$. The locus of points P for which $OP = 2PN$ is a circle of Apollonius; since $OG = 2GN$ and $OH = 2HN$, this is the Guinand circle. The inequality $OI > 2IN$ shows that I lies in the interior of the circle [5].

Guinand also showed that the angle cosines $\cos A$, $\cos B$, $\cos C$ of the triangle satisfy the following cubic equation:

$$\rho^4(1-2x)^3 + 8\rho^2\sigma^2x(3-2x) - 16\sigma^4x - 4\sigma^2\kappa^2(1-x) = 0, \quad (1)$$

where $OI = \rho$, $IN = \sigma$ and $OH = \kappa$.

The relation $OI > 2IN$ can be observed on a computer with the software *Geometer's Sketchpad*[®], that allows tracking of relative positions of objects as *one* of them is moved around the screen. Let us fix the Euler line by using a Cartesian coordinate system with O at the origin and H at $(3,0)$. Consequently, $G = (1,0)$ and $N = (1.5,0)$. To construct a triangle with this Euler line, we first describe the circumcircle $\odot(O,1)$, centered at O with radius $R > 1$ —in order that G lie in the interior—and choose a point A on this circle. If AK is the median passing through A , we can determine K from the relation $AG : GK = 2 : 1$; then BC is the chord of the circumcircle that is bisected perpendicularly by the ray OK .

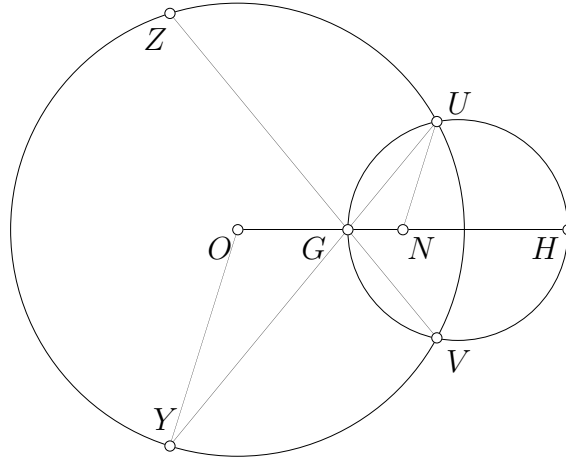


Figure 1: The forbidden arc ZY

This construction of ABC fails if K lies outside the circumcircle, which can happen only if $1 < R < 3$. In that case, there is an arc the circle $\odot(O,1)$ where the point A cannot exist. If U and V are the intersections of $\odot(O,1)$ with the Guinand circle, and if UY and VZ are the chords of $\odot(O,1)$ passing through G , then the triangles OYG and NUG are similar. Indeed, $YO = UO = 2UN$ and $OG = 2GN$, so $YG : GU = 2 : 1$; in the same way, $ZG : GV = 2 : 1$. The triangle vertex A cannot lie on the arc ZY of $\odot(O,1)$ opposite the Guinand circle (Figure 1).

From the formula [5]

$$OH^2 = R^2(1 - 8 \cos A \cos B \cos C), \quad (2)$$

the forbidden arc appears if and only if $\cos A \cos B \cos C < 0$, that is, the triangle ABC is obtuse-angled.

Once A is chosen and the triangle constructed, we can find I by drawing the angle bisectors of ABC and marking their intersection. The *Geometer's Sketchpad* will do this automatically, and we can also ask it to draw the locus which I traces as we move the point A around the circumcircle. The idea of parameterizing the locus curves with R , instead of an angle of the triangle (as Guinand did) was inspired by the drawing tools available in the *Geometer's Sketchpad*. This locus is the following quartic curve.

Theorem 1 *The incenter of ABC is on the curve*

$$(x^2 + y^2)^2 = R^2 [(2x - 3)^2 + 4y^2]. \quad (3)$$

Proof. From equation (2) we see that, once we fix R , the product $\cos A \cos B \cos C$ is fixed. Using Viète's formulas, this product is obtained from the constant term of (1):

$$\cos A \cos B \cos C = \frac{1}{8} \left(1 - \frac{4\sigma^2 \kappa^2}{\rho^4} \right),$$

so that

$$\rho^4(1 - 8 \cos A \cos B \cos C) = 4\sigma^2 OH^2. \quad (4)$$

Now, I is a point of intersection of the two circles

$$\rho^2 = x^2 + y^2 \quad \text{and} \quad \sigma^2 = (x - \frac{3}{2})^2 + y^2.$$

We get (3) by substituting these and (2) in (4), and dividing through by the common factor $1 - 8 \cos A \cos B \cos C$, which is positive since $O \neq H$ (the equilateral case is excluded). \square

Every point on a locus curve inside the Guinand circle is the incentre of a triangle. When $R > 3$, the locus is a lobe entirely inside the circle; if the point A travels around the circumcircle once, then I travels around the lobe three times, since A will pass through the three vertices of each triangle with circumradius R . When $1 < R < 3$, the interior portion of (3) is a kind of bell (Figure 2). Let A travel along the allowable arc from Y to Z , passing through V and U ; then I travels along the bell from U to V , back from V to U , and then from U to V again. While A moves from V to U , the orientation of the triangle ABC is reversed. When $R = 3$, the locus curve closes at H and one vertex B or C also coincides with H ; the triangle is right-angled. If A moves once around the circumcircle, starting and ending at H , I travels twice around the lobe.

Figure 2 is a *Mathematica* plot of the curves (3) with the Guinand circle.

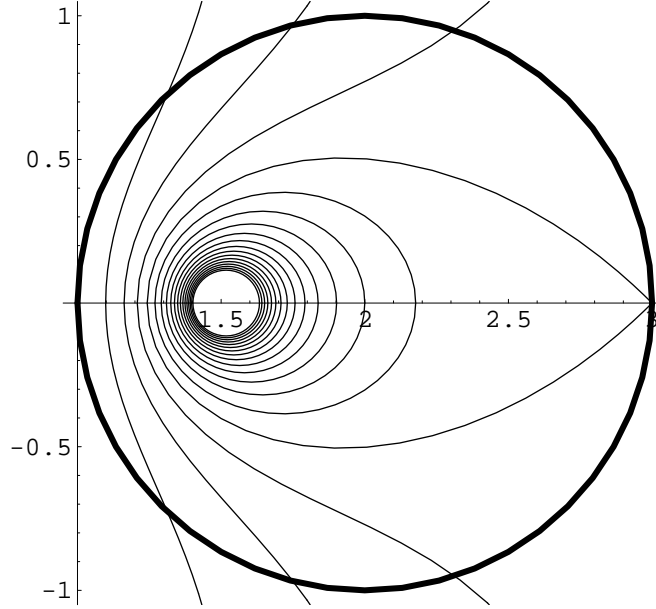


Figure 2: Locus curves for I with fixed R

Theorem 2 *The curves (3), for different values of R , do not cut each other inside the Guinand circle, and they fill the interior except for the point N .*

Proof. Let (a, b) be inside the Guinand circle, that is,

$$(a - 2)^2 + b^2 < 1. \quad (5)$$

If (a, b) also lies on one of the curves (3), then

$$R = \sqrt{\frac{(a^2 + b^2)^2}{(2a - 3)^2 + 4b^2}}.$$

There is only one positive value of R and thus *at most* one curve of the type (3) on which (a, b) can lie. Now we show (a, b) lies on *at least* one curve of type (3); to do that, we need to show that given (5), $R > 1$. We need only prove

$$(a^2 + b^2)^2 > (2a - 3)^2 + 4b^2. \quad (6)$$

Indeed, $(2a - 3)^2 + 4b^2 = 0$ only if $(a, b) = (\frac{3}{2}, 0)$; this point is N . It cannot lie on a locus curve (3), in fact it corresponds to the limiting case of an equilateral triangle as $R \rightarrow \infty$.

The inequality (5) can be restated as

$$a^2 + b^2 < 4a - 3, \quad (7)$$

and (6) as

$$(a^2 + b^2)^2 - 4a^2 + 3(4a - 3) - 4b^2 > 0. \quad (8)$$

From (7) it follows that

$$\begin{aligned} (a^2 + b^2)^2 - 4a^2 + 3(4a - 3) - 4b^2 &> (a^2 + b^2)^2 - 4a^2 + 3(a^2 + b^2) - 4b^2 \\ &= (a^2 + b^2)(a^2 + b^2 - 1). \end{aligned}$$

But $a^2 + b^2 > 1$ since (a, b) is inside the Guinand circle; therefore, (6) is true. \square

3 The whereabouts of the Fermat point

Using the same setup of a variable triangle with fixed Euler line and circumcircle, one can examine the loci of other triangle centers. Further experimentation with the *Geometer's Sketchpad* suggests that the Fermat point T also lies inside the Guinand circle in all cases.

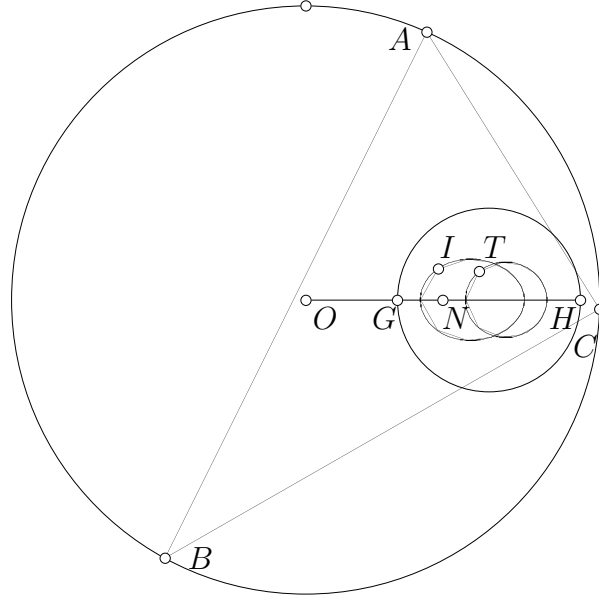


Figure 3: Locus of the Fermat point T

Theorem 3 *The Fermat point of any non-equilateral triangle lies inside the Guinand circle.*

Proof. Given a triangle ABC with the largest angle at A , we can take a coordinate system with BC as the x -axis and A on the y -axis. Then $A = (0, a)$, $B = (-b, 0)$, $C = (c, 0)$ where a , b and c are all positive. Let BPC and AQC be the equilateral triangles constructed externally over BC and AC respectively (Figure 4). Then $P = (\frac{1}{2}(c - b), -\frac{1}{2}\sqrt{3}(b + c))$ and $Q = (\frac{1}{2}(\sqrt{3}a + c), \frac{1}{2}(a + \sqrt{3}c))$.

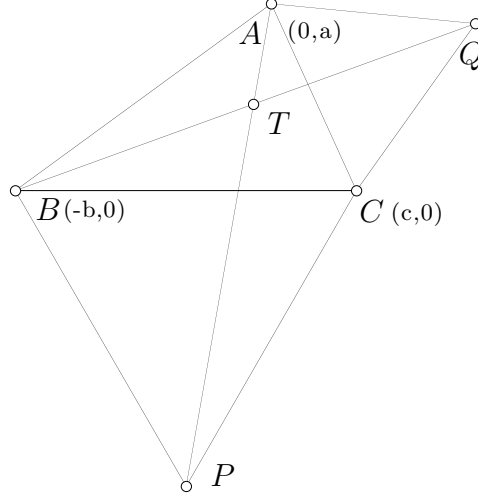


Figure 4: Finding the Fermat point

The coordinates of T can be found by writing down the equations for the lines AP and BQ and solving them simultaneously. After a little work, we get $T = \left(\frac{u}{d}, \frac{v}{d}\right)$, where

$$\begin{aligned} u &= (\sqrt{3}bc - \sqrt{3}a^2 - ac - ab)(b - c), \\ v &= (a^2 + \sqrt{3}ab + \sqrt{3}ac + 3bc)(b + c), \\ d &= 2\sqrt{3}(a^2 + b^2 + c^2) + 6ac + 6ab + 2\sqrt{3}bc. \end{aligned} \quad (9)$$

The perpendicular bisectors of BC and AC intersect at $O = (\frac{1}{2}(c - b), (a^2 - bc)/2a)$. The nine-point center N is the circumcenter of the triangle through the midpoints of the sides of ABC ; we can deduce that $N = (\frac{1}{4}(c - b), (a^2 + bc)/4a)$.

To show that T lies inside the Guinand circle, we must show that $OT > 2NT$, or

$$OT^2 > 4NT^2. \quad (10)$$

In coordinates, this inequality takes the equivalent form:

$$\left[\frac{u}{d} - \left(\frac{c - b}{2}\right)\right]^2 + \left[\frac{v}{d} - \left(\frac{a^2 - bc}{2a}\right)\right]^2 > 4 \left[\frac{u}{d} - \left(\frac{c - b}{4}\right)\right]^2 + 4 \left[\frac{v}{d} - \left(\frac{a^2 + bc}{4a}\right)\right]^2,$$

or, multiplying by $(2ad)^2$,

$$[2au - ad(c - b)]^2 + [2av - d(a^2 - bc)]^2 > [4au - ad(c - b)]^2 + [4av - d(a^2 + bc)]^2,$$

which, after expanding and canceling terms, simplifies to

$$4a^2du(c - b) + 4adv[(2a^2 + 2bc) - (a^2 - bc)] - 4a^2d^2bc > 12a^2u^2 + 12a^2v^2,$$

or better,

$$adu(c - b) + dv(a^2 + 3bc) - abcd^2 - 3au^2 - 3av^2 > 0. \quad (11)$$

One way to verify this inequality is to feed the equations (9) into *Mathematica*, which expands and factors the left hand side of (11) as

$$2(b+c)(\sqrt{3}a^2 + \sqrt{3}b^2 + \sqrt{3}c^2 + \sqrt{3}bc + 3ab + 3ac)(a^4 + a^2b^2 - 8a^2bc + a^2c^2 + 9b^2c^2).$$

The first three factors are positive. The fourth factor can be expressed as the sum of two squares,

$$(a^2 - 3bc)^2 + a^2(b - c)^2,$$

and could be zero only if $a^2 = 3bc$ and $b = c$, so that $a = \sqrt{3}b$. This gives an equilateral triangle with side $2b$. Since the equilateral case is excluded, all the factors are positive, which shows that (11) is true, and therefore (10) holds. \square

Acknowledgments

I am grateful to Les Bryant and Mark Villarino for helpful discussions, to Joseph C. Várilly for advice and T_EXnical help, and to Julio González Cabillón for good suggestions on the use of computer software.

References

- [1] N. A. Court, *College Geometry*, Barnes & Noble, New York, 1952.
- [2] H. S. M. Coxeter, *Geometry Revisited*, Math. Assoc. of America, Washington, DC, 1967.
- [3] P. J. Davis, “The rise, fall, and possible transfiguration of triangle geometry: A mini-history,” *Amer. Math. Monthly* 102 (1995), 204–214.
- [4] D. Eppstein, “Tangent spheres and triangle centers”, math.MG/9909152, Irvine, CA, 1999.
- [5] A. P. Guinand, “Euler lines, tritangent centers and their triangles,” *Amer. Math. Monthly* 91 (1984), 290–300.
- [6] A. Oldknow, “Computer aided research into triangle geometry,” *Mathl. Gazette* 79 (1995), 263–274.