

DISTANCE BETWEEN TOROIDAL SURGERIES ON HYPERBOLIC KNOTS IN THE 3-SPHERE

MASAKAZU TERAGAITO

ABSTRACT. For a hyperbolic knot in the 3-sphere, at most finitely many Dehn surgeries yield non-hyperbolic 3-manifolds. As a typical case of such an exceptional surgery, a toroidal surgery is one that yields a closed 3-manifold containing an incompressible torus. The slope corresponding to a toroidal surgery, called a toroidal slope, is known to be integral or half-integral. We show that the distance between two integral toroidal slopes for a hyperbolic knot, except the figure-eight knot, is at most four.

1. INTRODUCTION

Let K be a knot in the 3-sphere S^3 and let $E(K) = S^3 - \text{Int } N(K)$ be its exterior. A *slope* is the isotopy class of an essential simple closed curve on $\partial E(K)$. Then the set of slopes is parameterized by $\mathbf{Q} \cup \{1/0\}$ so that $1/0$ is the meridian slope as in the usual way (see [16]). For two slopes α and β , the distance $\Delta(\alpha, \beta)$ between α and β is defined to be their minimal geometric intersection number. A slope m/n is called *integral* if $|n| = 1$, and *half-integral* if $|n| = 2$. In other words, an integral slope runs once along the knot, and a half-integral slope runs twice along the knot.

We denote by $K(\alpha)$ the closed 3-manifold obtained by α -Dehn surgery on K , that is, attaching a solid torus V to $E(K)$ along $\partial E(K)$ in such a way that the slope α bounds a disk in V . A surgery (or slope) is said to be *toroidal* if the resulting manifold contains an incompressible torus. Thurston showed that if K is a hyperbolic knot, then $K(\alpha)$ is hyperbolic for all but finitely many slopes α [19]. If $K(\alpha)$ is not hyperbolic, then it is either reducible, or an atoroidal Seifert fibered manifold, or toroidal, or a counterexample to the Geometrization Conjecture [19]. We focus on the third case. It is known that if α is a toroidal slope for a hyperbolic knot, then α is integral or half-integral [8, 9]. There are many examples of integral toroidal surgery, and Eudave-Muñoz [4] constructed an infinite family of hyperbolic knots $k(\ell, m, n, p)$ admitting half-integral toroidal surgeries. Recently, Gordon and Luecke [10] proved that the Eudave-Muñoz knots $k(\ell, m, n, p)$ are the only hyperbolic knots with half-integral toroidal surgeries.

In this paper, we consider the distance between toroidal slopes on a hyperbolic knot in S^3 . The figure-eight knot admits exactly three toroidal slopes $0, 4$ and -4 [19]. Note that $\Delta(-4, 4) = 8$. If a hyperbolic knot is not the figure-eight knot, then the distance between two toroidal slopes is at most 5 by Gordon [7]. (There are exactly four hyperbolic 3-manifolds which admit two toroidal slopes with distance at least 6. They all are obtained from the Whitehead link by some

2000 *Mathematics Subject Classification.* Primary 57M25.

Key words and phrases. Dehn surgery, toroidal surgery, knot.

Partially supported by Japan Society for the Promotion of Science, Grant-in-Aid for Scientific Research (C), 14540082.

Dehn surgery on one component. Among those, only the figure-eight knot exterior can be embedded in S^3 by homological reason.) This upper bound 5 is sharp. For example, the Eudave-Muñoz knot $k(2, -1, n, 0)$ ($n \neq 1$) admits two toroidal slopes $25n - \frac{37}{2}$ and $25n - 16$ as shown in [5], where $\Delta(25n - \frac{37}{2}, 25n - 16) = 5$. (When $n = 1$, $k(2, -1, 1, 0)$ is the trefoil.) Notice that one slope is half-integral, and that $k(2, -1, 0, 0)$ is the $(2, -3, -7)$ -pretzel knot. The purpose of this paper is to show that we can reduce the upper bound when both of toroidal slopes are integral.

Theorem 1.1. *Let K be a hyperbolic knot in S^3 , which is not the figure-eight knot. If α and β are two integral toroidal slopes for K , then $\Delta(\alpha, \beta) \leq 4$.*

This is sharp. For example, the twist knot $C[2n, 2]$ in Conway's notation with $n \geq 1$ admits two integral toroidal slopes 0 and 4 [2]. Although it may be too optimistic, there is a possibility that only twist knots admit two integral toroidal slopes with distance 4, except the $(-2, 3, 7)$ -pretzel knot. Note that $(-2, 3, 7)$ -pretzel knot is the only one that admits two integral toroidal slopes with distance 4 among the Eudave-Muñoz knots.

Corollary 1.2. *If a hyperbolic knot K in S^3 admits two toroidal slopes α and β with $\Delta(\alpha, \beta) = 5$, then K is the Eudave-Muñoz knot $k(2, -1, n, 0)$ for some integer $n \neq 1$, and $\{\alpha, \beta\} = \{25n - \frac{37}{2}, 25n - 16\}$.*

Proof. By Theorem 1.1, one of α, β is half-integral. Then K is an Eudave-Muñoz knot by [10]. Among Eudave-Muñoz knots, only $k(2, -1, n, 0)$ ($n \neq 1$) admits two toroidal slopes with distance 5 by [4], which are $25n - \frac{37}{2}$ and $25n - 16$ by [5]. \square

As stated in [4], if $n_1 \neq n_2$ then $k(2, -1, n_1, 0)$ and $k(2, -1, n_2, 0)$ are distinct. Since $\Delta(25n_1 - 16, 25n_2 - 16) = 25|n_1 - n_2| \geq 25$, the fact follows from [7]. Also it follows from [13].

It is conjectured that a hyperbolic knot in S^3 admits at most three toroidal surgeries [4] (see also [14, Problem 1.77 A(5)]). This holds for Eudave-Muñoz knots [4]. By Gordon [7], a hyperbolic knot admits at most 6 toroidal surgeries. Our main theorem also gives an improvement of this upper bound.

Corollary 1.3. *A hyperbolic knot in S^3 admits at most 5 toroidal surgeries.*

Proof. Eudave-Muñoz knots and the figure-eight knot admit at most three such surgeries. For the other hyperbolic knots, any two toroidal slopes are integral and their distance is at most 4 by Theorem 1.1. The result follows immediately from these. \square

In Section 2, we prepare the basic tool, a pair of labelled graphs, to show Theorem 1.1. Also, some fundamental properties are shown there. Section 3 is devoted to examine a reduced graph supported in a disk or an annulus. The results will be used in Section 4. Sections 5 and 6 will treat two special cases, and the proof of Theorem 1.1 will be completed. In the last section, we propose some questions concerning toroidal slopes of hyperbolic knots.

2. PRELIMINARIES

Throughout this paper, we fix a hyperbolic knot K in S^3 , which is not the figure-eight knot. Let α and β be two integral toroidal slopes for K . By [7], $\Delta(\alpha, \beta) \leq 5$. We assume $\Delta(\alpha, \beta) = 5$ to prove Theorem 1.1. Note that $K(\alpha)$

and $K(\beta)$ are irreducible under this assumption. (For, if $K(\alpha)$ is reducible, then $\Delta(\alpha, \beta) \leq 3$ by [15, 20]. Similarly for $K(\beta)$.) Let \widehat{S} be an incompressible torus in $K(\alpha)$. We may assume that \widehat{S} meets the attached solid torus V_α in s meridian disks u_1, u_2, \dots, u_s , numbered successively along V_α , and that s is minimal over all choices of \widehat{S} . Let $S = \widehat{S} \cap E(K)$. Then S is a punctured torus properly embedded in $E(K)$ with s boundary components $\partial_i S = \partial u_i$, each of which has slope α . By the minimality of s , S is incompressible, and then boundary-incompressible in $E(K)$. Similarly, we choose an incompressible torus \widehat{T} in $K(\beta)$ which intersects the attached solid torus V_β in t meridian disks v_1, v_2, \dots, v_t , numbered successively along V_β , where t is minimal as above. Then we have another incompressible and boundary-incompressible punctured torus $T = \widehat{T} \cap E(K)$, which has t boundary components $\partial_j T = \partial v_j$.

Proposition 2.1. *The genus of K is not one.*

Proof. Assume that K has genus one. By [18], if r is an integral toroidal slope for K , then $|r| = 0, 1, 2$ or 4 . Furthermore, if $|r| = 4$ then K is a twist knot. Since $\Delta(\alpha, \beta) = 5$, either slope is -4 or 4 . Thus K is a twist knot. But a twist knot does not admit two toroidal slopes with distance 5 [2]. \square

Lemma 2.2. *\widehat{S} and \widehat{T} are separating.*

Proof. Assume \widehat{S} is non-separating. Then $\alpha = 0$ by homological reason. Thus $K(0)$ contains a non-separating torus \widehat{S} . But this implies that K has genus one [6, Corollary 8.3]. Similarly for \widehat{T} . \square

Thus s and t are non-zero and even.

We may assume that S intersects T transversely. Then $S \cap T$ consists of arcs and circles. Since both surfaces are incompressible, we can assume that no circle component of $S \cap T$ bounds a disk in S or T . Furthermore, it can be assumed that $\partial_i S$ meets $\partial_j T$ in 5 points for any pair of i and j .

Lemma 2.3. *Let a_1, a_2, a_3, a_4, a_5 be the points of $\partial_i S \cap \partial_j T$, numbered so that they appear successively on $\partial_i S$. Then a_1, a_2, a_3, a_4, a_5 also appear successively on $\partial_j T$. In particular, two points of $\partial_i S \cap \partial_j T$ are successive on $\partial_i S$ if and only if they are successive in $\partial_j T$.*

Proof. This immediately follows from that both slopes α and β are integral. \square

In the literature, for example [12], this fact is stated that the jumping number is one.

Let G_S be the graph on \widehat{S} consisting of the u_i as (fat) vertices, and the arc components of $S \cap T$ as edges. Define G_T on \widehat{T} similarly. Throughout the paper, two graphs on a surface are considered to be equivalent if there is a homeomorphism of the surface carrying one graph to the other. Note that G_S and G_T have no trivial loops.

For an edge e of G_S incident to u_i , the endpoint of e is labelled j if it is in $\partial u_i \cap \partial v_j = \partial_i S \cap \partial_j T$. Similarly, label the endpoints of each edge of G_T . Thus the labels $1, 2, \dots, t$ ($1, 2, \dots, s$, resp.) appear in order around each vertex of G_S (G_T , resp.) repeated 5 times. Each vertex u_i of G_S has degree $5t$, and each v_j of G_T has degree $5s$.

Let $G = G_S$ or G_T . Two vertices of G are said to be *parallel* if their numbers have the same parity, otherwise they are *antiparallel*. An edge of G is a *positive* edge if it connects parallel vertices. Otherwise it is a *negative* edge. Possibly, a positive edge is a loop. An endpoint of a positive (negative, resp.) edge around a vertex is called a *positive* (*negative*, resp.) *edge endpoint*.

Lemma 2.4 (The parity rule). *An edge e is positive in a graph if and only if it is negative in the other graph.*

Proof. This can be found in [3]. □

Lemma 2.5. *There is no pair of edges which are parallel in both graphs.*

Proof. This is [7, Lemma 2.1]. □

If an edge e of G_S is incident to u_i with label j , then it is called a j -edge at u_i . Then e is also an i -edge at v_j in G_T . If e has labels j_1, j_2 at its endpoints, then e is called a $\{j_1, j_2\}$ -edge, or $j_1 j_2$ -edge.

A cycle in G consisting of positive edges is a *Scharlemann cycle* if it bounds a disk face of G and all edges in the cycle are $\{i, i+1\}$ -edges for some label i . The number of edges in a Scharlemann cycle is called the *length* of the Scharlemann cycle, and the set $\{i, i+1\}$ is called its *label pair*. A Scharlemann cycle of length two is called an *S-cycle* in short.

Let e_1, e_2, e_3, e_4 be the four parallel positive edges in G numbered in order. If G has at least four labels, and the middle two edges e_2 and e_3 form an *S-cycle*, then the cycle defined by e_1 and e_4 is called an *extended S-cycle*. (There is a notion of an extended Scharlemann cycle of arbitrary length, but this is enough for our purpose.)

Lemma 2.6. *Let ρ be a Scharlemann cycle in G_S . Then the edges of ρ cannot lie in a disk in \hat{T} . This also holds for Scharlemann cycles in G_T .*

Proof. Without loss of generality, assume that ρ has label pair $\{1, 2\}$. Let f be the face of G_S bounded by ρ , and let V_{12} be the part of the attached solid torus V_β between two meridian disks v_1 and v_2 . (When $t = 2$, choose one such that ∂f runs on $\partial V_{12} - v_1 \cup v_2$.) Assume that the edges of ρ lie in a disk D in \hat{T} . Then $N(D \cup V_{12} \cup f)$ is a lens space minus an open 3-ball. Since $K(\beta)$ is irreducible, $K(\beta)$ is a lens space. But this contradicts that $K(\beta)$ is toroidal. □

For the rest of this section, let $G = G_S$ or G_T . Assume that G has q labels.

Lemma 2.7. *Let $q \geq 4$.*

- (1) *G cannot contain an extended S-cycle.*
- (2) *If $q = 4$, then G cannot contain two S-cycles with disjoint label pairs.*
- (3) *G cannot contain three S-cycles with mutually disjoint label pairs.*
- (4) *If there are two S-cycles with disjoint label pairs $\{i, i+1\}$ and $\{j, j+1\}$, then i and j have the same parity.*

Proof. (1) is [1, Lemma 2.10]. (2) For convenience, we assume $G = G_S$. We can assume that ρ_1 and ρ_2 are S-cycles with label pairs $\{1, 2\}$ and $\{3, 4\}$, respectively. Let f_i be the face of G_S bounded by ρ_i , $i = 1, 2$. Denote by V_{12} and V_{34} the parts of the attached solid torus V_β lying between two meridian disks v_1 and v_2 , and v_3 and v_4 , respectively. Then shrinking V_{12} radially to its core in $V_{12} \cup f_1$

gives a Möbius band B_1 such that ∂B_1 is the loop on \widehat{T} formed by the edges of ρ_1 . Similarly, $V_{34} \cup f_2$ gives another Möbius band B_2 whose boundary is disjoint from ∂B_1 . Let A be an annulus between ∂B_1 and ∂B_2 on \widehat{T} . Then $B_1 \cup A \cup B_2$ is a Klein bottle \widehat{F} in $K(\beta)$, which meets V_β in two meridian disks (after a perturbation). Then $F = \widehat{F} \cap E(K)$ gives a twice-punctured Klein bottle in $E(K)$. By attaching a suitable annulus on $\partial E(K)$ to F along their boundaries, we have a closed non-orientable surface in S^3 , a contradiction. (3) and (4) are [20, Lemma 1.10] and [20, Lemma 1.7], respectively. \square

Let e_1, e_2, \dots, e_q be q mutually parallel negative edges in G numbered successively, each connecting vertex x to y . Suppose that e_i has label i at x for $1 \leq i \leq q$. Then this family defines a permutation σ of the set $\{1, 2, \dots, q\}$ such that e_i has label $\sigma(i)$ at y . In fact, $\sigma(i) \equiv i + r \pmod{q}$ for some even r . We call σ the *permutation associated to the family*. It is well-defined up to inversion. Note that σ has at least two orbits by the parity rule, and all orbits of σ have the same length.

Lemma 2.8. *Let $q \geq 4$.*

- (1) *Any family of parallel positive edges in G contains at most $q/2 + 1$ edges. Moreover, if the family contains $q/2 + 1$ edges, then two adjacent edges on one end form an S -cycle.*
- (2) *Any family of parallel negative edges in G contains at most q edges.*

Proof. For convenience, let $G = G_S$.

(1) Such a family contains at most $t/2 + 2$ edges [20, Lemma 1.4]. Furthermore, if it contains $t/2 + 2$ edges, then the labels can be assumed as in Figure 1(1). Then there are two S -cycles with disjoint label pairs $\{1, 2\}$ and $\{t/2 + 1, t/2 + 2\}$. By the same construction as in the proof of Lemma 2.7(2), we have two Möbius bands B_1 and B_2 and an annulus A on \widehat{T} as before. In \widehat{T} , two vertices v_i and v_{t-i+3} are connected by an edge in the family for $i = 3, 4, \dots, t/2$. Hence $\text{int } A$ contains an even number of vertices. Then $B_1 \cup A \cup B_2$ is a Klein bottle which meets V_β in an even number of meridian disks. This leads to a contradiction as before.

If the family contains $t/2 + 1$ edges, then it contains an S -cycle [3, Lemma 2.6.6]. Since there is no extended S -cycle by Lemma 2.7(1), the last two edges form an S -cycle as shown in Figure 1(2), up to relabeling.

(2) Let $\{e_1, e_2, \dots, e_t, e'_1\}$ be a family of $t + 1$ parallel negative edges, connecting vertex u_j to u_k . We can assume that e_i has label i at u_j for $1 \leq i \leq t$ and e'_1 has label 1 at u_j . Let σ be the permutation associated to the family $\{e_1, e_2, \dots, e_t\}$. Thus e_i has label $\sigma(i)$ at u_k . For an orbit θ of σ , let C_θ be the cycle in G_T consisting of e_i for $i \in \theta$. Then C_θ does not bound a disk on \widehat{T} [7, Lemma 2.3]. Since i and $\sigma(i)$ have the same parity by the parity rule, σ has at least two orbits. Thus all cycles corresponding to the orbits of σ are essential and mutually parallel on \widehat{T} . Let C_1 be the cycle corresponding to the orbit containing 1.

Now, consider e'_1 . Then e'_1 connects v_1 and $v_{\sigma(1)}$ in G_T . By Lemma 2.5, it is not parallel to e_1 in G_T . Because of the existence of another cycle, the new cycle obtained from C_1 by exchanging e_1 by e'_1 bounds a disk in \widehat{T} . But this is impossible by [7, Lemma 2.3] again. \square

Lemma 2.9. *If $q = 4$, then there are no consecutive 4 families of $q/2 + 1$ parallel positive edges at any vertex of G .*

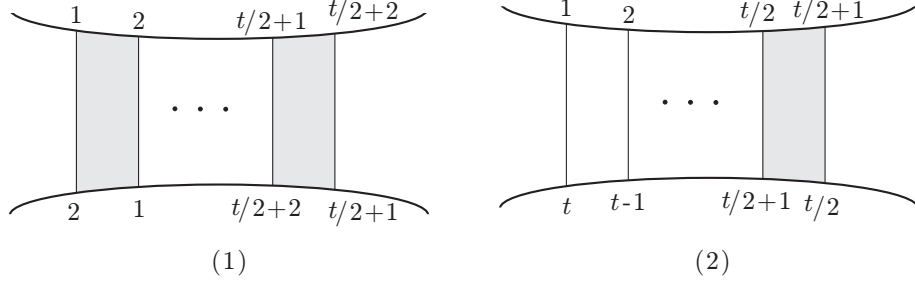


FIGURE 1.

Proof. If there are such 4 families, then there are two S -cycles with disjoint label pairs among those, which is impossible by Lemma 2.7(2). \square

3. REDUCED GRAPHS ON TORI

Let $G = G_S$ or G_T , and let F be the surface where G lies. The *reduced graph* \overline{G} of G is the graph obtained from G by amalgamating each family of mutually parallel edges into a single edge. Let G^+ be the subgraph of G consisting of all vertices and all positive edges of G . Then \overline{G}^+ is also defined similarly. In this section, we examine the reduced graphs \overline{G} and \overline{G}^+ . The results here will be used in the next section.

Let Γ be a component of \overline{G}^+ . If there is a disk D in F such that $\text{int } D$ contains Γ , then we say that Γ has a *disk support*. Also, if there is an annulus A in F such that $\text{int } A$ contains Γ and Γ does not have a disk support, then we say that Γ has an *annulus support*. If Γ has neither a disk nor an annulus support, then we say that Γ has a *torus support*.

Now, suppose that Γ has a support E , where E is a disk or an annulus. A vertex x of Γ is called an *outer vertex* if there is an arc ξ connecting x to ∂E whose interior is disjoint from Γ . Define an *outer edge* similarly. Then $\partial\Gamma$ denotes the subgraph of Γ consisting of all outer vertices and all outer edges of Γ . A vertex x of Γ is called a *cut vertex* if $\Gamma - x$ has more components than Γ .

Suppose that Γ has an annulus support A . A vertex x of Γ is a *pinched vertex* if there is a spanning arc of A which meets Γ in only x . An edge e of Γ is a *pinched edge* if there is a spanning arc of A which meets Γ in only one point on e . Clearly, both endpoints of a pinched edge are pinched vertices.

We say that Γ is an *extremal component* of \overline{G}^+ if Γ has a support which is disjoint from the other components of \overline{G}^+ . Remark that \overline{G}^+ has at least two components, because G has vertices of distinct parities.

Lemma 3.1. \overline{G}^+ has an extremal component with a disk support or an annulus support.

Proof. There are only three possibilities for the support of a component; a disk, an annulus, or a torus. If there is a component with a torus support, then any other component has an disk support. The conclusion immediately follows from this. \square

Let x be a vertex of G . Then x is called an *interior vertex* if there is no negative edge incident to x in G . Since \overline{G} and \overline{G}^+ have the same vertex set as G , we may call a vertex of \overline{G} or \overline{G}^+ an interior vertex when it is an interior vertex of G . In particular, if x is in an extremal component of \overline{G}^+ with a disk or an annulus support, and it is not an outer vertex, then x is an interior vertex.

A vertex x of Γ is said to be *good* if all positive edge endpoints around x are successive in G . Thus an interior vertex is good. When x is a vertex of an extremal component Γ of \overline{G}^+ with a disk or an annulus support, x is good if

- (i) x is not a cut vertex of Γ if Γ has a disk support; or
- (ii) x is neither a cut vertex nor a pinched vertex of Γ if Γ has an annulus support.

Lemma 3.2. *Let Γ be an extremal component of \overline{G}^+ . Assume that Γ has a disk support, and that Γ is not a single vertex.*

- (1) *If each interior vertex of Γ has degree at least 6, then Γ has two good vertices of degree at most 3.*
- (2) *If Γ has no interior vertex, then Γ has two good vertices of degree at most 2.*

Proof. These are [20, Lemma 2.3] and [20, Lemma 3.2]. \square

Lemma 3.3. *Let Γ be an extremal component of \overline{G}^+ . Assume that Γ has an annulus support, and that Γ is not a cycle. If each interior vertex of Γ has degree at least 6, then Γ has a good vertex of degree at most 4.*

Proof. First, consider the case that Γ has no cut vertices.

Assume that Γ has no pinched vertex. If any vertex on $\partial\Gamma$ has degree at least 5, then take a double of Γ along two boundary cycles. Then we have a graph in a torus, whose vertices have degree at least 6, and at least two vertices, coming from the vertices on $\partial\Gamma$, have degree at least 8. Also, the graph has no trivial loop and parallel edges. This is impossible by an Euler characteristic argument. Therefore, some vertex on $\partial\Gamma$ has degree at most 4. Clearly, it is a good vertex.

Assume that Γ has a pinched vertex. Contract each pinched edge into a point if necessary. Let Γ' be the resulting graph. By our assumption that Λ is not a cycle, neither is Γ' . Moreover, any pinched vertex of Γ' has degree at least 4.

If there is only one pinched vertex x , then split Γ' at x to obtain Γ'' having a disk support. Then x splits into x_1 and x_2 . Let V, E, F be the number of vertices, edges and faces of Γ'' as a graph in a disk. Let X be the number of vertices on the boundary of Γ'' except x_1 and x_2 . Assume that those X vertices on $\partial\Gamma''$ have degree at least 5 for a contradiction. Then $1 = V - E + F$, $5X + \deg(x_1) + \deg(x_2) + 6(V - X - 2) \leq 2E$, and $3F + (X + 2) \leq 2E$. (We use $\deg(-)$ to denote the degree of a vertex.) Thus we have $\deg(x_1) + \deg(x_2) \leq 2$. Since $\deg(x_1), \deg(x_2) \geq 2$, this is a contradiction. Hence we see that Γ has a vertex of degree at most 4 on $\partial\Gamma$, which is not a pinched vertex.

If there are more than one pinched vertices in Γ' , then consider two consecutive pinched vertices y and z . Let Λ be a subgraph of Γ' between y and z , which contains no other pinched vertex. Then the same argument as above gives a desired vertex on $\partial\Gamma$.

Next, assume that Γ has a cut vertex x . Let $\Gamma_1, \Gamma_2, \dots, \Gamma_k$ be the components after splitting along x . If some Γ_i has a disk support, then Γ_i has two good vertices

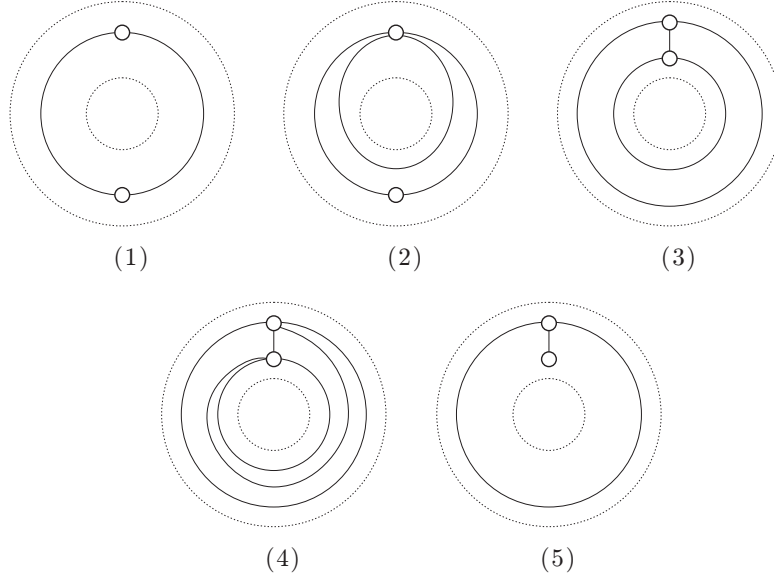


FIGURE 2.

of degree at most 3 by Lemma 3.2, and one of which is not x . Thus we have a desired vertex. Otherwise, each Γ_i has an annulus support. Then Γ has no pinched vertices since $k \geq 2$. Taking a double of Γ along two boundary cycles gives a contradiction as before, unless some vertex on $\partial\Gamma$ has degree at most 4. \square

Of course, the conclusion of this lemma is true when Γ has no interior vertex.

Proposition 3.4. *If each interior vertex of \overline{G}^+ has degree at least 6, then \overline{G}^+ has a vertex of degree at most 4.*

Proof. By Lemma 3.1, \overline{G}^+ has an extremal component Γ with a disk or an annulus support. If Γ is a single vertex or a cycle, then the result is obvious. Otherwise, it follows from Lemmas 3.2 and 3.3. \square

Lemma 3.5. *Let Γ be a component of \overline{G}^+ with an annulus support. If Γ has just two vertices and no interior vertex, then there are five possibilities for Γ as shown in Figure 2.*

Proof. If both vertices are incident to loops, then we have (3) or (4). If only one vertex is incident to a loop, then Γ is (2) or (5). Finally, if there is no loop, then Γ is (1). \square

Lemma 3.6. *Let Γ be a component of \overline{G}^+ with an annulus support. Assume that Γ is not a cycle. If Γ has just three vertices and no interior vertex, then Γ has a good vertex of degree at most 3.*

Proof. If Γ has a block with a disk support, then Lemma 3.2 can be applied to the block and we have a good vertex of degree at most two. Otherwise, $\partial\Gamma$ consists of two disjoint cycles, or Γ has a pinched vertex. Also, Γ has no vertex of degree one.

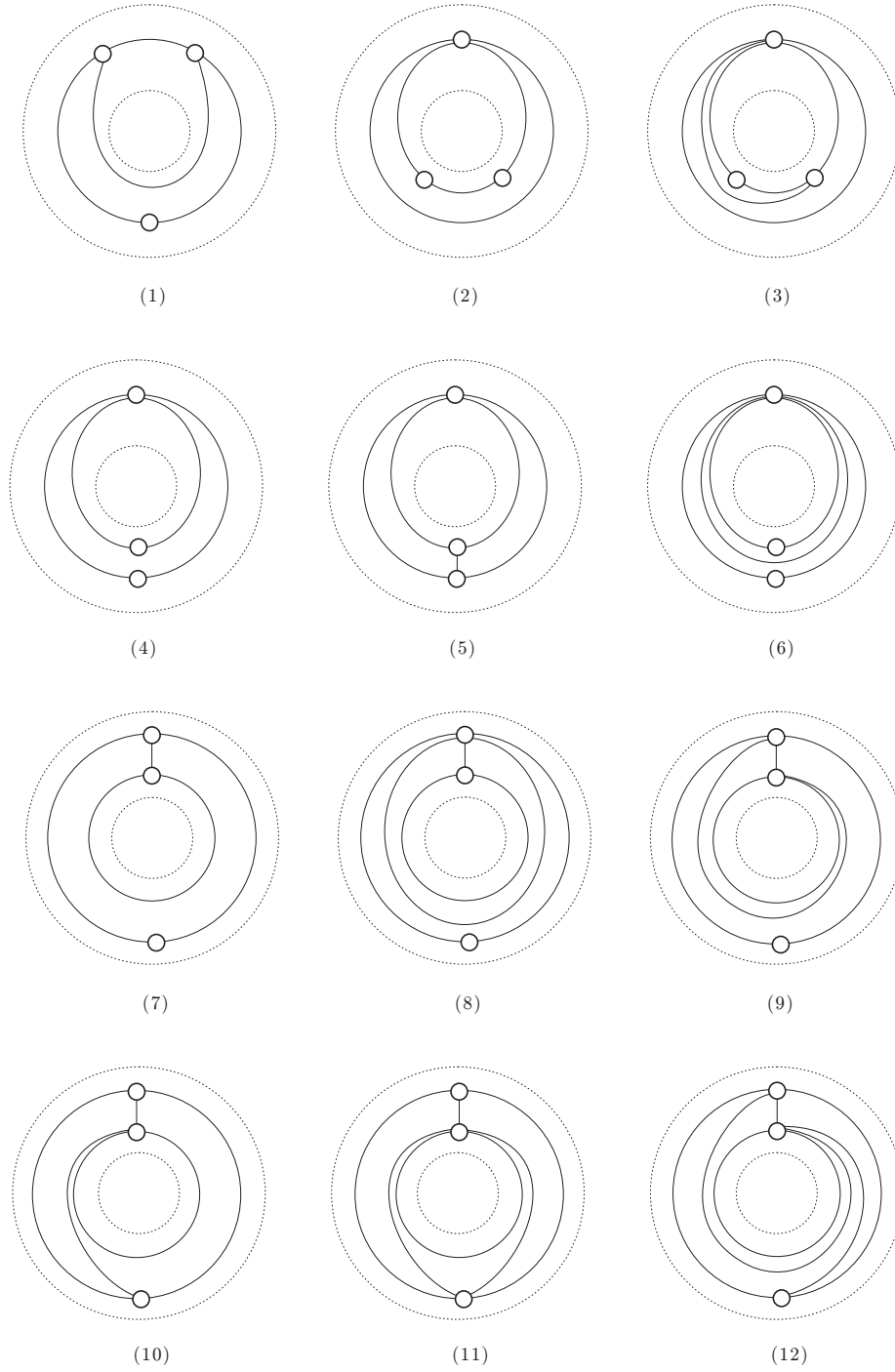


FIGURE 3.

If Γ has two pinched vertices, there is a pinched edge. Then Γ is either a cycle or the graph as shown in Figure 3(1). Since Γ is not a cycle, the former is impossible. Thus there is a good vertex of degree two.

If Γ has only one pinched vertex, then we see that there are five possibilities for Γ as shown in Figure 3(2)-(6). Hence Γ has a good vertex of degree at most 3.

Finally, assume that $\partial\Gamma$ consists of two cycles. Since there is no interior vertex, one cycle contains two vertices, and the other contains one vertex. By an Euler calculation, Γ has at most 6 edges. Then it is easy to see that there are six possibilities for Γ as shown in Figure 3(7)-(12). Thus Γ has a good vertex of degree at most 3. \square

4. THE GENERIC CASE

In this section, we assume that $s \geq 4$ and $t \geq 4$.

Lemma 4.1. *Any vertex of the reduced graph \overline{G}_T has degree at least 5.*

Proof. Let v be a vertex of \overline{G}_T . If $\deg(v) \leq 4$ in \overline{G}_T , then $\deg(v) \leq 4s < 5s$ in G_T by Lemma 2.8. \square

4.1. Some vertex of \overline{G}_T has degree 5. In this subsection, we consider the case where some vertex of \overline{G}_T has degree 5, and show that the case is impossible. Let v_i be such a vertex.

Lemma 4.2. *In G_T , v_i is incident to exactly five families of parallel negative edges, each of which contains s edges.*

Proof. This immediately follows from Lemma 2.8. \square

Thus all i -edges in G_S are positive by the parity rule, and there are five positive i -edges at each vertex of G_S . Recall that \overline{G}_S^+ is the subgraph of \overline{G}_S consisting all vertices and all positive edges.

Lemma 4.3. *Any vertex of \overline{G}_S^+ has degree at least 5.*

Proof. This is because two positive i -edges at any vertex cannot be parallel by Lemma 2.8. \square

From Proposition 3.4 and Lemma 4.3, \overline{G}_S^+ has an interior vertex of degree at most 5. But the next lemma shows that this is impossible.

Lemma 4.4. *\overline{G}_S^+ has no interior vertex of degree at most 5.*

Proof. Let u be an interior vertex of \overline{G}_S^+ of degree at most 5. By Lemma 4.3, u has exactly degree 5 in \overline{G}_S^+ . Since each family of parallel positive edges contains at most $t/2 + 1$ edges by Lemma 2.8(1), u has degree at most $5(t/2 + 1)$ in G_S . Hence $5(t/2 + 1) \geq \deg(u) = 5t$, and then $t \leq 2$, a contradiction. \square

4.2. Each vertex of \overline{G}_T has degree 6. By the previous subsection 4.1, we know that each vertex of \overline{G}_T has degree at least 6. Then an easy Euler characteristic argument shows that each vertex of \overline{G}_T has degree exactly 6. (See [1, Claim 3.2].)

Lemma 4.5. *If \overline{G}_S^+ has an interior vertex, then G_S has an S -cycle with label j for any label j .*

Proof. Let u_i be an interior vertex of \overline{G}_S^+ . Then only positive edges are incident to u_i in G_S . By the parity rule, all i -edges in G_T are negative.

There are five negative i -edges at the j th vertex v_j of G_T , and any two of them are not parallel by Lemma 2.8(2). Thus v_j is incident to at most one positive edge

in \overline{G}_T . Hence v_j is incident to at least $5s - (s/2 + 1) = 9s/2 - 1$ negative edges. In G_S , this means that there are at least $9s/2 - 1$ positive j -edges.

From an Euler characteristic calculation, \overline{G}_S has at most $3s$ edges. Since $9s/2 - 1 > 3s$, there are two positive j -edges which are parallel in G_S . Then they form an S -cycle with j as a label by Lemmas 2.7(1) and 2.8(1). \square

Proposition 4.6. \overline{G}_S^+ cannot have an interior vertex.

Proof. Assume that \overline{G}_S^+ has an interior vertex. By Lemma 4.5, any of the label set $\{1, 2, \dots, t\}$ is a label of an S -cycle in G_S . If $t = 4$, then G_S has two S -cycles with disjoint label pairs, which is impossible by Lemma 2.7(2).

Assume $t \geq 6$. We may assume that $\{1, 2\}$ is the label pair of an S -cycle of G_S . Since 4 is a label of an S -cycle, either $\{3, 4\}$ or $\{4, 5\}$ is the label pair of an S -cycle. By Lemma 2.7(4), it must be $\{3, 4\}$. Similarly, we can conclude that $\{5, 6\}$ is the label pair of an S -cycle. Thus there are three S -cycles with mutually disjoint label pairs, which is impossible by Lemma 2.7(3). \square

Lemma 4.7. Let u_i be a vertex of \overline{G}_S^+ . Suppose that some label j appears k times among negative edge endpoints of u_i in G_S . Then $k \leq 4$. Furthermore, if $k = 4$ then $s = 4$, and if $k = 3$ then $s = 4$ or 6.

Proof. By the parity rule, there are k positive i -edges at the vertex v_j in G_T . No two of them are parallel by Lemma 2.8(1). Hence $k(s/2 + 1) + (6 - k)s \geq \deg(v_j) = 5s$.

If $k = 5$, then $s \leq 10/3$, a contradiction. Thus we have $k \leq 4$. The others immediately follow from the inequality. \square

Lemma 4.8. \overline{G}_S^+ cannot have a vertex of degree at most one.

Proof. Assume that u is a vertex of \overline{G}_S^+ of degree at most one. Then there are at most $t/2 + 1$ positive edge endpoints at u in G_S . Hence at least $5t - (t/2 + 1) = 9t/2 - 1$ negative edges are incident to u successively. Since $9t/2 - 1 > 4t$, some label appears five times among negative edge endpoints of u . This is impossible by Lemma 4.7. \square

Lemma 4.9. If \overline{G}_S^+ has a vertex u_i of degree two, then $s = 4$, and G_T has an S -cycle with i as a label.

Proof. Since there are at most $2(t/2 + 1) = t + 2$ positive edge endpoints at u_i in G_S , u_i has at least $4t - 2$ negative edge endpoints. Then $4t - 2 > 3t$, and hence some label j appears at least 4 times among negative edge endpoints of u_i . By Lemma 4.7, $s = 4$.

Also, G_T has $4t - 2$ positive i -edges. Since \overline{G}_T has at most $3t$ edges (as seen by an Euler characteristic calculation), some positive i -edges are parallel in G_T . Thus G_T has an S -cycle with i as a label by Lemmas 2.7(1) and 2.8(1). \square

Proposition 4.10. \overline{G}_S^+ has no component with a disk support.

Proof. Assume not. Choose an extremal component Γ with a disk support. Then Γ has a good vertex of degree at most two by Lemma 3.2. Hence $s = 4$ by Lemma 4.9. Thus Γ has at most two vertices. But this is impossible by Proposition 4.6 and Lemma 4.8. \square

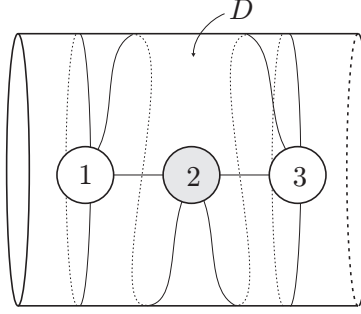


FIGURE 4.

By Lemma 3.1 and Proposition 4.10, any component of \overline{G}_S^+ has an annulus support and there are at least two components.

Lemma 4.11. \overline{G}_S^+ has no cycle component.

Proof. Assume that \overline{G}_S^+ has a cycle component Γ . By Lemma 4.9, $s = 4$. Hence Γ contains at most two vertices. Recall that G_S has vertices u_1, u_2, u_3, u_4 , where u_i and u_j are parallel if and only if $i \equiv j \pmod{2}$.

First, assume that Γ contains only one vertex. Then we can assume that \overline{G}_S^+ has two loop components (with annulus supports) based on u_1 and u_3 . By Lemma 4.9, G_T has S -cycles with labels 1 and 3, respectively. Moreover, we can assume that their label pairs are $\{1, 2\}$ and $\{2, 3\}$ by Lemma 2.7(2).

Then \overline{G}_S contains a subgraph as shown in Figure 4 by Lemma 2.6. By [20, Lemma 1.9], u_4 must lie in the disk region D as indicated in Figure 4. Then \overline{G}_S^+ has a component containing both of u_2 and u_4 . Hence u_4 has degree two in \overline{G}_S^+ . By Lemma 4.9 again, G_T has an S -cycle with 4 as a label, that is, an S -cycle with label pair either $\{3, 4\}$ or $\{4, 1\}$. In either case, this contradicts Lemma 2.7(2).

Next, assume that Γ contains just two vertices, u_1 and u_3 , say. Again, G_T has two S -cycles ρ_1 and ρ_2 with label pairs $\{1, 2\}$ and $\{2, 3\}$, respectively. Also, \overline{G}_S^+ has another component Λ containing u_2 and u_4 , otherwise u_4 has degree two, which leads to a contradiction as above. In fact, Λ has the form of either (2), (3) or (4) in Figure 2, where u_4 has degree at least 3. By Lemma 2.6, the edges of ρ_i form an essential loop on \widehat{S} . Then we cannot place the edges of two S -cycles ρ_1 and ρ_2 to satisfy this condition simultaneously. \square

Let Γ be an extremal component of \overline{G}_S^+ . It has an annulus support, and it is not a cycle by Lemma 4.11. Therefore Γ has a good vertex of degree at most 4 by Lemma 3.3. Let u be such a vertex.

Lemma 4.12. $s = 4$ or 6.

Proof. There are at most $4(t/2 + 1) = 2t + 4$ positive edge endpoints at u in G_S by Lemma 2.8(1). Thus u has at least $3t - 4$ negative edge endpoints. If $t > 4$, then $3t - 4 > 2t$. If $t = 4$, then there are at most $3(t/2 + 1) + t/2 = 2t + 3$ positive edge endpoints at u in G_S by Lemma 2.9. Thus u has at least $3t - 3$ negative edge endpoints, and note $3t - 3 > 2t$. Hence, in either case, some label appears at

least three times among negative edge endpoints of u . Then $s = 4$ or 6 by Lemma 4.7. \square

Now, we divide the cases.

Case 1. $s = 6$.

Lemma 4.13. \overline{G}_S^+ consists of two components, each of which has three vertices.

Proof. Recall that \overline{G}_S^+ consists of at least two components, each of which has an annulus support. Since there is no cycle in \overline{G}_S^+ by Lemma 4.11, each component must contain three vertices. \square

Proposition 4.14. $s = 6$ is impossible.

Proof. By Lemmas 3.6, 4.8, 4.9 and 4.11, \overline{G}_S^+ has a good vertex u_i of degree 3. Assume $t \geq 8$. By Lemma 2.8(1), there are at most $3(t/2 + 1)$ positive edge endpoints at u_i in G_S . Thus u_i has at least $7t/2 - 3$ negative edge endpoints. Since $7t/2 - 3 > 3t$, some label appears four times among negative edge endpoints of u_i . Then $s = 4$ by Lemma 4.7, which is a contradiction.

Assume $t = 6$. It suffices to consider the case where u_i is incident to three families of 4 parallel positive edges. (Otherwise, there are more than $18 (= 3t)$ negative edge endpoints at u_i , and then some label appears four times there.) Then 18 negative edges are incident to u_i successively in G_S . Thus any label j appears exactly three times there. In fact, three occurrences of the label j are consecutive among five occurrences of j at u_i . In G_T , there are three positive i -edges at v_j , whose endpoints with label i are consecutive at v_j among the five occurrences of label i by Lemma 2.3. Since no two of the i -edges are parallel, v_j is incident to three families of parallel positive edges containing i -edges, which are consecutive. Hence v_j has at least 13 positive edge endpoints. Thus v_j is incident to at least 4 families of parallel positive edges by Lemma 2.8(1). Then v_j is incident to at most two families of parallel negative edges. But this implies that v_j has at most $4 \cdot 4 + 6 \cdot 2 = 28$ edge endpoints, which contradicts that it has degree 30.

Next assume $t = 4$. In G_S , u_i has at most 9 positive edge endpoints. Hence there are at least 11 negative edges there. Thus some label appears three times among negative edge endpoints of u_i . A similar argument to the case $t = 6$ above leads to a contradiction. We have thus shown that the case $s = 6$ is impossible. \square

Case 2. $s = 4$. By Lemmas 4.8 and 4.11, \overline{G}_S^+ consists of two connected components, each of which has the form of Figure 2(2), (3) or (4) by Lemma 3.5.

Lemma 4.15. \overline{G}_S^+ does not have a component of the form as in Figure 2(2).

Proof. Let Γ be a component of \overline{G}_S^+ as in Figure 2(2), and let u_i be the good vertex of degree two in Γ . As in the proof of Lemma 4.9, some label j appears four times among negative edge endpoints of u_i . In G_T , there are four positive i -edges at v_j . No two of them are parallel. Thus v_j is incident to four families of parallel positive edges, each of which contains an i -edge. Then we see that those four families contain 3 edges respectively, and that v_j is incident to two families of 4 parallel negative edges. By Lemma 2.3, the families of positive edge are consecutive. But this contradicts Lemma 2.9. \square

Lemma 4.16. \overline{G}_S^+ does not have a component of the form as in Figure 2(3).

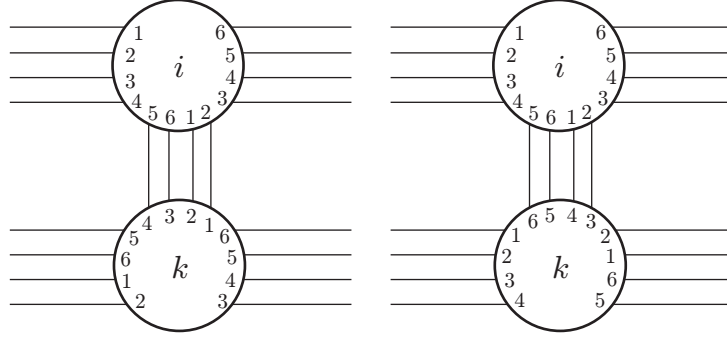


FIGURE 5.

Proof. Let Γ be such a component. Then Γ has a good vertex u_i of degree 3. Assume $t \geq 8$. As in the first paragraph of the proof of Proposition 4.14, some label j appear four times among negative edge endpoints of u_i . Hence v_j has 4 positive i -edges, which are not mutually parallel. Since v_j has degree 20 in G_T , v_j is incident to four families of 3 parallel positive edges and two families of 4 parallel negative edges. Then the four families of parallel positive edges are consecutive by Lemma 2.3. But this contradicts Lemma 2.9.

Assume $t = 6$. It suffices to consider the case where u_i is incident to three families of 4 parallel positive edges. (Otherwise, u_i has more than $18(= 3t)$ negative edge endpoints, and then some label appears four times there.) Then u_i is incident to 4 loops and a family of 4 parallel positive non-loop edges. We can assume that the labels at u_i are as shown in Figure 5. Let u_k be another vertex of Γ . Then the situation at u_k is the same as u_i . Hence Γ has three S -cycles with disjoint label pairs, which is impossible by Lemma 2.7(3).

Assume $t = 4$. If u_i is incident to more than 12 negative edges, then some label appears four times among negative edge endpoints of u_i . This leads to a contradiction as above. Thus u_i has at most 12 negative edges, and then there are 8 or 9 positive edge endpoints. If there are 9 positive edge endpoints at u_i , three loops and a family of three positive non-loop edges are incident to u_i . But this contradicts the parity rule. Hence u_i has exactly 12 negative edge endpoints and 8 positive edge endpoints. The parity rule implies that there are three loops and two non-loop edges. We can assume that the labels at u_i as shown in Figure 6. Then Γ has two S -cycles with disjoint label pairs as in Figure 6, which is impossible by Lemma 2.7(2). \square

Proposition 4.17. $s = 4$ is impossible.

Proof. By Lemmas 4.15 and 4.16, \overline{G}_S^+ consists of two components of the form as in Figure 2(4). Let u be any vertex of G_S . Since at most two families of parallel negative edges are incident to u , there are at most $2t$ negative edge endpoints at u . Thus u has at least $3t$ positive edge endpoints. Then $4(t/2 + 1) \geq 3t$, and so $t = 4$. Hence u has three loops and two families of three parallel positive edges. Then G_S has two S -cycles with disjoint label pairs, which is impossible by Lemma 2.7(2). Thus we have shown that $s = 4$ is impossible. \square




FIGURE 6.

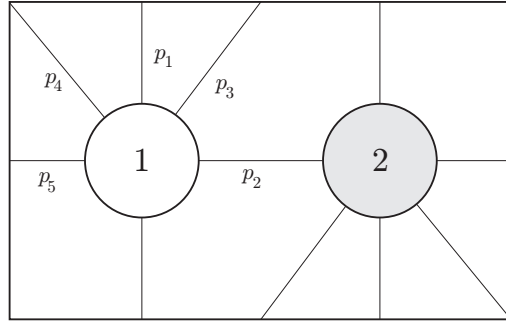


FIGURE 7.

5. THE CASE THAT $s = 2$ AND $t \geq 4$

In this section, we assume $s = 2$ and $t \geq 4$, but all arguments can apply to the case that $t = 2$ and $s \geq 4$.

The reduced graph \overline{G}_S is a subgraph of the graph as shown in Figure 7 [7, Lemma 5.2], where the sides of the rectangle are identified to form \widehat{S} in the usual way. Here, p_i indicates the number of edges in the family of parallel edges. Recall that $p_1 \leq t/2 + 1$ and $p_i \leq t$ for $i = 2, 3, 4, 5$ by Lemma 2.8.

Lemma 5.1. *In \overline{G}_S , u_1 and u_2 have degree 6. Moreover, $p_1 = t/2$ or $t/2 + 1$.*

Proof. Since u_i has degree $5t$ in G_S , the first follows immediately. Also, u_i has at least t positive edge endpoints. Thus the second follows. \square

We distinguish two cases.

Case 1. $p_1 = t/2$. In this case, $p_i = t$ for $i = 2, 3, 4, 5$. Let A and B be the families of p_2 and p_3 parallel negative edges in G_S , respectively. We can assume that the labels are as in Figure 8. Let σ be the associated permutation to A such that an edge in A has label j at u_1 and label $\sigma(j)$ at u_2 . The edges of A form disjoint cycles in G_T according to the orbits of σ , and such a cycle is essential on \widehat{T} [7, Lemma 2.3]. By the parity rule, each cycle contains only the vertices of the same sign. Hence there are at least two such cycles. Let L be the cycle corresponding to the orbit of σ containing the label 1.

Note that the four families of negative edges in G_S define the same permutation σ .

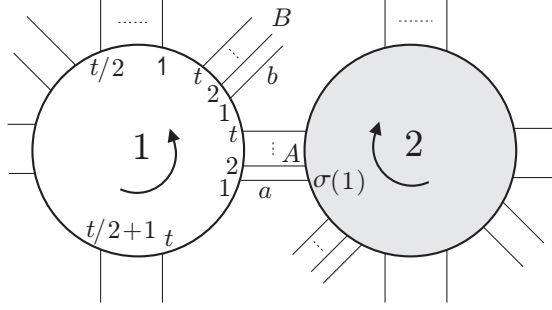


FIGURE 8.

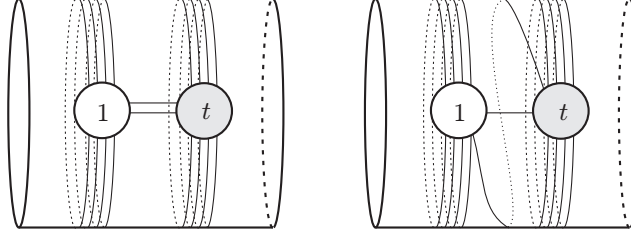


FIGURE 9.

Lemma 5.2. σ is not the identity.

Proof. Assume that σ is the identity. Then each family of parallel negative edges in G_S contains a $\{j, j\}$ -edge for $j = 1, 2, \dots, t$. Let $G(1, t)$ be the subgraph of G_T spanned by the vertices v_1 and v_t . Then $G(1, t)$ has an annulus support on \hat{T} , since $t \geq 4$. Hence there are two possibilities for $G(1, t)$ as shown in Figure 9.

But a jumping number argument will eliminate both configurations as follows. Let a be the $\{1, 1\}$ -edge in A , and let a_i be its endpoint at u_i for $i = 1, 2$. There are two positive $\{1, t\}$ -loops e based on u_1 and f based on u_2 in G_S . Let e_1 and f_1 be their endpoints with label 1. Around u_1 , a_1 and e_1 are not successive among five occurrences of label 1, but a_2 and f_1 are successive among five occurrences of label 1 around u_2 . By Lemma 2.3, a_1 and e_1 are not successive among five occurrences of label 1 around v_1 , but a_2 and f_1 are successive among five occurrences of label 2 around v_1 . But this is not satisfied in both configurations of $G(1, t)$. \square

Lemma 5.3. σ^2 is the identity. In particular, each orbit of σ has length two, and $\sigma(1) = t/2 + 1$.

Proof. Let a (b resp.) be the edge of A (B resp.) with label 1 at u_1 . Then $L \cup b$ is contained in an annulus on \hat{T} . There are two possibilities for $L \cup b$ as shown in Figure 10, where we put $r = \sigma(1)$. Note that a and b have label 1 at v_1 .

For Figure 10(1), there is another edge e between a and b . Then e is a negative $\{1, r\}$ -edge in G_S with label r at u_1 and label 1 at u_2 . Although e need not be in A , this implies $\sigma(r) = 1$, because any family of negative edges corresponds to the same permutation σ . Hence σ^2 is the identity.

For Figure 10(2), suppose that σ^2 is not the identity. Then L contains at least three vertices. Let c (d , resp.) be the edge in A (B , resp.) with label r at u_1 . Of

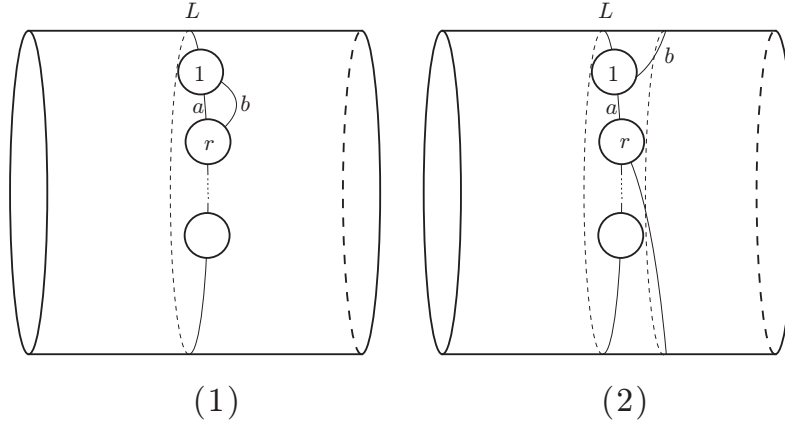


FIGURE 10.

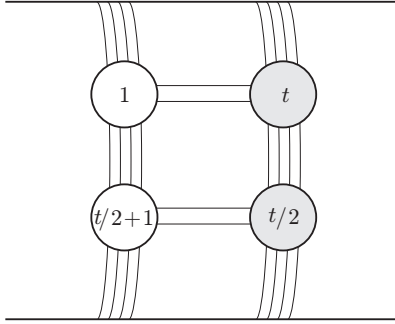


FIGURE 11.

course, c is contained in L . Then d and b are on the same side of L , because the endpoints of c and d with label r are successive around u_1 . Hence d is parallel to c in G_T . Then there is another edge between them, which implies σ^2 is the identity as above. This is a contradiction. \square

Lemma 5.4. $t = 4$. Furthermore, G_T has a torus support.

Proof. By Lemma 5.3, G_T^+ consists of $t/2$ components, and hence each component has an annulus support. Let $G^+(1, t/2 + 1)$ be the component of G_T^+ containing the vertices v_1 and $v_{t/2+1}$. Then it consists of 8 edges, which are split into two families of 4 parallel edges. For, if a family contains 5 edges, then some pair of edges is parallel in G_S , too. This contradicts Lemma 2.5. Similarly, let $G^+(t/2, t)$ be the component of G_T^+ containing $v_{t/2}$ and v_t . Since G_S has two $\{1, t\}$ -loops and two $\{t/2, t/2+1\}$ -loops (see Figure 8), the component H of G_T containing $G^+(1, t/2+1)$ and $G^+(t/2, t)$ has the form as shown in Figure 11, under the assumption $t > 4$.

But a jumping number argument will eliminate this configuration as before. Look at the edge a in the family of A in G_S . The endpoint of a at u_1 is not adjacent to the endpoint of the $\{1, t\}$ -loop with label 1 among five occurrences of label 1. But the endpoint of a at u_2 is adjacent to the endpoint of the $\{t/2, t/2+1\}$ -loop with

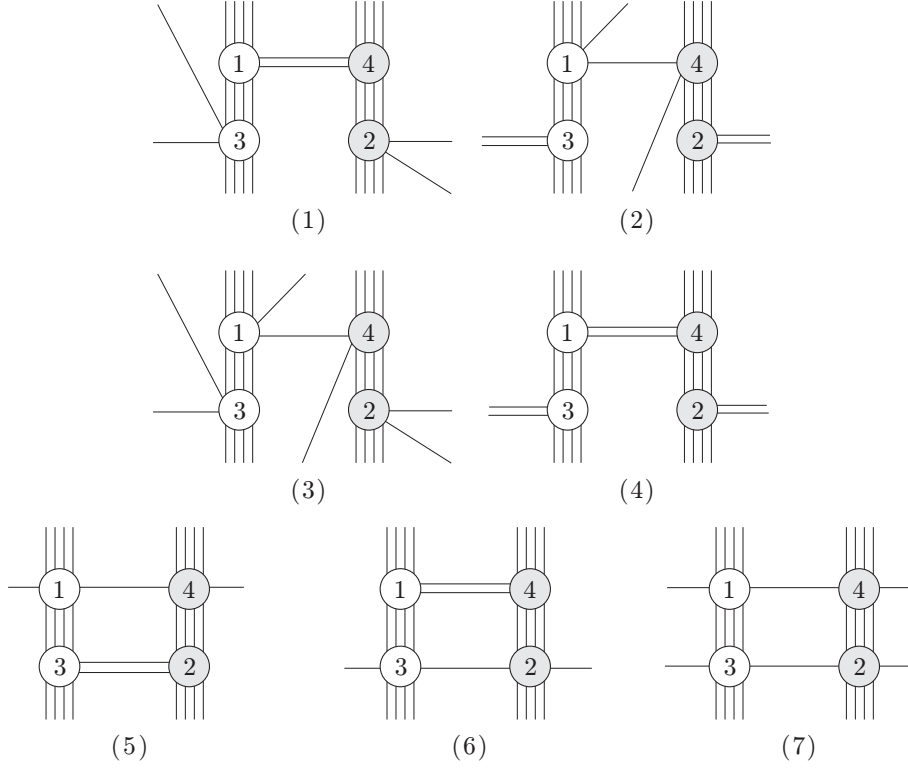


FIGURE 12.

label $t/2 + 1$ among five occurrences of label $t/2 + 1$. Then we cannot locate the edge a in H to satisfy Lemma 2.3. Hence $t = 4$.

Then, $G_T^+ = G^+(1, 3) \cup G^+(2, 4)$. In this case, $H = G_T$. If H has an annulus support, then we have a contradiction as above. Thus G_T has a torus support. \square

Thus G_S is uniquely determined, and then there are seven possibilities for G_T as shown in Figure 12. Clearly, (1), (2), (5) and (6) contradict the parity rule.

Lemma 5.5. (3) of Figure 12 is impossible.

Proof. The (partial) correspondence between the edges of G_S and G_T are determined as in Figure 13 by using Lemma 2.3. Let V_{12} be the part of V_β between vertices v_1 and v_2 (disjoint from v_3 and v_4). Ten edge endpoints at v_1 are connected to those at v_2 by disjoint arcs on the annulus $\text{cl}(\partial V_{12} - v_1 \cup v_2)$. In particular, the consecutive endpoints of e , g and c_3 at v_1 are connected to the consecutive ones of f , h and c_4 at v_2 , respectively. Also, the anticlockwise ordering of the former at v_1 must determine the clockwise ordering of the latter at v_2 . This contradicts Figure 13. \square

Lemma 5.6. (7) of Figure 12 is impossible.

Proof. We use the notation of the edges of G_S in Figure 13. At u_1 , the endpoints of e and c_3 are adjacent among five occurrences of label 1. By Lemma 2.3, the endpoints of e and c_3 are adjacent among five occurrences of label 1 at v_1 . Then

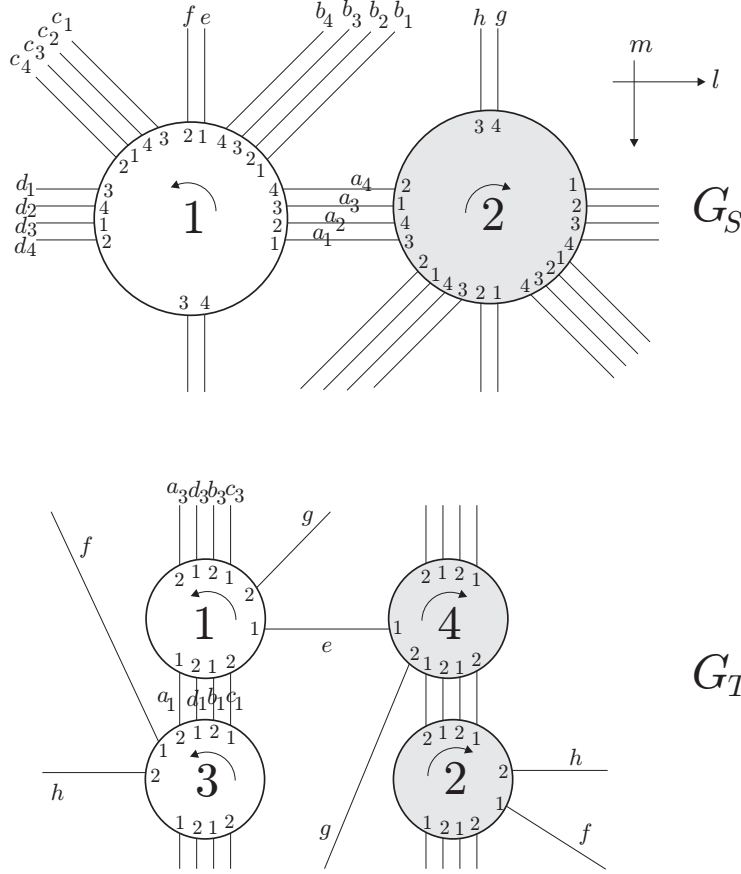


FIGURE 13.

the endpoints of h and c_3 are adjacent among five occurrences of label 2 at v_3 . But this leads to a contradiction, because the endpoints of h and c_3 are not adjacent among five occurrences of label 3 at u_2 . \square

Lemma 5.7. (4) of Figure 12 is impossible.

Proof. The correspondence between the edges of G_S and G_T are determined as in Figure 14 by using Lemma 2.3, where G_S is the same as in Figure 13. To calculate $H_1(K(\alpha))$, we build up $K(\alpha)$ based on $\hat{S} \cup V_\alpha$.

Consider the bigons D_1 and D_2 in G_T between a_1 and d_1 , e and g , respectively. They are on the same side of \hat{S} . Let us call this side \mathcal{B} , the other side \mathcal{W} . Thus $K(\alpha) = \mathcal{B} \cup \mathcal{W}$, and $\mathcal{B} \cap \mathcal{W} = \hat{S}$. Let $V_{12} = V_\alpha \cap \mathcal{B}$ and $V_{21} = V_\alpha \cap \mathcal{W}$. Let F be the genus two closed surface obtained from \hat{S} by tubing along V_{12} . That is, $F = (\hat{S} - u_1 \cup u_2) \cup H$, where H is the annulus $\text{cl}(\partial V_{12} - u_1 \cup u_2)$. On F , ∂D_1 is non-separating, because it runs twice on V_{12} in the same direction. Hence surgering F along D_1 gives a torus \hat{S}' . Furthermore, we see that ∂D_2 is non-separating on \hat{S}' . Hence $\mathcal{B} = \hat{S} \cup V_{12} \cup D_1 \cup D_2 \cup \mathcal{B}^3$, where \mathcal{B}^3 denotes a 3-ball, by the irreducibility of $K(\alpha)$. Let $H_1(\hat{S} \cup V_{12}) = \langle l, m, x \rangle = \mathbf{Z} \oplus \mathbf{Z} \oplus \mathbf{Z}$, where l, m are the cycles on \hat{S} as

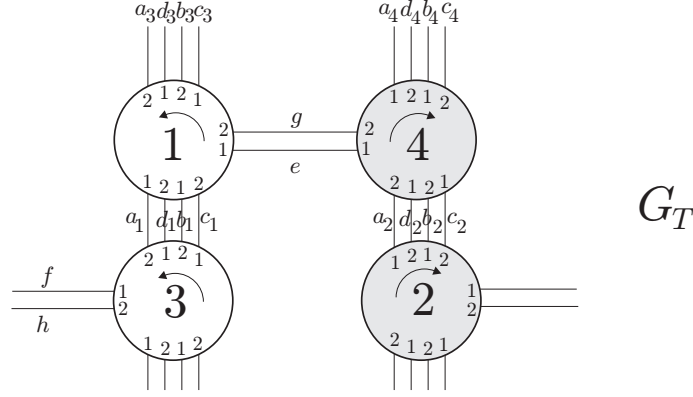


FIGURE 14.

in Figure 13 and x is represented by the core of V_{12} directed from u_1 to u_2 . Then

$$H_1(\mathcal{B}) = \langle l, m, x \rangle / \langle \partial D_1, \partial D_2 \rangle,$$

and $\partial D_1 = 2x + l$, $\partial D_2 = 2m$ with suitable orientations.

Similarly, consider the bigon E_1 between d_1 and b_1 and the 6-gon face E_2 bounded by c_1, c_3, g, a_4, a_2, e in G_T . Then we have $\mathcal{W} = \hat{S} \cup V_{21} \cup E_1 \cup E_2 \cup B^3$. Thus

$$H_1(\mathcal{W}) = \langle l, m, y \rangle / \langle \partial E_1, \partial E_2 \rangle,$$

where y is represented by the core of V_{21} directed from u_2 to u_1 , and $\partial E_1 = 2y - l - m$, $\partial E_2 = 2l + 4m$ with suitable orientations.

Hence $H_1(K(\alpha)) = \langle l, m, x, y \rangle / \langle \partial D_1, \partial D_2, \partial E_1, \partial E_2 \rangle = \mathbf{Z}_4 \oplus \mathbf{Z}_4$, which is not cyclic. This is a contradiction. \square

Thus we have shown that the case $p_1 = t/2$ is impossible.

Case 2. $p_1 = t/2 + 1$. Since $p_2 + p_3 + p_4 + p_5 = 4t - 2$, at least two of p_i are t . By the parity rule, $p_2 + p_3$ and $p_4 + p_5$ are even. Thus we may assume that $(p_2, p_3, p_4, p_5) = (t, t, t, t - 2)$ or $(t, t, t - 1, t - 1)$ without loss of generality. Let A, B, C and D be the families of parallel negative edges of G_S with p_2, p_3, p_4 and p_5 edges, respectively.

Lemma 5.8. $(p_2, p_3, p_4, p_5) = (t, t, t - 1, t - 1)$ is impossible.

Proof. Assume $(p_2, p_3, p_4, p_5) = (t, t, t - 1, t - 1)$. Each edge of A has labels with the same parity at its ends by the parity rule. Then any edge of C has labels with opposite parities at its ends. This contradicts the parity rule. \square

Thus we have $(p_2, p_3, p_4, p_5) = (t, t, t, t - 2)$. The labels in G_S can be assumed as shown in Figure 15. Let σ be the permutation associated to A as before. Then there is an S -cycle with label pair $\{t/2, t/2 + 1\}$ among positive loops at vertex u_1 .

Lemma 5.9. σ is the identity.

Proof. Among the positive loops at vertex u_2 , there is an S -cycle with label pair $\{\sigma(1) + t/2 - 1, \sigma(1) + t/2\}$. (All labels are considered modulo t .) Assume $\sigma(1) \neq 1$. Then $\sigma(1) \geq 3$ and odd.

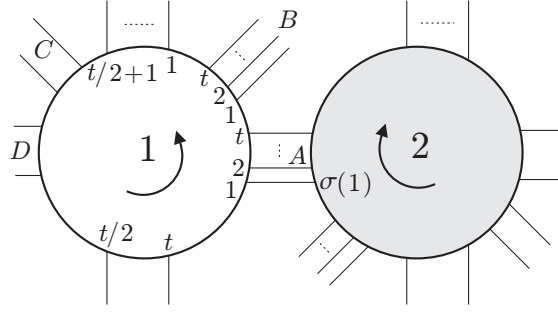


FIGURE 15.

If $t = 4$, then $\sigma(1) = 3$, and hence G_S has two S -cycles with label pairs $\{2, 3\}$ and $\{4, 1\}$. This is impossible by Lemma 2.7(2).

Assume $t > 4$. Then we see that σ^2 is the identity and $\sigma(1) = t/2 + 1$ by Lemma 5.3. (The argument applies here without change.) Hence G_S has two S -cycles with label pairs $\{t/2, t/2 + 1\}$ and $\{t, 1\}$ respectively. The edges of A form cycles of length two on \hat{T} , and there are at least four such cycles. In particular, v_1 and $v_{t/2+1}$ lie on the same cycle, and so do $v_{t/2}$ and v_t . But we cannot locate the edges of the above two S -cycles to satisfy Lemma 2.6 simultaneously. \square

Lemma 5.10. $t = 4$.

Proof. Assume $t > 4$. Then we see that the edges of C form two essential cycles on \hat{T} . By Lemma 5.9, each vertex of G_T is incident to a loop. Thus there would be a trivial loop. \square

Lemma 5.11. $t = 4$ is impossible.

Proof. In G_T , v_1 and v_4 are incident to 3 loops, and v_2 and v_3 are incident to two loops. In G_S , there are two S -cycles with label pair $\{2, 3\}$. The edges of them give four edges between v_2 and v_3 in G_T . Then two endpoints with label 1 of loops at v_2 cannot be successive among the five occurrences of label 1, which contradicts Lemma 2.3. \square

Hence the case $p_1 = t/2 + 1$ is also impossible.

6. THE CASE THAT $s = t = 2$

Finally, we consider the case that $s = t = 2$. Then both \overline{G}_S and \overline{G}_T are subgraphs of the graph in Figure 7. If $K(\gamma)$ contains a Klein bottle, then γ is a multiple of four [17]. Hence either $K(\alpha)$ or $K(\beta)$ does not contain a Klein bottle, because $\Delta(\alpha, \beta) = |\alpha - \beta| = 5$. Without loss of generality, we can assume that $K(\beta)$ does not contain a Klein bottle. Also, we use the notation p_i for the number of edges in the families of parallel positive or negative edges in G_S as in the previous section.

Lemma 6.1. $1 \leq p_1 \leq 3$ and $p_i \leq 2$ for $i = 2, 3, 4, 5$.

Proof. If $p_1 \geq 4$, then there are two bigons among loops which lie on the same side of \hat{T} . By Lemma 2.5, the four edges of the bigons belong to mutually distinct families of parallel negative edges in G_T . But this implies that $K(\beta)$ contains a Klein bottle ([11, The proof of Lemma 5.2]), a contradiction.

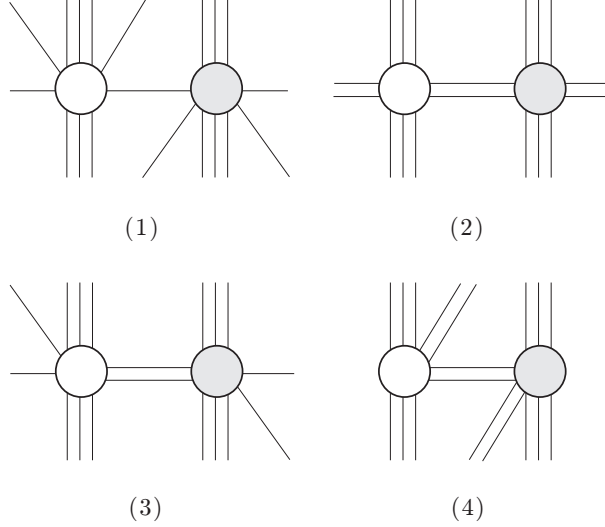


FIGURE 16.

If a family of parallel negative edges contains three edges in G_S , then two of them are incident to the same vertex in G_T . Thus they are also parallel in G_T , which contradicts Lemma 2.5. Hence $p_i \leq 2$ for $i \neq 1$.

Since u_1 has degree 10 in G_S , $2p_1 + p_2 + p_3 + p_4 + p_5 = 10$. Thus $p_1 \geq 1$. \square

Lemma 6.2. $p_1 = 1$ is impossible.

Proof. If $p_1 = 1$, then $p_i = 2$ for $i \neq 1$ by Lemma 6.1. Then G_T has the same form as in Figure 9. But the jumping number argument in the proof of Lemma 5.2 eliminates these configurations again. \square

Lemma 6.3. $p_1 = 2$ is impossible.

Proof. Assume $p_1 = 2$. Then we can assume that $p_2 + p_3 = 2$ and $p_4 + p_5 = 4$ by the parity rule. Hence $p_4 = p_5 = 2$. If $p_2 = p_3 = 1$, then the labels in G_S contradicts the parity rule. Thus we can assume that $p_2 = 2$ and $p_3 = 0$. Then there are 4 possibilities for G_T as in Figure 16. (As in the proof of Lemma 6.1, a family of parallel negative edges in G_T contains at most two edges.) We see that (3) contradicts the parity rule.

(4) can be eliminated by a jumping number argument. In G_T , there are two negative edges incident to v_1 with the same label 1. Their endpoints at v_1 are consecutive among the five occurrences of label 1. But these points are not consecutive at u_1 , which contradicts Lemma 2.3.

To eliminate (1) and (2), note that G_S contains two S -cycles ρ_1 and ρ_2 whose faces lie on the same side of \hat{T} . From the labeling of G_T , we can determine the edges of ρ_i in G_T as in Figure 17 for (1) and Figure 18 for (2). In the former, $K(\beta)$ contains a Klein bottle as in the proof of Lemma 6.1, a contradiction. In the latter, it is impossible to connect these edges on ∂V_β simultaneously (see Figure 18). \square

Lemma 6.4. $p_1 = 3$ is impossible.

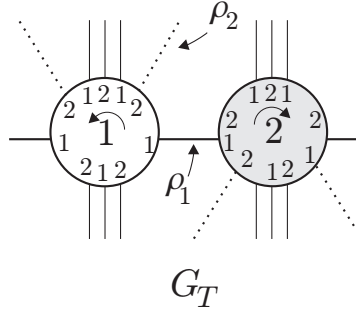


FIGURE 17.

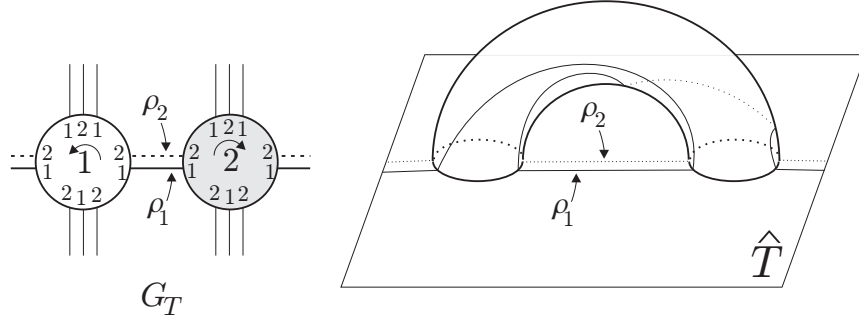


FIGURE 18.

Proof. Assume $p_1 = 3$. Then we can assume that $(p_2 + p_3, p_4 + p_5) = (4, 0)$ or $(2, 2)$. If $(p_2 + p_3, p_4 + p_5) = (4, 0)$ then $p_2 = p_3 = 2$. The endpoints of two negative edges with label 1 are successive at u_1 among the five occurrences of label 1. By Lemma 2.3, those points are also successive at v_1 among the five occurrences of label 1. Then if we put six negative edges between v_1 and v_2 , then there would be a pair of edges which is parallel in both graphs, a contradiction by Lemma 2.5.

If $(p_2 + p_3, p_4 + p_5) = (2, 2)$, then there are three possibilities for G_S as in Figure 16(1), (2) and (3). Then (3) contradicts the parity rule. If G_S is (2), then the labeling of G_S implies that G_T has two parallel loops at each vertex. Thus G_T has two S -cycles. It is easy to see that their faces lie on the same side of \hat{S} . Hence the argument in the proof of Lemma 6.3 works again (with an exchange of roles between G_S and G_T).

For (1), G_S and G_T are determined as shown in Figure 19. Then we can conclude that $K(\alpha)$ contains a Klein bottle as in the proof of Lemma 6.3, but this is not a contradiction.

To eliminate (1), we calculate $H_1(K(\alpha))$ and $H_1(K(\beta))$. First, the (unique) edge correspondence between G_S and G_T is shown in Figure 19. Let D_1 and D_2 be the bigons between the edges c and d , a and b , respectively, in G_T . Also, let E_1 and E_2 be the 3-gon bounded by d, e, h and the 4-gon bounded by a, b, c, i in G_T , respectively. As in the proof of Lemma 5.7, let us call \mathcal{B} the side of \hat{S} which contains D_1 and D_2 , and call \mathcal{W} the other side. Then we can see that $\mathcal{B} = \hat{S} \cup V_{12} \cup D_1 \cup D_2 \cup B^3$ and $\mathcal{W} = \hat{S} \cup V_{21} \cup E_1 \cup E_2 \cup B^3$, where $V_{12} = V_\alpha \cap \mathcal{B}$

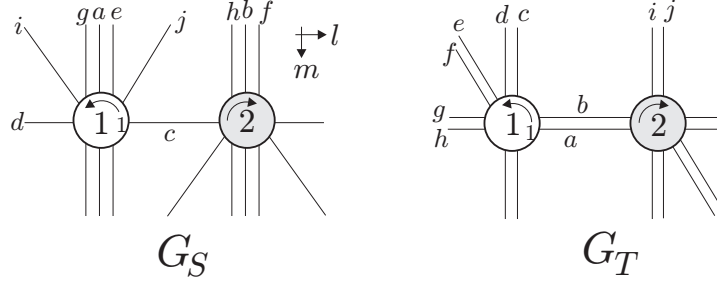


FIGURE 19.

and $V_{21} = V_\alpha \cap \mathcal{W}$ as in the proof of Lemma 5.7. Hence

$$\begin{aligned} H_1(\mathcal{B}) &= \langle l, m, x \rangle / \langle \partial D_1, \partial D_2 \rangle = \langle l, m, x \rangle / \langle 2x + l, 2m \rangle, \\ H_1(\mathcal{W}) &= \langle l, m, y \rangle / \langle \partial E_1, \partial E_2 \rangle = \langle l, m, y \rangle / \langle y - 2m - l, 3m + l \rangle, \end{aligned}$$

where $H_1(\hat{S}) = \langle l, m \rangle$ (see Figure 19), and x and y are represented by the cores of V_{12} and V_{21} directed from u_1 to u_2 , and from u_2 to u_1 , respectively. By the Mayer-Vietoris sequence,

$$H_1(K(\alpha)) = \langle l, m, x, y \rangle / \langle \partial D_1, \partial D_2, \partial E_1, \partial E_2 \rangle = \mathbf{Z}_4.$$

This means that $|\alpha| = 4$.

Similarly, we calculate $H_1(K(\beta))$. Let D'_1 be the bigon between a and e , and D'_2 the 3-gon bounded by c, h, j in G_S . Also, let E'_1 be the bigon between a and g , and E'_2 be the 3-gon bounded by c, e, j . By using these, we can build up $K(\beta)$ as

$$K(\beta) = \hat{T} \cup V_\beta \cup D'_1 \cup D'_2 \cup E'_1 \cup E'_2 \cup (\text{two 3-balls}).$$

Then we can show that $H_1(K(\beta)) = \mathbf{Z}_{11}$, which implies $|\beta| = 11$. This contradicts that $|\alpha - \beta| = 5$. \square

By Lemmas 6.2, 6.3 and 6.4, the case $s = t = 2$ is impossible. Hence the proof of Theorem 1.1 is now complete.

7. QUESTIONS

We ask some questions:

- (1) If a hyperbolic knot admits three toroidal slopes, then is it either the figure-eight knot or the $(-2, 3, 7)$ -pretzel knot?
- (2) If a hyperbolic knot has two integral toroidal slopes with distance 4, then does at least one toroidal surgery yield a Klein bottle?

Among the Eudave-Muñoz knots, only the $(-2, 3, 7)$ -pretzel knot admits three toroidal slopes. As far as the author knows, the figure-eight knot is the only example that has three integral toroidal slopes.

ACKNOWLEDGEMENTS

The author would like to thank the referee for valuable suggestions and comments.

REFERENCES

1. S. Boyer and X. Zhang, *Reducing Dehn fillings and toroidal Dehn fillings*, Topology Appl. **68** (1996), 285–303.
2. M. Brittenham and Y. Q. Wu, *The classification of exceptional surgeries on 2-bridge knots*, Comm. Anal. Geom. **9** (2001), 97–113.
3. M. Culler, C. McA. Gordon, J. Luecke and P. Shalen, *Dehn surgery on knots*, Ann. of Math. **125** (1987), 237–300.
4. M. Eudave-Muñoz, *Non-hyperbolic manifolds obtained by Dehn surgery on hyperbolic knots*, Geometric topology (Athens, GA, 1993), 35–61, AMS/IP Stud. Adv. Math., 2.1, Amer. Math. Soc., Providence, RI, 1997.
5. M. Eudave-Muñoz, *On hyperbolic knots with Seifert fibered Dehn surgeries*, Topology Appl. **121** (2002), 119–141.
6. D. Gabai, *Foliations and the topology of 3-manifolds, III*, J. Differential Geom. **26** (1987), 479–536.
7. C. McA. Gordon, *Boundary slopes of punctured tori in 3-manifolds*, Trans. Amer. Math. Soc. **350** (1998), 1713–1790.
8. C. McA. Gordon and J. Luecke, *Dehn surgeries on knots creating essential tori, I*, Comm. Anal. Geom. **3** (1995), 597–644.
9. C. McA. Gordon and J. Luecke, *Dehn surgeries on knots creating essential tori. II*, Comm. Anal. Geom. **8** (2000), 671–725.
10. C. McA. Gordon and J. Luecke, *Non-integral toroidal Dehn surgeries*, preprint.
11. C. McA. Gordon and J. Luecke, *Toroidal and boundary-reducing Dehn fillings*, Topology Appl. **93** (1999), 77–90.
12. C. McA. Gordon and Y. Q. Wu, *Toroidal and annular Dehn fillings*, Proc. London Math. Soc. **78** (1999), 662–700.
13. C. McA. Gordon, Y. Q. Wu and X. Zhang, *Non-integral toroidal surgery on hyperbolic knots in S^3* , Proc. Amer. Math. Soc. **128** (2000), 1869–1879.
14. R. Kirby, *Problems in low-dimensional topology*, AMS/IP Stud. Adv. Math., 2.2, Geometric topology (Athens, GA, 1993), 35–473, Amer. Math. Soc., Providence, RI, 1997.
15. S. Oh, *Reducible and toroidal 3-manifolds obtained by Dehn fillings*, Topology Appl. **75** (1997), 93–104.
16. D. Rolfsen, *Knots and links*, Mathematics Lecture Series, **7**, Publish or Perish, Inc., Berkeley, Calif., 1976.
17. M. Teragaito, *Creating Klein bottles by surgery on knots*, J. Knot Theory Ramifications **10** (2001), 781–794.
18. M. Teragaito, *Toroidal surgeries on hyperbolic knots, II*, Asian J. Math. **7** (2003), 139–146.
19. W. Thurston, *The geometry and topology of 3-manifolds*, Princeton University, 1978.
20. Y. Q. Wu, *Dehn fillings producing reducible manifolds and toroidal manifolds*, Topology **37** (1998), 95–108.

DEPARTMENT OF MATHEMATICS AND MATHEMATICS EDUCATION, HIROSHIMA UNIVERSITY, 1-1-1
 KAGAMIYAMA, HIGASHI-HIROSHIMA, JAPAN 739-8524
E-mail address: teragai@hiroshima-u.ac.jp