

# Euclidean and Hyperbolic Planes

A minimalistic introduction with metric approach

Anton Petrunin



# Contents

<b>Introduction</b>	<b>7</b>
Prerequisite. Overview.	
<b>1 Preliminaries</b>	<b>11</b>
What is axiomatic approach? What is model? Metric spaces. Examples. Shortcut for distance. Isometries, motions and lines. Half-lines and segments. Angles. Reals modulo $2\cdot\pi$ . Continuity. Congruent triangles.	
<b>Euclidean geometry</b>	
<b>2 The Axioms</b>	<b>23</b>
The Axioms. Lines and half-lines. Zero angle. Straight angle. Vertical angles.	
<b>3 Half-planes</b>	<b>29</b>
Sign of angle. Intermediate value theorem. Same sign lemmas. Half-planes. Triangle with the given sides.	
<b>4 Congruent triangles</b>	<b>35</b>
Side-angle-side condition. Angle-side-angle condition. Isosceles triangles. Side-side-side condition.	
<b>5 Perpendicular lines</b>	<b>39</b>
Right, acute and obtuse angles. Perpendicular bisector. Uniqueness of perpendicular. Reflection. Angle bisectors. Circles. Geometric constructions.	
<b>6 Parallel lines and similar triangles</b>	<b>49</b>
Parallel lines. Similar triangles. Pythagorean theorem. Angles of triangle. Transversal property. Parallelograms.	

**7 Triangle geometry 59**

Circumcircle and circumcenter. Altitudes and orthocenter.  
Medians and centroid. Bisector of triangle. Incenter.

**Inversive geometry****8 Inscribed angles 67**

Angle between a tangent line and a chord. Inscribed angle.  
Inscribed quadrilateral. Arcs.

**9 Inversion 73**

Cross-ratio. Inversive plane and clines. Ptolemy's identity.  
Perpendicular circles. Angles after inversion.

**Non-Euclidean geometry****10 Absolute plane 85**

Two angles of triangle. Three angles of triangle. How to  
prove that something can not be proved? Curvature.

**11 Hyperbolic plane 95**

Poincaré disk model. Auxiliary statements. Axiom I. Ax-  
iom II. Axiom III. Axiom IV. Axiom h-V.

**12 Geometry of h-plane 105**

Angle of parallelism. Inradius of triangle. Circles, horo-  
cycles and equidistants. Hyperbolic triangles. Conformal  
interpretation.

**Additional topics****13 Spherical geometry 117**

Space and spheres. Pythagorean theorem. Inversion of the  
space. Stereographic projection. Central projection.

**14 Klein model 123**

Special bijection of h-plane to itself. Klein model. Hyper-  
bolic Pythagorean theorem. Bolyai's construction.

**15 Complex coordinates 131**

Complex numbers. Complex coordinates. Conjugation and absolute value. Euler's formula. Argument and polar coordinates. Möbius transformations. Elementary transformations. Complex cross-ratio.

**References**

**Hints 139**

**Index 154**

**Used resources 157**



# Introduction

This is an introduction to Euclidean and Hyperbolic plane geometries and their development from postulate systems.

The lectures are meant to be rigorous, conservative, elementary and minimalistic. At the same time it includes about the maximum what students can absorb in one semester.

Approximately half of the material used to be covered in high school, not any more.

The lectures are oriented to sophomore and senior university students. These students already had a calculus course. In particular they are familiar with the real numbers and continuity. It makes possible to cover the material faster and in a more rigorous way than it could be done in high school.

## Prerequisite

The students has to be familiar with the following topics.

- ◇ Elementary set theory:  $\in$ ,  $\cup$ ,  $\cap$ ,  $\setminus$ ,  $\subset$ ,  $\times$ .
- ◇ Real numbers: intervals, inequalities, algebraic identities.
- ◇ Limits, continuous functions and Intermediate value theorem.
- ◇ Standard functions: absolute value, natural logarithm, exponent. Occasionally, basic trigonometric functions are used, but these parts can be ignored.
- ◇ Chapter 13 use in addition elementary properties of *scalar product*, also called *dot product*.
- ◇ To read Chapter 15, it is better to have some previous experience with complex numbers.

## Overview

We use so called *metric approach* introduced by Birkhoff. It means that we define Euclidean plane as a *metric space* which satisfies a

list of properties. This way we minimize the tedious parts which are unavoidable in the more classical Hilbert's approach. At the same time the students have chance to learn basic geometry of metric spaces.

Euclidean geometry is discussed in the the chapters 1–7. In the Chapter 1 we give all definitions necessary to formulate the axioms; it includes metric space, lines, angle measure, continuous maps and congruent triangles. In the Chapter 2, we formulate the axioms and prove immediate corollaries. In the chapters 3–6 we develop Euclidean geometry to a dissent level. In Chapter 7 we give the most classical theorem of triangle geometry; this chapter included mainly as an illustration.

In the chapters 8–9 we discuss geometry of circles on the Euclidean plane. These two chapters will be used in the construction of the model of hyperbolic plane.

In the chapters 10–12 we discuss non-Euclidean geometry. In Chapter 10, we introduce the axioms of absolute geometry. In Chapter 11 we describe so called Poincaré disc model (discovered by Beltrami). This is a construction of hyperbolic plane, an example of absolute plane which is not Euclidean. In the Chapter 12 we discuss some geometry of hyperbolic plane.

The last few chapters contain additional topics: Spherical geometry, Klein model and Complex coordinates. The proofs in these chapters are not completely rigorous.

When teaching the course, I used to give additional exercises in compass-and-ruler constructions<sup>1</sup>. These exercises work perfectly as an introduction to the proofs. I used extensively java applets created by C.a.R. which are impossible to include in the printed version.

## Disclaimer

I am not doing history. It is impossible to find the original reference to most of the theorems discussed here, so I do not even try. (Most of the proofs discussed in the lecture appeared already in the Euclid's Elements and the Elements are not the original source anyway.)

## Recommended books

- ◇ Kiselev's textbook [11] — a classical book for school students.  
Should help if you have trouble to follow the lectures.
- ◇ Moise's book, [8] — should be good for further study.

---

<sup>1</sup> see [www.math.psu.edu/petrinin/fxd/car.html](http://www.math.psu.edu/petrinin/fxd/car.html)



- ◇ Greenberg's book [4] — a historical tour through the axiomatic systems of various geometries.
- ◇ Methodologically these lecture notes are very close to Sharygin's textbook [10]. Which I recommend to anyone who can read Russian.

## Acknowledgments.

I would like to thank Matthew Chao for thoughtful reading and correcting dozens of mistakes.



# Chapter 1

## Preliminaries

### What is axiomatic approach?

In the axiomatic approach, one defines the plane as anything which satisfy a list of properties called *axioms*. Axiomatic system for the theory is like rules for the game. Once the axiom system is fixed, a statement considered to be true if it follows from the axioms and nothing else is considered to be true.

The formulations of the first axioms were not rigorous at all. For example, Euclid described a *line* as *breadthless length* and *straight line* as a line which *lies evenly with the points on itself*. On the other hand, these formulations were clear enough so that one mathematician could understand the other.

The best way to understand an axiomatic system is to make one by yourself. Look around and choose a physical model of the Euclidean plane, say imagine an infinite and perfect surface of chalk board. Now try to collect the key observations about this model. Assume for now that we have intuitive understanding of such notions as *line* and *point*.

- (i) We can measure distances between points.
- (ii) We can draw unique line which pass though two given points.
- (iii) We can measure angles.
- (iv) If we rotate or shift we will not see the difference.
- (v) If we change scale we will not see the difference.

These observations are good enough to start with. Further we will develop the language to reformulate them rigorously.

## What is model?

Euclidean plane can be defined rigorously the following way.

*Define a point in the Euclidean plane is a pair of real numbers  $(x, y)$  and define the distance between two points  $(x_1, y_1)$  and  $(x_2, y_2)$  by the following formula.*

$$\sqrt{(x_1 - x_2)^2 + (y_1 - y_2)^2}.$$

Tha is it! We gave a *numerical model* of Euclidean plane; it builds the Euclidean plane from the real numbers while the later is assumed to be known.

Shortness is the main advantage of the model approach, but it is not intuitively clear why we define points and the distances this way.

On the other hand, the observations made in the previous section are intuitively obvious — this is the main advantage of the axiomatic approach.

An other advantage lies in the fact that the axiomatic approach is easily adjustable. For example we may remove one axiom from the list, or exchange it to an other axiom. We will do such modifications in Chapter 10 and further.

## Metric spaces

The notion of metric space provides a rigorous way to say “*we can measure distances between points*”. That is, instead of (i) on page 11, we can say “*Euclidean plane is a metric space*”.

**1.1. Definition.** *Let  $\mathcal{X}$  be a nonempty set and  $d$  be a function which returns a real number  $d(A, B)$  for any pair  $A, B \in \mathcal{X}$ . Then  $d$  is called metric on  $\mathcal{X}$  if for any  $A, B, C \in \mathcal{X}$ , the following conditions are satisfied.*

(a) *Positiveness:*

$$d(A, B) \geq 0.$$

(b)  *$A = B$  if and only if*

$$d(A, B) = 0.$$

(c) *Symmetry:*

$$d(A, B) = d(B, A).$$

(d) *Triangle inequality:*

$$d(A, C) \leq d(A, B) + d(B, C).$$

A metric space is a set with a metric on it. More formally, a metric space is a pair  $(\mathcal{X}, d)$  where  $\mathcal{X}$  is a set and  $d$  is a metric on  $\mathcal{X}$ .

Elements of  $\mathcal{X}$  are called points of the metric space. Given two points  $A, B \in \mathcal{X}$  the value  $d(A, B)$  is called distance from  $A$  to  $B$ .

## Examples

- ◇ *Discrete metric.* Let  $\mathcal{X}$  be an arbitrary set. For any  $A, B \in \mathcal{X}$ , set  $d(A, B) = 0$  if  $A = B$  and  $d(A, B) = 1$  otherwise. The metric  $d$  is called *discrete metric* on  $\mathcal{X}$ .
- ◇ *Real line.* Set of all real numbers  $(\mathbb{R})$  with metric defined as

$$d(A, B) \stackrel{\text{def}}{=} |A - B|.$$

- ◇ *Metrics on the plane.* Let us denote by  $\mathbb{R}^2$  the set of all pairs  $(x, y)$  of real numbers. Assume  $A = (x_A, y_A)$  and  $B = (x_B, y_B)$  are arbitrary points in  $\mathbb{R}^2$ . One can equip  $\mathbb{R}^2$  with the following metrics.

- *Euclidean metric*, denoted as  $d_2$  and defined as

$$d_2(A, B) = \sqrt{(x_A - x_B)^2 + (y_A - y_B)^2}.$$

- *Manhattan metric*, denoted as  $d_1$  and defined as

$$d_1(A, B) = |x_A - x_B| + |y_A - y_B|.$$

- *Maximum metric*, denoted as  $d_\infty$  and defined as

$$d_\infty(A, B) = \max\{|x_A - x_B|, |y_A - y_B|\}.$$

**1.2. Exercise.** Prove that the following functions are metrics on  $\mathbb{R}^2$ :

- (a)  $d_1$ ;
- (b)  $d_2$ ;
- (c)  $d_\infty$ .

## Shortcut for distance

Most of the time we study only one metric on the space. For example  $\mathbb{R}$  will always refer to the real line. Thus we will not need to name the metric function each time.

Given a metric space  $\mathcal{X}$ , the distance between points  $A$  and  $B$  will be further denoted as

$$AB \text{ or } d_{\mathcal{X}}(A, B);$$

the later is used only if we need to emphasize that  $A$  and  $B$  are points of the metric space  $\mathcal{X}$ .

For example, the triangle inequality can be written as

$$AB + BC \geq AC.$$

For the multiplication we will always use “ $\cdot$ ”, so  $AB$  should not be confused with  $A \cdot B$ .

## Isometries, motions and lines

In this and next section we define *lines* in a metric space. Once it is done the sentence “*We can draw unique line which pass through two given points.*” (ii) on page 11 becomes rigorous.

Recall that a map  $f: \mathcal{X} \rightarrow \mathcal{Y}$  is a *bijection* if it gives an exact pairing of the elements of two sets. Equivalently,  $f: \mathcal{X} \rightarrow \mathcal{Y}$  is a bijection if it has an *inverse*; that is, a map  $g: \mathcal{Y} \rightarrow \mathcal{X}$  such that  $g(f(A)) = A$  for any  $A \in \mathcal{X}$  and  $f(g(B)) = B$  for any  $B \in \mathcal{Y}$ .

**1.3. Definition.** Let  $\mathcal{X}$  and  $\mathcal{Y}$  be two metric spaces and  $d_{\mathcal{X}}, d_{\mathcal{Y}}$  be their metrics. A map

$$f: \mathcal{X} \rightarrow \mathcal{Y}$$

is called *distance-preserving* if

$$d_{\mathcal{Y}}(f(A), f(B)) = d_{\mathcal{X}}(A, B)$$

for any  $A, B \in \mathcal{X}$ .

A bijective distance-preserving map is called an *isometry*.

Two spaces are *isometric* if there exists an isometry from one to the other.

The isometry from space to itself is also called *motion* of the space.

**1.4. Exercise.** Show that any distance preserving map is injective; that is, if  $f: \mathcal{X} \rightarrow \mathcal{Y}$  is a distance preserving map then  $f(A) \neq f(B)$  for any pair of distinct points  $A, B \in \mathcal{X}$

**1.5. Exercise.** Show that if  $f: \mathbb{R} \rightarrow \mathbb{R}$  is a motion of the real line then either

$$f(X) = f(0) + X \quad \text{for any } X \in \mathbb{R}$$

or

$$f(X) = f(0) - X \quad \text{for any } X \in \mathbb{R}.$$

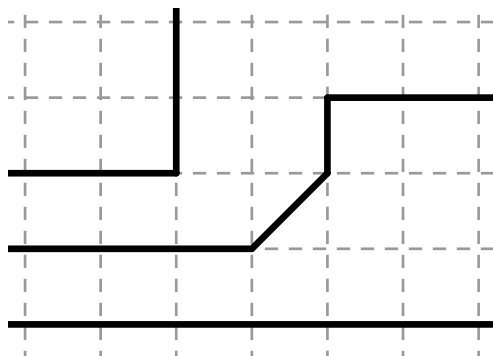
**1.6. Exercise.** Prove that  $(\mathbb{R}^2, d_1)$  is isometric to  $(\mathbb{R}^2, d_\infty)$ .

**1.7. Exercise.** Describe all the motions of the Manhattan plane.

If  $\mathcal{X}$  is a metric space and  $\mathcal{Y}$  is a subset of  $\mathcal{X}$ , then a metric on  $\mathcal{Y}$  can be obtained by restricting the metric from  $\mathcal{X}$ . In other words, the distance between points of  $\mathcal{Y}$  is defined to be the distance between the same points in  $\mathcal{X}$ . Thus any subset of a metric space can be also considered as a metric space.

**1.8. Definition.** A subset  $\ell$  of metric space is called line if it is isometric to the real line.

Note that a space with discrete metric has no lines. The following picture shows examples of lines on the Manhattan plane  $(\mathbb{R}, d_1)$ .



**1.9. Exercise.** Consider graph  $y = |x|$  in  $\mathbb{R}^2$ . In which of the following spaces (a)  $(\mathbb{R}^2, d_1)$ , (b)  $(\mathbb{R}^2, d_2)$  (c)  $(\mathbb{R}^2, d_\infty)$  it forms a line? Why?

**1.10. Exercise.** How many points  $M$  on the line  $(AB)$  for which we have

1.  $AM = MB$  ?
2.  $AM = 2 \cdot MB$  ?

## Half-lines and segments

Assume there is a line  $\ell$  passing through two distinct points  $P$  and  $Q$ . In this case we might denote  $\ell$  as  $(PQ)$ . There might be more than one line through  $P$  and  $Q$ , but if we write  $(PQ)$  we assume that we made a choice of such line.

Let us denote by  $[PQ)$  the half-line which starts at  $P$  and contains  $Q$ . Formally speaking,  $[PQ)$  is a subset of  $(PQ)$  which corresponds to  $[0, \infty)$  under an isometry  $f: (PQ) \rightarrow \mathbb{R}$  such that  $f(P) = 0$  and  $f(Q) > 0$ .

The subset of line  $(PQ)$  between  $P$  and  $Q$  is called segment between  $P$  and  $Q$  and denoted as  $[PQ]$ . Formally, segment can be defined as the intersection of two half-lines:  $[PQ] = [PQ) \cap [QP)$ .

**1.11. Exercise.** Show that if  $X \in [PQ]$  then  $PQ = PX + QX$ .

**1.12. Exercise.** Show that if  $X \in [PQ)$  then  $QX = |PX - PQ|$ .

## Angles

Our next goal is to introduce *angles* and *angle measures*; after that our “we can measure angles”, see (iii) on page 11, becomes rigorous.

An ordered pair of half-lines which start at the same point is called *angle*. An angle formed by two half-lines  $[OA)$  and  $[OB)$  will be denoted as  $\angle AOB$ . In this case the point  $O$  is called *vertex* of the angle.

Intuitively, the angle measure tells how much one has to rotate the first half-line counterclockwise so it gets the position of the second half-line of the angle. The full turn is assumed to be  $2 \cdot \pi$ ; it corresponds to the angle measure in radians.

The angle measure of  $\angle AOB$  is denoted as  $\angle AOB$ ; it is a real number in the interval  $(-\pi, \pi]$ . The notations  $\angle AOB$  and  $\angle AOB$  look similar, they also have close but different meaning, which better not to be confused. For example, the equality

$$\angle AOB = \angle A'O'B'$$

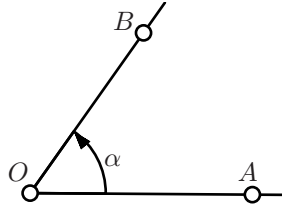
means that  $[OA) = [O'A')$  and  $[OB) = [O'B')$ , in particular  $O = O'$ . On the other hand the equality

$$\angle AOB = \angle A'O'B'$$

means only equality of two real numbers; in this case  $O$  may be distinct from  $O'$ .

Here is the first property of angle measure which will become a part of the axiom.

*Given a half-line  $[OA)$  and  $\alpha \in (-\pi, \pi]$  there is unique half-line  $[OB)$  such that  $\angle AOB = \alpha$ .*





## Reals modulo $2\cdot\pi$

Consider three half-lines starting from the same point,  $[OA)$ ,  $[OB)$  and  $[OC)$ . They make three angles  $\angle AOB$ ,  $\angle BOC$  and  $\angle AOC$ , so the angle measure  $\angle AOC$  should coincide with the sum  $\angle AOB + \angle BOC$  up to full rotation. This property will be expressed by a formula

$$\angle AOB + \angle BOC \equiv \angle AOC,$$

where “ $\equiv$ ” is a new notation which we are about to introduce. The last identity will become a part of the axiom.

We will write

$$\alpha \equiv \beta \quad \text{or} \quad \alpha \equiv \beta \pmod{2\cdot\pi}$$

if  $\alpha = \beta + 2\cdot\pi\cdot n$  for some integer  $n$ . In this case we say

$$\text{“}\alpha \text{ is equal to } \beta \text{ modulo } 2\cdot\pi\text{”}.$$

For example

$$-\pi \equiv \pi \equiv 3\cdot\pi \quad \text{and} \quad \frac{1}{2}\cdot\pi \equiv -\frac{3}{2}\cdot\pi.$$

The introduced relation “ $\equiv$ ” behaves roughly as equality, but the angle measures which differ by full turn

$$\dots, \alpha - 2\cdot\pi, \alpha, \alpha + 2\cdot\pi, \alpha + 4\cdot\pi, \dots$$

are considered to be the same. We can do addition subtraction and multiplication by integer number without getting into trouble. That is, if

$$\alpha \equiv \beta \quad \text{and} \quad \alpha' \equiv \beta'$$

then

$$\alpha + \alpha' \equiv \beta + \beta', \quad \alpha - \alpha' \equiv \beta - \beta' \quad \text{and} \quad n\cdot\alpha \equiv n\cdot\beta$$

for any integer  $n$ . But “ $\equiv$ ” does not in general respect multiplication by non-integer numbers; for example

$$\pi \equiv -\pi \quad \text{but} \quad \frac{1}{2}\cdot\pi \not\equiv -\frac{1}{2}\cdot\pi.$$

**1.13. Exercise.** Show that  $2\cdot\alpha \equiv 0$  if and only if  $\alpha \equiv 0$  or  $\alpha \equiv \pi$ .

## Continuity

The angle measure is also assumed to be continuous. Namely, the following property of angle measure which will become a part of the axiom.

*The function*

$$\angle: (A, O, B) \mapsto \angle AOB$$

*is continuous at any triple of points  $(A, O, B)$  such that  $O \neq A$  and  $O \neq B$  and  $\angle AOB \neq \pi$ .*

To explain this property we need to extend the notion of *continuity* to the function from metric space to an other metric space.

Here we define continuous maps between metric spaces. This definition is a straightforward generalization of the standard definition for the real-to-real functions. Further  $\mathcal{X}$  and  $\mathcal{Y}$  be two metric spaces and  $d_{\mathcal{X}}, d_{\mathcal{Y}}$  be their metrics.

A map  $f: \mathcal{X} \rightarrow \mathcal{Y}$  is called continuous at point  $A \in \mathcal{X}$  if for any  $\varepsilon > 0$  there is  $\delta > 0$  such that if  $d_{\mathcal{X}}(A, A') < \delta$  then

$$d_{\mathcal{Y}}(f(A), f(A')) < \varepsilon.$$

The same way one may define a continuous map of several variables. Say, assume  $f(A, B, C)$  is a function which returns a point in the space  $\mathcal{Y}$  for a triple of points  $(A, B, C)$  in the space  $\mathcal{X}$ . The map  $f$  might be defined only for some triples in  $\mathcal{X}$ .

Assume  $f(A, B, C)$  is defined. Then we say that  $f$  continuous at the triple  $(A, B, C)$  if for any  $\varepsilon > 0$  there is  $\delta > 0$  such that

$$d_{\mathcal{Y}}(f(A, B, C), f(A', B', C')) < \varepsilon.$$

if  $d_{\mathcal{X}}(A, A') < \delta$ ,  $d_{\mathcal{X}}(B, B') < \delta$  and  $d_{\mathcal{X}}(C, C') < \delta$ .

**1.14. Exercise.** Let  $\mathcal{X}$  be a metric space.

(a) Let  $A \in \mathcal{X}$  be a fixed point. Show that the function

$$f(B) \stackrel{\text{def}}{=} d_{\mathcal{X}}(A, B)$$

*is continuous at any point  $B$ .*

(b) Show that  $d_{\mathcal{X}}(A, B)$  is a continuous at any pair  $A, B \in \mathcal{X}$ .

**1.15. Exercise.** Let  $\mathcal{X}, \mathcal{Y}$  and  $\mathcal{Z}$  be a metric spaces. Assume that the functions  $f: \mathcal{X} \rightarrow \mathcal{Y}$  and  $g: \mathcal{Y} \rightarrow \mathcal{Z}$  are continuous at any point and  $h = g \circ f$  is its composition; that is,  $h(A) = g(f(A))$  for any  $A \in \mathcal{X}$ . Show that  $h: \mathcal{X} \rightarrow \mathcal{Z}$  is continuous at any point.

**1.16. Exercise.** Show that any distance preserving map is continuous.

## Congruent triangles

Our next goal is to give a rigorous meaning for (iv) on page 11. To do this, we introduce the notion of *congruent triangles* so instead of “if we rotate or shift we will not see the difference” we say that for triangles side-angle-side congruence holds; that is, if two triangles are congruent if they have two pairs of equal sides and the same angle measure between these sides.

An *ordered* triple of distinct points in a metric space  $\mathcal{X}$ , say  $A, B, C$  is called *triangle* and denoted as  $\triangle ABC$ . So the triangles  $\triangle ABC$  and  $\triangle ACB$  are considered as different.

Two triangles  $\triangle A'B'C'$  and  $\triangle ABC$  are called *congruent* (briefly  $\triangle A'B'C' \cong \triangle ABC$ ) if there is a motion  $f: \mathcal{X} \rightarrow \mathcal{X}$  such that

$$A' = f(A), \quad B' = f(B) \quad \text{and} \quad C' = f(C).$$

Let  $\mathcal{X}$  be a metric space and  $f, g: \mathcal{X} \rightarrow \mathcal{X}$  be two motions. Note that the inverse  $f^{-1}: \mathcal{X} \rightarrow \mathcal{X}$ , as well as the composition  $f \circ g: \mathcal{X} \rightarrow \mathcal{X}$  are also motions.

It follows that “ $\cong$ ” is an equivalence relation; that is, the following two conditions hold.

- ◇ If  $\triangle A'B'C' \cong \triangle ABC$  then  $\triangle ABC \cong \triangle A'B'C'$ .
- ◇ If  $\triangle A''B''C'' \cong \triangle A'B'C'$  and  $\triangle A'B'C' \cong \triangle ABC$  then

$$\triangle A''B''C'' \cong \triangle ABC.$$

Note that if  $\triangle A'B'C' \cong \triangle ABC$  then  $AB = A'B'$ ,  $BC = B'C'$  and  $CA = C'A'$ .

For discrete metric, as well some other metric spaces the converse also holds. The following example shows that it does not hold in the Manhattan plane.

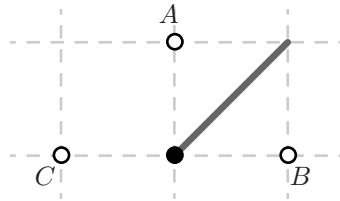
**Example.** Consider three points  $A = (0, 1)$ ,  $B = (1, 0)$  and  $C = (-1, 0)$  on the Manhattan plane  $(\mathbb{R}^2, d_1)$ . Note that

$$d_1(A, B) = d_1(A, C) = d_1(B, C) = 2.$$

On one hand

$$\triangle ABC \cong \triangle ACB.$$

Indeed, it is easy to see that the map  $(x, y) \mapsto (-x, y)$  is an isometry of  $(\mathbb{R}^2, d_1)$  which sends  $A \mapsto A$ ,  $B \mapsto C$  and  $C \mapsto B$ .



On the other hand

$$\triangle ABC \not\cong \triangle BCA.$$

Indeed, assume there is a motion  $f$  of  $(\mathbb{R}^2, d_1)$  which sends  $A \mapsto B$  and  $B \mapsto C$ . Note that a point  $M$  is a midpoint<sup>1</sup> of  $A$  and  $B$  if and only if  $f(M)$  is a midpoint of  $B$  and  $C$ . The set of midpoints for  $A$  and  $B$  is infinite, it contains all points  $(t, t)$  for  $t \in [0, 1]$  (it is the dark gray segment on the picture). On the other hand the midpoint for  $B$  and  $C$  is unique (it is the black point on the picture). Thus the map  $f$  can not be bijective, a contradiction.

---

<sup>1</sup> $M$  is a midpoint of  $A$  and  $B$  if  $d_1(A, M) = d_1(B, M) = \frac{1}{2} \cdot d_1(A, B)$ .

# Euclidean geometry



# Chapter 2

## The Axioms

### The Axioms

Summarizing the above discussion, let us give an axiomatic system of the Euclidean plane. This set of axioms is very close to the one given by Birkhoff in [3].

- I. The *Euclidean plane* is a metric space with at least two points.
- II. There is one and only one line, that contains any two given distinct points  $P$  and  $Q$  in the Euclidean plane.
- III. Any angle  $\angle AOB$  in the Euclidean plane defines a real number in the interval  $(-\pi, \pi]$ . This number is called *angle measure of  $\angle AOB$*  and denoted by  $\angle AOB$ . It satisfies the following conditions:

- (a) Given a half-line  $[OA)$  and  $\alpha \in (-\pi, \pi]$  there is unique half-line  $[OB)$  such that  $\angle AOB = \alpha$
- (b) For any points  $A, B$  and  $C$  distinct from  $O$  we have

$$\angle AOB + \angle BOC \equiv \angle AOC.$$

- (c) The function

$$\angle: (A, O, B) \mapsto \angle AOB$$

is continuous at any triple of points  $(A, O, B)$  such that  $O \neq A$  and  $O \neq B$  and  $\angle AOB \neq \pi$ .

- IV. In the Euclidean plane, we have  $\triangle ABC \cong \triangle A'B'C'$  if and only if

$$A'B' = AB, \quad A'C' = AC, \quad \text{and} \quad \angle C'A'B' = \pm \angle CAB.$$

V. If for two triangles  $\triangle ABC$ ,  $\triangle AB'C'$  in the Euclidean plane and  $k > 0$  we have

$$\begin{aligned} B' &\in [AB), & C' &\in [AC) \\ AB' &= k \cdot AB, & AC' &= k \cdot AC \end{aligned}$$

then

$$B'C' = k \cdot BC, \quad \angle ABC = \angle AB'C' \quad \text{and} \quad \angle ACB = \angle AC'B'.$$

From now on, we can use no information about Euclidean plane which does not follow from the five axioms above.

## Lines and half-lines

**2.1. Proposition.** *Any two distinct lines intersect at most at one point.*

*Proof.* Assume two lines  $\ell$  and  $m$  intersect at two distinct points  $P$  and  $Q$ . Applying Axiom II, we get  $\ell = m$ .  $\square$

**2.2. Exercise.** *Suppose  $A' \in [OA)$  and  $A' \neq O$  show that  $[OA) = [OA')$ .*

**2.3. Proposition.** *Given  $r \geq 0$  and a half-line  $[OA)$  there is unique  $A' \in [OA)$  such that  $OA' = r$ .*

*Proof.* According to definition of half-line, there is an isometry

$$f: [OA) \rightarrow [0, \infty),$$

such that  $f(O) = 0$ . By the definition of isometry,  $OA' = f(A')$  for any  $A' \in [OA)$ . Thus,  $OA' = r$  if and only if  $f(A') = r$ .

Since isometry has to be bijective, the statement follows.  $\square$

## Zero angle

**2.4. Proposition.**  $\angle AOA = 0$  for any  $A \neq O$ .

*Proof.* According to Axiom IIIb,

$$\angle AOA + \angle AOA \equiv \angle AOA$$



Subtract  $\angle AOA$  from both sides, we get  $\angle AOA \equiv 0$ . Hence  $\angle AOA = 0$ .  $\square$

**2.5. Exercise.** Assume  $\angle AOB = 0$ . Show that  $[OA] = [OB]$ .

**2.6. Proposition.** For any  $A$  and  $B$  distinct from  $O$ , we have

$$\angle AOB \equiv -\angle BOA.$$

*Proof.* According to Axiom IIIb,

$$\angle AOB + \angle BOA \equiv \angle AOA$$

By Proposition 2.4  $\angle AOA = 0$ . Hence the result follows.  $\square$

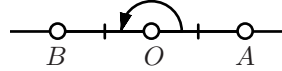
## Straight angle

If  $\angle AOB = \pi$ , we say that  $\angle AOB$  is a *straight angle*. Note that by Proposition 2.6, if  $\angle AOB$  is a straight angle then so is  $\angle BOA$ .

We say that point  $O$  lies *between* points  $A$  and  $B$  if  $O \neq A$ ,  $O \neq B$  and  $O \in [AB]$ .

**2.7. Theorem.** The angle  $\angle AOB$  is straight if and only if  $O$  lies between  $A$  and  $B$ .

*Proof.* By Proposition 2.3, we may assume that  $OA = OB = 1$ .



( $\Leftarrow$ ). Assume  $O$  lies between  $A$  and  $B$ .

Let  $\alpha = \angle AOB$ .

Applying Axiom IIIa, we get a half-line  $[OA')$  such that  $\alpha = \angle BOA'$ . By Proposition 2.3, we can assume that  $OA' = 1$ . According to Axiom IV,

$$\triangle AOB \cong \triangle BOA'.$$

Denote by  $h$  the corresponding motion of the plane; i.e.,  $h$  is a motion such that  $h(A) = B$ ,  $h(O) = O$  and  $h(B) = A'$ .

Then  $(A'B) = h(AB) \ni h(O) = O$ . Therefore both lines  $(AB)$  and  $(A'B)$ , contain  $B$  and  $O$ . By Axiom II,  $(AB) = (A'B)$ .

By the definition of the line,  $(AB)$  contains exactly two points  $A$  and  $B$  on distance 1 from  $O$ . Since  $OA' = 1$  and  $A' \neq B$ , we get  $A = A'$ .

By Axiom IIIb and Proposition 2.4, we get

$$\begin{aligned} 2 \cdot \alpha &\equiv \angle AOB + \angle BOA' \equiv \\ &\equiv \angle AOB + \angle BOA \equiv \\ &\equiv \angle AOA \equiv \\ &\equiv 0 \end{aligned}$$

Therefore, by Exercise 1.13,  $\alpha$  is either 0 or  $\pi$ .

Since  $[OA) \neq [OB)$ , we have  $\alpha \neq 0$ , see Exercise 2.5. Therefore  $\alpha = \pi$ .

( $\Rightarrow$ ). Suppose that  $\angle AOB \equiv \pi$ . Consider line  $(OA)$  and choose point  $B'$  on  $(OA)$  so that  $O$  lies between  $A$  and  $B'$ .

From above, we have  $\angle AOB' = \pi$ . Applying Axiom IIIa, we get  $[OB) = [OB')$ . In particular,  $O$  lies between  $A$  and  $B$ .  $\square$

A triangle  $\triangle ABC$  is called *degenerate* if  $A$ ,  $B$  and  $C$  lie on one line. The following corollary is just a reformulation of Theorem 2.7.

**2.8. Corollary.** *A triangle is degenerate if and only if one of its angles is equal to  $\pi$  or 0.*

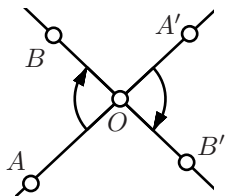
**2.9. Exercise.** *Show that three distinct points  $A$ ,  $O$  and  $B$  lie on one line if and only if*

$$2 \cdot \angle AOB \equiv 0.$$

**2.10. Exercise.** *Let  $A$ ,  $B$  and  $C$  be three points distinct from  $O$ . Show that  $B$ ,  $O$  and  $C$  lie on one line if and only if*

$$2 \cdot \angle AOB \equiv 2 \cdot \angle AOC.$$

## Vertical angles



A pair of angles  $\angle AOB$  and  $\angle A'OB'$  is called *vertical* if  $O$  lies between  $A$  and  $A'$  and at the same time  $O$  lies between  $B$  and  $B'$ .

**2.11. Proposition.** *The vertical angles have equal measures.*

*Proof.* Assume that the angles  $\angle AOB$  and  $\angle A'OB'$  are vertical.

Note that the angles  $\angle AOA'$  and  $\angle BOB'$  are straight. Therefore  $\angle AOA' = \angle BOB' = \pi$ . It follows that

$$\begin{aligned} 0 &= \angle AOA' - \angle BOB' \equiv \\ &\equiv \angle AOB + \angle BOA' - \angle BOA' - \angle A'OB' \equiv \\ &\equiv \angle AOB - \angle A'OB'. \end{aligned}$$

Hence the result follows. □

**2.12. Exercise.** Assume  $O$  is the midpoint for both segments  $[AB]$  and  $[CD]$ . Prove that  $AC = BD$ .



# Chapter 3

## Half-planes

This chapter contains long proofs of self-evident statements. It is okay to skip it, but make sure you know definitions of positive/negative angles and that your intuition agrees with 3.8, 3.10, 3.11 and 3.16.

### Sign of angle

- ◇ The angle  $\angle AOB$  is called *positive* if  $0 < \angle AOB < \pi$ ;
- ◇ The angle  $\angle AOB$  is called *negative* if  $\angle AOB < 0$ .

Note that according to the above definitions the straight angle as well as zero angle are neither positive nor negative.

**3.1. Exercise.** *Show that  $\angle AOB$  is positive if and only if  $\angle BOA$  is negative.*

**3.2. Exercise.** *Let  $\angle AOB$  be a straight angle. Show that  $\angle AOX$  is positive if and only if  $\angle BOX$  is negative.*

**3.3. Exercise.** *Assume that the angles  $\angle AOB$  and  $\angle BOC$  are positive. Show that*

$$\angle AOB + \angle BOC + \angle COA = 2 \cdot \pi.$$

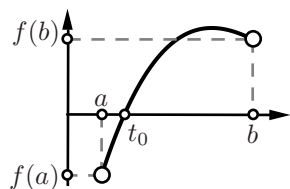
*if  $\angle COA$  is positive and*

$$\angle AOB + \angle BOC + \angle COA = 0.$$

*if  $\angle COA$  is negative.*

## Intermediate value theorem

**3.4. Intermediate value theorem.** *Let  $f: [a, b] \rightarrow \mathbb{R}$  be a continuous function. Assume  $f(a)$  and  $f(b)$  have the opposite signs then  $f(t_0) = 0$  for some  $t_0 \in [a, b]$ .*



The Intermediate value theorem should be covered in any calculus course. We will use the following corollary.

**3.5. Corollary.** *Assume that for any  $t \in [0, 1]$  we have three points in the plane  $O_t$ ,  $A_t$  and  $B_t$  such that*

- (a) *Each function  $t \mapsto O_t$ ,  $t \mapsto A_t$  and  $t \mapsto B_t$  is continuous.*
- (b) *For for any  $t \in [0, 1]$ , the points  $O_t$ ,  $A_t$  and  $B_t$  do not lie on one line.*

*Then the angles  $\angle A_0 O_0 B_0$  and  $\angle A_1 O_1 B_1$  have the same sign.*

*Proof.* Consider the function  $f(t) = \angle A_t O_t B_t$ .

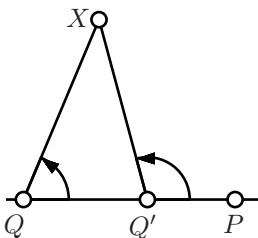
Since the points  $O_t$ ,  $A_t$  and  $B_t$  do not lie on one line, Theorem 2.7 implies that  $f(t) = \angle A_t O_t B_t \neq 0$  or  $\pi$  for any  $t \in [0, 1]$ .

Therefore by Axiom IIIc and Exercise 1.15,  $f$  is a continuous function.

Further, by Intermediate value theorem,  $f(0)$  and  $f(1)$  have the same sign; hence the result follows.  $\square$

## Same sign lemmas

**3.6. Lemma.** *Assume  $Q' \in [PQ)$  and  $Q' \neq P$ . Then for any  $X \notin (PQ)$  the angles  $\angle PQX$  and  $\angle PQ'X$  have the same sign.*



*Proof.* By Proposition 2.3, for any  $t \in [0, 1]$  there is unique point  $Q_t \in [PQ)$  such that

$$PQ_t = (1 - t) \cdot PQ + t \cdot PQ'.$$

Note that the map  $t \mapsto Q_t$  is continuous,  $Q_0 = Q$  and  $Q_1 = Q'$  and for any  $t \in [0, 1]$ , we have  $P \neq Q_t$ .

Applying Corollary 3.5, for  $P_t = P$ ,  $Q_t$  and  $X_t = X$ , we get that  $\angle PQX$  has the same sign as  $\angle PQ'X$ .  $\square$

**3.7. Lemma.** *Assume  $[XY]$  does not intersect  $(PQ)$  then the angles  $\angle PQX$  and  $\angle PQY$  have the same sign.*

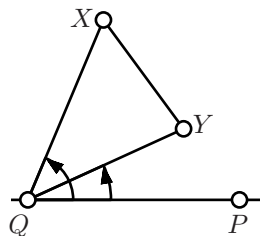
The proof is nearly identical to the one above.

*Proof.* According to Proposition 2.3, for any  $t \in [0, 1]$  there is a point  $X_t \in [XY]$  such that

$$XX_t = t \cdot XY.$$

Note that the map  $t \mapsto X_t$  is continuous,  $X_0 = X$  and  $X_1 = Y$  and for any  $t \in [0, 1]$ , we have  $X_t \notin (QP)$ .

Applying Corollary 3.5, for  $P_t = P$ ,  $Q_t = Q$  and  $X_t$ , we get that  $\angle PQX$  has the same sign as  $\angle PQY$ .  $\square$



## Half-planes

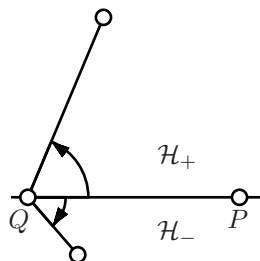
**3.8. Proposition.** *The complement of a line  $(PQ)$  in the plane can be presented in the unique way as a union of two disjoint subsets called half-planes such that*

- (a) *Two points  $X, Y \notin (PQ)$  lie in the same half-plane if and only if the angles  $\angle PQX$  and  $\angle PQY$  have the same sign.*
- (b) *Two points  $X, Y \notin (PQ)$  lie in the same half-plane if and only if  $[XY]$  does not intersect  $(PQ)$ .*

Further we say that  $X$  and  $Y$  lie on *one side from*  $(PQ)$  if they lie in one of the half-planes of  $(PQ)$  and we say that  $P$  and  $Q$  lie on the *opposite sides from*  $\ell$  if they lie in the different half-planes of  $\ell$ .

*Proof.* Let us denote by  $\mathcal{H}_+$  (correspondingly  $\mathcal{H}_-$ ) the set of points  $X$  in the plane such that  $\angle PQX$  is positive (correspondingly negative).

According to Theorem 2.7,  $X \notin (PQ)$  if and only if  $\angle PQX \neq 0$  nor  $\pi$ . Therefore  $\mathcal{H}_+$  and  $\mathcal{H}_-$  give the unique subdivision of the complement of  $(PQ)$  which satisfies property (a).

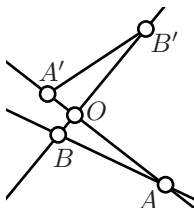


Now let us prove that this subdivision depends only on the line  $(PQ)$ ; that is, if  $(P'Q') = (PQ)$  and  $X, Y \notin (PQ)$  then the angles  $\angle PQX$  and  $\angle PQY$  have the same sign if and only if the angles  $\angle P'Q'X$  and  $\angle P'Q'Y$  have the same sign.

Applying Exercise 3.2, we can assume that  $P = P'$  and  $Q' \in [PQ]$ . It remains to apply Lemma 3.6.

(b). Assume  $[XY]$  intersects  $(PQ)$ . Since the subdivision depends only on the line  $(PQ)$ , we can assume that  $Q \in [XY]$ . In this case, by Exercise 3.2, the angles  $\angle PQX$  and  $\angle PQY$  have opposite signs.

Now assume  $[XY]$  does not intersect  $(PQ)$ . In this case, by Lemma 3.7,  $\angle PQX$  and  $\angle PQY$  have the same sign.  $\square$



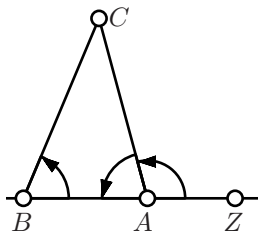
**3.9. Exercise.** Assume that the angles  $\angle AOB$  and  $\angle A'OB'$  are vertical. Show that the line  $(AB)$  does not intersect the segment  $[A'B']$ .

Consider triangle  $\triangle ABC$ . The segments  $[AB]$ ,  $[BC]$  and  $[CA]$  are called *sides of the triangle*.

The following theorem is a corollary of Proposition 3.8.

**3.10. Pasch's theorem.** Assume line  $\ell$  does not pass through any vertex a triangle. Then it intersects either two or zero sides of the triangle.

**3.11. Signs of angles of triangle.** In any nondegenerate triangle  $\triangle ABC$  the angles  $\angle ABC$ ,  $\angle BCA$  and  $\angle CAB$  have the same sign.



*Proof.* Choose a point  $Z \in (AB)$  so that  $A$  lies between  $B$  and  $Z$ .

According to Lemma 3.6, the angles  $\angle ZBC$  and  $\angle ZAC$  have the same sign.

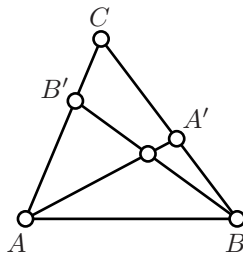
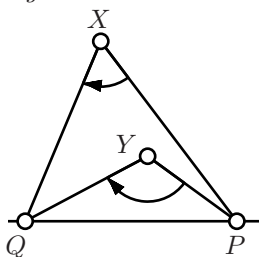
Note that  $\angle ABC = \angle ZBC$  and

$$\angle ZAC + \angle CAB \equiv \pi.$$

Therefore  $\angle CAB$  has the same sign as  $\angle ZAC$  which in turn has the same sign as  $\angle ABC = \angle ZBC$ .

Repeating the same argument for  $\angle BCA$  and  $\angle CAB$ , we get the result.  $\square$

**3.12. Exercise.** Show that two points  $X, Y \notin (PQ)$  lie on the same side from  $(PQ)$  if and only if the angles  $\angle PXQ$  and  $\angle PYQ$  have the same sign.





**3.13. Exercise.** Let  $\triangle ABC$  be a nondegenerate triangle,  $A' \in [BC]$  and  $B' \in [AC]$ . Show that the segments  $[AA']$  and  $[BB']$  intersect.

**3.14. Exercise.** Assume that the points  $X$  and  $Y$  lie on the opposite sides from the line  $(PQ)$ . Show that the half-line  $[PX)$  does not intersect  $[QY)$ .

**3.15. Advanced exercise.** Note that the following quantity

$$\tilde{\angle} ABC = \begin{cases} \pi & \text{if } \angle ABC = \pi \\ -\angle ABC & \text{if } \angle ABC < \pi \end{cases}$$

can serve as the angle measure; that is, the axioms hold if one changes everywhere  $\angle$  to  $\tilde{\angle}$ .

Show that  $\angle$  and  $\tilde{\angle}$  are the only possible angle measures on the plane.

Show that without Axiom IIIc, this is not longer true.

## Triangle with the given sides

Consider triangle  $\triangle ABC$ . Let  $a = BC$ ,  $b = CA$  and  $c = AB$ . Without loss of generality we may assume that  $a \leq b \leq c$ . Then all three triangle inequalities for  $\triangle ABC$  hold if and only if  $c \leq a + b$ . The following theorem states that this is the only restriction on  $a$ ,  $b$  and  $c$ .

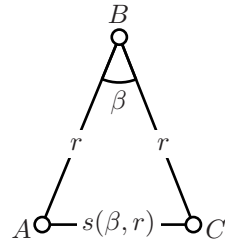
**3.16. Theorem.** Assume that  $0 < a \leq b \leq c \leq a + b$ . Then there is a triangle  $\triangle ABC$  such that  $a = BC$ ,  $b = CA$  and  $c = AB$ .

The proof requires some preparation.

Assume  $r > 0$  and  $\pi > \beta > 0$ . Consider triangle  $\triangle ABC$  such that  $AB = BC = r$  and  $\angle ABC = \beta$ . The existence of such triangle follow from Axiom IIIa and Proposition 2.3.

Note that according to Axiom IV, the values  $\beta$  and  $r$  define the triangle up to congruence. In particular the distance  $AC$  depends only on  $\beta$  and  $r$ . Set

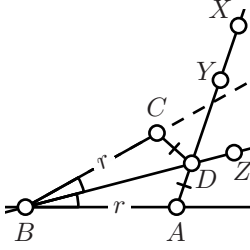
$$s(\beta, r) \stackrel{\text{def}}{=} AC.$$



**3.17. Proposition.** Given  $r > 0$  and  $\varepsilon > 0$  there is  $\delta > 0$  such that if  $0 < \beta < \delta$  then  $s(r, \beta) < \varepsilon$ .

*Proof.* Fix two point  $A$  and  $B$  such that  $AB = r$ .

Choose a point  $X$  such that  $\angle ABX$  is positive. Let  $Y \in [AX)$  be the point such that  $AY = \frac{\varepsilon}{8}$ ; it exists by Proposition 2.3.



Note that  $X$  and  $Y$  lie in the same side from  $(AB)$ ; therefore  $\angle ABY$  is positive. Set  $\delta = \angle ABY$ .

Assume  $0 < \beta < \delta$ ,  $\angle ABC = \beta$  and  $BC = r$ .

Applying Axiom ??, we can choose a half-line  $[BZ)$  such that  $\angle ABZ = \frac{1}{2} \cdot \beta$ . Note that  $A$  and  $Y$  lie on the opposite sides from  $(BZ)$ . Therefore  $(BZ)$  intersects  $[AY]$ ; denote by  $D$  the point of intersection.

Since  $D \in (BZ)$ , we get  $\angle ABD = \frac{\beta}{2}$  or  $\frac{\beta}{2} - \pi$ . The later is impossible since  $D$  and  $Y$  lie on the same side from  $(AB)$ . Therefore

$$\angle ABD = \angle DBC = \frac{\beta}{2}.$$

By Axiom IV,  $\triangle ABD \cong \triangle CBD$ . In particular

$$\begin{aligned} AC &\leq AD + DC = \\ &= 2 \cdot AD \leq \\ &\leq 2 \cdot AY = \\ &= \frac{\varepsilon}{4}. \end{aligned}$$

Hence the result follows.  $\square$

**3.18. Corollary.** Fix a real number  $r > 0$  and two distinct points  $A$  and  $B$ . Then for any real number  $\beta \in [0, \pi]$ , there is unique point  $C_\beta$  such that  $BC_\beta = r$  and  $\angle ABC_\beta = \beta$ . Moreover, the map  $\beta \mapsto C_\beta$  is a continuous map from  $[0, \pi]$  to the plane.

*Proof.* The existence and uniqueness of  $C_\beta$  follows from Axiom IIIa and Proposition 2.3.

Note that if  $\beta_1 \neq \beta_2$  then

$$C_{\beta_1} C_{\beta_2} = s(r, |\beta_1 - \beta_2|).$$

Therefore Proposition 3.17 implies that the map  $\beta \mapsto C_\beta$  is continuous.  $\square$

*Proof of Theorem 3.16.* Fix points  $A$  and  $B$  such that  $AB = c$ . Given  $\beta \in [0, \pi]$ , denote by  $C_\beta$  the point in the plane such that  $BC_\beta = a$  and  $\angle ABC = \beta$ .

According to Corollary 3.18, the map  $\beta \mapsto C_\beta$  is a continuous. Therefore function  $b(\beta) = AC_\beta$  is continuous (formally it follows from Exercise 1.14 and Exercise 1.15).

Note that  $b(0) = c - a$  and  $b(\pi) = c + a$ . Since  $c - a \leq b \leq c + a$ , by Intermediate value theorem (3.4) there is  $\beta_0 \in [0, \pi]$  such that  $b(\beta_0) = b$ . Hence the result follows.  $\square$

# Chapter 4

## Congruent triangles

### Side-angle-side condition

Our next goal is to give conditions which guarantee congruence of two triangles. One of such conditions is Axiom IV, it is also called *side-angle-side condition* or briefly *SAS condition*.

### Angle-side-angle condition

**4.1. ASA condition.** Assume that  $AB = A'B'$ ,  $\angle ABC \equiv \pm \angle A'B'C'$ ,  $\angle CAB \equiv \pm \angle C'A'B'$  and  $\triangle A'B'C'$  is nondegenerate. Then

$$\triangle ABC \cong \triangle A'B'C'.$$

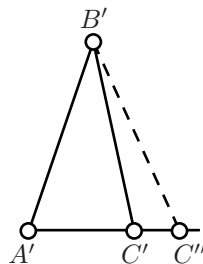
Note that for degenerate triangles the statement does not hold, say consider one triangle with sides 1, 4, 5 and the other with sides 2, 3, 5.

*Proof.* According to Theorem 3.11, either

$$\begin{aligned} \textcircled{1} \quad & \angle ABC \equiv \angle A'B'C', \\ & \angle CAB \equiv \angle C'A'B' \end{aligned}$$

or

$$\begin{aligned} \textcircled{2} \quad & \angle ABC \equiv -\angle A'B'C', \\ & \angle CAB \equiv -\angle C'A'B'. \end{aligned}$$



Further we assume that  $\textcircled{1}$  holds; the case  $\textcircled{2}$  is analogous.

Let  $C''$  be the point on the half-line  $[A'C')$  such that  $A'C'' = AC$ .

By Axiom IV,  $\triangle A'B'C'' \cong \triangle ABC$ . Applying Axiom IV again, we get

$$\angle A'B'C'' \equiv \angle ABC \equiv \angle A'B'C'.$$

By Axiom IIIa,  $[B'C'] = [BC'']$ . Hence  $C''$  lies on  $(B'C')$  as well as on  $(A'C')$ .

Since  $\triangle A'B'C'$  is not degenerate,  $(A'C')$  is distinct from  $(B'C')$ . Applying Axiom II, we get  $C'' = C'$ .

Therefore  $\triangle A'B'C' = \triangle A'B'C'' \cong \triangle ABC$ .  $\square$

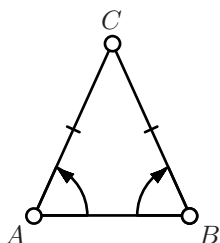
## Isosceles triangles

A triangle with two equal sides is called *isosceles*; the remaining side is called *base* of isosceles triangle.

**4.2. Theorem.** *Assume  $\triangle ABC$  is isosceles with base  $[AB]$ . Then*

$$\angle ABC \equiv -\angle BAC.$$

*Moreover, the converse holds if  $\triangle ABC$  is nondegenerate.*



The following proof is due to Pappus of Alexandria.

*Proof.* Note that

$$CA = CB, \quad CB = CA, \quad \angle ACB \equiv -\angle BCA.$$

Therefore by Axiom IV,

$$\triangle CAB \cong \triangle CBA.$$

Applying the theorem on the signs of angles of triangles (3.11) and Axiom IV again, we get

$$\angle CAB \equiv -\angle CBA.$$

To prove the converse, we assume  $\angle CAB \equiv -\angle CBA$ . By ASA condition 4.1,  $\triangle CAB \cong \triangle CBA$ . Therefore  $CA = CB$ .  $\square$

A triangle with three equal sides is called *equilateral*.

**4.3. Exercise.** *Let  $\triangle ABC$  be an equilateral triangle. Show that*

$$\angle ABC = \angle BCA = \angle CAB.$$

## Side-side-side condition

**4.4. SSS condition.**  $\triangle ABC \cong \triangle A'B'C'$  if

$$A'B' = AB, \quad B'C' = BC \quad \text{and} \quad C'A' = CA.$$

*Proof.* Choose  $C''$  so that  $A'C'' = A'C'$  and  $\angle B'A'C'' \equiv \angle BAC$ . According to Axiom IV,

$$\triangle A'B'C'' \cong \triangle ABC.$$

It will suffice to prove that

③ 
$$\triangle A'B'C' \cong \triangle A'B'C''.$$

The condition ③ trivially holds if  $C'' = C'$ . Thus it remains to consider the case  $C'' \neq C'$ .

Clearly, the corresponding sides of  $\triangle A'B'C'$  and  $\triangle A'B'C''$  are equal.

Note that triangles  $\triangle C'A'C''$  and  $\triangle C'B'C''$  are isosceles. By Theorem 4.2, we have

$$\begin{aligned} \angle A'C''C' &\equiv -\angle A'C'C'', \\ \angle C'C''B' &\equiv -\angle C''C'B'. \end{aligned}$$

Whence by addition

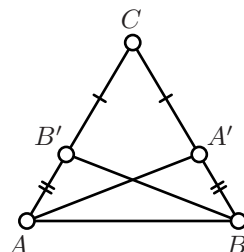
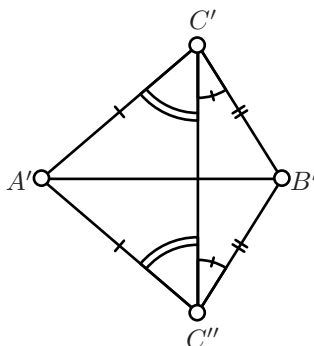
$$\angle A'C'B' \equiv -\angle A'C''B'.$$

Applying Axiom IV again, we get ③. □

**4.5. Exercise.** Let  $M$  be the midpoint of side  $[AB]$  of a triangle  $\triangle ABC$  and  $M'$  be the midpoint of side  $[A'B']$  of a triangle  $\triangle A'B'C'$ . Assume  $C'A' = CA$ ,  $C'B' = CB$  and  $C'M' = CM$ . Prove that  $\triangle A'B'C' \cong \triangle ABC$ .

**4.6. Exercise.** Let  $\triangle ABC$  be isosceles with base  $[AB]$  and the points  $A' \in [BC]$  and  $B' \in [AC]$  be such that  $CA' = CB'$ . Show that

- (a)  $\triangle AA'C \cong \triangle BB'C$ ;
- (b)  $\triangle ABB' \cong \triangle BAA'$ .



**4.7. Exercise.** *Show that if  $AB + BC = AC$  then  $B \in [AC]$ .*

**4.8. Exercise.** *Let  $\triangle ABC$  be a nondegenerate triangle and let  $\iota$  be a motion of the plane such that*

$$\iota(A) = A, \quad \iota(B) = B \quad \text{and} \quad \iota(C) = C.$$

*Show that  $\iota$  is the identity; that is,  $\iota(X) = X$  for any point  $X$  on the plane.*

# Chapter 5

## Perpendicular lines

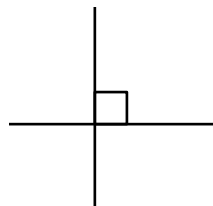
### Right, acute and obtuse angles

- ◊ If  $|\angle AOB| = \frac{\pi}{2}$ , we say that the angle  $\angle AOB$  is *right*;
- ◊ If  $|\angle AOB| < \frac{\pi}{2}$ , we say that the angle  $\angle AOB$  is *acute*;
- ◊ If  $|\angle AOB| > \frac{\pi}{2}$ , we say that the angle  $\angle AOB$  is *obtuse*.

On the diagrams, the right angles will be marked with a little square.

If  $\angle AOB$  is right, we say also that  $[OA)$  is *perpendicular* to  $[OB)$ ; it will be written as  $[OA) \perp [OB)$ .

From Theorem 2.7, it follows that two lines  $(OA)$  and  $(OB)$  are appropriately called *perpendicular*, if  $[OA) \perp [OB)$ . In this case we also write  $(OA) \perp (OB)$ .



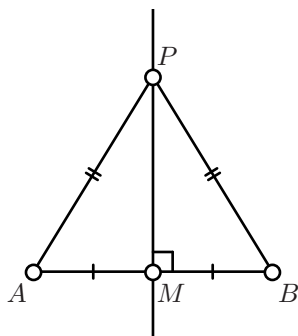
**5.1. Exercise.** Assume point  $O$  lies between  $A$  and  $B$ . Show that for any point  $X$  the angle  $\angle XO A$  is acute if and only if  $\angle XO B$  is obtuse.

### Perpendicular bisector

Assume  $M$  is the midpoint of the segment  $[AB]$ ; that is,  $M \in (AB)$  and  $AM = MB$ .

The line  $\ell$  passing through  $M$  and perpendicular to  $(AB)$  passing through  $M$  is called *perpendicular bisector* to the segment  $[AB]$ .

**5.2. Theorem.** Given distinct points  $A$  and  $B$ , all points equidistant from  $A$  and  $B$  and no others lie on the perpendicular bisector to  $[AB]$ .



*Proof.* Let  $M$  be the midpoint of  $[AB]$ .

Assume  $PA = PB$  and  $P \neq M$ . According to SSS-condition (4.4),  $\triangle AMP \cong \triangle BMP$ . Hence

$$\angle AMP \equiv \pm \angle BMP.$$

Since  $A \neq B$ , we have “ $-$ ” in the above formula. Further,

$$\begin{aligned} \pi &\equiv \angle AMB \equiv \\ &\equiv \angle AMP + \angle PMB \equiv \\ &\equiv 2 \cdot \angle AMP. \end{aligned}$$

That is,  $\angle AMP \equiv \pm \frac{\pi}{2}$  and therefore  $P$  lies on the perpendicular bisector.

To prove converse, suppose  $P \neq M$  is any point in the perpendicular bisector to  $[AB]$ . Then  $\angle AMP \equiv \pm \frac{\pi}{2}$ ,  $\angle BMP \equiv \pm \frac{\pi}{2}$  and  $AM = BM$ . Therefore  $\triangle AMP \cong \triangle BMP$ ; in particular  $AP = BP$ .  $\square$

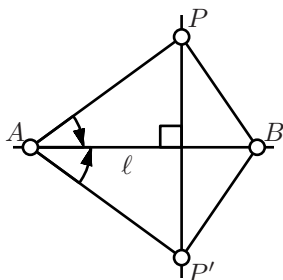
**5.3. Exercise.** Let  $\ell$  be the perpendicular bisector the the segment  $[AB]$  and  $X$  be an arbitrary point on the plane.

Show that  $AX < BX$  if and only if  $X$  and  $A$  lie on the same side from  $\ell$ .

**5.4. Exercise.** Let  $\triangle ABC$  be nondegenerate. Show that  $AB > BC$  if and only if  $|\angle BCA| > |\angle ABC|$ .

## Uniqueness of perpendicular

**5.5. Theorem.** There is one and only one line which pass through a given point  $P$  and perpendicular to a given line  $\ell$ .



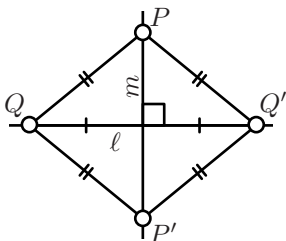
According to the above theorem, there is unique point  $Q \in \ell$  such that  $(QP) \perp \ell$ . This point  $Q$  is called *foot point* of  $P$  on  $\ell$ .

*Proof.* If  $P \in \ell$  then both statements follows from Axiom III.

*Existence for  $P \notin \ell$ .* Let  $A, B$  be two distinct points of  $\ell$ . Choose  $P'$  so that  $AP' = AP$  and  $\angle P'AB \equiv -\angle PAB$ . According to Axiom IV,  $\triangle AP'B \cong \triangle APB$ . Therefore

$$AP = AP' \text{ and } BP = BP'.$$





According to Theorem 5.2,  $A$  and  $B$  lie on perpendicular bisector to  $[PP']$ . In particular  $(PP') \perp (AB) = \ell$ .

*Uniqueness for  $P \notin \ell$ .* From above we can choose a point  $P'$  in such a way that  $\ell$  forms the perpendicular bisector to  $[PP']$ .

Assume  $m \perp \ell$  and  $m \ni P$ . Then  $m$  a perpendicular bisector to some segment  $[QQ']$  of  $\ell$ ; in particular,  $PQ = P'Q$ .

Since  $\ell$  is perpendicular bisector to  $[PP']$ , we get  $PQ = P'Q$  and  $PQ' = P'Q'$ . Therefore

$$P'Q = PQ = P'Q' = P'Q'.$$

By Theorem 5.2,  $P'$  lies on the perpendicular bisector to  $[QQ']$  which is  $m$ . By Axiom II,  $m = (PP')$ .  $\square$

## Reflection

To find the *reflection*  $P'$  through the line  $(AB)$  of a point  $P$ , one drops a perpendicular from  $P$  onto  $(AB)$ , and continues it to the same distance on the other side.

According to Theorem 5.5,  $P'$  is uniquely determined by  $P$ .

Note that  $P = P'$  if and only if  $P \in (AB)$ .

**5.6. Proposition.** Assume  $P'$  is a reflection of the point  $P$  in the line  $(AB)$ . Then  $AP' = AP$  and if  $A \neq P$  then  $\angle BAP' \equiv -\angle BAP$ .

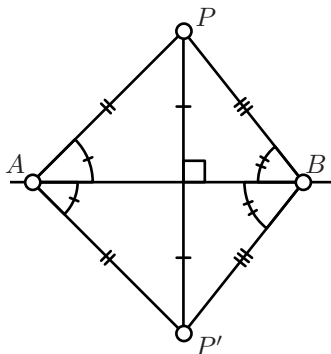
*Proof.* Note that if  $P \in (AB)$  then  $P = P'$  and by Corollary 2.8  $\angle BAP = 0$  or  $\pi$ . Hence the statement follows.

If  $P \notin (AB)$ , then  $P' \neq P$ . By construction  $(AB)$  is perpendicular bisector of  $[PP']$ . Therefore, according to Theorem 5.2,  $AP' = AP$  and  $BP' = BP$ .

In particular,  $\triangle ABP' \cong \triangle ABP$ . Therefore  $\angle BAP' \equiv \pm \angle BAP$ . Since  $P' \neq P$  and  $AP' = AP$ , we get  $\angle BAP' \neq \angle BAP$ . That is, we are left with the case

$$\angle BAP' \equiv -\angle BAP.$$

$\square$



**5.7. Corollary.** *Reflection through the line is a motion of the plane. More over if  $\triangle P'Q'R'$  is the reflection of  $\triangle PQR$  then*

$$\angle Q'P'R' \equiv -\angle QPR.$$

*Proof.* From the construction it follows that the composition of two reflections through the same line, say  $(AB)$ , is the identity map. In particular reflection is a bijection.

Assume  $P'$ ,  $Q'$  and  $R'$  denote the reflections of the points  $P$ ,  $Q$  and  $R$  through  $(AB)$ . Let us first show that

$$\textcircled{1} \quad P'Q' = PQ \quad \text{and} \quad \angle AP'Q' \equiv -\angle APQ.$$

Without loss of generality we may assume that the points  $P$  and  $Q$  are distinct from  $A$  and  $B$ . By Proposition 5.6,

$$\begin{aligned} \angle BAP' &\equiv -\angle BAP, & \angle BAQ' &\equiv -\angle BAQ, \\ AP' &= AP, & AQ' &= AQ. \end{aligned}$$

It follows that  $\angle P'AQ' \equiv -\angle PAQ$ . Therefore  $\triangle P'AQ' \cong \triangle PAQ$  and  $\textcircled{1}$  follows.

Repeating the same argument for  $P$  and  $R$ , we get

$$\angle AP'R' \equiv -\angle APR.$$

Subtracting the second identity in  $\textcircled{1}$ , we get

$$\angle Q'P'R' \equiv -\angle QPR. \quad \square$$

**5.8. Exercise.** *Show that any motion of the plane can be presented as a composition of at most three reflections.*

Applying the exercise above and Corollary 5.7, we can divide the motions of the plane in two types, *direct* and *indirect motions*. The motion  $m$  is direct if

$$\angle Q'P'R' = \angle QPR$$

for any  $\triangle PQR$  and  $P' = m(P)$ ,  $Q' = m(Q)$  and  $R' = m(R)$ ; if instead we have

$$\angle Q'P'R' \equiv -\angle QPR$$

for any  $\triangle PQR$  then the motion  $m$  is called indirect.

**5.9. Lemma.** *Let  $Q$  be the foot point of  $P$  on line  $\ell$ . Then*

$$PX > PQ$$

*for any point  $X$  on  $\ell$  distinct from  $Q$ .*

*Proof.* If  $P \in \ell$  then the result follows since  $PQ = 0$ . Further we assume that  $P \notin \ell$ .

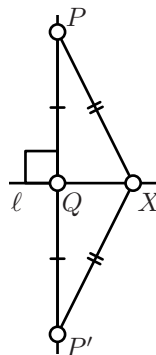
Let  $P'$  be the reflection of  $P$  in  $\ell$ . Note that  $Q$  is the midpoint of  $[PP']$  and  $\ell$  is perpendicular bisector of  $[PP']$ . Therefore

$$PX = P'X \quad \text{and} \quad PQ = P'Q = \frac{1}{2} \cdot PP'$$

Note that  $\ell$  meets  $[PP']$  at the point  $Q$  only. Therefore by the triangle inequality and Exercise 4.7,

$$PX + P'X > PP'.$$

Hence the result follows.  $\square$



**5.10. Exercise.** Let  $X$  and  $Y$  be the reflections of  $P$  through the lines  $(AB)$  and  $(BC)$  correspondingly. Show that

$$\angle XBY \equiv 2 \cdot \angle ABC.$$

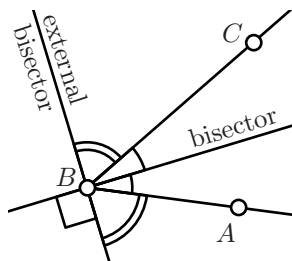
## Angle bisectors

If  $\angle ABX \equiv -\angle CBX$  then we say that line  $(BX)$  bisects angle  $\angle ABC$ , or line  $(BX)$  is a *bisector* of  $\angle ABC$ . If  $\angle ABX \equiv \pi - \angle CBX$  then the line  $(BX)$  is called *external bisector* of  $\angle ABC$ .

Note that bisector and external bisector are uniquely defined by the angle.

Note that if  $\angle ABA' = \pi$ ; that is, if  $B$  lies between  $A$  and  $A'$ , then bisector of  $\angle ABC$  is the external bisector of  $\angle A'BC$  and the other way around.

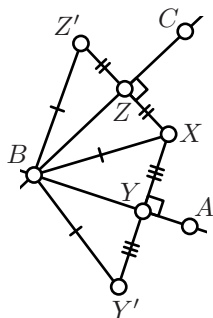
**5.11. Exercise.** Show that for any angle, its bisector and external bisector are perpendicular.



**5.12. Lemma.** Given angle  $\angle ABC$  and a point  $X$ , consider foot points  $Y$  and  $Z$  of  $X$  on  $(AB)$  and  $(BC)$ . Assume  $\angle ABC \neq \pi, 0$ .

Then  $XY = XZ$  if and only if  $X$  lies on the bisector or external bisector of  $\angle ABC$ .

*Proof.* Let  $Y'$  and  $Z'$  be the reflections of  $X$  through  $(AB)$  and  $(BC)$  correspondingly. By Proposition 5.6,  $XB = Y'B = Z'B$ .



Note that

$$XY' = 2 \cdot XY \quad \text{and} \quad XZ' = 2 \cdot XZ.$$

Applying SSS and then SAS congruence conditions, we get

$$\begin{aligned} XY = XZ &\Leftrightarrow \\ &\Leftrightarrow XY' = XZ' \Leftrightarrow \\ &\Leftrightarrow \triangle BXY' \cong \triangle BXZ' \Leftrightarrow \\ &\Leftrightarrow \angle XBY' \equiv \pm \angle BXZ'. \end{aligned}$$

②

According to Proposition 5.6,

$$\begin{aligned} \angle XBA &\equiv -Y'BA, \\ \angle XBC &\equiv -Z'BC. \end{aligned}$$

Therefore

$$2 \cdot \angle XBA \equiv \angle XBY' \quad \text{and} \quad 2 \cdot \angle XBC \equiv -XBZ'.$$

That is, we can continue the chain of equivalence conditions ② the following way

$$\angle XBY' \equiv \pm \angle BXZ' \Leftrightarrow 2 \cdot \angle XBA \equiv \pm 2 \cdot \angle XBC.$$

Since  $(AB) \neq (BC)$ , we have

$$2 \cdot \angle XBA \not\equiv 2 \cdot \angle XBC$$

(compare to Exercise 2.10). Therefore

$$XY = XZ \Leftrightarrow 2 \cdot \angle XBA \equiv -2 \cdot \angle XBC.$$

The last identity means either

$$\angle XBA + \angle XBC \equiv 0$$

or

$$\angle XBA + \angle XBC \equiv \pi.$$

Hence the result follows.  $\square$

## Circles

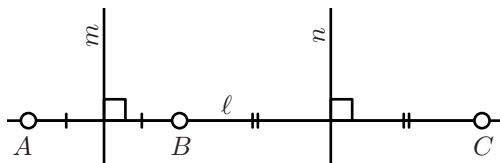
Given a positive real number  $r$  and a point  $O$ , the set  $\Gamma$  of all points of distant  $r$  from  $O$  is called *circle* with *radius*  $r$  and *center*  $O$ .

We say that a point  $P$  lies *inside*  $\Gamma$  if  $OP < r$  and if  $OP > r$ , we say that  $P$  lies *outside*  $\Gamma$ .

A segment between two points on  $\Gamma$  is called *chord* of  $\Gamma$ . A chord passing through the center is called *diameter*.

**5.13. Exercise.** Assume two distinct circles  $\Gamma$  and  $\Gamma'$  have a common chord  $[AB]$ . Show that the line between centers of  $\Gamma$  and  $\Gamma'$  forms a perpendicular bisector to  $[AB]$ .

**5.14. Lemma.** A line and a circle can have at most two points of intersection.



*Proof.* Assume  $A$ ,  $B$  and  $C$  are distinct points which lie on a line  $\ell$  and a circle  $\Gamma$  with center  $O$ .

Then  $OA = OB = OC$ ; in particular  $O$  lies on the perpendicular bisectors  $m$  and  $n$  to  $[AB]$  and  $[BC]$  correspondingly.

Note that the midpoints of  $[AB]$  and  $[BC]$  are distinct. Therefore  $m$  and  $n$  are distinct. The later contradicts the uniqueness of perpendicular (Theorem 5.5).  $\square$

**5.15. Exercise.** Show that two distinct circles can have at most two points of intersection.

In consequence of the above lemma, a line  $\ell$  and a circle  $\Gamma$  might have 2, 1 or 0 points of intersections. In the first case the line is called *secant line*, in the second case it is *tangent line*; if  $P$  is the only point of intersection of  $\ell$  and  $\Gamma$ , we say that  $\ell$  is *tangent to  $\Gamma$  at  $P$* .

Similarly, according Exercise 5.15, two circles might have 2, 1 or 0 points of intersections. If  $P$  is the only point of intersection of circles  $\Gamma$  and  $\Gamma'$ , we say that  $\Gamma$  is *tangent to  $\Gamma'$  at  $P$* .

**5.16. Lemma.** Let  $\ell$  be a line and  $\Gamma$  be a circle with center  $O$ . Assume  $P$  is a common point of  $\ell$  and  $\Gamma$ . Then  $\ell$  is tangent to  $\Gamma$  at  $P$  if and only if and only if  $(PO) \perp \ell$ .

*Proof.* Let  $Q$  be the foot point of  $O$  on  $\ell$ .

Assume  $P \neq Q$ . Denote by  $P'$  the reflection of  $P$  through  $(OQ)$ .

Note that  $P' \in \ell$  and  $(OQ)$  is perpendicular bisector of  $[PP']$ . Therefore  $OP = OP'$ . Hence  $P, P' \in \Gamma \cap \ell$ ; that is,  $\ell$  is secant to  $\Gamma$ .

If  $P = Q$  then according to Lemma 5.9,  $OP < OX$  for any point  $X \in \ell$  distinct from  $P$ . Hence  $P$  is the only point in the intersection  $\Gamma \cap \ell$ ; that is,  $\ell$  is tangent to  $\Gamma$  at  $P$ .  $\square$

**5.17. Exercise.** Let  $\Gamma$  and  $\Gamma'$  be two distinct circles with centers at  $O$  and  $O'$  correspondingly. Assume  $\Gamma$  and  $\Gamma'$  intersect at point  $P$ . Show that  $\Gamma$  is tangent to  $\Gamma'$  if and only if  $O, O'$  and  $P$  lie on one line.

**5.18. Exercise.** Let  $\Gamma$  and  $\Gamma'$  be two distinct circles with centers at  $O$  and  $O'$  and radii  $r$  and  $r'$ .

(a) Show that  $\Gamma$  is tangent to  $\Gamma'$  if and only if

$$OO' = r + r' \quad \text{or} \quad OO' = |r - r'|.$$

(b) Show that  $\Gamma$  intersects  $\Gamma'$  if and only if

$$|r - r'| \leq OO' \leq r + r'.$$

**5.19. Exercise.** Assume three circles intersect at two points. Show that the centers of these circles lie on one line.

## Geometric constructions

The *geometric constructions* in the plane is the construction of points, lines, and circles using only an idealized ruler and compass. These construction problems provide a valuable source of exercises in geometry which we will use further in the lectures.

The idealized ruler can be used only to draw a line through given two points. The idealized compass can be used only to draw a *circle* with given center and radius. That is, given three points  $A, B$  and  $O$  we can draw the set of all points on distant  $AB$  from  $O$ . We may also mark new points in the plane as well as on the constructed lines, circles and their intersections (assuming that such points exist).

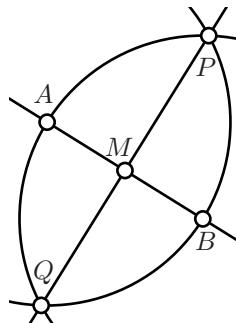
We can also look at the different set of instruments. For example, we may only use the ruler or we may invent a new instrument, say an instrument which produce midpoint for given two points.

As an example, let us consider the following problem:

**5.20. Construction of midpoint.** Construct the midpoint of the given segment  $[AB]$ .

*Construction.*

1. Construct the circle with center at  $A$  which is passing through  $B$ .
2. Construct the circle with center at  $B$  which is passing through  $A$ .
3. Mark both points of intersection of these circles, label them by  $P$  and  $Q$ .
4. Draw the line  $(PQ)$ .
5. Draw the line  $(AB)$ .
6. Mark the point of intersection of  $(PQ)$  and  $(AB)$ ; this is the midpoint of  $[AB]$ .



Typically, you need to prove that the construction produce what was expected. Here is a proof for the example above.

*Proof.* According to Theorem 5.2,  $(PQ)$  is the perpendicular bisector to  $[AB]$ . Therefore  $M = (AB) \cap (PQ)$  is the midpoint of  $[AB]$ .  $\square$

**5.21. Exercise.** *Construct the center of given circle.*

**5.22. Exercise.** *Given two circles  $\Gamma_1$  and  $\Gamma_2$  and a segment  $[AB]$  construct a circle of radius  $AB$  which is tangent to each circle  $\Gamma_1$  and  $\Gamma_2$ .*





# Chapter 6

## Parallel lines and similar triangles

### Parallel lines

In consequence of Axiom II, any two distinct lines  $\ell$  and  $m$  have either one point in common or none. In the first case they are *intersecting*; in the second case,  $\ell$  and  $m$  are said to be *parallel* (briefly  $\ell \parallel m$ ); in addition, a line is always regarded as parallel to itself.

**6.1. Proposition.** *Let  $\ell$ ,  $m$  and  $n$  be the lines in the plane. Assume that  $n \perp m$  and  $m \perp \ell$ . Then  $\ell \parallel n$ .*

*Proof.* Assume contrary; that is,  $\ell \nparallel n$ . Then there is a point, say  $Z$ , of intersection of  $\ell$  and  $n$ . Then by Theorem 5.5,  $\ell = n$ . In particular  $\ell \parallel n$ , a contradiction.  $\square$

**6.2. Theorem.** *Given a point  $P$  and line  $\ell$  in the Euclidean plane there is unique line  $m$  which pass through  $P$  and parallel to  $\ell$ .*

The above theorem has two parts, existence and uniqueness. In the proof of uniqueness we will use Axiom V for the first time.

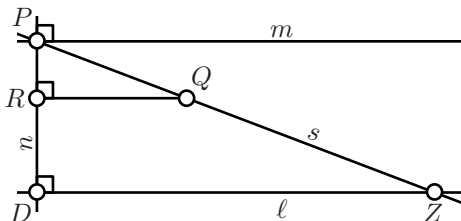
*Proof; existence.* Apply Theorem 5.5 two times, first to construct line  $m$  through  $P$  which is perpendicular to  $\ell$  and second to construct line  $n$  through  $P$  which is perpendicular to  $m$ . Then apply Proposition 6.1.

*Uniqueness.* If  $P \in \ell$  then  $m = \ell$  by the definition of parallel lines. Further we assume  $P \notin \ell$ .

Let us construct lines  $n \ni P$  and  $m \ni P$  as in the proof of existence, so  $m \parallel \ell$ .

Assume there is yet an other line  $s \ni P$  which is distinct from  $m$  and parallel to  $\ell$ . Choose a point  $Q \in s$  which lies with  $\ell$  on the same side from  $m$ . Let  $R$  be the foot point of  $Q$  on  $n$ .

Let  $D$  be the point of intersection of  $n$  and  $\ell$ . According to Proposition 6.1  $(QR) \parallel m$ . Therefore  $Q$ ,  $R$  and  $\ell$  lie on the same side from  $m$ . In particular,  $R \in [PD)$ .



Choose  $Z \in [PQ)$  such that

$$\frac{PZ}{PQ} = \frac{PD}{PR}.$$

Then by Axiom V,  $(ZD) \perp (PD)$ ; that is,  $Z \in \ell \cap s$ , a contradiction.  $\square$

**6.3. Corollary.** Assume  $\ell$ ,  $m$  and  $n$  are lines in the Euclidean plane such that  $\ell \parallel m$  and  $m \parallel n$ . Then  $\ell \parallel n$ .

*Proof.* Assume contrary; that is,  $\ell \not\parallel n$ . Then there is a point  $P \in \ell \cap n$ . By Theorem 6.2,  $n = \ell$ , a contradiction.  $\square$

Note that from the definition, we have  $\ell \parallel m$  if and only if  $m \parallel \ell$ . Therefore according to the above corollary “ $\parallel$ ” is an equivalence relation.

**6.4. Exercise.** Let  $k$ ,  $\ell$ ,  $m$  and  $n$  be the lines in Euclidean plane. Assume that  $k \perp \ell$  and  $m \perp n$ . Show that if  $k \parallel m$  then  $\ell \parallel n$ .

## Similar triangles

Two triangles  $\triangle A'B'C'$  and  $\triangle ABC$  are *similar* (briefly  $\triangle A'B'C' \sim \triangle ABC$ ) if their sides are proportional, that is,

$$\textcircled{1} \quad A'B' = k \cdot AB, \quad B'C' = k \cdot BC \quad \text{and} \quad C'A' = k \cdot CA$$

for some  $k > 0$  and

$$\begin{aligned} \textcircled{2} \quad & \angle A'B'C' = \pm \angle ABC, \\ & \angle B'C'A' = \pm \angle BCA, \\ & \angle C'A'B' = \pm \angle CAB. \end{aligned}$$

**Remarks.**

- ◇ According to 3.11, in the above three equalities the signs can be assumed to be the same.
- ◇ If  $\triangle A'B'C' \sim \triangle ABC$  with  $k = 1$  in **●**, then  $\triangle A'B'C' \cong \triangle ABC$ .
- ◇ Note that “ $\sim$ ” is an *equivalence relation*.  
That is, if  $\triangle A'B'C' \sim \triangle ABC$  then

$$\triangle ABC \sim \triangle A'B'C'$$

and if  $\triangle A''B''C'' \sim \triangle A'B'C'$  and  $\triangle A'B'C' \sim \triangle ABC$  then

$$\triangle A''B''C'' \sim \triangle ABC.$$

Using “ $\sim$ ”, the Axiom V can be formulated the following way.

**6.5. Reformulation of Axiom V.** *If for two triangles  $\triangle ABC$ ,  $\triangle AB'C'$  and  $k > 0$  we have  $B' \in [AB)$ ,  $C' \in [AC)$ ,  $AB' = k \cdot AB$  and  $AC' = k \cdot AC$  then  $\triangle ABC \sim \triangle AB'C'$ .*

In other words, the Axiom V provides a condition which guarantee that two triangles are similar. Let us formulate yet three such conditions.

**6.6. Similarity conditions.** *Two triangles  $\triangle ABC$  and  $\triangle A'B'C'$  in the Euclidean plane are similar if one of the following conditions hold.*

(SAS) *For some constant  $k > 0$  we have*

$$AB = k \cdot A'B', \quad AC = k \cdot A'C'$$

$$\text{and } \angle BAC = \pm \angle B'A'C'.$$

(AA) *The triangle  $\triangle A'B'C'$  is nondegenerate and*

$$\angle ABC = \pm \angle A'B'C', \quad \angle BAC = \pm \angle B'A'C'.$$

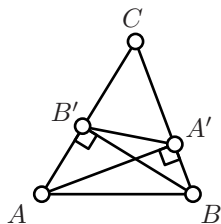
(SSS) *For some constant  $k > 0$  we have*

$$AB = k \cdot A'B', \quad AC = k \cdot A'C', \quad CB = k \cdot C'B'.$$

Each of these conditions is proved by applying the Axiom V with SAS, ASA and SSS congruence conditions correspondingly (see Axiom IV and the conditions 4.1, 4.4).

*Proof.* Set  $k = \frac{AB}{A'B'}$ . Choose points  $B'' \in [A'B')$  and  $C'' \in [A'C')$  so that  $A'B'' = k \cdot A'B'$  and  $A'C'' = k \cdot A'C'$ . By Axiom V,  $\triangle A'B'C' \sim \triangle A'B''C''$ .

Applying SAS, ASA or SSS congruence condition, depending on the case, we get  $\triangle A'B''C'' \cong \triangle ABC$ . Hence the result follows.  $\square$



A triangle with all acute angles is called *acute*.

**6.7. Exercise.** Let  $\triangle ABC$  be an acute triangle in the Euclidean plane. Denote by  $A'$  the foot point of  $A$  on  $(BC)$  and by  $B'$  the foot point of  $B$  on  $(AC)$ . Prove that  $\triangle A'B'C \sim \triangle ABC$ .

## Pythagorean theorem

A triangle is called *right* if one of its angles is right. The side opposite the right angle is called the *hypotenuse*. The sides adjacent to the right angle are called *legs*.

**6.8. Theorem.** Assume  $\triangle ABC$  is a right triangle in the Euclidean plane with right angle at  $C$ . Then

$$AC^2 + BC^2 = AB^2.$$

*Proof.* Let  $D$  be the foot point of  $C$  on  $(AB)$ .

According to Lemma 5.9,

$$AD < AC < AB$$

and

$$BD < BC < AB.$$

Therefore  $D$  lies between  $A$  and  $B$ ; in particular,

$$\textcircled{3} \quad AD + BD = AB.$$

Note that by AA similarity condition, we have

$$\triangle ADC \sim \triangle ACB \sim \triangle CDB.$$

In particular

$$\textcircled{4} \quad \frac{AD}{AC} = \frac{AC}{AB} \quad \text{and} \quad \frac{BD}{BC} = \frac{BC}{BA}.$$

Let us rewrite identities  $\textcircled{4}$  on an other way:

$$AC^2 = AB \cdot AD \quad \text{and} \quad BC^2 = AB \cdot BD.$$

summing up above two identities and applying  $\textcircled{3}$ , we get

$$AC^2 + BC^2 = AB \cdot (AD + BD) = AB^2.$$

□

**6.9. Exercise.** Assume  $A, B, C$  and  $D$  are as in the proof above. Show that

$$CD^2 = AD \cdot BD.$$

The following exercise is the converse to Pythagorean theorem.

**6.10. Exercise.** Assume  $\triangle ABC$  is a triangle in the Euclidean plane such that

$$AC^2 + BC^2 = AB^2.$$

Prove that the angle at  $C$  is right.

## Angles of triangle

**6.11. Theorem.** In any triangle  $\triangle ABC$  in the Euclidean plane, we have

$$\angle ABC + \angle BCA + \angle CAB \equiv \pi.$$

*Proof.* First note that if  $\triangle ABC$  is degenerate then the equality follows from Lemma 2.7. Further we assume that  $\triangle ABC$  is nondegenerate.

Set

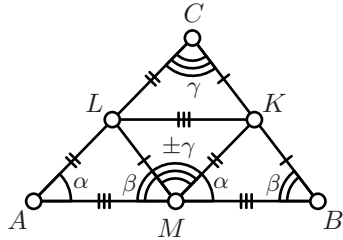
$$\alpha = \angle CAB,$$

$$\beta = \angle ABC,$$

$$\gamma = \angle BCA.$$

We need to prove that

⑤ 
$$\alpha + \beta + \gamma \equiv \pi.$$



Let  $K, L, M$  be the midpoints of the sides  $[BC], [CA], [AB]$  respectively. Observe that according to Axiom V,

$$\triangle AML \sim \triangle ABC,$$

$$\triangle MBK \sim \triangle ABC,$$

$$\triangle LKC \sim \triangle ABC$$

and

$$LM = \frac{1}{2} \cdot BC, \quad MK = \frac{1}{2} \cdot CA, \quad KL = \frac{1}{2} \cdot AB.$$

According to SSS-condition (6.6),  $\triangle KLM \sim \triangle ABC$ . Thus,

$$\textcircled{6} \quad \angle MKL = \pm\alpha, \quad \angle KLM = \pm\beta, \quad \angle BCA = \pm\gamma.$$

According to 3.11, the “+” or “−” sign is to be the same throughout  $\textcircled{6}$ .

If in  $\textcircled{6}$  we have “+” then  $\textcircled{5}$  follows since

$$\beta + \gamma + \alpha \equiv \angle AML + \angle LMK + \angle KMB \equiv \angle AMB \equiv \pi$$

It remains to show that we can not have “−” in  $\textcircled{6}$ . In this case the same argument as above gives

$$\alpha + \beta - \gamma \equiv \pi.$$

The same way we get

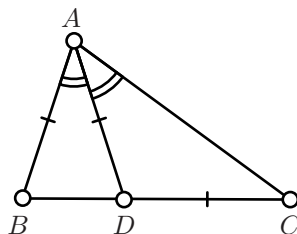
$$\alpha - \beta + \gamma \equiv \pi$$

Adding last two identities we get

$$2 \cdot \alpha \equiv 0.$$

Equivalently  $\alpha \equiv \pi$  or  $0$ ; that is,  $\triangle ABC$  is degenerate, a contradiction.  $\square$

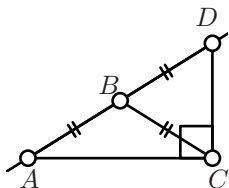
**6.12. Exercise.** Let  $\triangle ABC$  be a non-degenerate triangle. Assume there is a point  $D \in [BC]$  such that  $(AD)$  bisects  $\angle BAC$  and  $BA = AD = DC$ . Find the angles of  $\triangle ABC$ .



**6.13. Exercise.** Show that

$$|\angle ABC| + |\angle BCA| + |\angle CAB| = \pi.$$

for any  $\triangle ABC$  in the Euclidean plane.



**6.14. Exercise.** Let  $\triangle ABC$  be an isosceles nondegenerate triangle with base  $[AC]$ . On the extension of the side  $[AB]$  we construct the point  $D$  such that  $AB = BD$ . Show that  $\angle ACD$  is right.

## Transversal property

If a line  $t$  intersects each line  $\ell$  and  $m$  at one point then we say that  $t$  is a *transversal* to  $\ell$  and  $m$ . On the diagram below, line  $(CB)$  is a transversal to  $(AB)$  and  $(CD)$ .

**6.15. Transversal property.** *In the Euclidean plane,  $(AB) \parallel (CD)$  if and only if*

$$\textcircled{7} \quad 2 \cdot (\angle ABC + \angle BCD) \equiv 0.$$

*Equivalently*

$$\angle ABC + \angle BCD \equiv 0 \quad \text{or} \quad \angle ABC + \angle BCD \equiv \pi;$$

*in the first case  $A$  and  $D$  lie on the opposite sides of  $(BC)$ , in the second case  $A$  and  $D$  lie on the same sides of  $(BC)$ .*

*Proof.* If  $(AB) \parallel (CD)$  then there is  $Z \in (AB) \cap (CD)$  and  $\triangle BCZ$  is non-degenerate.

According to Theorem 6.11,

$$\begin{aligned} \angle ZBC + \angle BCZ &\equiv \pi - \angle CZB \neq \\ &\neq 0 \text{ nor } \pi. \end{aligned}$$

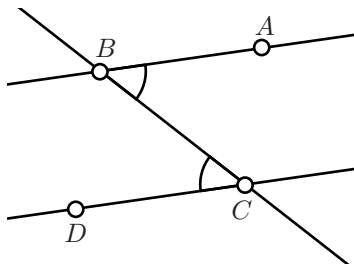
Note that  $2 \cdot \angle ZBC \equiv 2 \cdot \angle ABC$  and  $2 \cdot \angle BCZ \equiv 2 \cdot \angle BCD$ . Therefore

$$2 \cdot (\angle ABC + \angle BCD) \equiv 2 \cdot \angle ZBC + 2 \cdot \angle BCZ \neq 0;$$

that is,  $\textcircled{7}$  does not hold.

It remains to note that the identity  $\textcircled{7}$  uniquely defines line  $(CD)$ . Therefore by Theorem 6.2, if  $(AB) \parallel (CD)$  then equality  $\textcircled{7}$  holds.

Applying Proposition 3.8, we get the last part of the corollary.  $\square$



## Parallelograms

A *quadrilateral* is an ordered quadruple of pairwise distinct points in the plane. A quadrilateral formed by quadruple  $(A, B, C, D)$  will be called *quadrilateral ABCD*.

Given a quadrilateral  $ABCD$ , the four segments  $[AB]$ ,  $[BC]$ ,  $[CD]$  and  $[DA]$  are called *sides of ABCD*; the remaining two segments  $[AC]$  and  $[BD]$  are called *diagonals of ABCD*.

**6.16. Exercise.** Show for any quadrilateral  $ABCD$  in the Euclidean plane we have

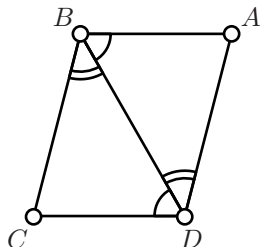
$$\angle ABC + \angle BCD + \angle CDA + \angle DAB \equiv 0$$

A quadrilateral  $ABCD$  in the Euclidean plane is called *nondegenerate* if any three points from  $A, B, C, D$  do not lie on one line.

The nondegenerate quadrilateral  $ABCD$  is called *parallelogram* if  $(AB) \parallel (CD)$  and  $(BC) \parallel (DA)$ .

**6.17. Lemma.** If  $ABCD$  is a parallelogram then

- (a)  $\angle DAB = \angle BCD$ ;
- (b)  $AB = CD$ .



*Proof.* Since  $(AB) \parallel (CD)$ , the points  $C$  and  $D$  lie on the same side from  $(AB)$ . Hence  $\angle ABD$  and  $\angle ABC$  have the same sign. Analogously,  $\angle CBD$  and  $\angle CBA$  have the same sign. Since  $\angle ABC \equiv -\angle CBA$ , we get that the angles  $\angle DBA$  and  $\angle DBC$  have opposite signs; that is,  $A$  and  $C$  lie on the opposite sides of  $(BD)$ .

According to transversal property (6.15),

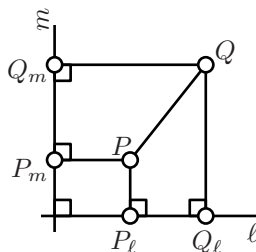
$$\angle BDC \equiv -\angle DBA \quad \text{and} \quad \angle DBC \equiv -\angle BDA.$$

By angle-side-angle condition  $\triangle ABD \cong \triangle CDB$ . Which implies both statements in the lemma.  $\square$

**6.18. Exercise.** Assume  $ABCD$  is a nondegenerate quadrilateral such that  $AB = CD = BC = DA$ . Show that  $ABCD$  is a parallelogram.

**6.19. Exercise.** Let  $\ell$  and  $m$  be perpendicular lines in the Euclidean plane. Given a points  $P$  denote by  $P_\ell$  and  $P_m$  the foot points of  $P$  on  $\ell$  and  $m$  correspondingly.

- (a) Show that for any  $X \in \ell$  and  $Y \in m$  there is unique point  $P$  such that  $P_\ell = X$  and  $P_m = Y$ .
- (b) Show that  $PQ^2 = P_\ell Q_\ell^2 + P_m Q_m^2$  for any pair of points  $P$  and  $Q$ .
- (c) Conclude that Euclidean plane is isometric to  $(\mathbb{R}^2, d_2)$  defined on page 13.





**6.20. Exercise.** Use the Exercise 6.19, to give an alternative proof of Theorem 3.16 in the Euclidean plane.

That is, prove that given real numbers  $a$ ,  $b$  and  $c$  such that

$$0 < a \leq b \leq c \leq a + c,$$

there is a triangle  $\triangle ABC$  such that  $a = BC$ ,  $b = CA$  and  $c = AB$ .



# Chapter 7

## Triangle geometry

### Circumcircle and circumcenter

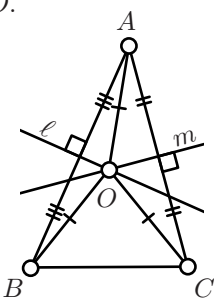
**7.1. Theorem.** *Perpendicular bisectors to the sides of any nondegenerate triangle in the Euclidean plane intersect at one point.*

The point of the intersection of the perpendicular bisectors is called circumcenter. It is the center of the circumcircle of the triangle; that is, the circle which pass through all three vertices of the triangle. The circumcenter of the triangle is usually denoted by  $O$ .

*Proof.* Let  $\triangle ABC$  be nondegenerate. Let  $\ell$  and  $m$  be perpendicular bisectors to sides  $[AB]$  and  $[AC]$  correspondingly.

Assume  $\ell$  and  $m$  intersect, let  $O = \ell \cap m$ . Since  $O \in \ell$ , we have  $OA = OB$  and since  $O \in m$ , we have  $OA = OC$ . It follows that  $OB = OC$ ; that is,  $O$  lies on the perpendicular bisector to  $[BC]$ .

It remains to show that  $\ell \nparallel m$ ; assume contrary. Since  $\ell \perp (AB)$  and  $m \perp (AC)$ , we get  $(AC) \parallel (AB)$  (see Exercise 6.4). Therefore by Theorem 5.5,  $(AC) = (AB)$ ; that is,  $\triangle ABC$  is degenerate, a contradiction.  $\square$



**7.2. Corollary.** *There is unique circle which pass through vertices of a given nondegenerate triangle in the Euclidean plane.*

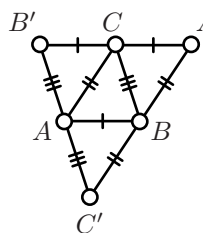
### Altitudes and orthocenter

An *altitude* of a triangle is a line through a vertex and perpendicular to the line containing the opposite side. The term *altitude* maybe

also used for the distance from the vertex to its foot point on the line containing opposite side.

**7.3. Theorem.** *The three altitudes of any nondegenerate triangle in the Euclidean plane intersect in a single point.*

The point of intersection of altitudes is called *orthocenter*; it is usually denoted as  $H$ .



*Proof.* Let  $\triangle ABC$  be nondegenerate.

Consider three lines  $\ell \parallel (BC)$  through  $A$ ,  $m \parallel (CA)$  through  $B$  and  $n \parallel (AB)$  through  $C$ . Since  $\triangle ABC$  is nondegenerate, the lines  $\ell$ ,  $m$  and  $n$  are not parallel. Set  $A' = m \cap n$ ,  $B' = n \cap \ell$  and  $C' = \ell \cap m$ .

Note that  $ABA'C$ ,  $BCB'A$  and  $CBC'A$  are parallelograms. Applying Lemma 6.17 we get that  $\triangle ABC$  is the median triangle of  $\triangle A'B'C'$ ; that is,  $A$ ,  $B$  and  $C$  are the midpoints of  $[B'C']$ ,  $[C'A']$  and  $[A'B']$  correspondingly. By Exercise 6.4,  $(B'C') \parallel (BC)$ , the altitude from  $A$  is perpendicular to  $[B'C']$  and from above it bisects  $[B'C']$ .

Thus altitudes of  $\triangle ABC$  are also perpendicular bisectors of the triangle  $\triangle A'B'C'$ . Applying Theorem 7.1, we get that altitudes of  $\triangle ABC$  intersect at one point.  $\square$

**7.4. Exercise.** *Assume  $H$  is the orthocenter of an acute triangle  $\triangle ABC$  in the Euclidean plane. Show that  $A$  is orthocenter of  $\triangle HBC$ .*

## Medians and centroid

A median of a triangle is a segment joining a vertex to the midpoint of the opposing side.

**7.5. Theorem.** *The three medians of any nondegenerate triangle in the Euclidean plane intersect in a single point. Moreover the point of intersection divides each median in ratio 2:1.*

The point of intersection of medians is called *centroid*; it is usually denoted by  $M$ .

*Proof.* Consider a nondegenerate triangle  $\triangle ABC$ . Let  $[AA']$  and  $[BB']$  be its medians.

According to Exercise 3.13,  $[AA']$  and  $[BB']$  are intersecting. Let us denote by  $M$  the point of intersection.

By side-angle-side condition,  $\triangle B'A'C \sim \triangle ABC$  and  $A'B' = \frac{1}{2} \cdot AB$ . In particular  $\angle ABC \equiv \angle B'A'C$ .

Since  $A'$  lies between  $B$  and  $C$ , we get  $\angle BA'B' + \angle B'A'C = \pi$ . Therefore

$$\angle B'A'B + \angle A'BA = \pi.$$

By transversal property (6.15),  $(AB) \parallel (A'B')$ .

Note that  $A'$  and  $A$  lie on the opposite sides from  $(BB')$ . Therefore by transversal property (6.15) we get

$$\angle B'A'M = \angle BAM.$$

The same way we get,

$$\angle A'B'M = \angle ABM.$$

By AA condition,  $\triangle ABM \sim \triangle A'B'M$ .

Since  $A'B' = \frac{1}{2} \cdot AB$ , we have

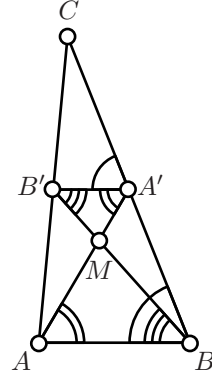
$$\frac{A'M}{AM} = \frac{B'M}{BM} = \frac{1}{2}.$$

In particular  $M$  divides medians  $[AA']$  and  $[BB']$  in ratio 2:1.

Note that  $M$  is unique point on  $[BB']$  such that

$$\frac{B'M}{BM} = \frac{1}{2}.$$

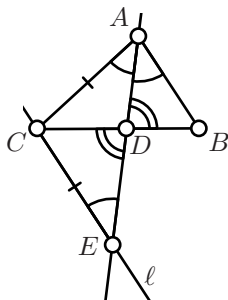
Repeating the same argument for vertices  $B$  and  $C$  we get that all medians  $[CC']$  and  $[BB']$  intersect in  $M$ .  $\square$



## Bisector of triangle

**7.6. Lemma.** *Let  $\triangle ABC$  be a nondegenerate triangle in the Euclidean plane. Assume that the bisector of  $\angle BAC$  intersects  $[BC]$  at the point  $D$ . Then*

$$\textcircled{1} \quad \frac{AB}{AC} = \frac{DB}{DC}.$$



*Proof.* Let  $\ell$  be the line through  $C$  parallel to  $(AB)$ . Note that  $\ell \nparallel (AD)$ ; set  $E = \ell \cap (AD)$ .

Note that  $B$  and  $C$  lie on the opposite sides of  $(AD)$ . Therefore by transversal property (6.15),

$$\textcircled{2} \quad \angle BAD = \angle CED.$$

Further, note that  $\angle ADB$  and  $\angle EDC$  are vertical; in particular, by 2.11

$$\angle ADB = \angle EDC.$$

By AA-similarity condition,  $\triangle ABD \sim \triangle ECD$ . In particular,

$$\textcircled{3} \quad \frac{AB}{EC} = \frac{DB}{DC}.$$

Since  $(AD)$  bisects  $\angle BAC$ , we get  $\angle BAD = \angle DAC$ . Together with  $\textcircled{2}$ , it implies that  $\angle CEA = \angle EAC$ . By Theorem 4.2,  $\triangle ACE$  is isosceles; that is,

$$EC = AC.$$

The later together with  $\textcircled{3}$  implies  $\textcircled{1}$ . □

**7.7. Exercise.** Prove an analog of Lemma 7.6 for the external bisector.

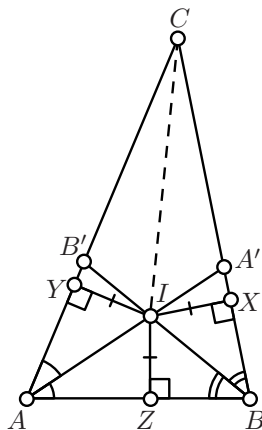
## Incenter

**7.8. Theorem.** The angle bisectors of any nondegenerate triangle intersect at one point.

The point of intersection of bisectors is called *incenter*; it is usually denoted as  $I$ . The point  $I$  lies on the same distance from each side, it is the center of a circle tangent to each side of triangle. This circle is called *incircle* and its radius is called *inradius* of the triangle.

*Proof.* Let  $\triangle ABC$  be a nondegenerate triangle.

Note that points  $B$  and  $C$  lie on the opposite sides from the bisector of  $\angle BAC$ . Hence this bisector intersects  $[BC]$  at a point, say  $A'$ .



Analogously, there is  $B' \in [AC]$  such the  $(BB')$  bisects  $\angle ABC$ .

Applying Pasch's theorem (3.10), twice for the triangles  $\triangle AA'C$  and  $\triangle BB'C$ , we get that  $[AA']$  and  $[BB']$  intersect. Let us denote by  $I$  the point of intersection.

Let  $X$ ,  $Y$  and  $Z$  be the foot points of  $I$  on  $(BC)$ ,  $(CA)$  and  $(AB)$  correspondingly. Applying Lemma 5.12, we get

$$IY = IZ = IX.$$

From the same lemma we get that  $I$  lies on a bisector or exterior bisector of  $\angle BCA$ .

The line  $(CI)$  intersects  $[BB']$ , the points  $B$  and  $B'$  lie on opposite sides of  $(CI)$ . Therefore the angles  $\angle ICA = \angle ICB'$  and  $\angle ICB$  have opposite signs. That is,  $(CI)$  can not be exterior bisector of  $\angle BCA$ . Hence the result follows.  $\square$

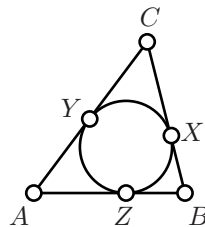
## More exercises

**7.9. Exercise.** Assume that bisector at one vertex of a nondegenerate triangle bisects the opposite side. Show that the triangle is isosceles.

**7.10. Exercise.** Assume that at one vertex of a nondegenerate triangle bisector coincides with the altitude. Show that the triangle is isosceles.

**7.11. Exercise.** Assume sides  $[BC]$ ,  $[CA]$  and  $[AB]$  of  $\triangle ABC$  are tangent to incircle at  $X$ ,  $Y$  and  $Z$  correspondingly. Show that

$$AY = AZ = \frac{1}{2} \cdot (AB + AC - BC).$$



By the definition, the *orthic triangle* is formed by the base points of its altitudes of the given triangle.

**7.12. Exercise.** Prove that orthocenter of an acute triangle coincides with incenter of its orthic triangle.

What should be an analog of this statement for an obtuse triangle?





# Inversive geometry



# Chapter 8

## Inscribed angles

### Angle between a tangent line and a chord

**8.1. Theorem.** *Let  $\Gamma$  be a circle with center  $O$  in the Euclidean plane. Assume line  $(XQ)$  is tangent to  $\Gamma$  at  $X$  and  $[XY]$  is a chord of  $\Gamma$ . Then*

$$\textcircled{1} \quad 2 \cdot \angle QXY \equiv \angle XOY.$$

*Equivalently,*

$$\angle QXY \equiv \frac{1}{2} \cdot \angle XOY \quad \text{or} \quad \angle QXY \equiv \frac{1}{2} \cdot \angle XOY + \pi.$$

*Proof.* Note that  $\triangle XOY$  is isosceles. Therefore  $\angle YXO = \angle OYX$ .

Applying Theorem 6.11 to  $\triangle XOY$ , we get

$$\begin{aligned} \pi &\equiv \angle YXO + \angle OYX + \angle XOY \equiv \\ &\equiv 2 \cdot \angle YXO + \angle XOY. \end{aligned}$$

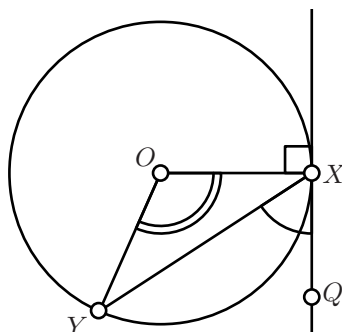
By Lemma 5.16,  $(OX) \perp (XQ)$ . Therefore

$$\angle QXY + \angle YXO \equiv \pm \frac{\pi}{2}.$$

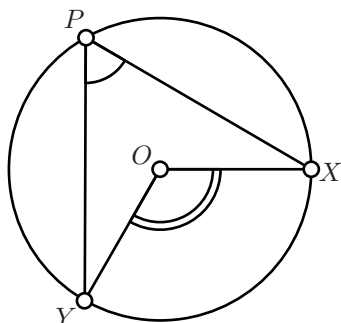
Therefore

$$2 \cdot \angle QXY \equiv \pi - 2 \cdot \angle YXO \equiv \angle XOY.$$

□



## Inscribed angle



We say that triangle is *inscribed* in the circle  $\Gamma$  if all its vertices lie on  $\Gamma$ .

**8.2. Theorem.** Let  $\Gamma$  be a circle with center  $O$  in the Euclidean plane, and  $X, Y$  be two distinct points on  $\Gamma$ . Then  $\triangle XPY$  is inscribed in  $\Gamma$  if and only if

$$\textcircled{2} \quad 2 \cdot \angle XPY \equiv \angle XOY.$$

Equivalently, if and only if

$$\angle XPY \equiv \frac{1}{2} \cdot \angle XOY \quad \text{or} \quad \angle XPY \equiv \frac{1}{2} \cdot \angle XOY + \pi.$$

*Proof.* Choose a point  $Q$  such that  $(PQ) \perp (OP)$ . By Lemma 5.16,  $(PQ)$  is tangent to  $\Gamma$ .

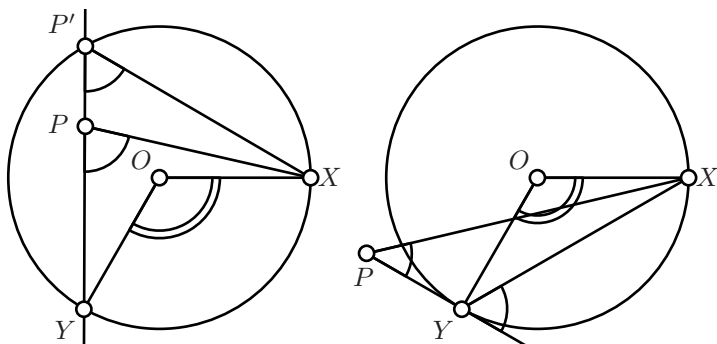
According to Theorem 8.1,

$$2 \cdot \angle QPX \equiv \angle POX,$$

$$2 \cdot \angle QPY \equiv \angle POY.$$

Subtracting one identity from the other we get  $\textcircled{2}$ .

To prove the converse, let us argue by contradiction. Assume that  $\textcircled{2}$  holds for some  $P \notin \Gamma$ . Note that  $\angle XOY \neq 0$  and therefore  $\angle XPY$  is distinct from 0 and  $\pi$ ; that is,  $\triangle PXY$  is nondegenerate.



If the line  $(PY)$  is secant to  $\Gamma$ , denote by  $P'$  the point of intersection of  $\Gamma$  and  $(PY)$  which is distinct from  $Y$ . From above we get

$$2 \cdot \angle XP'Y \equiv \angle XOY.$$

In particular,

$$2 \cdot \angle XP'Y \equiv 2 \cdot \angle XPY.$$

By transversal property (6.15),  $(P'X) \parallel (PX)$ . Since  $\triangle PXY$  is non-degenerate, the latter implies  $P = P'$ , which contradicts  $P \notin \Gamma$ .

In the remaining case, if  $(PY)$  is tangent to  $\Gamma$ , the proof goes along the same lines. Namely, by Theorem 8.1,

$$2 \cdot \angle PYX \equiv \angle YOX.$$

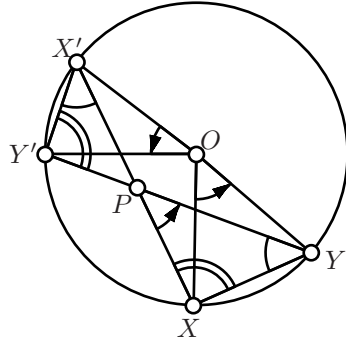
Therefore

$$2 \cdot (\angle XPY + \angle PYX) \equiv 0.$$

By transversal property 6.15,  $(PY) \parallel (XY)$ ; therefore  $(PY) = (XY)$ . That is,  $\triangle PXY$  is degenerate, a contradiction.  $\square$

**8.3. Exercise.** Let  $[XX']$  and  $[YY']$  be two chords of circle  $\Gamma$  with center  $O$  and radius  $r$  in the Euclidean plane. Assume  $(XX')$  and  $(YY')$  intersect at point  $P$ . Show that

- (a)  $2 \cdot \angle XPY = \angle XOY + \angle X'OY'$ ;
- (b)  $\triangle PXY \sim \triangle PY'X'$ ;
- (c)  $PX \cdot PX' = |OP^2 - r^2|$ .



**8.4. Exercise.** Assume that the chords  $[XX']$ ,  $[YY']$  and  $[ZZ']$  of the circle  $\Gamma$  in the Euclidean plane intersect at one point. Show that

$$XY' \cdot ZX' \cdot YZ' = X'Y \cdot Z'X \cdot Y'Z.$$

**8.5. Exercise.** Let  $\Gamma$  be a circumcircle of  $\triangle ABC$ .  $A' \neq A$  and  $B' \neq B$  be the points of intersection of altitudes from  $A$  and  $B$  with  $\Gamma$ . Show that  $\triangle A'B'C$  is isosceles.

## Inscribed quadrilateral

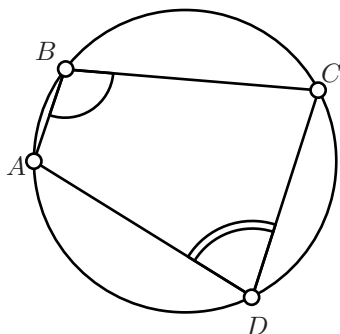
A quadrilateral  $ABCD$  is called *inscribed* if all the points  $A$ ,  $B$ ,  $C$  and  $D$  lie on a circle or a line.

**8.6. Theorem.** A quadrilateral  $ABCD$  in the Euclidean plane is inscribed if and only if

③ 
$$2 \cdot \angle ABC + 2 \cdot \angle CDA \equiv 0.$$

Equivalently, if and only if

$$\angle ABC + \angle CDA \equiv \pi \quad \text{or} \quad \angle ABC \equiv -\angle CDA.$$



*Proof.* Assume  $\triangle ABC$  is degenerate. By Corollary 2.8,

$$2 \cdot \angle ABC \equiv 0;$$

From the same corollary, we get

$$2 \cdot \angle CDA \equiv 0$$

if and only if  $D \in (AB)$ ; hence the result follows.

It remains to consider the case if  $\triangle ABC$  is nondegenerate.

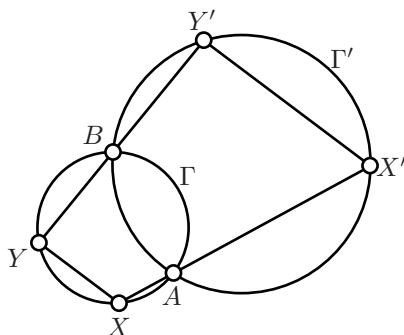
Denote by  $\Gamma$  the circumcircle of  $\triangle ABC$  and let  $O$  be the center of  $\Gamma$ . According to Theorem 8.2,

$$\textcircled{4} \quad 2 \cdot \angle ABC \equiv \angle AOC.$$

From the same theorem,  $D \in \Gamma$  if and only if

$$\textcircled{5} \quad 2 \cdot \angle CDA \equiv \angle COA.$$

Adding  $\textcircled{4}$  and  $\textcircled{5}$ , we get the result.  $\square$



**8.7. Exercise.** Let  $\Gamma$  and  $\Gamma'$  be two circles which intersect at two distinct points  $A$  and  $B$ . Assume  $[XY]$  and  $[X'Y']$  be the chords of  $\Gamma$  and  $\Gamma'$  correspondingly such that  $A$  lies between  $X$  and  $X'$  and  $B$  lies between  $Y$  and  $Y'$ . Show that  $(XY) \parallel (X'Y')$ .

**8.8. Exercise.** Let  $\triangle ABC$  be a nondegenerate triangle in the Euclidean plane,  $A'$  and  $B'$  be foot points of altitudes from  $A$  and  $B$ . Show that  $A, B, A'$  and  $B'$  lie on one circle.

What is the center of this circle?

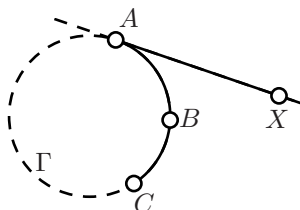
## Arcs

A subset of a circle bounded by two points is called a circle arc.

More precisely, let  $\Gamma$  be a circle and  $A, B, C \in \Gamma$  be three distinct points. The subset which includes the points  $A, C$  as well as all the points on  $\Gamma$  which lie with  $B$  on the same side from  $(AC)$  is called *circle arc  $ABC$* .

For the circle arc  $ABC$ , the points  $A$  and  $C$  are called *endpoints*. Note that there are two circle arcs of  $\Gamma$  with the given endpoints.

A half-line  $[AX)$  is called *tangent* to arc  $ABC$  at  $A$  if the line  $(AX)$  is tangent to  $\Gamma$  and the points  $X$  and  $B$  lie on the same side from the line  $(AC)$ .



If  $B$  lies on the line  $(AC)$ , the arc  $ABC$  degenerates to one of two following a subsets of line  $(AC)$ .

- ◇ If  $B$  lies between  $A$  and  $C$  then we define the arc  $ABC$  as the segment  $[AC]$ . In this case the half-line  $[AC)$  is tangent to the arc  $ABC$  at  $A$ .
- ◇ If  $B \in (AC) \setminus [AC]$  then we define the arc  $ABC$  as the line  $(AC)$  without all the points between  $A$  and  $C$ . If we choose points  $X$  and  $Y \in (AC)$  such that the points  $X, A, C$  and  $Y$  appear in the same order on the line then the arc  $ABC$  is formed by two half-lines in  $[AX)$  and  $[CY)$ . The half-line  $[AX)$  is tangent to the arc  $ABC$  at  $A$ .
- ◇ In addition, any half-line  $[AB)$  will be regarded as an arc. This degenerate arc has only one end point  $A$  and it assumed to be tangent to itself at  $A$ .

The circle arcs together with the degenerate arcs will be called *arcs*.

**8.9. Proposition.** *In the Euclidean plane, a point  $D$  lies on the arc  $ABC$  if and only if*

$$\angle ADC = \angle ABC$$

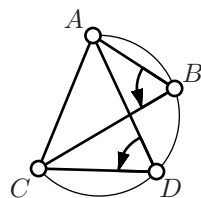
*or  $D$  coincides with  $A$  or  $C$ .*

*Proof.* Note that if  $A, B$  and  $C$  lie on one line then the statement is evident.

Assume  $\Gamma$  be the circle passing through  $A, B$  and  $C$ .

Assume  $D$  is distinct from  $A$  and  $C$ . According to Theorem 8.6,  $D \in \Gamma$  if and only if

$$\angle ADC = \angle ABC \quad \text{or} \quad \angle ADC \equiv \angle ABC + \pi.$$



By Exercise 3.12, the first identity holds then  $B$  and  $D$  lie on one side of  $(AC)$ ; that is,  $D$  belongs to the arc  $ABC$ . If the second identity holds then the points  $B$  and  $D$  lie on the opposite sides from  $(AC)$ , in this case  $D$  does not belong to the arc  $ABC$ .  $\square$

**8.10. Proposition.** *In the Euclidean plane, a half-lines  $[AX)$  is tangent to the arc  $ABC$  if and only if*

$$\angle ABC + \angle CAX \equiv \pi.$$

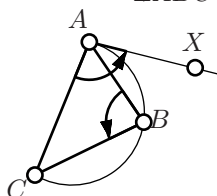
*Proof.* Note that for a degenerate arc  $ABC$  the statement is evident. Further we assume the arc  $ABC$  is nondegenerate.

Applying theorems 8.1 and 8.2, we get

$$2 \cdot \angle ABC + 2 \cdot \angle CAX \equiv 0.$$

Therefore either

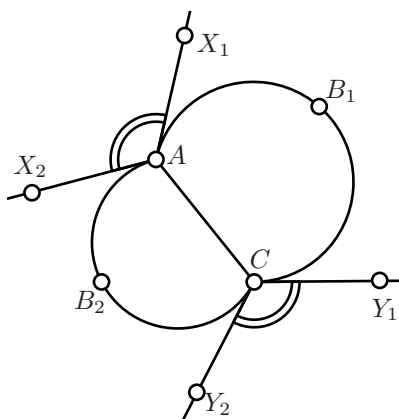
$$\angle ABC + \angle CAX \equiv \pi \quad \text{or} \quad \angle ABC + \angle CAX \equiv 0.$$



Since  $[AX)$  is the tangent half-line to the arc  $ABC$ ,  $X$  and  $B$  lie on the same side from  $(AC)$ . Therefore the angles  $\angle CAX$ ,  $\angle CAB$  and  $\angle ABC$  have the same sign. In particular  $\angle ABC + \angle CAX \not\equiv 0$ ; that is, we are left with the case

$$\angle ABC + \angle CAX \equiv \pi. \quad \square$$

**8.11. Exercise.** *Assume that in the Euclidean plane, the half-lines  $[AX)$  and  $[AY)$  are tangent to the arcs  $ABC$  and  $ACB$  correspondingly. Show that  $\angle XAY$  is straight.*



**8.12. Exercise.** *Show that in the Euclidean plane, there is unique arc with endpoints at the given points  $A$  and  $C$  which is tangent at  $A$  to the given half line  $[AX)$ .*

**8.13. Exercise.** *Consider two arcs  $AB_1C$  and  $AB_2C$  in the Euclidean plane. Let  $[AX_1)$  and  $[AX_2)$  be the half-lines tangent to arcs  $AB_1C$  and  $AB_2C$  at  $A$  and  $[CY_1)$  and  $[CY_2)$  be the half-lines tangent to arcs  $AB_1C$  and  $AB_2C$  at  $C$ . Show that*

$$\angle X_1AX_2 \equiv -\angle Y_1CY_2.$$



# Chapter 9

## Inversion

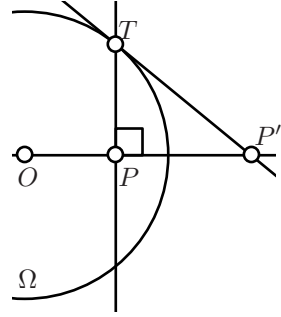
Let  $\Omega$  be the circle with center  $O$  and radius  $r$ . The *inversion* of a point  $P$  with respect to  $\Omega$  is the point  $P' \in [OP)$  such that

$$OP \cdot OP' = r^2.$$

In this case the circle will be called the *circle of inversion* and its center is called *center of inversion*.

The inversion of  $O$  is undefined. If  $P$  is inside  $\Omega$  then  $P'$  is outside and the other way around. Further,  $P = P'$  if and only if  $P \in \Omega$ .

Note that the inversion takes  $P'$  back to  $P$ .



**9.1. Exercise.** Let  $P$  be a point inside of a circle  $\Omega$  centered at  $O$  in the Euclidean plane. Let  $T$  be a point where the perpendicular to  $(OP)$  from  $P$  intersects  $\Omega$ . Let  $P'$  be the point where the tangent to  $\Omega$  at  $T$  intersects  $(OP)$ . Show that  $P'$  is the inversion of  $P$  in the circle  $\Omega$ .

**9.2. Lemma.** Let  $A'$  and  $B'$  be inversions of  $A$  and  $B$  with respect to a circle of center  $O$  in the Euclidean plane. Then

$$\triangle OAB \sim \triangle OB'A'.$$

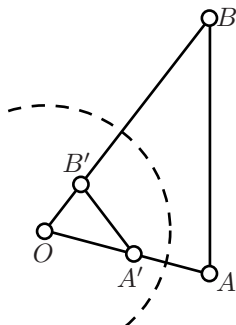
Moreover,

$$\angle AOB \equiv -\angle B'OA',$$

$$\angle OBA \equiv -\angle OA'B',$$

$$\angle BAO \equiv -\angle A'B'O.$$

❶



*Proof.* Let  $r$  be the radius of the circle of the inversion.

From the definition of inversion, we get

$$OA \cdot OA' = OB \cdot OB' = r^2.$$

Therefore

$$\frac{OA}{OB'} = \frac{OB}{OA'}.$$

Clearly

$$\textcircled{2} \quad \angle AOB = \angle A'OB' \equiv -\angle B'OA'.$$

From SAS, we get

$$\triangle OAB \sim \triangle OB'A'.$$

Applying Theorem 3.11 and  $\textcircled{2}$ , we get  $\textcircled{1}$ .  $\square$

**9.3. Exercise.** Let  $P'$  be the inversion of  $P$  in the circle  $\Gamma$ . Assume that  $P \neq P'$ . Show that the value  $\frac{PX}{P'X}$  is the same for all  $X \in \Gamma$ .

The converse to the above exercise also holds. Namely, given positive real number  $k \neq 1$  and two distinct points  $P$  and  $P'$  in the Euclidean plane the locus of points  $X$  such that  $\frac{PX}{P'X} = k$  forms a circle which is called *circle of Apollonius*. In this case  $P'$  is inverse of  $P$  in the circle of Apollonius.

**9.4. Exercise.** Let  $A', B', C'$  be the images of  $A, B, C$  under inversion in the incircle of  $\triangle ABC$  in the Euclidean plane. Show that the incenter of  $\triangle ABC$  is the orthocenter of  $\triangle A'B'C'$ .

## Cross-ratio

Although inversion changes the distances and angles, some quantities expressed in distances or angles do not change after inversion. The following theorem gives the simplest examples of such quantities.

**9.5. Theorem.** Let  $ABCD$  and  $A'B'C'D'$  be two quadrilaterals in the Euclidean plane such that the points  $A', B', C'$  and  $D'$  are inversions of  $A, B, C$ , and  $D$  correspondingly.

Then

(a)

$$\frac{AB \cdot CD}{BC \cdot DA} = \frac{A'B' \cdot C'D'}{B'C' \cdot D'A'}.$$

(b)

$$\angle ABC + \angle CDA \equiv -(\angle A'B'C' + \angle C'D'A').$$

(c) If quadrilateral  $ABCD$  is inscribed then so is  $A'B'C'D'$ .

*Proof;* (a). Let  $O$  be the center of inversion. According to Lemma 9.2,  $\triangle AOB \sim \triangle B'OA'$ . Therefore

$$\frac{AB}{A'B'} = \frac{OA}{OB'}.$$

Analogously,

$$\frac{BC}{B'C'} = \frac{OC}{OB'}, \quad \frac{CD}{C'D'} = \frac{OC}{OD'}, \quad \frac{DA}{D'A'} = \frac{OA}{OD'}.$$

Therefore

$$\frac{AB}{A'B'} \cdot \frac{B'C'}{BC} \cdot \frac{CD}{C'D'} \cdot \frac{D'A'}{DA} = \frac{OA}{OB'} \cdot \frac{OB'}{OC} \cdot \frac{OC}{OD'} \cdot \frac{OD'}{OA} = 1.$$

Hence (a) follows.

(b). According to Lemma 9.2,

$$\begin{aligned} \angle ABO &\equiv -\angle B'A'O, & \angle OBC &\equiv -\angle OA'B', \\ \angle CDO &\equiv -\angle D'C'O, & \angle ODA &\equiv -\angle OA'D'. \end{aligned}$$

Summing these four identities we get

$$\angle ABC + \angle CDA \equiv -(\angle D'C'B' + \angle B'A'D').$$

Applying Axiom IIIb and Exercise 6.16, we get

$$\begin{aligned} \angle A'B'C' + \angle C'D'A' &\equiv -(\angle B'C'D' + \angle D'A'B') \equiv \\ &\equiv \angle D'C'B' + \angle B'A'D'. \end{aligned}$$

Hence (b) follows.

(c). Follows from (b) and Theorem 8.6. □

## Inversive plane and clines

Let  $\Omega$  be a circle with center  $O$  and radius  $r$ . Consider the inversion in  $\Omega$ .

Recall that inversion of  $O$  is not defined. To deal with this problem it is useful to add to the plane an extra point; it will be called *the point at infinity* and we will denote it as  $\infty$ . We can assume that  $\infty$  is inversion of  $O$  and the other way around.

The Euclidean plane with added a point at infinity is called *inversive plane*.

We will always assume that any line and half-line contains  $\infty$ .

It will be convenient to use notion of *cline*, which means *circle or line*; for example we may say *if cline contains  $\infty$  then it is a line or cline which does not contain  $\infty$  is a circle*.

Note that according to Theorem 7.1, for any  $\triangle ABC$  there is unique cline which pass through  $A$ ,  $B$  and  $C$ .

**9.6. Theorem.** *In the inversive plane, inversion of a cline is a cline.*

*Proof.* Denote by  $O$  the center of inverse.

Let  $\Gamma$  be a cline. Choose three distinct points  $A$ ,  $B$  and  $C$  on  $\Gamma$ . (If  $\triangle ABC$  is nondegenerate then  $\Gamma$  is the circumcircle of  $\triangle ABC$ ; if  $\triangle ABC$  is degenerate then  $\Gamma$  is the line passing through  $A$ ,  $B$  and  $C$ .)

Denote by  $A'$ ,  $B'$  and  $C'$  the inversions of  $A$ ,  $B$  and  $C$  correspondingly. Let  $\Gamma'$  be the cline which pass though  $A'$ ,  $B'$  and  $C'$ . According to 7.1,  $\Gamma'$  is well defined.

Assume  $D$  is a point of inversive plane which is distinct from  $A$ ,  $C$ ,  $O$  and  $\infty$ . According to Theorem 8.6,  $D \in \Gamma$  if and only if

$$2 \cdot \angle CDA + 2 \cdot \angle ABC \equiv 0.$$

According to Theorem 9.5b, the later is equivalent to

$$2 \cdot \angle C'D'A' + 2 \cdot \angle A'B'C' \equiv 0.$$

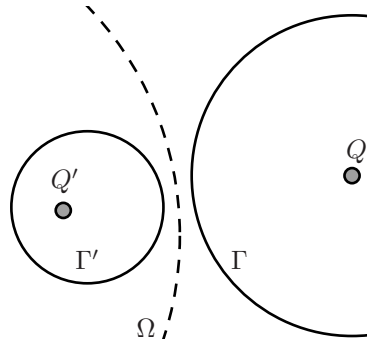
Applying Theorem 8.6 again, we get that the later is equivalent to  $D' \in \Gamma'$ . Hence the result follows.

It remains to prove that  $O \in \Gamma \Leftrightarrow \infty \in \Gamma'$  and  $\infty \in \Gamma \Leftrightarrow O \in \Gamma'$ . Since  $\Gamma$  is inversion of  $\Gamma'$  it is sufficient to prove only

$$\infty \in \Gamma \Leftrightarrow O \in \Gamma'.$$

Since  $\infty \in \Gamma$  we get that  $\Gamma$  is a line. Therefore for any  $\varepsilon > 0$ , the line  $\Gamma$  contains point  $P$  with  $OP > r^2/\varepsilon$ . For the inversion  $P' \in \Gamma'$  of  $P$ , we have  $OP' = r^2/OP < \varepsilon$ . That is, the cline  $\Gamma'$  contains points arbitrary close to  $O$ . It follows that  $O \in \Gamma'$ .  $\square$

**9.7. Exercise.** Assume that if circle  $\Gamma'$  is the inversion of circle  $\Gamma$  in



the Euclidean plane. Denote by  $Q$  the center of  $\Gamma$  and by  $Q'$  the inversion of  $Q$ .

Show that  $Q'$  is not the center of  $\Gamma'$ .

**9.8. Exercise.** Show that for any pair of tangent circles in the inversive plane there is an inversion which sends them to a pair of parallel lines.

**9.9. Theorem.** Consider inversion with respect to circle  $\Omega$  with center  $O$  in the inversive plane. Then

- (a) Line passing through  $O$  is inverted into itself.
- (b) Line not passing through  $O$  is inverted into a circle which pass through  $O$ , and the other way around.
- (c) A circle not passing through  $O$  is inverted into a circle not passing through  $O$ .

*Proof.* In the proof we use Theorem 9.6 without mentioning.

(a). Note that if line passing through  $O$  it contains both  $\infty$  and  $O$ . Therefore its inversion also contains  $\infty$  and  $O$ . In particular image is a line passing through  $O$ .

(b). Since any line  $\ell$  pass through  $\infty$ , its image  $\ell'$  has to contain  $O$ . If the line did not contain  $O$  then  $\ell' \not\ni \infty$ . Therefore  $\ell'$  is a circle which pass through  $O$ .

(c). If circle  $\Gamma$  does not contain  $O$  then its image  $\Gamma'$  does not contain  $\infty$ . Therefore  $\Gamma'$  is a circle. Since  $\Gamma \not\ni \infty$  we get  $\Gamma' \not\ni O$ . Hence the result follows.  $\square$

## Ptolemy's identity

Here is one application of inversion, which we include as an illustration only.

**9.10. Theorem.** Let  $ABCD$  be an inscribed quadrilateral in the Euclidean plane. Assume that the points  $A, B, C$  and  $D$  appear on the cline in the same order. Then

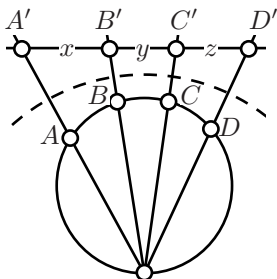
$$AB \cdot CD + BC \cdot DA = AC \cdot BD$$

*Proof.* Assume the points  $A, B, C, D$  lie on one line in this order.

Set  $x = AB$ ,  $y = BC$ ,  $z = CD$ . Note that

$$x \cdot z + y \cdot (x + y + z) = (x + y) \cdot (y + z).$$

Since  $AC = x + y$ ,  $BD = y + z$  and  $DA = x + y + z$ , it proves the identity.



It remains to consider the case when quadrilateral  $ABCD$  is inscribed in a circle, say  $\Gamma$ .

The identity can be rewritten as

$$\frac{AB \cdot DC}{BD \cdot CA} + \frac{BC \cdot AD}{CA \cdot DB} = 1.$$

On the left hand side we have two cross-ratios. According to Theorem 9.5(a), the left hand side does not change if we apply an inversion to each point.

Consider an inversion in a circle centered at a point  $O$  which lie on  $\Gamma$  between  $A$  and  $D$ . By Theorem 9.9, this inversion maps  $\Gamma$  to a line. This reduces the problem to the case when  $A, B, C$  and  $D$  lie on one line, which was already considered.  $\square$

## Perpendicular circles

Assume two circles  $\Gamma$  and  $\Delta$  intersect at two points say  $X$  and  $X'$ . Let  $\ell$  and  $m$  be tangent lines at  $X$  to  $\Gamma$  and  $\Delta$  correspondingly. Analogously,  $\ell'$  and  $m'$  be tangent lines at  $X'$  to  $\Gamma$  and  $\Delta$ .

From Exercise 8.13, we get that  $\ell \perp m$  if and only if  $\ell' \perp m'$ .

We say that circle  $\Gamma$  is *perpendicular* to circle  $\Delta$  (briefly  $\Gamma \perp \Delta$ ) if they intersect and the lines tangent to the circle at one point (and therefore both points) of intersection are perpendicular.

Similarly, we say that circle  $\Gamma$  is perpendicular to a line  $\ell$  (briefly  $\Gamma \perp \ell$ ) if  $\Gamma \cap \ell \neq \emptyset$  and  $\ell$  perpendicular to the tangent lines to  $\Gamma$  at one point (and therefore both points) of intersection. According to Lemma 5.16, it happens only if the line  $\ell$  pass through the center of  $\Gamma$ .

Now we can talk about perpendicular clines.

**9.11. Theorem.** *Assume  $\Gamma$  and  $\Omega$  are distinct circles in the Euclidean plane. Then  $\Omega \perp \Gamma$  if and only if the circle  $\Gamma$  coincides with its inversion in  $\Omega$ .*

*Proof.* Denote by  $\Gamma'$  the inversion of  $\Gamma$ .

( $\Rightarrow$ ) Let  $O$  be the center of  $\Omega$  and  $Q$  be the center of  $\Gamma$ . Denote by  $A$  and  $B$  the points of intersections of  $\Gamma$  and  $\Omega$ . According to Lemma 5.16,  $\Gamma \perp \Omega$  if and only if  $(OA)$  and  $(OB)$  are tangent to  $\Gamma$ .

Note that  $\Gamma'$  also tangent to  $(OA)$  and  $(OB)$  at  $A$  and  $B$  correspondingly. It follows that  $A$  and  $B$  are the foot points of the center of  $\Gamma'$  on  $(OA)$  and  $(OB)$ . Therefore both  $\Gamma'$  and  $\Gamma$  have the center  $Q$ . Finally,  $\Gamma' = \Gamma$ , since both circles pass through  $A$ .



Note that  $P'$  lies outside of  $\Omega$ . Therefore the points  $P$ ,  $P'$  and  $Q$  are distinct.

According to Corollary 7.2, there is unique cline passing through  $P$ ,  $Q$  and  $P'$ . Hence the result follows.  $\square$

**9.15. Exercise.** Let  $\Omega_1$  and  $\Omega_2$  be two distinct circles in the Euclidean plane. Assume that the point  $P$  does not lie on  $\Omega_1$  nor on  $\Omega_2$ . Show that there is unique cline passing through  $P$  which is perpendicular  $\Omega_1$  and  $\Omega_2$ .

**9.16. Exercise.** Let  $P$ ,  $Q$ ,  $P'$  and  $Q'$  be points in the Euclidean plane. Assume  $P'$  and  $Q'$  are inversions of  $P$  and  $Q$  correspondingly. Show that the quadrilateral  $PQP'Q'$  is inscribed.

**9.17. Exercise.** Let  $\Omega_1$  and  $\Omega_2$  be two perpendicular circles with centers at  $O_1$  and  $O_2$  correspondingly. Show that the inversion of  $O_1$  in  $\Omega_2$  coincides with the inversion of  $O_2$  in  $\Omega_1$ .

**9.18. Exercise.** Three distinct circles  $\Omega_1$ ,  $\Omega_2$  and  $\Omega_3$  intersect at two points  $A$  and  $B$ . Assume that a circle  $\Gamma$  is perpendicular to  $\Omega_1$  and  $\Omega_2$ . Show that  $\Gamma$  is perpendicular to  $\Omega_3$ .

## Angles after inversion

**9.19. Proposition.** In the inversive plane, the inversion of an arc is an arc.

*Proof.* Consider four distinct points  $A$ ,  $B$ ,  $C$  and  $D$ ; let  $A'$ ,  $B'$ ,  $C'$  and  $D'$  be their inverses. We need to show that  $D$  lies on the arc  $ABC$  if and only if  $D'$  lies on the arc  $A'B'C'$ . According to Proposition 8.9, the later is equivalent to the following

$$\angle ADC = \angle ABC \Leftrightarrow \angle A'D'C' = \angle A'B'C'.$$

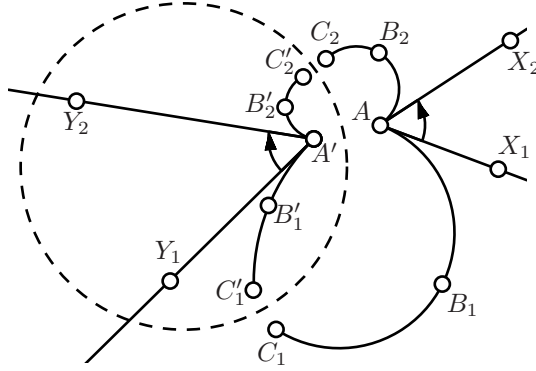
Which follows from Theorem 9.5(b).  $\square$

The following theorem roughly says that the angle between arcs changes sign after the inversion. A deeper understanding of this theorem comes from complex analysis.

**9.20. Theorem.** Let  $AB_1C_1$ ,  $AB_2C_2$  be two arcs in the inversive plane and  $A'B'_1C'_1$ ,  $A'B'_2C'_2$  be their inversions. Let  $[AX_1)$  and  $[AX_2)$  be the half-lines tangent to  $AB_1C_1$  and  $AB_2C_2$  at  $A$  and  $[A'Y_1)$  and  $[A'Y_2)$  be the half-lines tangent to  $A'B'_1C'_1$  and  $A'B'_2C'_2$  at  $A'$ . Then

$$\angle X_1AX_2 \equiv -\angle Y_1A'Y_2.$$





*Proof.* Applying to Proposition 8.10,

$$\begin{aligned}
 \angle X_1 A X_2 &\equiv \angle X_1 A C_1 + \angle C_1 A C_2 + \angle C_2 A X_2 \equiv \\
 &\equiv (\pi - \angle C_1 B_1 A) + \angle C_1 A C_2 + (\pi - \angle A B_2 C_2) \equiv \\
 &\equiv -(\angle C_1 B_1 A + \angle A B_2 C_2 + \angle C_2 A C_1) \equiv \\
 &\equiv -(\angle C_1 B_1 A + \angle A B_2 C_1) - (\angle C_1 B_2 C_2 + \angle C_2 A C_1).
 \end{aligned}$$

The same way we get

$$\angle Y_1 A' Y_2 \equiv -(\angle C'_1 B'_1 A' + \angle A' B'_2 C'_1) - (\angle C'_1 B'_2 C'_2 + \angle C'_2 A' C'_1).$$

By Theorem 9.5(b),

$$\begin{aligned}
 \angle C_1 B_1 A + \angle A B_2 C_1 &\equiv -(\angle C'_1 B'_1 A' + \angle A' B'_2 C'_1), \\
 \angle C_1 B_2 C_2 + \angle C_2 A C_1 &\equiv -(\angle C'_1 B'_2 C'_2 + \angle C'_2 A' C'_1).
 \end{aligned}$$

Hence the result follows.  $\square$

**9.21. Corollary.** *Let  $P'$ ,  $Q'$  and  $\Gamma'$  be the inversions of points  $P$ ,  $Q$  and circle  $\Gamma$  in a circle  $\Omega$  of the Euclidean plane. Assume  $P$  is inversion of  $Q$  in  $\Gamma$  then  $P'$  is inversion of  $Q'$  in  $\Gamma'$ .*

*Proof.* If  $P = Q$  then  $P' = Q' \in \Gamma'$  therefore  $P'$  is inversion of  $Q'$  in  $\Gamma'$ .

It remains to consider the case  $P \neq Q$ . Let  $\Delta_1$  and  $\Delta_2$  be two distinct circles which intersect at  $P$  and  $Q$ . According to Corollary 9.13,  $\Delta_1 \perp \Gamma$  and  $\Delta_2 \perp \Gamma$ .

Denote by  $\Delta'_1$  and  $\Delta'_2$  the inversions of  $\Delta_1$  and  $\Delta_2$  in  $\Omega$ . Clearly  $\Delta'_1$  and  $\Delta'_2$  intersect at  $P'$  and  $Q'$ .

From Theorem 9.20, the later is equivalent to  $\Delta'_1 \perp \Gamma'$  and  $\Delta'_2 \perp \Gamma'$ . By Corollary 9.12 the later implies  $P'$  is inversion of  $Q'$  in  $\Gamma'$ .  $\square$



# Non-Euclidean geometry



## Chapter 10

# Absolute plane

Let us remove Axiom V from our axiomatic system, see pages 23–24. This way we define a new object called *absolute plane* or *neutral plane*. (In the absolute plane, the Axiom V may or may not hold.)

Clearly any theorem in absolute geometry holds in Euclidean geometry. In other words, Euclidean plane is an example of absolute plane. In the next chapter we will show that besides the Euclidean plane there are other examples of absolute plane.

Many theorems in Euclidean geometry which we discussed, still hold in absolute geometry.

In our lectures, the Axiom V was used for the first time in the proof of uniqueness of parallel line in Theorem 6.2. Therefore all the statements before Theorem 6.2 also hold in absolute geometry.

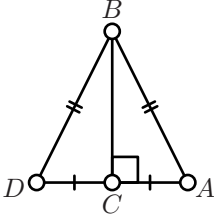
It makes all the discussed results about half-planes, signs of angles, congruence conditions, perpendicular lines and reflections true in absolute plane. If in the formulation of a statement above you do not see words “Euclidean plane” or “inversive plane”, it means that the statement holds in absolute plane and the same proof works.

Let us give an example of theorem in absolute geometry, which admits a shorter proof in Euclidean geometry.

**10.1. Theorem.** *Assume that triangles  $\triangle ABC$  and  $\triangle A'B'C'$  have right angles at  $C$  and  $C'$  correspondingly,  $AB = A'B'$  and  $AC = A'C'$ . Then  $\triangle ABC \cong \triangle A'B'C'$ .*

*Euclidean proof.* By Pythagorean theorem  $BC = B'C'$ . Then the statement follows from SSS congruence condition.  $\square$

Note that the proof of Pythagorean theorem used properties of similar triangles, which in turn used Axiom V. Hence the above proof is not working in absolute plane.



*Absolute proof.* Denote by  $D$  the reflection of  $A$  through  $(BC)$  and by  $D'$  the reflection of  $A'$  through  $(B'C')$ . Note that

$$AD = 2 \cdot AC = 2 \cdot A'C' = A'D',$$

$$BD = BA = B'A' = B'D'.$$

By SSS, we get  $\triangle ABD \cong \triangle A'B'D'$ .

The theorem follows since  $C$  is the midpoint of  $[AD]$  and  $C'$  is the midpoint of  $[A'D']$ .  $\square$

**10.2. Exercise.** Give a proof of Exercise 7.9 which works in the absolute plane.

## Two angles of triangle

In this section we will prove a weaker form of Theorem 6.11 which holds in absolute plane.

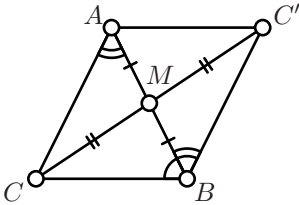
**10.3. Proposition.** Let  $\triangle ABC$  be nondegenerate triangle in the absolute plane. Then

$$|\angle CAB| + |\angle ABC| < \pi.$$

Note according to 3.11, the angles  $\angle ABC$ ,  $\angle BCA$  and  $\angle CAB$  have the same sign. Therefore in Euclidean plane the theorem follows immediately from Theorem 6.11. In absolute geometry we need to work more.

*Proof.* By 3.11, we may assume that  $\angle CAB$  and  $\angle ABC$  are positive.

Let  $M$  be the midpoint of  $[AB]$ . Chose  $C' \in (CM)$  distinct from  $C$  so that  $C'M = CM$ .



Note that the angles  $\angle AMC$  and  $\angle BMC'$  are vertical; in particular

$$\angle AMC = \angle BMC'.$$

By construction  $AM = BM$  and  $CM = C'M$ . Therefore  $\triangle AMC \cong \triangle BMC'$ ; in particular

$$\angle CAB = \pm \angle C'BA.$$

According to 3.11, the angles  $\angle CAB$  and  $\angle C'BA$  have the same sign as  $\angle AMC$  and  $\angle BMC'$ . Therefore

$$\angle CAB = \angle C'BA.$$

In particular,

$$\begin{aligned}\angle C'BC &\equiv \angle C'BA + \angle ABC \equiv \\ &\equiv \angle CAB + \angle ABC.\end{aligned}$$

Finally note that  $C'$  and  $A$  lie on the same side from  $(CB)$ . Therefore the angles  $\angle CAB$ ,  $\angle ABC$  and  $\angle C'BC$  are positive. By Exercise 3.3, the result follows.  $\square$

**10.4. Exercise.** Assume  $A, B, C$  and  $D$  be points in absolute plane such that

$$2 \cdot \angle ABC + 2 \cdot \angle BCD \equiv 0.$$

Show that  $(AB) \parallel (CD)$ .

Note that one can not extract the solution of the above exercise from the proof of transversal property (6.15)

**10.5. Exercise.** Prove side-angle-angle congruence condition in absolute plane.

In other words, let  $\triangle ABC$  and  $\triangle A'B'C'$  be two triangles in absolute plane. Show that  $\triangle ABC \cong \triangle A'B'C'$  if

$$AB = A'B', \quad \angle ABC = \pm \angle A'B'C' \quad \text{and} \quad \angle BCA = \pm \angle B'C'A'.$$

Note that in the Euclidean plane, the above exercise follows from ASA and Theorem on sum of angles of triangle (6.11). However, Theorem 6.11 can not be used here since its proof use Axiom V. Later, in theorem Theorem 12.6, we will show that Theorem 6.11 does not hold in absolute plane.

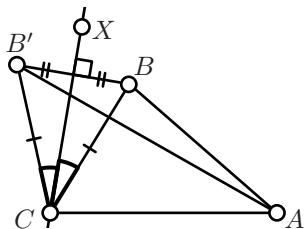
**10.6. Exercise.** Assume that point  $D$  lies between the vertices  $A$  and  $B$  of triangle  $\triangle ABC$  in the absolute plane. Show that

$$CD < CA \quad \text{or} \quad CD < CB.$$

## Three angles of triangle

**10.7. Proposition.** Let  $\triangle ABC$  and  $\triangle A'B'C'$  be two triangles in the absolute plane such that  $AC = A'C'$  and  $BC = B'C'$ . Then

$$AB < A'B' \quad \text{if and only if} \quad |\angle ACB| < |\angle A'C'B'|.$$



*Proof.* Without loss of generality, we may assume that  $A = A'$  and  $C = C'$  and  $\angle ACB, \angle ACB' \geq 0$ . In this case we need to show that

$$AB < AB' \Leftrightarrow \angle ACB < \angle ACB'.$$

Choose point  $X$  so that

$$\angle ACX = \frac{1}{2} \cdot (\angle ACB + \angle ACB').$$

Note that

- ◇  $(CX)$  bisects  $\angle BCB'$
- ◇  $(CX)$  is the perpendicular bisector of  $[BB']$ .
- ◇  $A$  and  $B$  lie on the same side from  $(CX)$  if and only if

$$\angle ACB < \angle ACB'.$$

From Exercise 5.3,  $A$  and  $B$  lie on the same side from  $(CX)$  if and only if  $AB < AB'$ . Hence the result follows.  $\square$

**10.8. Theorem.** Let  $\triangle ABC$  be a triangle in the absolute plane. Then

$$|\angle ABC| + |\angle BCA| + |\angle CAB| \leq \pi.$$

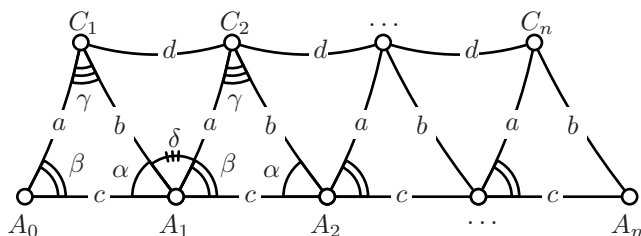
The following proof is due to Legendre [6], earlier proofs were due to Saccheri [9] and Lambert [5].

*Proof.* Let  $\triangle ABC$  be the given triangle. Set

$$\begin{array}{lll} a = BC, & b = CA, & c = AB, \\ \alpha = \angle CAB & \beta = \angle ABC & \gamma = \angle BCA. \end{array}$$

Without loss of generality, we may assume that  $\alpha, \beta, \gamma \geq 0$ .

Fix a positive integer  $n$ . Consider points  $A_0, A_1, \dots, A_n$  on the half-line  $[BA)$  so that  $BA_i = i \cdot c$  for each  $i$ . (In particular,  $A_0 = B$  and  $A_1 = A$ .) Let us construct the points  $C_1, C_2, \dots, C_n$ , so that  $\angle A_i A_{i-1} C_i = \beta$  and  $A_{i-1} C_i = a$  for each  $i$ .





This way we construct  $n$  congruent triangles

$$\begin{aligned}\triangle ABC &= \triangle A_1 A_0 C_1 \cong \\ &\cong \triangle A_2 A_1 C_2 \cong \\ &\quad \dots \\ &\cong \triangle A_n A_{n-1} C_n.\end{aligned}$$

Set  $d = C_1 C_2$  and  $\delta = \angle C_2 A_1 C_1$ . Note that

$$\textcircled{1} \quad \alpha + \beta + \delta = \pi.$$

By Proposition 10.3,  $\delta \geq 0$ .

By construction

$$\triangle A_1 C_1 C_2 \cong \triangle A_2 C_2 C_3 \cong \dots \cong \triangle A_{n-1} C_{n-1} C_n.$$

In particular,  $C_i C_{i+1} = d$  for each  $i$ .

By repeated application of the triangle inequality, we get that

$$\begin{aligned}n \cdot c &= A_0 A_n \leq \\ &\leq A_0 C_1 + C_1 C_2 + \dots + C_{n-1} C_n + C_n A_n = \\ &= a + (n-1) \cdot d + b.\end{aligned}$$

In particular,

$$c \leq d + \frac{1}{n} \cdot (a + b - d).$$

Since  $n$  is arbitrary positive integer, the later implies

$$c \leq d.$$

From Proposition 10.7 and SAS, the later is equivalent to

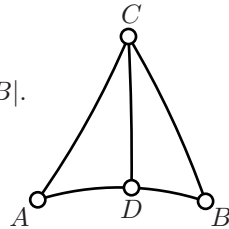
$$\gamma \leq \delta.$$

From  $\textcircled{1}$ , the theorem follows.  $\square$

The *defect of triangle*  $\triangle ABC$  is defined as

$$\text{defect}(\triangle ABC) \stackrel{\text{def}}{=} \pi - |\angle ABC| + |\angle BCA| + |\angle CAB|.$$

Note that Theorem 10.8 states that, defect of any triangle in absolute plane has to be nonnegative. According to Theorem 6.11, any triangle in Euclidean plane has zero defect.



**10.9. Exercise.** Let  $\triangle ABC$  be nondegenerate triangle in the absolute plane. Assume  $D$  lies between  $A$  and  $B$ . Show that

$$\text{defect}(\triangle ABC) = \text{defect}(\triangle ADC) + \text{defect}(\triangle DBC).$$

**10.10. Exercise.** Let  $ABCD$  be an inscribed quadrilateral in the absolute plane. Show that

$$\angle ABC + \angle CDA \equiv \angle BCD + \angle DAB.$$

Note that the Theorem 8.6 can not be applied in the above exercise; it use Theorems 8.1 and 8.2; which in turns use Theorem 6.11.

## How to prove that something can not be proved?

Many attempts were made to prove that any theorem in Euclidean geometry holds in absolute geometry. The later is equivalent to the statement that Axiom V is a *theorem* in absolute geometry.

Many these attempts being accepted as proofs for long periods of time until the mistake was found.

There is a number of statements in the geometry of absolute plane which are equivalent to the Axiom V. It means that if we exchange the Axiom V to any of these statements then we will obtain an equivalent axiomatic system.

Here we give a short list of such statements. (We are not going to prove the equivalence in the lectures.)

**10.11. Theorem.** *An absolute plane is Euclidean if and only if one of the following equivalent conditions hold.*

- (a) *There is a line  $\ell$  and a point  $P \notin \ell$  such that there is only one line passing through  $P$  and parallel to  $\ell$ .*
- (b) *Every nondegenerate triangle can be circumscribed.*
- (c) *There exists a pair of distinct lines which lie on a bounded distance from each other.*
- (d) *There is a triangle with arbitrary large inradius.*
- (e) *There is a nondegenerate triangle with zero defect.*

It is hard to imagine an absolute plane, which does not satisfy some of the properties above. That is partly the reason why for the large number of false proofs; each used one of such statements by accident.

Let us formulate the negation of (a) above.

h-V. For any line  $\ell$  and any point  $P \notin \ell$  there are at least two lines which pass through  $P$  and have no points of intersection with  $\ell$ .

By Theorem 6.2, an absolute plane which satisfies Axiom h-V is not Euclidean. Moreover, according to the Theorem 10.11 (which we do not prove) any non-Euclidean absolute plane Axiom h-V holds.

It opens a way to look for a proof by contradiction. Simply exchange Axiom V to Axiom h-V and start to prove theorems in the obtained axiomatic system. In the case if we arrive to a contradiction, we prove the Axiom V in absolute plane.

These attempts were unsuccessful as well; instead, this approach led to a new type of geometry.

This idea was growing since 5th century; the most notable result were obtained by Saccheri in [9]. The more this new geometry was developed, it became more and more believable that there will be no contradiction.

The statement that there is no contradiction appears first in private letters of Bolyai, Gauss, Schweikart and Taurinus<sup>1</sup>. They all seem to be afraid to state it in public. Say, in 1818 Gauss writes to Gerling

*...I am happy that you have the courage to express yourself as if you recognized the possibility that our parallels theory along with our entire geometry could be false. But the wasps whose nest you disturb will fly around your head...*

Lobachevsky came to the same conclusion independently, unlike the others he had courage to state it in public and in print (see [7]). That cost him serious troubles.

Later Beltrami gave a clean proof that if hyperbolic geometry has a contradiction then so is Euclidean geometry. This was done by modeling points, lines, distances and angle measures of hyperbolic geometry using some other objects in Euclidean geometry; this is the subject of the next chapter.

Arguably, the discovery of non-Euclidean geometry was the second main discoveries of 19th century, trailing only the Mendel's laws.

## Curvature

In a letter from 1824 Gauss writes:

*The assumption that the sum of the three angles is less than  $\pi$  leads to a curious geometry, quite different from ours but thoroughly consistent, which I have developed to*

---

<sup>1</sup>The oldest surviving letters were the Gauss letter to Gerling 1816 and yet more convincing letter dated by 1818 of Schweikart sent to Gauss via Gerling.

*my entire satisfaction, so that I can solve every problem in it with the exception of a determination of a constant, which cannot be designated a priori. The greater one takes this constant, the nearer one comes to Euclidean geometry, and when it is chosen indefinitely large the two coincide. The theorems of this geometry appear to be paradoxical and, to the uninitiated, absurd; but calm, steady reflection reveals that they contain nothing at all impossible. For example, the three angles of a triangle become as small as one wishes, if only the sides are taken large enough; yet the area of the triangle can never exceed a definite limit, regardless how great the sides are taken, nor indeed can it ever reach it.*

In the modern terminology the constant which Gauss mentions, can be expressed as  $1/\sqrt{-k}$ , where  $k$  denotes so called *curvature* of the absolute plane which we are about to introduce.

The identity in the Exercise 10.9 suggests that defect of triangle should be proportional to its area.<sup>2</sup>

In fact for any absolute plane there is a nonpositive real number  $k$  such that

$$k \cdot \text{area}(\triangle ABC) + \text{defect}(\triangle ABC) = 0$$

for any triangle  $\triangle ABC$ . This number  $k$  is called *curvature* of the plane.

For example, by Theorem 6.11, the Euclidean plane has zero curvature. By Theorem 10.8, curvature of any absolute plane is nonpositive.

It turns out that up to isometry, the absolute plane is characterized by its curvature; that is, two absolute planes are isometric if and only if they have the same curvature.

In the next chapter we will construct hyperbolic plane, this is an example of absolute plane with curvature  $k = -1$ .

Any absolute planes, distinct from Euclidean, can be obtained by rescaling metric on the hyperbolic plane. Indeed, if we rescale the metric by factor  $c$ , the area changes by positive factor  $c^2$ , while defect stays the same. Therefore taking  $c = \sqrt{-k}$ , we can get the absolute plane given curvature  $k < 0$ . In other words, all the non-Euclidean absolute planes become identical if we use  $r = 1/\sqrt{-k}$  as the unit of length.

In the Chapter 13, we briefly discuss the geometry of the unit sphere. Although spheres are not absolute planes, the spherical geometry is a close relative of Euclidean and hyperbolic geometries.

---

<sup>2</sup>We did not define *area*; instead we refer to intuitive understanding of area which reader might have. The formal definition of area is quite long and tedious.

The nondegenerate spherical triangles have negative defect. Moreover if  $R$  is the radius of the sphere then


$$\frac{1}{R^2} \cdot \text{area}(\triangle ABC) + \text{defect}(\triangle ABC) = 0$$

for any spherical triangle  $\triangle ABC$ . In other words, the sphere of radius  $R$  has positive curvature  $k = \frac{1}{R^2}$ .



## Chapter 11

# Hyperbolic plane



In this chapter we use inversive geometry to construct the model of hyperbolic plane — an example of absolute plane which is not Euclidean.

Namely, we construct so called *Poincaré disk model* of hyperbolic plane; an example of absolute plane in which Axiom V does not hold, in particular this plane is not Euclidean. This model was discovered

by Beltrami in [2] and popularized later by Poincaré.

The figure above shows the Poincaré disk model of hyperbolic plane which is cut into congruent triangles with angles  $\frac{\pi}{3}$ ,  $\frac{\pi}{3}$  and  $\frac{\pi}{4}$ .

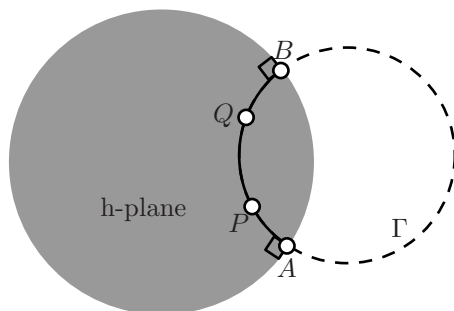
## Poincaré disk model

In this section we give new names for some objects in the Euclidean plane which will represent lines, angle measures, distances in the hyperbolic plane.

**Hyperbolic plane.** Let us fix a circle on the Euclidean plane and call it *absolute*. The set of points inside the absolute will be called *hyperbolic plane* (or *h-plane*). (The points on absolute do *not* belong to the h-plane.) The points in the h-plane will be also called *h-points*.

Often we will assume that the absolute is a unit circle.

**Hyperbolic lines.** The intersections of h-plane with clines perpendicular to the absolute are called *hyperbolic lines* or *h-lines*.



Note that according to Corollary 9.14, there is unique h-line which pass through given two distinct h-points  $P$  and  $Q$ . This h-line will be denoted as  $(PQ)_h$ .

The arcs of hyperbolic lines will be called *hyperbolic segments* or *h-segments*. An h-segment with endpoints  $P$  and  $Q$  will be denoted as  $[PQ]_h$ .

The subset of h-line on one side from a point will be called *hyperbolic half-line* (or *h-half-line*). More precisely, h-half-line is an intersection of h-plane with arc which perpendicular to the absolute with only one endpoint in the h-plane. An h-half-line from  $P$  passing through  $Q$  will be denoted as  $[PQ]_h$ .

If  $\Gamma$  is the circle containing the h-line  $(PQ)_h$  then the points of intersection of  $\Gamma$  with absolute are called *ideal points* of  $(PQ)_h$ . (Note that the ideal points of h-line do not belong to the h-line.)

Similarly a triangle in h-plane; i.e., ordered triple of h-points, say  $(P, Q, R)$ , will be denoted by  $\triangle PQR$ .

So far  $(PQ)_h$  is just a subset of h-plane; below we will introduce h-distance and later we will show that  $(PQ)_h$  is a line for the h-distance in the sense of the Definition 1.8.



**Hyperbolic distance.** Let  $P$  and  $Q$  be distinct h-points. Denote by  $A$  and  $B$  be the ideal points of  $(PQ)_h$ . Without loss of generality, we may assume that on the Euclidean circle containing the h-line  $(PQ)_h$ , the points  $A, P, Q, B$  appear in the same order.

Consider function

$$\delta(P, Q) \stackrel{\text{def}}{=} \frac{AQ \cdot BP}{QB \cdot PA}.$$

Note that right hand side is the cross-ratio, which appeared in Theorem 9.5. Set  $\delta(P, P) = 1$  for any h-point  $P$ . Set

$$PQ_h \stackrel{\text{def}}{=} \ln[\delta(P, Q)].$$

The proof that  $PQ_h$  is a metric on h-plane will be given below. For now it is just a function which returns a real value  $PQ_h$  for any pair of h-points  $P$  and  $Q$ .

**Hyperbolic angles.** Consider three h-points  $P, Q$  and  $R$  such that  $P \neq Q$  and  $R \neq Q$ . The hyperbolic angle  $\angle_h PQR$  is ordered pair of h-half-lines  $[QP]_h$  and  $[QR]_h$ .

Let  $[QX]$  and  $[QY]$  be (Euclidean) half-lines which are tangent to  $[QP]_h$  and  $[QR]_h$  at  $Q$ . Then the *hyperbolic angle measure* (or *h-angle measure*)  $\angle_h PQR$  is defined as  $\angle XQY$ .

We defined all the notions in the formulation of the axioms I–IV and h–V. It remains to show that these axioms hold. The proofs rely on the observation described in the next section.

## Auxiliary statements

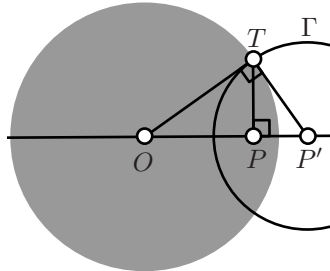
**11.1. Lemma.** *Consider h-plane with unit circle as absolute. Let  $O$  be the center of absolute and  $P \neq O$  be an other h-point. Denote by  $P'$  the inversion of  $P$  in the absolute.*

*Then the circle  $\Gamma$  with center  $P'$  and radius  $1/\sqrt{1 - OP^2}$  is perpendicular to the absolute. Moreover  $O$  is the inversion of  $P$  in  $\Gamma$ .*

*Proof.* Follows from Exercise 9.17.  $\square$

Assume  $\Gamma$  is a cline which is perpendicular to the absolute. Consider the inversion  $X \mapsto X'$  in  $\Gamma$ , or if  $\Gamma$  is a line, set  $X \mapsto X'$  to be the reflection in  $\Gamma$ .

The following observation roughly says that the map  $X \mapsto X'$  respects all



the notions introduced in the previous section. Together with the lemma above, it implies that in any problem which formulated entirely in *h-terms* we can assume that a given *h-point* lies in the center of absolute.

**11.2. Main observation.** *The map  $X \mapsto X'$  described above is a bijection of *h-plane* to itself. Moreover for any *h-points*  $P, Q, R$  such that  $P \neq Q$  and  $Q \neq R$  the following conditions hold*

- (a) *The sets  $(PQ)_h, [PQ]_h$  and  $[PQ]_h$  are mapped to  $(P'Q')_h, [P'Q']_h$  and  $[P'Q']_h$  correspondingly.*  
 (b)  $\delta(P', Q') = \delta(P, Q)$  and

$$P'Q'_h = PQ_h.$$

(c)

$$\angle_h P'Q'R' \equiv -\angle_h PQR.$$

*Proof.* According to Theorem 9.11 the map sends the absolute to itself. Note that the points on  $\Gamma$  do not move, it follows that points inside of absolute remain inside after the mapping and the other way around.

Part (a) follows from 9.6 and 9.20.

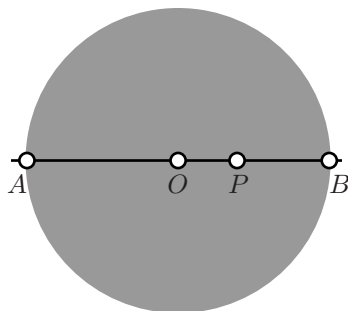
Part (b) follows from Theorem 9.5.

Part (c) follows from Theorem 9.20. □

**11.3. Lemma.** *Assume that the absolute is a unit circle centered at  $O$ . Given a *h-point*  $P$ , set  $x = OP$  and  $y = OP_h$ . Then*

$$y = \ln \frac{1+x}{1-x} \quad \text{and} \quad x = \frac{e^y - 1}{e^y + 1}.$$

*Proof.* Note that *h-line*  $(OP)_h$  lies in a diameter of absolute. Therefore if  $A$  and  $B$  are the ideal points as in the definition of *h-distance* then



$$OA = OB = 1,$$

$$PA = 1 + x,$$

$$PB = 1 - x.$$

Therefore

$$\begin{aligned} y &= \ln \frac{AP \cdot BO}{PB \cdot OA} = \\ &= \ln \frac{1+x}{1-x}. \end{aligned}$$

Taking exponent of left and right hand side and applying obvious algebra manipulations we get

$$x = \frac{e^y - 1}{e^y + 1}.$$

□

**11.4. Lemma.** *Assume points  $P$ ,  $Q$  and  $R$  appear on one  $h$ -line in the same order. Then*

$$PQ_h + QR_h = PR_h$$

*Proof.* Note that

$$PQ_h + QR_h = PR_h$$

is equivalent to

$$\textcircled{1} \quad \delta(P, Q) \cdot \delta(Q, R) = \delta(P, R).$$

Let  $A$  and  $B$  be the ideal points of  $(PQ)_h$ . Without loss of generality we can assume that the points  $A, P, Q, R, B$  appear in the same order on the cline containing  $(PQ)_h$ . Then

$$\begin{aligned} \delta(P, Q) \cdot \delta(Q, R) &= \frac{AQ \cdot BP}{QB \cdot PA} \cdot \frac{AR \cdot BQ}{RB \cdot QA} = \\ &= \frac{AR \cdot BP}{RB \cdot PA} = \\ &= \delta(P, R) \end{aligned}$$

Hence  $\textcircled{1}$  follows. □

Let  $P$  be an  $h$ -point and  $\rho > 0$ . The set of all  $h$ -points  $Q$  such that  $PQ_h = \rho$  is called  *$h$ -circle* with center  $P$  and  *$h$ -radius*  $\rho$ .

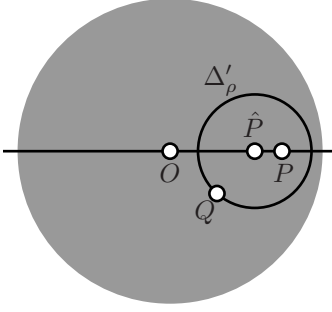
**11.5. Lemma.** *Any  $h$ -circle is formed by a Euclidean circle which lies completely in  $h$ -plane.*

*More precisely for any  $h$ -point  $P$  and  $\rho \geq 0$  there is a  $\hat{\rho} \geq 0$  and a point  $\hat{P}$  such that*

$$PQ_h = \rho \Leftrightarrow \hat{P}Q = \hat{\rho}.$$

*Moreover, if  $O$  is the center of absolute then*

1.  $\hat{O} = O$  for any  $\rho$  and
2.  $\hat{P} \in (OP)$  for any  $P \neq O$ .



*Proof.* According to Lemma 11.3,  $OQ_h = \rho$  if and only if

$$OQ = \hat{\rho} = \frac{e^\rho - 1}{e^\rho + 1}.$$

Therefore the locus of h-points  $Q$  such that  $OQ_h = \rho$  is formed by the Euclidean circle, denote it by  $\Delta_\rho$ .

If  $P \neq O$ , applying Lemma 11.1 and the Main observation (11.2) we get a circle  $\Gamma$  perpendicular to the absolute such that  $P$  is the inversion of  $O$  in  $\Gamma$ .

Let  $\Delta'_\rho$  be the inversion of  $\Delta_\rho$  in  $\Gamma$ . Since the inversion in  $\Gamma$  preserves the h-distance,  $PQ_h = \rho$  if and only if  $Q \in \Delta'_\rho$ .

According to Theorem 9.6,  $\Delta'_\rho$  is a circle. Denote by  $\hat{P}$  the center and by  $\hat{\rho}$  the radius of  $\Delta'_\rho$ .

Finally note that  $\Delta'_\rho$  reflects to itself in  $(OP)$ ; that is, the center  $\hat{P}$  lies on  $(OP)$ .  $\square$

**11.6. Exercise.** Show that  $\hat{P} \in [OP]$  for any  $P \neq O$ , where  $P$ ,  $\hat{P}$  and  $O$  as in the Lemma 11.5.

## Axiom I

Evidently h-plane contains at least two points. Therefore to show that Axiom I holds in h-plane we need to show that h-distance defined on page 97 is a metric on h-plane; i.e., the each condition (a)–(d) in Definition 1.1 hold for h-distance.

The following claim says that h-distance meets the conditions (a) and (b).

**11.7. Claim.** Given h-points  $P$  and  $Q$ , we have  $PQ_h \geq 0$  and  $PQ_h = 0$  if and only if  $P = Q$ .

*Proof.* According to Lemma 11.1 and Main Observation (11.2), we may assume that  $Q$  is the center of absolute. In this case

$$\delta(Q, P) = \frac{1 + QP}{1 - QP} \geq 1$$

and the equality holds only if  $P = Q$ .

Therefore

$$QP_h = \ln[\delta(Q, P)] \geq 0.$$

and the equality holds if and only if  $P = Q$ .  $\square$

The following claim says that  $h$ -distance meets the conditions (c).

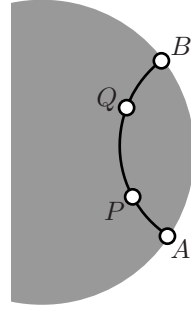
**11.8. Claim.** *For any  $h$ -points  $P$  and  $Q$ , we have  $PQ_h = QP_h$ .*

*Proof.* Let  $A$  and  $B$  be ideal points of  $(PQ)_h$  and  $A, P, Q, B$  appear on the cline containing  $(PQ)_h$  in the same order.

Then

$$\begin{aligned} PQ_h &= \ln \frac{AQ \cdot BP}{QB \cdot PA} = \\ &= \ln \frac{BP \cdot AQ}{PA \cdot QB} = \\ &= QP_h. \end{aligned}$$

$\square$



The following claim shows in particular that triangle inequality (which is condition (d)) holds for  $h$ -distance.

**11.9. Claim.** *Given a triple of  $h$ -points  $P$ ,  $Q$  and  $R$ , we have*

$$PQ_h + QR_h \geq PR_h.$$

*Moreover, the equality holds if and only if  $P$ ,  $Q$  and  $R$  lie on one  $h$ -line in the same order.*

*Proof.* Without loss of generality, we may assume that  $RP_h \geq PQ_h > 0$  and  $R$  is the center of absolute.

Denote by  $\Delta$  the  $h$ -circle with center  $P$  and  $h$ -radius  $PQ_h$ . Let  $S$  and  $T$  be the points of intersection of  $(RP)$  and  $\Delta$ .

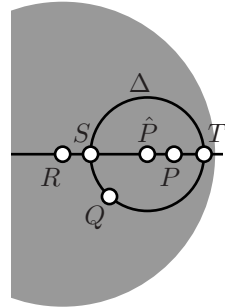
Since  $PQ_h \leq RP_h$ , by Lemma 11.4 we can assume that the points  $R, S, P$  and  $T$  appear on the  $h$ -line in the same order.

Set  $\rho = PQ_h$ . According to Lemma 11.5,  $\Delta$  is a Euclidean circle; denote by  $\hat{P}$  its Euclidean center. Note that  $\hat{P}$  is the (Euclidean) midpoint of  $[ST]$ .

By the Euclidean triangle inequality

$$\textcircled{2} \quad RT = R\hat{P} + \hat{P}Q \geq RQ$$

and the equality holds if and only if  $T = Q$ .



By Lemma 11.3,

$$RT_h = \ln \frac{1 + RT}{1 - RT}$$

$$RQ_h = \ln \frac{1 + RQ}{1 - RQ}.$$

Since the function  $f(x) = \ln \frac{1+x}{1-x}$  is increasing for  $x \in [0, 1)$ , inequality ② implies

$$RT_h \geq RQ_h$$

and the equality holds if and only if  $T = Q$ .

Finally applying Lemma 11.4 again, we get

$$RT_h = RP_h + PQ_h.$$

Hence the claim follows.  $\square$

## Axiom II

Note that once the following claim is proved, Axiom II follows from Corollary 9.14.

**11.10. Claim.** *A subset of h-plane is an h-line if and only if it forms a line for h-distance.*

*Proof.* Let  $\ell$  be an h-line. Applying the main observation we can assume that  $\ell$  contains the center of absolute. In this case  $\ell$  is formed by intersection of diameter of absolute and the h-plane. Let  $A$  and  $B$  be the endpoints of the diameter.

Consider the map  $\iota: \ell \rightarrow \mathbb{R}$  defined as

$$\iota(X) = \ln \frac{AX}{XB}.$$

Note that  $\iota: \ell \rightarrow \mathbb{R}$  is a bijection.

Further, if  $X, Y \in \ell$  and the points  $A, X, Y$  and  $B$  appear on  $[AB]$  in the same order then

$$|\iota(Y) - \iota(X)| = \left| \ln \frac{AY}{YB} - \ln \frac{AX}{XB} \right| = \left| \ln \frac{AY \cdot BX}{YB \cdot XB} \right| = XY_h;$$

that is, any h-line is a line for h-metric.

We proved that any h-line is a line for h-distance. The converse follows from Claim 11.9.  $\square$

## Axiom III

Note that the first part of Axiom III follows directly from the definition of  $\angle_h$  measure defined on page 97. It remains to show that  $\angle_h$  satisfies the conditions IIIa, IIIb and IIIc hold.

The following two claims say that  $\angle_h$  satisfies IIIa and IIIb.

**11.11. Claim.** *Given an  $h$ -half-line  $[OP)$  and  $\alpha \in (-\pi, \pi]$  there is unique  $h$ -half-line  $[OQ)$  such that  $\angle POQ = \alpha$*

**11.12. Claim.** *For any  $h$ -points  $P, Q$  and  $R$  distinct from  $h$ -point  $O$  we have*

$$\angle POQ + \angle QOR \equiv \angle POR.$$

*Proof of 11.11 and 11.12.* Applying the main observation, we may assume that  $O$  is the center of absolute. In this case, for any  $h$ -point  $P \neq O$ ,  $[OP)_h$  is the intersection of  $[OP)$  with  $h$ -plane. Hence all the claims 11.11 and 11.12 follow from the corresponding axioms of Euclidean plane.  $\square$

The following claim says that  $\angle_h$  satisfies IIIc.

**11.13. Claim.** *The function*

$$\angle_h: (P, Q, R) \mapsto \angle PQR$$

*is continuous at any triple of points  $(P, Q, R)$  such that  $Q \neq P$  and  $Q \neq R$  and  $\angle_h PQR \neq \pi$ .*

*Proof.* Denote by  $O$  the center of absolute. We can assume that  $Q$  is distinct from  $O$ .

Denote by  $Z$  the inversion of  $Q$  in the absolute and by  $\Gamma$  the circle perpendicular to the absolute which is centered at  $Q'$ . According to Lemma 11.1, the point  $O$  is the inversion of  $Q$  in  $\Gamma$ .

Denote by  $P'$  and  $R'$  the inversions in  $\Gamma$  of the points  $P$  and  $R$  correspondingly. Note that the point  $P'$  is completely determined by the points  $Q$  and  $P$ ; moreover the map  $(Q, P) \mapsto P'$  is continuous at any pair of points  $(Q, P)$  such that  $Q \neq O$ . The same is true for the map  $(Q, R) \mapsto R'$

According to the Main Observation

$$\angle_h PQR \equiv -\angle_h P'OR'.$$

Since  $\angle_h P'OR' = \angle P'OR'$  and the maps  $(Q, P) \mapsto P'$ ,  $(Q, R) \mapsto R'$  are continuous, the claim follows from the corresponding axiom of Euclidean plane.  $\square$

## Axiom IV

The following claim says that Axiom IV holds in the h-plane.

**11.14. Claim.** *In the h-plane, we have  $\triangle_h PQR \cong \triangle_h P'Q'R'$  if and only if*

$$Q'P'_h = QP_h, \quad Q'R'_h = QR_h, \quad \text{and} \quad \angle_h P'Q'R' = \pm \angle PQR.$$

*Proof.* Applying the main observation, we can assume that both  $Q$  and  $Q'$  coincide with the center of absolute. In this case

$$\angle P'QR' = \angle_h P'QR' = \pm \angle_h PQR = \pm \angle PQR.$$

Since

$$QP_h = QP'_h \quad \text{and} \quad QR_h = QR'_h,$$

Lemma 11.3 implies that the same holds for the Euclidean distances; that is,

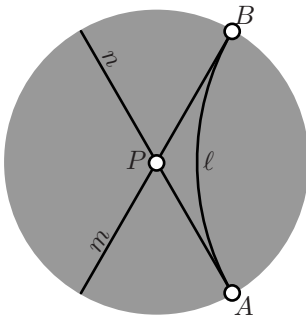
$$QP = QP' \quad \text{and} \quad QR = QR'.$$

By SAS, there is a motion of Euclidean plane which sends  $Q$  to itself,  $P$  to  $P'$  and  $R$  to  $R'$

Note that the center of absolute is fixed by the corresponding motion. It follows that this motion gives also a motion of h-plane; in particular the h-triangles  $\triangle_h PQR$  and  $\triangle_h P'QR'$  are h-congruent.  $\square$

## Axiom h-V

Finally we need to check that the Axiom h-V on page 91 holds; i.e., we need to prove the following claim.



**11.15. Claim.** *For any h-line  $\ell$  and any h-point  $P \notin \ell$  there are at least two h-lines which pass through  $P$  and have no points of intersection with  $\ell$ .*

*Instead of proof.* Applying the main observation we can assume that  $P$  is the center of absolute.

The remaining part of proof can be guessed from the picture  $\square$



# Chapter 12

## Geometry of h-plane

In this chapter we study the geometry of the plane described by Poincaré disc model. For briefness, this plane will be called *h-plane*. Note that we can work with this model directly from inside of Euclidean plane but we may also use the axioms of absolute geometry since according to the previous chapter they all hold in the h-plane.

### Angle of parallelism

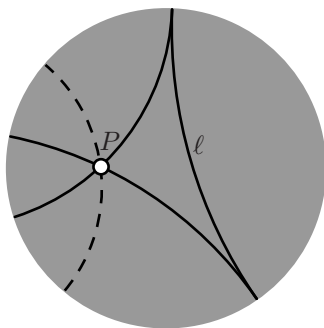
Let  $P$  be a point off an h-line  $\ell$ . Drop a perpendicular  $(PQ)_h$  from  $P$  to  $\ell$  with foot point  $Q$ . Let  $\varphi$  be the least angle such that the h-line  $(PZ)_h$  with  $|\angle_h QPZ| = \varphi$  does not intersect  $\ell$ .

The angle  $\varphi$  is called *angle of parallelism* of  $P$  to  $\ell$ . Clearly  $\varphi$  depends only on the h-distance  $s = PQ_h$ . Further  $\varphi(s) \rightarrow \pi/2$  as  $s \rightarrow 0$ , and  $\varphi(s) \rightarrow 0$  as  $s \rightarrow \infty$ . (In the Euclidean geometry the angle of parallelism is identically equal to  $\pi/2$ .<sup>`</sup>

If  $\ell$ ,  $P$  and  $Z$  as above then the h-line  $m = (PZ)_h$  is called *asymptotically parallel* to  $\ell$ .<sup>1</sup> In other words, two h-lines are asymptotically parallel if they share one ideal point.

Given  $P \notin \ell$  there are exactly two asymptotically parallel lines through  $P$  to  $\ell$ ; the remaining parallel lines to  $\ell$  through  $P$  are called *ultra parallel*.

On the diagram, the two solid h-lines passing through  $P$  are asymptotically parallel to  $\ell$ ; the dotted



<sup>1</sup>In hyperbolic geometry the term *parallel lines* is often used for *asymptotically parallel lines*; we do not follow this convention.



*Proof.* First note that any triangle in h-plane lies in an *ideal triangle*; that is, a region bounded by three pairwise asymptotically parallel lines.

A proof can be seen in the picture. Consider arbitrary h-triangle  $\triangle_h XYZ$ . Denote by  $A$ ,  $B$  and  $C$  the ideal points of the h-half-lines  $[XY)_h$ ,  $[YZ)_h$  and  $[ZX)_h$ .

It should be clear that inradius of the ideal triangle  $ABC$  is bigger than inradius of  $\triangle_h XYZ$ .

Applying an inverse if necessary, we can assume that h-incenter ( $O$ ) of the ideal triangle is the center of absolute. Therefore, without loss of generality, we may assume

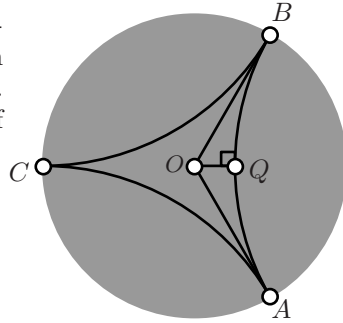
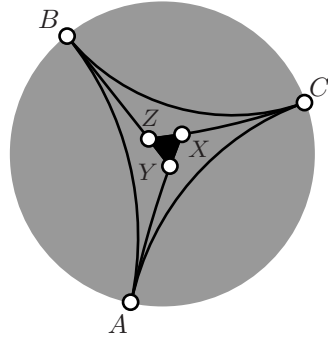
$$\angle AOB = \angle BOC = \angle COA = \frac{2}{3} \cdot \pi.$$

It remains to find the inradius. Denote by  $Q$  the foot point of  $O$  on  $(AB)_h$ . Then  $OQ_h$  is the inradius. Note that the angle of parallelism of  $(AB)_h$  at  $O$  is equal to  $\frac{\pi}{3}$ .

By Proposition 12.1,

$$\begin{aligned} OQ_h &= \frac{1}{2} \cdot \ln \frac{1 + \cos \frac{\pi}{3}}{1 - \cos \frac{\pi}{3}} = \\ &= \frac{1}{2} \cdot \ln \frac{1 + \frac{1}{2}}{1 - \frac{1}{2}} = \\ &= \frac{1}{2} \cdot \ln 3. \end{aligned}$$

□



**12.3. Exercise.** Let  $ABCD$  be a quadrilateral in h-plane such that the h-angles at  $A$ ,  $B$  and  $C$  are right and  $AB_h = BC_h$ . Find the optimal upper bound for  $AB_h$ .

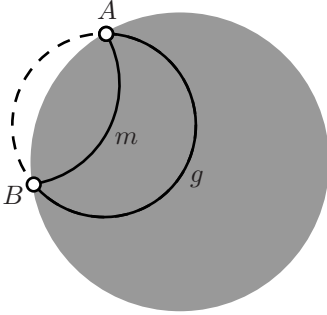
## Circles, horocycles and equidistants

Note that according to Lemma 11.5, any h-circle is formed by a Euclidean circle which lies completely in the h-plane. Further any h-line is an intersection of the h-plane with the circle perpendicular to the absolute.

In this section we will describe the h-geometric meaning of the intersections of the other circles with the h-plane.

You will see that all these intersections formed by a *perfectly round shape* in the h-plane; that is, h-geometrically all the points on an equidistant look the same.

One may think of these curves as about trajectories of a car which drives in the plane with fixed position of the wheel. In the Euclidean plane, this way you either run along a circles or along a line.



In hyperbolic plane the picture is different. If you turn wheel far right, you will run along a circle. If you turn it less, at certain position of wheel, you will never come back, the path will be different from the line. If you turn the wheel further a bit, you start to run along a path which stays on the same distant from an h-line.

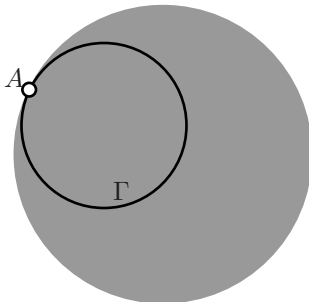
**Equidistants of h-lines.** Consider h-plane with absolute  $\Omega$ . Assume a circle  $\Gamma$  intersects  $\Omega$  in two distinct points  $A$  and  $B$ . Denote by  $g$  the intersection of  $\Gamma$  with h-plane. Let us draw an h-line  $m$  with the ideal points  $A$  and  $B$ .

**12.4. Exercise.** Show that the h-line  $m$  is uniquely determined by its ideal points  $A$  and  $B$ .

Consider any h-line  $\ell$  perpendicular to  $m$ ; let  $\Delta$  be the circle containing  $\ell$ .

Note that  $\Delta \perp \Gamma$ . Indeed, according to Corollary 9.12,  $m$  and  $\Omega$  inverted to themselves in  $\Delta$ . It follows that  $A$  is the inversion of  $B$  in  $\Delta$ . Finally, by Corollary 9.13, we get that  $\Delta \perp \Gamma$ .

Therefore inversion in  $\Delta$  sends both  $m$  and  $g$  to themselves. So if  $P', P \in g$  are inversions of each other in  $\Delta$  then they lie on the same distance from  $m$ . Clearly we have plenty of choice for  $\ell$ , which can be used to move points along  $g$  arbitrary keeping the distance to  $m$ .



It follows that  $g$  is formed by the set of points which lie on fixed h-distance and the same h-side from  $m$ .

Such curve  $g$  is called *equidistant* to h-line  $m$ . In Euclidean geometry the equidistant from a line is a line; apparently in hyperbolic geometry the picture is different.

**Horocycles.** If the circle  $\Gamma$  touches the absolute from inside at one point  $A$  then

$h = \Gamma \setminus \{A\}$  lie in  $h$ -plane. This set is called *horocycle*. It also has perfectly round shape in the sense described above.

Horocycles are the boarder case between circles and equidistants to  $h$ -lines. An horocycle might be considered as a limit of circles which pass through fixed point which the centers running to infinity along a line. The same horocycle is a limit of equidistants which pass through fixed point to the  $h$ -lines running to infinity.

**12.5. Exercise.** Find the leg of be a right  $h$ -triangle inscribed in a horocycle.

## Hyperbolic triangles

**12.6. Theorem.** Any nondegenerate hyperbolic triangle has positive defect.

*Proof.* Consider  $h$ -trianagle  $\triangle_h ABC$ . According to Theorem 10.8,

$$\textcircled{1} \quad \text{defect}(\triangle_h ABC) \geq 0.$$

It remains to show that in the case of equality the triangle  $\triangle_h ABC$  degenerates.

Without loss of generality, we may assume that  $A$  is the center of absolute; in this case  $\angle_h CAB = \angle CAB$ . Yet we may assume that

$$\angle_h CAB, \angle_h ABC, \angle_h BCA, \angle ABC, \angle BCA \geq 0.$$

Let  $D$  be an arbitrary point in  $[CB]_h$  distinct from  $B$  and  $C$ . From Proposition 8.10

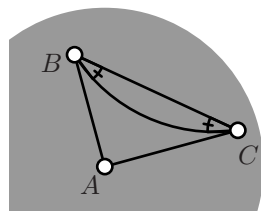
$$\angle ABC - \angle_h ABC \equiv \pi - \angle CDB \equiv \angle BCA - \angle_h BCA.$$

From Exercise 6.13, we get

$$\text{defect}(\triangle_h ABC) = 2 \cdot (\pi - \angle CDB).$$

Therefore if we have equality in  $\textcircled{1}$  then  $\angle CDB = \pi$ . In particular the  $h$ -segment  $[BC]_h$  coincides with Euclidean segment  $[BC]$ . The later can happen only if the  $h$ -line passes through the center of absolute; that is, if  $\triangle_h ABC$  degenerates.  $\square$

The following theorem states in particular that hyperbolic triangles are congruent if their corresponding angles are equal; in particular in hyperbolic geometry similar triangles have to be congruent.



**12.7. AAA congruence condition.** *Two nondegenerate triangles  $\triangle_h ABC$  and  $\triangle_h A'B'C'$  in the  $h$ -plane are congruent if  $\angle_h ABC = \pm \angle_h A'B'C'$ ,  $\angle_h BCA = \pm \angle_h B'C'A'$  and  $\angle_h CAB = \pm \angle_h C'A'B'$ .*

*Proof.* Note that if  $AB_h = A'B'_h$  then the theorem follows from ASA.

Assume contrary. Without loss of generality we may assume that  $AB_h < A'B'_h$ . Therefore we can choose the point  $B'' \in [A'B']_h$  such that  $A'B''_h = AB_h$ .

Choose an  $h$ -half-line  $[B''X)$  so that

$$\angle_h A'B''X = \angle_h A'B'C'.$$

According to Exercise 10.4,  $(B''X)_h \parallel (B'C')_h$ .

By Pasch's theorem (3.10),  $(B''X)_h$  intersects  $[A'C']_h$ . Denote by  $C''$  the point of intersection.

According to ASA,  $\triangle_h ABC \cong \triangle_h A'B''C''$ ; in particular

$$\textcircled{2} \quad \text{defect}(\triangle_h ABC) = \text{defect}(\triangle_h A'B''C'').$$

Applying Exercise 10.9 twice, we get

$$\textcircled{3} \quad \begin{aligned} \text{defect}(\triangle_h A'B'C') &= \text{defect}(\triangle_h A'B''C'') + \\ &+ \text{defect}(\triangle_h B''C''C') + \text{defect}(\triangle_h B''C'B'). \end{aligned}$$

By Theorem 12.6, the defects has to be positive. Therefore

$$\text{defect}(\triangle_h A'B'C') > \text{defect}(\triangle_h ABC).$$

On the other hand,

$$\begin{aligned} \text{defect}(\triangle_h A'B'C') &= |\angle_h A'B'C'| + |\angle_h B'C'A'| + |\angle_h C'A'B'| = \\ &= |\angle_h ABC| + |\angle_h BCA| + |\angle_h CAB| = \\ &= \text{defect}(\triangle_h ABC), \end{aligned}$$

a contradiction. □

## Conformal interpretation

Let us give an other interpretation of the  $h$ -distance.

**12.8. Lemma.** *Consider  $h$ -plane with absolute formed by the unit circle centered at  $O$ . Fix a point  $P$  and let  $Q$  be an other point in the  $h$ -plane. Set  $x = PQ$  and  $y = PQ_h$  then*

$$\lim_{x \rightarrow 0} \frac{y}{x} = \frac{2}{1 - OP^2}.$$

The above formula tells that the h-distance from  $P$  to a near by point  $Q$  is nearly proportional to the Euclidean distance with the coefficient  $\frac{2}{1-OP^2}$ . The value  $\lambda(P) = \frac{2}{1-OP^2}$  is called *conformal factor* of h-metric.

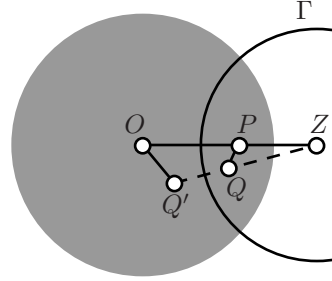
One may think of conformal factor  $\lambda(P)$  as the speed limit at the given point. In this case the h-distance is the the minimal time needed to travel from one point of h-plane to the other point.

*Proof.* If  $P = O$ , then according to Lemma 11.3

$$\textcircled{4} \quad \frac{y}{x} = \frac{\ln \frac{1+x}{1-x}}{x} \rightarrow 2$$

as  $x \rightarrow 0$ .

If  $P \neq O$ , denote by  $Z$  the inversion of  $P$  in the absolute. Denote by  $\Gamma$  the circle with center  $Z$  perpendicular to the absolute.



According to Main Observation 11.2 and Lemma 11.1 the inversion in  $\Gamma$  is a motion of h-plane which sends  $P$  to  $O$ . In particular, if we denote by  $Q'$  the inversion of  $Q$  in  $\Gamma$  then  $OQ'_h = PQ_h$ .

Set  $x' = OQ'$  According to Lemma 9.2,

$$\frac{x'}{x} = \frac{OZ}{ZQ}.$$

Therefore

$$\frac{x'}{x} \rightarrow \frac{OZ}{ZP} = \frac{1}{1-OP^2}$$

as  $x \rightarrow 0$ .

Together with  $\textcircled{4}$ , it implies

$$\frac{y}{x} = \frac{y}{x'} \cdot \frac{x'}{x} \rightarrow \frac{2}{1-OP^2}$$

as  $x \rightarrow 0$ . □

Here is an application of the lemma above.

**12.9. Proposition.** *The circumference of an h-circle of h-radius  $r$  is*

$$2 \cdot \pi \cdot \text{sh } r,$$

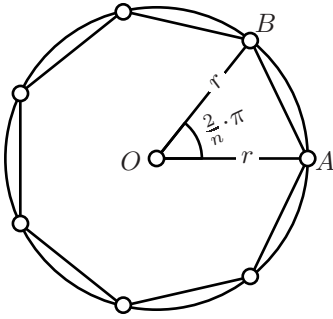
where  $\text{sh } r$  denotes hyperbolic sine of  $r$ ; that is,

$$\text{sh } r \stackrel{\text{def}}{=} \frac{e^r - e^{-r}}{2}.$$

Before we proceed with the proof let us discuss the same problem in the Euclidean plane.

The circumference of the circle in the Euclidean plane can be defined as limit of perimeters of regular  $n$ -gons inscribed in the circle as  $n \rightarrow \infty$ .

Namely, let us fix  $r > 0$ . Given a positive integer  $n$  consider  $\triangle AOB$  such that  $\angle AOB = \frac{2\pi}{n}$  and  $OA = OB = r$ . Set  $x_n = AB$ . Note that  $x_n$  is the side of regular  $n$ -gon inscribed in the circle of radius  $r$ . Therefore the perimeter of the  $n$ -gon is equal to  $n \cdot x_n$ .



The circumference of the circle with radius  $r$  might be defined as the limit of

$$\textcircled{5} \quad \lim_{n \rightarrow \infty} n \cdot x_n = 2 \cdot \pi \cdot r.$$

(This limit can be taken as the definition of  $\pi$ .)

In the following proof we repeat the same construction in the h-plane.

*Proof.* Without loss of generality we can assume that the center  $O$  of the circle is the center of absolute.

By Lemma 11.3, the h-circle with h-radius  $r$  is formed by the Euclidean circle with center  $O$  and radius

$$a = \frac{e^r - 1}{e^r + 1}.$$

Denote by  $x_n$  and  $y_n$  the Euclidean and hyperbolic side lengths of the regular  $n$ -gon inscribed in the circle.

Note that  $x_n \rightarrow 0$  as  $n \rightarrow \infty$ . By Lemma 12.8,

$$\lim_{n \rightarrow \infty} \frac{y_n}{x_n} = \frac{2}{1 - a^2}.$$

Applying  $\textcircled{5}$ , we get that the circumference of the h-circle can be



found the following way

$$\begin{aligned}
 \lim_{n \rightarrow \infty} n \cdot y_n &= \frac{2}{1 - a^2} \cdot \lim_{n \rightarrow \infty} n \cdot x_n = \\
 &= \frac{4 \cdot \pi \cdot a}{1 - a^2} = \\
 &= \frac{4 \cdot \pi \cdot \left( \frac{e^r - 1}{e^r + 1} \right)}{1 - \left( \frac{e^r - 1}{e^r + 1} \right)^2} = \\
 &= 2 \cdot \pi \cdot \frac{e^r - e^{-r}}{2} = \\
 &= 2 \cdot \pi \cdot \operatorname{sh} r.
 \end{aligned}$$

□

**12.10. Exercise.** Denote by  $\operatorname{circum}_h(r)$  the circumference of the  $h$ -circle of radius  $r$ . Show that

$$\operatorname{circum}_h(r + 1) > 2 \cdot \operatorname{circum}_h(r)$$

for all  $r > 0$ .



# Additional topics



## Chapter 13

# Spherical geometry

Spherical geometry is the geometry of the surface of the unit sphere. This type of geometry has practical applications in cartography, navigation and astronomy.

The spherical geometry is a close relative of Euclidean and hyperbolic geometries. Most of theorems of hyperbolic geometry have spherical analogs, but spherical geometry is easier to visualize.

We discuss few theorems in spherical geometry; the proofs are not completely rigorous.

## Space and spheres

Let us repeat the construction of metric  $d_2$  (page 13) in the space.

We will denote by  $\mathbb{R}^3$  the set of all triples  $(x, y, z)$  of real numbers. Assume  $A = (x_A, y_A, z_A)$  and  $B = (x_B, y_B, z_B)$  are arbitrary points. Define the metric on  $\mathbb{R}^3$  the following way

$$AB \stackrel{\text{def}}{=} \sqrt{(x_A - x_B)^2 + (y_A - y_B)^2 + (z_A - z_B)^2}.$$

The obtained metric space is called *Euclidean space*.

Assume at least one of the real numbers  $a, b$  or  $c$  is distinct from zero. Then the subset of points  $(x, y, z) \in \mathbb{R}^3$  described by equation

$$a \cdot x + b \cdot y + c \cdot z + d = 0$$

is called *plane*; here  $d$  is a real number.

It is straightforward to show that any plane in Euclidean space is isometric to Euclidean plane. Further, any three points on the space lie on one plane.

The later statement makes possible to generalize many notions and results from Euclidean plane geometry to Euclidean space by applying plane geometry in the planes of the space.

Sphere in the space is the direct analog of circle in the plane. Formally, *sphere* with center  $O$  and radius  $r$  is the set of points in the space which lie on the distance  $r$  from  $O$ .

Let  $A$  and  $B$  be two points on the unit sphere centered at  $O$ . The *spherical distance* from  $A$  to  $B$  (briefly  $AB_s$ ) is defined as  $|\angle AOB|$ .

In the spherical geometry, the role of lines play the *great circles*; that is, the intersection of the sphere with a plane passing through  $O$ .

Note that the great circles do not form lines in the sense of Definition 1.8. Also any two distinct great circles intersect at two antipodal points. In particular, the sphere does not satisfy the axioms of absolute plane.

## Pythagorean theorem

Here is an analog of Pythagorean Theorems (6.8 and 14.6) in spherical geometry.

**13.1. Theorem.** *Let  $\triangle_s ABC$  be a spherical triangle with right angle at  $C$ . Set  $a = BC_s$ ,  $b = CA_s$  and  $c = AB_s$ . Then*

$$\cos c = \cos a \cdot \cos b.$$

In the proof we will use the notion of scalar product which we are about to discuss.

Let  $A$  and  $B$  be two points in Euclidean space. Denote by  $v_A = (x_A, y_A, z_A)$  and  $v_B = (x_B, y_B, z_B)$  the position vectors of  $A$  and  $B$  correspondingly. The scalar product of two vectors  $v_A$  and  $v_B$  in  $\mathbb{R}^3$  is defined as

$$\textcircled{1} \quad \langle v_A, v_B \rangle \stackrel{\text{def}}{=} x_A \cdot x_B + y_A \cdot y_B + z_A \cdot z_B.$$

Assume both vectors  $v_A$  and  $v_B$  are nonzero and  $\varphi$  is the angle measure between these two vectors. In this case the scalar product can be expressed the following way:

$$\langle v_A, v_B \rangle = |v_A| \cdot |v_B| \cdot \cos \varphi,$$

where

$$|v_A| = \sqrt{x_A^2 + y_A^2 + z_A^2}, \quad |v_B| = \sqrt{x_B^2 + y_B^2 + z_B^2}.$$

Now, assume the points  $A$  and  $B$  lie on the unit sphere in  $\mathbb{R}^3$  centered at the origin. In this case  $|v_A| = |v_B| = 1$ . By ❶ we get

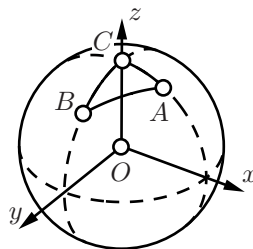
$$\text{❷} \quad \cos AB_s = \langle v_A, v_B \rangle.$$

*Proof.* Since the angle at  $C$  is right, we can choose coordinates in  $\mathbb{R}^3$  so that  $v_C = (0, 0, 1)$ ,  $v_A$  lies in  $xz$ -plane, so  $v_A = (x_A, 0, z_A)$  and  $v_B$  lies in  $yz$ -plane, so  $v_B = (0, y_B, z_B)$ .

Applying, ❷, we get

$$z_A = \langle v_C, v_A \rangle = \cos b,$$

$$z_B = \langle v_C, v_B \rangle = \cos a.$$



Applying, ❷ again, we get

$$\begin{aligned} \cos c &= \langle v_A, v_B \rangle = \\ &= x_A \cdot 0 + 0 \cdot y_B + z_A \cdot z_B = \\ &= \cos b \cdot \cos a. \end{aligned}$$

□

**13.2. Exercise.** Show that if  $\triangle_s ABC$  be a spherical triangle with right angle at  $C$  and  $AC_s = BC_s = \frac{\pi}{4}$  then  $AB_s = \frac{\pi}{3}$ .

Try to find two solutions, with and without using the spherical Pythagorean theorem.

## Inversion of the space

The inversion in the sphere defined the same way as we define inversion in the circle.

Formally, let  $\Sigma$  be the sphere with center  $O$  and radius  $r$ . The *inversion* in  $\Sigma$  of a point  $P$  is the point  $P' \in [OP)$  such that

$$OP \cdot OP' = r^2.$$

In this case, the sphere  $\Sigma$  will be called the *sphere of inversion* and its center is called *center of inversion*.

We also add  $\infty$  to the space and assume that the center of inversion is mapped to  $\infty$  and the other way around. The space  $\mathbb{R}^3$  with the point  $\infty$  will be called *inversive space*.

The inversion of the space has many properties of the inversion of the plane. Most important for us is the analogs of theorems 9.5, 9.6, 9.20 which can be summarized as follows.

**13.3. Theorem.** The inversion in the sphere has the following properties:

- (a) Inversion maps sphere or plane into sphere or plane.  
 (b) Inversion maps circle or line into circle or line.  
 (c) Inversion preserves cross-ratio; that is, if  $A'$ ,  $B'$ ,  $C'$  and  $D'$  be the inversions of the points  $A$ ,  $B$ ,  $C$  and  $D$  correspondingly then

$$\frac{AB \cdot CD}{BC \cdot DA} = \frac{A'B' \cdot C'D'}{B'C' \cdot D'A'}.$$

- (d) Inversion maps arcs into arcs.  
 (e) Inversion preserves the absolute value of the angle measure between tangent half-lines to the arcs.

We do not present the proofs here, but they nearly repeat the corresponding proofs in plane geometry. To prove (a), you will need in addition the following lemma; its proof is left to the reader.

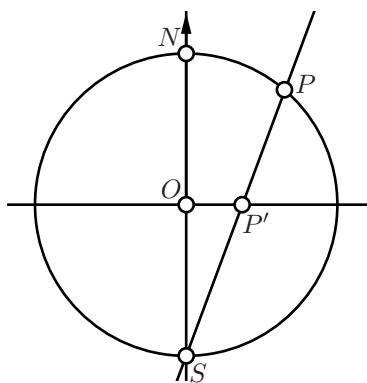
**13.4. Lemma.** *Let  $\Sigma$  be a subset of Euclidean space which contains at least two points. Fix a point  $O$  in the space.*

*Then  $\Sigma$  is a sphere if and only if for any plane  $\Pi$  passing through  $O$ , the intersection  $\Pi \cap \Sigma$  is either empty set, one point set or a circle.*

In the proof of (b) we suggest to use the following observation *any circle in the space can be presented as an intersection of two spheres.*

## Stereographic projection

Consider the unit sphere  $\Sigma$  centered at the origin  $(0,0,0)$ . This sphere can be described by equation  $x^2 + y^2 + z^2 = 1$ .



The plane through  
 $P$ ,  $O$  and  $S$ .

Denote by  $\Pi$  the  $xy$ -plane; it is defined by the equation  $z = 0$ . Clearly  $\Pi$  runs through the center of  $\Sigma$ .

Denote by  $N = (0,0,1)$  the “North Pole” and by  $S = (0,0,-1)$  be the “South Pole” of  $\Sigma$ ; these are the points on the sphere which have extremal distances to  $\Pi$ . Denote by  $\Omega$  the “equator” of  $\Sigma$ ; it is the intersection  $\Sigma \cap \Pi$ .

For any point  $P \neq S$  on  $\Sigma$ , consider the line  $(SP)$  in the space. This line intersects  $\Pi$  in exactly one point, say  $P'$ . We set in addition that  $S' = \infty$ .



The map  $P \mapsto P'$  is the *stereographic projection from  $\Sigma$  to  $\Pi$  from the South Pole*. The inverse of this map  $P' \mapsto P$  is called *stereographic projection from  $\Pi$  to  $\Sigma$  from the South Pole*.

The same way one can define *stereographic projection from the North Pole*.

Note that  $P = P'$  if and only if  $P \in \Omega$ .

Note that if  $\Sigma$  and  $\Pi$  as above. Then the stereographic projections  $\Sigma \rightarrow \Pi$  and  $\Pi \rightarrow \Sigma$  from  $S$  are the restrictions of the inversion in the sphere with center  $S$  and radius  $\sqrt{2}$  to  $\Sigma$  and  $\Pi$  correspondingly.

From above and Theorem 13.3, it follows that the stereographic projection preserves the angles between arcs; more precisely *the absolute value of the angle measure* between arcs on the sphere.

This makes it particularly useful in cartography. A map of a big region of earth can not be done in the constant scale, but using stereographic projection, one can keep the angles between roads the same as on earth.

In the following exercises, we assume that  $\Sigma$ ,  $\Pi$ ,  $\Omega$ ,  $O$ ,  $S$  and  $N$  are as above.

**13.5. Exercise.** *Show that the composition of stereographic projections from  $\Pi$  to  $\Sigma$  from  $S$  and from  $\Sigma$  to  $\Pi$  from  $N$  is the inversion of the plane  $\Pi$  in  $\Omega$ .*

**13.6. Exercise.** *Show that stereographic projection  $\Sigma \rightarrow \Pi$  sends the great circles to clines on the plane which intersects  $\Omega$  at two opposite points.*

**13.7. Exercise.** *Let Fix a point  $P \in \Pi$  and let  $Q$  be yet an other point in  $\Pi$ . Denote by  $P'$  and  $Q'$  their stereographic projections in  $\Sigma$ . Set  $x = PQ$  and  $y = P'Q'_s$ . Show that*

$$\lim_{x \rightarrow 0} \frac{y}{x} = \frac{2}{1 + OP^2}.$$

*Compare with Lemma 12.8.*

## Central projection

Let  $\Sigma$  be the unit sphere centered at the origin which will be denoted as  $O$ . Denote by  $\Pi^+$  the plane described by equation  $z = 1$ . This plane is parallel to  $xy$ -plane and it pass through the North Pole  $N = (0, 0, 1)$  of  $\Sigma$ .

Recall that north hemisphere of  $\Sigma$ , is the subset of points  $(x, y, z) \in \Sigma$  such that  $z > 0$ . The north hemisphere will be denoted as  $\Sigma^+$ .

Given a point  $P \in \Sigma^+$ , consider half-line  $[OP)$  and denote by  $P'$  the intersection of  $[OP)$  and  $\Pi^+$ . Note that if  $P = (x, y, z)$  then  $P' = (\frac{x}{z}, \frac{y}{z}, 1)$ . It follows that  $P \mapsto P'$  is a bijection between  $\Sigma^+$  and  $\Pi^+$ .

The described map  $\Sigma^+ \rightarrow \Pi^+$  is called *central projection* of hemisphere  $\Sigma^+$ .

In spherical geometry, central projection is analogous to the Klein model of hyperbolic plane.

Note that the central projection sends intersections of great circles with  $\Sigma^+$  to the lines in  $\Pi^+$ . The later follows since great circles are formed by intersection of  $\Sigma$  with planes passing through the origin and the lines in  $\Pi^+$  are formed by intersection of  $\Pi^+$  with these planes.

**13.8. Exercise.** Assume that  $\triangle_s NBC$  has right angle at  $C$  and  $N$  is the North Pole which lies completely in the north hemisphere. Let  $\triangle NB'C'$  be the image of  $\triangle_s NBC$  under central projection.

Observe that  $\triangle NB'C'$  has right angle at  $C'$ .

Use this observation and the standard Pythagorean for  $\triangle NB'C'$  to prove spherical Pythagorean theorem for  $\triangle_s NBC$ .

**13.9. Exercise.** Consider a nondegenerate spherical triangle  $\triangle_s ABC$ . Assume that  $\Pi^+$  is parallel to the plane passing through  $A$ ,  $B$  and  $C$ . Denote by  $A'$ ,  $B'$  and  $C'$  the central projections of  $A$ ,  $B$  and  $C$ .

- (a) Show that the midpoints of  $[AB]$ ,  $[BC]$  and  $[CA]$  are central projections of the midpoints of  $[AB]_s$ ,  $[BC]_s$  correspondingly.
- (b) Use part (a) to show that medians of spherical triangle intersect at one point.
- (c) Compare to Exercise 14.4.

# Chapter 14

## Klein model

Klein model is an other model of hyperbolic plane discovered by Beltrami. The Klein and Poincaré models are saying exactly the same thing but in two different languages. Some problems in hyperbolic geometry admit simpler proof using Klein model and others have simpler proof in Poincaré model. Therefore it worth to know both.

### Special bijection of h-plane to itself

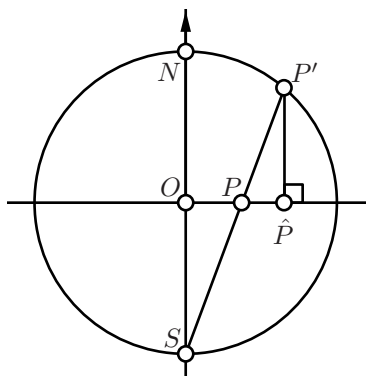
Consider the Poincaré disc model with absolute at the unit circle  $\Omega$  centered at  $O$ . Choose a coordinate system  $(x, y)$  on the plane with origin at  $O$ , so the circle  $\Omega$  is described by the equation  $x^2 + y^2 = 1$ .

Let us think of our plane  $\Pi$  as it lies in the Euclidean space as the  $xy$ -plane. Denote by  $\Sigma$  the unit sphere centered at  $O$ ; it is described by the equation

$$x^2 + y^2 + z^2 = 1.$$

Set  $S = (0, 0, -1)$  and  $N = (0, 0, 1)$ ; these are the South and North Poles of  $\Sigma$ .

Consider stereographic projection  $\Pi \rightarrow \Sigma$  from  $S$ ; given point  $P \in \Pi$  denote its image as  $P'$ . Note that the h-plane is mapped to the North Hemisphere; that is, to the set of points  $(x, y, z)$  in  $\Sigma$  described by inequality  $z > 0$ .



The plane through  $P$ ,  $O$  and  $S$ .

For a point  $P' \in \Sigma$  consider its foot point  $\hat{P}$  on  $\Pi$ ; this is the closest point on  $\Pi$  from  $P'$ .

The composition  $P \mapsto \hat{P}$  of these two maps is a bijection of  $h$ -plane to itself.

Note that  $P = \hat{P}$  if and only if  $P \in \Omega$  or  $P = O$ .

**14.1. Exercise.** Show that the map  $P \mapsto \hat{P}$  described above can be described the following way: set  $\hat{O} = O$  and for any other point  $P$  take  $\hat{P} \in [OP)$  such that

$$O\hat{P} = \frac{2 \cdot x}{1 - x^2},$$

where  $x = OP$ .

**14.2. Lemma.** Let  $(PQ)_h$  be an  $h$ -line with the ideal points  $A$  and  $B$ . Then  $\hat{P}, \hat{Q} \in [AB]$ .

Moreover

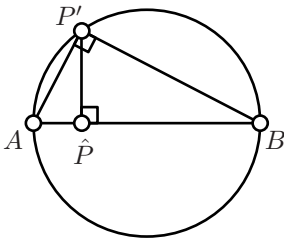
$$\textcircled{1} \quad \frac{A\hat{Q} \cdot B\hat{P}}{\hat{Q}B \cdot \hat{P}A} = \left( \frac{AQ \cdot BP}{QB \cdot PA} \right)^2.$$

In particular

$$PQ_h = \frac{1}{2} \cdot \left| \ln \frac{A\hat{Q} \cdot B\hat{P}}{\hat{Q}B \cdot \hat{P}A} \right|.$$

*Proof.* Consider the stereographic projection  $\Pi \rightarrow \Sigma$  from the South Pole. Denote by  $P'$  and  $Q'$  the images of  $P$  and  $Q$ . According to Theorem 13.3(c),

$$\textcircled{2} \quad \frac{AQ \cdot BP}{QB \cdot PA} = \frac{AQ' \cdot BP'}{Q'B \cdot P'A}.$$



The plane  $\Lambda$ .

By Theorem 13.3(e), each cline in  $\Pi$  which is perpendicular to  $\Omega$  is mapped to a circle in  $\Sigma$  which is still perpendicular to  $\Omega$ . It follows that the stereographic projection sends  $(PQ)_h$  to the intersection of the north hemisphere of  $\Sigma$  with a plane, say  $\Lambda$ , perpendicular to  $\Pi$ .

Consider the plane  $\Lambda$ . It contains points  $A, B, P', \hat{P}$  and the circle  $\Gamma = \Sigma \cap \Lambda$ . (It also contains  $Q'$  and  $\hat{Q}$  but we will not use these points for a while.)

Note that

- ◇  $A, B, P' \in \Gamma$ ,
- ◇  $[AB]$  is a diameter of  $\Gamma$ ,
- ◇  $(AB) = \Pi \cap \Sigma$ ,
- ◇  $\hat{P} \in [AB]$
- ◇  $(P'\hat{P}) \perp (AB)$ .

Since  $[AB]$  is the diameter, the angle  $\angle APB$  is right. Hence  $\triangle A\hat{P}P' \sim \triangle AP'B \sim \triangle P'\hat{P}B$ . In particular

$$\frac{AP'}{BP'} = \frac{A\hat{P}}{P'\hat{P}} = \frac{P'\hat{P}}{B\hat{P}}.$$

Therefore

$$\textcircled{3} \quad \frac{A\hat{P}}{B\hat{P}} = \left( \frac{AP'}{BP'} \right)^2.$$

The same way we get

$$\textcircled{4} \quad \frac{A\hat{Q}}{B\hat{Q}} = \left( \frac{AQ'}{BQ'} \right)^2.$$

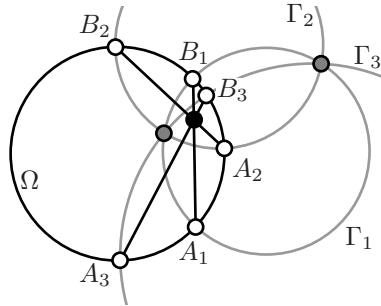
Finally note that  $\textcircled{2} + \textcircled{3} + \textcircled{4}$  imply  $\textcircled{1}$ .

The last statement follows from  $\textcircled{1}$  and the definition of h-distance. Indeed,

$$\begin{aligned} PQ_h &\stackrel{\text{def}}{=} \left| \ln \frac{AQ \cdot BP}{QB \cdot PA} \right| = \\ &= \left| \ln \left( \frac{A\hat{Q} \cdot B\hat{P}}{\hat{Q}B \cdot \hat{P}A} \right)^{\frac{1}{2}} \right| = \\ &= \frac{1}{2} \cdot \left| \ln \frac{A\hat{Q} \cdot B\hat{P}}{\hat{Q}B \cdot \hat{P}A} \right|. \end{aligned}$$

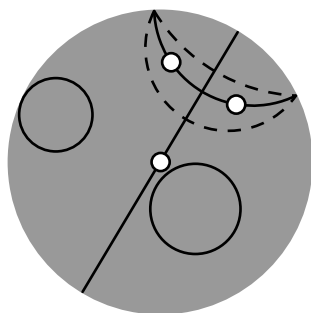
□

**14.3. Exercise.** Let  $\Gamma_1, \Gamma_2$  and  $\Gamma_3$  be three circles perpendicular to the circle  $\Omega$ . Let us denote by  $[A_1B_1]$ ,  $[A_2B_2]$  and  $[A_3B_3]$  the common chords of  $\Omega$  and  $\Gamma_1, \Gamma_2, \Gamma_3$  correspondingly. Show that the chords  $[A_1B_1]$ ,  $[A_2B_2]$  and  $[A_3B_3]$  intersect at one point inside  $\Omega$  if and only if  $\Gamma_1, \Gamma_2$  and  $\Gamma_3$  intersect at two points.

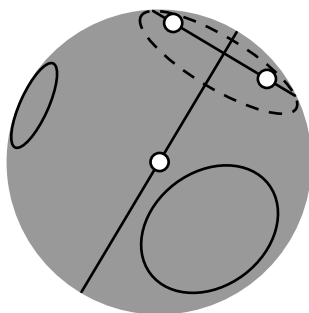


## Klein model

The following picture illustrates the map  $P \mapsto \hat{P}$  described in the previous section. If you take the picture on the left and apply the map  $P \mapsto \hat{P}$ , you get the picture on the right. The picture on the right gives a new way to look at the hyperbolic plane, which is called *Klein model*. One may think of the map  $P \mapsto \hat{P}$  as about translation from one model to the other.



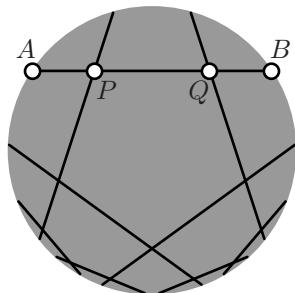
Poincaré model



Klein model

In the Klein model things look different; some become simpler, other things become more complicated.

- ◇ The h-lines in the Klein model are formed by chords. More precisely, they are formed by the intersections of chords of the absolute with the h-plane.
- ◇ The h-circles and equidistants in the Klein model are formed by ellipses and their intersections with the h-plane. It follows since the stereographic projection sends circles on the plane to the circles on the unit sphere and the foot point projection of circle back to plane is formed by ellipse<sup>1</sup>.



- ◇ To find the h-distance between the points  $P$  and  $Q$  in the Klein model, you have to find the points of intersection, say  $A$  and  $B$ , of the Euclidean line  $(PQ)$  with the absolute; then, by Lemma 14.2,

$$PQ_h = \frac{1}{2} \cdot \left| \ln \frac{AQ \cdot BP}{QB \cdot PA} \right|.$$

<sup>1</sup>One may define ellipse as the foot point projection of a circle which lies in the space to the plane.

- ◇ The angle measures in Klein model are very different from the Euclidean angles and it is hard to figure out by looking on the picture. For example all the intersecting  $h$ -lines on the picture above are perpendicular. There are two useful exceptions

- If  $O$  is the center of absolute then

$$\angle_h AOB = \angle AOB.$$

- If  $O$  is the center of absolute and  $\angle OAB = \pm \frac{\pi}{2}$  then

$$\angle_h OAB = \angle OAB = \pm \frac{\pi}{2}.$$

To find the angle measure in Klein model, you may apply a motion of  $h$ -plane which moves the vertex of the angle to the center of absolute; once it is done the hyperbolic and Euclidean angles have the same measure.

The following exercise is hyperbolic analog of Exercise 13.9. This is the first example of a statement which admits an easier proof using Klein model.

**14.4. Exercise.** *Let  $P$  and  $Q$  be the point in  $h$ -plane which lie on the same distance from the center of absolute. Observe that in Klein model,  $h$ -midpoint of  $[PQ]_h$  coincides with the Euclidean midpoint of  $[PQ]_h$ .*

*Conclude that if an  $h$ -triangle is inscribed in an  $h$ -circle then its medians intersect at one point.*

*Think how to prove the same for a general  $h$ -triangle.*

**14.5. Exercise.** *Use Klein model to find the inradius of the ideal triangle.*

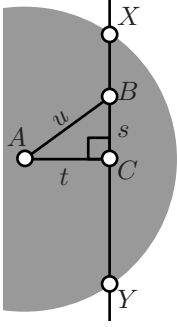
## Hyperbolic Pythagorean theorem

**14.6. Theorem.** *Assume that  $\triangle_h ACB$  is a triangle in  $h$ -plane with right angle at  $C$ . Set  $a = BC_h$ ,  $b = CB_h$  and  $c = AB_h$ . Then*

$$\textcircled{5} \quad \text{ch } c = \text{ch } a \cdot \text{ch } b.$$

*where  $\text{ch}$  denotes hyperbolic cosine; that is, the function defined the following way*

$$\text{ch } x \stackrel{\text{def}}{=} \frac{e^x + e^{-x}}{2}.$$



*Proof.* We will use Klein model of h-plane with a unit circle as the absolute.

We can assume that  $A$  is the center of absolute. Therefore both  $\angle_h ACB$  and  $\angle ACB$  are right.

Set  $s = BC$ ,  $t = CA$ ,  $u = AB$ . According to Euclidean Pythagorean theorem (6.8),

$$u^2 = s^2 + t^2.$$

Note that

$$b = \frac{1}{2} \cdot \ln \frac{1+t}{1-t};$$

therefore

⑥

$$\begin{aligned} \operatorname{ch} b &= \frac{\left(\frac{1+t}{1-t}\right)^{\frac{1}{2}} + \left(\frac{1-t}{1+t}\right)^{\frac{1}{2}}}{2} = \\ &= \frac{1}{\sqrt{1-t^2}}. \end{aligned}$$

The same way we get

$$c = \frac{1}{2} \cdot \ln \frac{1+u}{1-u}$$

and

⑦

$$\begin{aligned} \operatorname{ch} c &= \frac{\left(\frac{1+u}{1-u}\right)^{\frac{1}{2}} + \left(\frac{1-u}{1+u}\right)^{\frac{1}{2}}}{2} = \\ &= \frac{1}{\sqrt{1-u^2}}. \end{aligned}$$

Let  $X$  and  $Y$  are the ideal points of  $(BC)_h$ . Applying the Pythagorean theorem (6.8) again, we get

$$CX = CY = \sqrt{1-t^2}.$$

Therefore

$$a = \frac{1}{2} \cdot \ln \frac{\sqrt{1-t^2} + s}{\sqrt{1-t^2} - s}$$

and

⑧

$$\begin{aligned} \operatorname{ch} a &= \frac{\left(\frac{\sqrt{1-t^2}+s}{\sqrt{1-t^2}-s}\right)^{\frac{1}{2}} + \left(\frac{\sqrt{1-t^2}-s}{\sqrt{1-t^2}+s}\right)^{\frac{1}{2}}}{2} = \\ &= \frac{\sqrt{1-t^2}}{\sqrt{1-t^2}-s^2} \\ &= \frac{\sqrt{1-t^2}}{\sqrt{1-u^2}} \end{aligned}$$



Finally note that ⑥+⑦+⑧ implies ⑤. □

**14.7. Exercise.** Give a proof of Proposition 12.1 using Klein model.

## Bolyai's construction

Assume we need to construct a line asymptotically parallel to the given line through the given point. The initial configuration is given by three points, say  $P$ ,  $A$  and  $B$  and we need to construct a line through  $P$  which is asymptotically parallel to  $\ell = (AB)$ .

Note that ideal points do not lie in the  $h$ -plane, so there is no way to use them in the construction.

The following construction was given by Bolyai. This construction works in absolute plane; in particular, it works in Euclidean plane and in the  $h$ -plane. We assume that you know a compass-and-ruler construction of perpendicular line through the given point.

### 14.8. Bolyai's construction.

1. Construct the line  $m$  through  $P$  which perpendicular to  $\ell$ . Denote by  $Q$  the foot point of  $P$  on  $\ell$ .
2. Construct the line  $n$  through  $P$  which perpendicular to  $m$ .
3. Draw the circle  $\Gamma_1$  with center  $Q$  through  $P$  and mark by  $R$  a point of intersection of  $\Gamma_1$  with  $\ell$ .
4. Construct the line  $k$  through  $R$  which perpendicular to  $n$ .
5. Draw the circle  $\Gamma_2$  with center  $P$  through  $Q$  and mark by  $T$  a point of intersection of  $\Gamma_2$  with  $k$ .
6. The line  $PT$  is asymptotically parallel to  $\ell$ .

You can use this link to a java applet to perform the construction.

Note that in Euclidean plane  $\Gamma_2$  is tangent to  $k$ , so the point  $T$  is uniquely defined. In hyperbolic plane the  $\Gamma_2$  intersects  $k$  in two points, both of the corresponding lines are asymptotically parallel to  $\ell$ , one from left and one from right.

To prove that Bolyai's construction gives the asymptotically parallel line in  $h$ -plane, it is sufficient to show the following.

**14.9. Proposition.** Assume  $P, Q, R, S, T$  be points in  $h$ -plane such that

- ◇  $S \in (RT)_h$ ,
- ◇  $(PQ)_h \perp (QR)_h$ ,
- ◇  $(PS)_h \perp (PQ)_h$ ,
- ◇  $(RT)_h \perp (PS)_h$  and
- ◇  $(PT)_h$  and  $(QR)_h$  are asymptotically parallel.

Then  $QR_h = PT_h$ .



# Chapter 15

## Complex coordinates

In this chapter we give an interpretation of inversive geometry using complex coordinates. The results of this chapter will not be used in the lectures, but they lead to deeper understanding of inverse and complex numbers.

### Complex numbers

Informally, a complex number is a number that can be put in the form

$$\bullet \quad z = x + i \cdot y,$$

where  $x$  and  $y$  are real numbers and  $i^2 = -1$ .

The set of complex numbers will be further denoted by  $\mathbb{C}$ . If  $x$ ,  $y$  and  $z$  as in  $\bullet$ , then  $x$  is called the real part and  $y$  the imaginary part of the complex number  $z$ . Briefly it is written as  $x = \operatorname{Re} z$  and  $y = \operatorname{Im} z$ .

On the more formal level, a complex number is a pair of real numbers  $(x, y)$  with addition and multiplication described below. The formula  $x + i \cdot y$  is only a convenient way to write the pair  $(x, y)$ .

$$\begin{aligned}(x_1 + i \cdot y_1) + (x_2 + i \cdot y_2) &\stackrel{\text{def}}{=} (x_1 + x_2) + i \cdot (y_1 + y_2); \\ (x_1 + i \cdot y_1) \cdot (x_2 + i \cdot y_2) &\stackrel{\text{def}}{=} (x_1 \cdot x_2 - y_1 \cdot y_2) + i \cdot (x_1 \cdot y_2 + y_1 \cdot x_2).\end{aligned}$$

### Complex coordinates

Recall that one can think of Euclidean plane as the set of all pairs of real numbers  $(x, y)$  equipped with the metric

$$AB = \sqrt{(x_A - x_B)^2 + (y_A - y_B)^2}$$

where  $A = (x_A, y_A)$  and  $B = (x_B, y_B)$ .

One can pack coordinates  $(x, y)$  of a point in the Euclidean plane, in one complex number  $z = x + i \cdot y$ . This way we get one-to-one correspondence between points of Euclidean plane and  $\mathbb{C}$ . Given a point  $Z = (x, y)$ , the complex number  $z = x + i \cdot y$  is called *complex coordinate* of  $Z$ .

Note that if  $O$ ,  $E$  and  $I$  are the points in the plane with complex coordinates  $0$ ,  $1$  and  $i$  then  $\angle EOI = \pm \frac{\pi}{2}$ . Further we assume that  $\angle EOI = \frac{\pi}{2}$ ; if not, one has to change the direction of the  $y$ -coordinate.

## Conjugation and absolute value

Let  $z = x + i \cdot y$  and both  $x$  and  $y$  are real. Denote by  $Z$  the point in the plane with complex coordinate  $z$ .

If  $y = 0$ , we say that  $z$  is a *real* and if  $x = 0$  we say that  $z$  is an *imaginary* complex number. The set of points with real and imaginary complex coordinates form lines in the plane, which are called *real* and *imaginary* lines which will be denoted as  $\mathbb{R}$  and  $i \cdot \mathbb{R}$ .

The complex number  $\bar{z} = x - iy$  is called *complex conjugate* of  $z$ .

Note that the point  $\bar{Z}$  with complex coordinate  $\bar{z}$  is the reflection of  $Z$  in the real line.

It is straightforward to check that

$$\textcircled{2} \quad x = \operatorname{Re} z = \frac{z + \bar{z}}{2}, \quad y = \operatorname{Im} z = \frac{z - \bar{z}}{i \cdot 2}, \quad x^2 + y^2 = z \cdot \bar{z}.$$

The last formula in  $\textcircled{2}$  makes possible to express the quotient  $\frac{w}{z}$  of two complex numbers  $w$  and  $z = x + i \cdot y$ :

$$\frac{w}{z} = \frac{1}{z \cdot \bar{z}} \cdot w \cdot \bar{z} = \frac{1}{x^2 + y^2} \cdot w \cdot \bar{z}.$$

Note that

$$\overline{z + w} = \bar{z} + \bar{w}, \quad \overline{z - w} = \bar{z} - \bar{w}, \quad \overline{z \cdot w} = \bar{z} \cdot \bar{w}, \quad \overline{z/w} = \bar{z}/\bar{w};$$

that is, all the algebraic operations *respect* conjugation.

The value

$$\begin{aligned} |z| &= \sqrt{x^2 + y^2} = \\ &= \sqrt{z \cdot \bar{z}} \end{aligned}$$

is called *absolute value* of  $z$ . If  $|z| = 1$  then  $z$  is called *unit complex number*.

Note that if  $Z$  and  $W$  are points in the Euclidean plane and  $z$  and  $w$  their complex coordinates then

$$ZW = |z - w|.$$

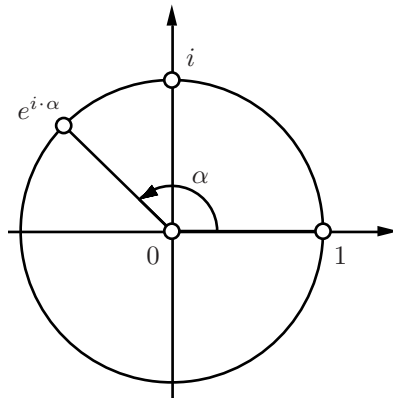
## Euler's formula

Let  $\alpha$  be a real number. The following identity is called *Euler's formula*.

$$\textcircled{3} \quad e^{i \cdot \alpha} = \cos \alpha + i \cdot \sin \alpha.$$

In particular,  $e^{i \cdot \pi} = -1$  and  $e^{i \cdot \frac{\pi}{2}} = i$ .

Geometrically Euler's formula means the following. Assume that  $O$  and  $E$  are the point with complex coordinates 0 and 1 correspondingly. Assume  $OZ = 1$  and  $\angle EOZ \equiv \alpha$  then  $e^{i \cdot \alpha}$  is the complex coordinate of  $Z$ . In particular, the complex coordinate of any point on the unit circle centered at  $O$  can be uniquely expressed as  $e^{i \cdot \alpha}$  for some  $\alpha \in (-\pi, \pi]$ .



**Why should you think that  $\textcircled{3}$  is true?** The proof of Euler's identity depends on the way you define exponent. If you never had to take exponent of imaginary number, you may take the right hand side in  $\textcircled{3}$  as the definition of the  $e^{i \cdot \alpha}$ .

In this case formally nothing has to be proved, but it is better to check that  $e^{i \cdot \alpha}$  satisfies familiar identities. For example

$$e^{i \cdot \alpha} \cdot e^{i \cdot \beta} = e^{i \cdot (\alpha + \beta)}.$$

Which can be proved using the following trigonometric formulas, which we assume to be known:

$$\cos(\alpha + \beta) = \cos \alpha \cdot \cos \beta - \sin \alpha \cdot \sin \beta$$

$$\sin(\alpha + \beta) = \sin \alpha \cdot \cos \beta + \cos \alpha \cdot \sin \beta$$

If you know power series for sine, cosine and exponent, the following might also convince that  $\textcircled{3}$  is the right definition.

$$\begin{aligned} e^{i \cdot \alpha} &= 1 + i \cdot \alpha + \frac{(i \cdot \alpha)^2}{2!} + \frac{(i \cdot \alpha)^3}{3!} + \frac{(i \cdot \alpha)^4}{4!} + \frac{(i \cdot \alpha)^5}{5!} + \dots = \\ &= 1 + i \cdot \alpha - \frac{\alpha^2}{2!} - i \cdot \frac{\alpha^3}{3!} + \frac{\alpha^4}{4!} + i \cdot \frac{\alpha^5}{5!} - \dots = \\ &= \left( 1 - \frac{\alpha^2}{2!} + \frac{\alpha^4}{4!} - \dots \right) + i \cdot \left( \alpha - \frac{\alpha^3}{3!} + \frac{\alpha^5}{5!} - \dots \right) = \\ &= \cos \alpha + i \cdot \sin \alpha. \end{aligned}$$

## Argument and polar coordinates

As above, assume that  $O$  and  $E$  denote the points with complex coordinates 0 and 1 correspondingly.

Let  $Z$  be the point distinct from  $O$ . Set  $\rho = OZ$  and  $\vartheta = \angle EOZ$ . The pair  $(\rho, \vartheta)$  is called *polar coordinates* of  $Z$ .

If  $z$  is the complex coordinate of  $Z$  then  $\rho = |z|$ . The value  $\vartheta$  is called argument of  $z$  (briefly,  $\vartheta = \arg z$ ). In this case

$$z = \rho \cdot e^{i \cdot \vartheta} = \rho \cdot (\cos \vartheta + i \cdot \sin \vartheta).$$

Note that

$$\arg(z \cdot w) \equiv \arg z + \arg w \quad \text{and} \quad \arg \frac{z}{w} \equiv \arg z - \arg w$$

if  $z, w \neq 0$ . In particular, if  $Z, V, W$  be points with complex coordinates  $z, v$  and  $w$  correspondingly then

$$\begin{aligned} \textcircled{4} \quad \angle VZW &= \arg \left( \frac{w - z}{v - z} \right) \equiv \\ &\equiv \arg(w - z) - \arg(v - z) \end{aligned}$$

once the left hand side is defined.

**15.1. Exercise.** Use the formula  $\textcircled{4}$  to show that

$$\angle ZVW + \angle VWZ + \angle WZV \equiv \pi$$

for any triangle  $\triangle ZVW$  in the Euclidean plane.

**15.2. Exercise.** Assume that points  $V, W$  and  $Z$  have complex coordinates  $v, w$  and  $v \cdot w$  correspondingly and the point  $O$  and  $E$  as above. Show that

$$\triangle OEV \sim \triangle OWZ.$$

The following Theorem is a reformulation of Theorem 8.6 which use complex coordinates.

**15.3. Theorem.** Let  $UVWZ$  be a quadrilateral and  $u, v, w$  and  $z$  be the complex coordinates of its vertices. Then  $UVWZ$  is inscribed if and only if the number

$$\frac{(v - u) \cdot (w - z)}{(v - w) \cdot (z - u)}$$

is real.

The value  $\frac{(v-u) \cdot (w-z)}{(v-w) \cdot (z-u)}$  will be called *complex cross-ratio*, it will be discussed in more details below.

**15.4. Exercise.** Observe that the complex number  $z \neq 0$  is real if and only if  $\arg z = 0$  or  $\pi$ ; in other words,  $2 \cdot \arg z \equiv 0$ .

Use this observation to show that Theorem 15.3 is indeed a reformulation of Theorem 8.6.

## Möbius transformations

**15.5. Exercise.** Watch video “Möbius Transformations Revealed” by Douglas Arnold and Jonathan Rogness. (It is 3 minutes long and available on YouTube.)

The complex plane  $\mathbb{C}$  extended by one ideal number  $\infty$  is called extended complex plane. It is denoted by  $\hat{\mathbb{C}}$ , so  $\hat{\mathbb{C}} = \mathbb{C} \cup \{\infty\}$

*Möbius transformation* of  $\hat{\mathbb{C}}$  is a function of one complex variable  $z$  which can be written as

$$f(z) = \frac{a \cdot z + b}{c \cdot z + d},$$

where the coefficients  $a, b, c, d$  are complex numbers satisfying  $a \cdot d - b \cdot c \neq 0$ . (If  $a \cdot d - b \cdot c = 0$  the function defined above is a constant and is not considered to be a Möbius transformation.)

In case  $c \neq 0$ , we assume that

$$f(-d/c) = \infty \quad \text{and} \quad f(\infty) = a/c;$$

and if  $c = 0$  we assume

$$f(\infty) = \infty.$$

## Elementary transformations

The following three types of Möbius transformations are called *elementary*.

1.  $z \mapsto z + w$ ,
2.  $z \mapsto w \cdot z$  for  $w \neq 0$ ,
3.  $z \mapsto \frac{1}{z}$ .

**The geometric interpretations.** As before we will denote by  $O$  the point with complex coordinate 0.

The first map  $z \mapsto z + w$ , corresponds to so called *parallel translation* of Euclidean plane, its geometric meaning should be evident.

The second map is called *rotational homothety* with center at  $O$ . That is, the point  $O$  maps to itself and any other point  $Z$  maps to a point  $Z'$  such that  $OZ' = |w| \cdot OZ$  and  $\angle ZOZ' = \arg w$ .

The third map can be described as a composition of inversion in the unit circle centered at  $O$  and the reflection in  $\mathbb{R}$  (any order). Indeed,  $\arg z \equiv -\arg \frac{1}{\bar{z}}$  therefore

$$\arg z = \arg(1/\bar{z});$$

that is, if the points  $Z$  and  $Z'$  have complex coordinates  $z$  and  $1/\bar{z}$  then  $Z' \in [OZ)$ . Clearly  $OZ = |z|$  and  $OZ' = |1/\bar{z}| = \frac{1}{|z|}$ . Therefore  $Z'$  is inversion of  $Z$  in the unit circle centered at  $O$ . Finally the reflection of  $Z'$  in  $\mathbb{R}$ , has complex coordinate  $\frac{1}{z} = \overline{(1/\bar{z})}$ .

**15.6. Proposition.** *A map  $f: \hat{\mathbb{C}} \rightarrow \hat{\mathbb{C}}$  is a Möbius transformation if and only if it can be expressed as a composition of elementary Möbius transformation.*

*Proof; ( $\Rightarrow$ ).* Consider, the Möbius transformation

$$f(z) = \frac{a \cdot z + b}{c \cdot z + d}.$$

It is straightforward to check that

$$\textcircled{5} \quad f(z) = f_4 \circ f_3 \circ f_2 \circ f_1(z),$$

where

$$\begin{aligned} \diamond f_1(z) &= z + \frac{d}{c}, \\ \diamond f_2(z) &= \frac{1}{z}, \\ \diamond f_3(z) &= -\frac{a \cdot d - b \cdot c}{c^2} \cdot z, \\ \diamond f_4(z) &= z + \frac{a}{c} \end{aligned}$$

if  $c \neq 0$  and

$$\begin{aligned} \diamond f_1(z) &= \frac{a}{d} \cdot z, \\ \diamond f_2(z) &= z + \frac{b}{d}, \\ \diamond f_3(z) &= f_4(z) = z \end{aligned}$$

if  $c = 0$ .

( $\Leftarrow$ ). We need to show that composing elementary transformations, we can only get Möbius transformations. Note that it is sufficient to check that composition of a Möbius transformations

$$f(z) = \frac{a \cdot z + b}{c \cdot z + d}.$$

with any elementary transformation is a Möbius transformations.



The later is done by means of direct calculations.

$$\begin{aligned}\frac{a \cdot (z + w) + b}{c \cdot (z + w) + d} &= \frac{a \cdot z + (b + a \cdot w)}{c \cdot z + (d + c \cdot w)} \\ \frac{a \cdot (w \cdot z) + b}{c \cdot (w \cdot z) + d} &= \frac{(a \cdot w) \cdot z + b}{(c \cdot w) \cdot z + d} \\ \frac{a \cdot \frac{1}{z} + b}{c \cdot \frac{1}{z} + d} &= \frac{b \cdot z + a}{d \cdot z + c}\end{aligned}$$

□

**15.7. Corollary.** *The image of cline under Möbius transformation is a cline.*

*Proof.* By Proposition 15.6, it is sufficient to check that each elementary transformation sends cline to cline.

For the first and second elementary transformation the later is evident.

As it was noted above, the map  $z \mapsto \frac{1}{z}$  is a composition of inversion and reflection. By Theorem 9.9, inversion sends cline to cline. Hence the result follows. □

**15.8. Exercise.** *Show that inverse of Möbius transformation is a Möbius transformation.*

**15.9. Exercise.** *Given distinct values  $z_0, z_1, z_\infty \in \hat{\mathbb{C}}$ , construct a Möbius transformation  $f$  such that  $f(z_0) = 0$ ,  $f(z_1) = 1$  and  $f(z_\infty) = \infty$ . Show that such transformation is unique.*

## Complex cross-ratio

Given four distinct complex numbers  $u, v, w, z$ , the complex number

$$\frac{(u - w) \cdot (v - z)}{(v - w) \cdot (u - z)}$$

is called *complex cross-ratio*; it will be denoted as  $(u, v; w, z)$ .

If one of the numbers  $u, v, w, z$ , is  $\infty$ , then the complex cross-ratio has to be defined by taking the appropriate limit; in other words, we assume that  $\frac{\infty}{\infty} = 1$ . For example,

$$(u, v; w, \infty) = \frac{(u - w)}{(v - w)}.$$

Assume that  $U, V, W$  and  $Z$  be the points with complex coordinates  $u, v, w$  and  $z$  correspondingly. Note that

$$\begin{aligned}\frac{UW \cdot VZ}{VW \cdot UZ} &= |(u, v; w, z)|, \\ \angle WUZ + \angle ZVW &= \arg \frac{u-w}{u-z} + \arg \frac{v-z}{v-w} \equiv \\ &\equiv \arg(u, v; w, z).\end{aligned}$$

It makes possible to reformulate Theorem 9.5 using the complex coordinates the following way.

**15.10. Theorem.** *Let  $UWVZ$  and  $U'W'V'Z'$  be two quadrilaterals such that the points  $U', W', V'$  and  $Z'$  are inversions of  $U, W, V$ , and  $Z$  correspondingly. Assume  $u, w, v, z, u', w', v'$  and  $z'$  be the complex coordinates of  $U, W, V, Z, U', W', V'$  and  $Z'$  correspondingly.*

*Then*

$$(u', v'; w', z') = \overline{(u, v; w, z)}.$$

The following Exercise is a generalization of the Theorem above. It admits a short and simple solution which use Proposition 15.6.

**15.11. Exercise.** *Show that complex cross-ratios are invariant under Möbius transformations. That is, if a Möbius transformation maps four distinct complex numbers  $u, v, w, z$  to complex numbers  $u', v', w', z'$  respectively, then*

$$(u', v'; w', z') = (u, v; w, z).$$

# Hints

## Chapter 1

**Exercise 1.2.** Among the conditions in Definition 1.1, only the triangle inequality require proof, the rest of conditions are evident. Let  $A = (x_A, y_A)$ ,  $B = (x_B, y_B)$  and  $C = (x_C, y_C)$ . Set

$$\begin{aligned}x_1 &= x_B - x_A, & y_1 &= y_B - y_A, \\x_2 &= x_C - x_B, & y_2 &= y_C - y_B.\end{aligned}$$

(a). The inequality

$$d_1(A, C) \leq d_1(A, B) + d_1(B, C)$$

can be written as

$$|x_1 + x_2| + |y_1 + y_2| \leq |x_1| + |y_1| + |x_2| + |y_2|.$$

The later follows since  $|x_1 + x_2| \leq |x_1| + |x_2|$  and  $|y_1 + y_2| \leq |y_1| + |y_2|$ .

(b). The inequality

$$\textcircled{1} \quad d_2(A, C) \leq d_2(A, B) + d_2(B, C)$$

can be written as

$$\sqrt{(x_1 + x_2)^2 + (y_1 + y_2)^2} \leq \sqrt{x_1^2 + y_1^2} + \sqrt{x_2^2 + y_2^2}.$$

Taking square of left and right hand sides, simplify take square again and again simplify. You should get the following inequality

$$0 \leq (x_1 \cdot y_2 - x_2 \cdot y_1)^2.$$

which is equivalent to  $\textcircled{1}$  and evidently true.

(c). The inequality

$$d_{\infty}(A, C) \leq d_{\infty}(A, B) + d_{\infty}(B, C)$$

can be written as

$$\textcircled{2} \quad \max\{|x_1 + x_2|, |y_1 + y_2|\} \leq \max\{|x_1|, |y_1|\} + \max\{|x_2|, |y_2|\}.$$

Without loss of generality we may assume that

$$\max\{|x_1 + x_2|, |y_1 + y_2|\} = |x_1 + x_2|.$$

Further,

$$\begin{aligned} |x_1 + x_2| &\leq |x_1| + |x_2| \leq \\ &\leq \max\{|x_1|, |y_1|\} + \max\{|x_2|, |y_2|\}. \end{aligned}$$

Hence  $\textcircled{2}$  follows.

**Exercise 1.4.** We apply Definition 1.1 only.

If  $A \neq B$  then  $d_{\mathcal{X}}(A, B) > 0$ . Since  $f$  is distance-preserving,

$$d_{\mathcal{Y}}(f(A), f(B)) = d_{\mathcal{X}}(A, B).$$

Therefore  $d_{\mathcal{Y}}(f(A), f(B)) > 0$  and hence  $f(A) \neq f(B)$ .

**Exercise 1.5.** Set  $f(0) = a$  and  $f(1) = b$ . Note that that  $b = a + 1$  or  $a - 1$ .

Moreover,  $f(x) = a \pm x$  and at the same time,  $f(x) = b \pm (x - 1)$  for any  $x$ .

If  $b = a + 1$ , it follows that  $f(x) = a + x$  for any  $x$ .

The same way, if  $b = a - 1$ , it follows that  $f(x) = a - x$  for any  $x$ .

**Exercise 1.6.** Show that the map  $(x, y) \mapsto (x + y, x - y)$  is an isometry  $(\mathbb{R}^2, d_1) \rightarrow (\mathbb{R}^2, d_{\infty})$ . That is, you need to check that this map is bijective and distance preserving.

**Exercise 1.7.** First prove that *two points*  $A = (x_A, y_A)$  and  $B = (x_B, y_B)$  on the Manhattan plane have unique midpoint if and only if  $x_A = x_B$  or  $y_A = y_B$ ; compare with the example on page 19.

Then use above statement to prove that any motion of the Manhattan plane can be written in one of the following two ways

$$\begin{aligned} (x, y) &\mapsto (\pm x + a, \pm y + b), \\ (x, y) &\mapsto (\pm y + b, \pm x + a), \end{aligned}$$

for some fixed real numbers  $a$  and  $b$ . (In each case we have 4 choices of signs, so for fixed pair  $(a, b)$  we have 8 distinct motions.)

**Exercise 1.9.** Set  $A = (-1, 1)$ ,  $B = (0, 0)$  and  $C = (1, 1)$ . Show that for  $d_1$  and  $d_2$  all the triangle inequalities with the points  $A$ ,  $B$  and  $C$  are strict. Then apply Exercise 1.11 to show that the graph is not a line.

For  $d_\infty$  show that  $(x, |x|) \mapsto x$  gives the isometry of the graph to  $\mathbb{R}$ . Conclude that the graph is a line in  $(\mathbb{R}^2, d_\infty)$ .

**Exercise 1.10.** Applying the definition of line, the problems are reduced to the finding number of solutions for each of the following two equations.

$$|x - a| = |x - b|$$

and

$$|x - a| = 2 \cdot |x - b|$$

if  $a \neq b$ .

Each can be solved by taking square of left and right hand sides. The numbers of solutions are 1 and 2 correspondingly.

**Exercise 1.14.** (a). By triangle inequality

$$|f(A') - f(A)| \leq d(A', A).$$

Therefore we can take  $\delta = \varepsilon$ .

(b). By triangle inequality

$$\begin{aligned} |f(A', B') - f(A, B)| &\leq |f(A', B') - f(A, B')| + \\ &\quad + |f(A, B') - f(A, B)| \leq \\ &\leq d(A', A) + d(B', B) \end{aligned}$$

Therefore we can take  $\delta = \frac{\varepsilon}{2}$ .

**Exercise 1.15.** Fix  $A \in \mathcal{X}$  and  $B \in \mathcal{Y}$  such that  $f(A) = B$ .

Fix  $\varepsilon > 0$ . Since  $g$  is continuous at  $B$ , there is  $\delta_1 > 0$  such that

$$d_{\mathcal{Z}}(g(B'), g(B)) < \varepsilon$$

if  $d_{\mathcal{Y}}(B', B) < \delta_1$ .

Since  $f$  is continuous at  $A$ , there is  $\delta_2 > 0$  such that

$$d_{\mathcal{Y}}(f(A'), f(A)) < \delta_1$$

if  $d_{\mathcal{X}}(A', A) < \delta_2$ .

Since  $f(A) = B$ , we get

$$d_{\mathcal{Z}}(h(A'), h(A)) < \varepsilon$$

if  $d_{\mathcal{X}}(A', A) < \delta_2$ . Hence the result follows.

**Exercise 1.13.** The equation  $2 \cdot \alpha \equiv 0$  means that  $2 \cdot \alpha = 2 \cdot k \cdot \pi$  for some integer  $k$ . Therefore  $\alpha = k \cdot \pi$  for some integer  $k$ .

Equivalently  $\alpha = 2 \cdot n \cdot \pi$  or  $\alpha = (2 \cdot n + 1) \cdot \pi$  for some integer  $n$ . The first identity means that  $\alpha \equiv 0$  and the second means  $\alpha \equiv \pi$ .

## Chapter 2

**Exercise 2.2.** By Axiom II,  $(OA) = (OA')$ . Therefore the statement boils down to the following.

*Assume  $f: \mathbb{R} \rightarrow \mathbb{R}$  is a motion of the plane which sends  $0 \rightarrow 0$  and one positive number to a positive number then  $f$  is an identity map.*

The later follows from Exercise 1.5.

**Exercise 2.5.** By Proposition 2.4,  $\angle AOA = 0$ . It remains to apply Axiom IIIa.

**Exercise 2.9.** Apply Proposition 2.4, Theorem 2.7 and Exercise 1.13.

**Exercise 2.10.** By Axiom IIIb,

$$2 \cdot \angle BOC \equiv 2 \cdot \angle AOC - 2 \cdot \angle AOB \equiv 0.$$

By Exercise 1.13, it implies that  $\angle BOC = 0$  or  $\pi$ .

It remains to apply Exercise 2.5 and Theorem 2.7 correspondingly in these cases.

**Exercise 2.12.** Apply Proposition 2.11 to show that  $\angle AOC = \angle BOD$  and then Axiom IV.

## Chapter 3

**Exercise 3.1.** Set  $\alpha = \angle AOB$  and  $\beta = \angle BOA$ . Note that  $\alpha = \pi$  if and only if  $\beta = \pi$ . Otherwise  $\alpha = -\beta$ . Hence the result follows.

**Exercise 3.2.** Set  $\alpha = \angle AOX$  and  $\beta = \angle BOX$ . Since  $\angle AOB$  is straight,

$$\textcircled{1} \quad \alpha - \beta \equiv \pi.$$

It follows that  $\alpha = \pi \Leftrightarrow \beta = 0$  and  $\alpha = 0 \Leftrightarrow \beta = \pi$ .

In the remaining cases we have  $|\alpha|, |\beta| < \pi$ . If  $\alpha$  and  $\beta$  have the same sign then  $|\alpha - \beta| < \pi$  which contradicts  $\textcircled{1}$ .

**Exercise 3.3.** Set  $\alpha = \angle BOC$ ,  $\beta = \angle COA$  and  $\gamma = \angle AOB$ . By Axiom IIIb and Proposition 2.4

$$\textcircled{2} \quad \alpha + \beta + \gamma \equiv 0$$

Note that  $0 < \alpha + \beta < 2 \cdot \pi$  and  $|\gamma| \leq \pi$ . If  $\gamma > 0$  then  $\textcircled{2}$  implies

$$\alpha + \beta + \gamma = 2 \cdot \pi$$

and if  $\gamma < 0$  then  $\textcircled{2}$  implies

$$\alpha + \beta + \gamma = 0.$$

**Exercise 3.9.** Note that  $O$  and  $A'$  lie on the same side from  $(AB)$ . Analogously  $O$  and  $B'$  lie on the same side from  $(AB)$ . Hence the result follows.

**Exercise 3.12.** Apply Theorem 3.11 for triangles  $\triangle PQX$  and  $\triangle PQY$  and then Proposition 3.8(a).

**Exercise 3.13.** Note that it is sufficient to consider the cases when  $A' \neq B, C$  and  $B' \neq A, C$ .

Apply Pasch's theorem (3.10) twice; for  $\triangle AA'C$  with line  $(BB')$  and for  $\triangle BB'C$  with line  $(AA')$ .

**Exercise 3.14.** Assume that  $Z$  is the point of intersection.

Note first  $Z \neq P$  and  $Z \neq Q$ , therefore that  $Z \notin (PQ)$ .

Then show that  $Z$  and  $X$  lie on one side from  $(PQ)$ . Repeat the argument to show that  $Z$  and  $Y$  lie on one side from  $(PQ)$ . In particular  $X$  and  $Y$  lie on the same side from  $(PQ)$ , a contradiction.

## Chapter 4

**Exercise 4.5.** Consider point  $D$  and  $D'$ , so that  $M$  is the midpoint of  $[AD]$  and  $M'$  is the midpoint of  $[A'D']$ . Show first that  $\triangle ABD \cong \triangle A'B'D'$ .

**Exercise 4.6.** (a) Apply SAS.

(b) Use (a) and apply SSS.

**Exercise 4.7.** Choose  $B' \in [AC]$  such that  $AB = AB'$ . Note that  $BC = B'C$ . Note that by SSS,  $\triangle ABC \cong \triangle AB'C$ .

**Exercise 4.8.** Without loss of generality, we may assume that  $X$  is distinct from  $A$ ,  $B$  and  $C$ .

Set  $\iota(X) = X'$ ; assume  $X' \neq X$ .

Note that  $AX = AX'$ ,  $BX = BX'$  and  $CX = CX'$ . Therefore  $\angle ABX \equiv \pm \angle ABX'$ . Since  $X \neq X'$ , we get

$$\angle ABX \equiv -\angle ABX'.$$

The same way we get

$$\angle CBX \equiv -\angle CBX'.$$

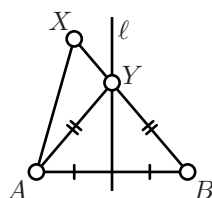
Subtracting these two identities from each other, we get

$$\angle ABC \equiv -\angle ABC,$$

that is,  $\triangle ABC$  is degenerate, a contradiction.

## Chapter 5

**Exercise 5.3.** Assume  $X$  and  $A$  lie on the same side from  $\ell$ .



Note that  $A$  and  $B$  lie on the opposite sides of  $\ell$ . Therefore, by Proposition 3.8,  $[AX]$  does not intersect  $\ell$  and  $[BX]$  intersects  $\ell$ ; set  $Y = [BX] \cap \ell$ .

Note that  $Y \notin [AX]$ , therefore by Exercise 4.7,

$$BX = AY + YX > AX.$$

This way we proved “if”-part. To prove “only if”, it remains to switch  $A$  and  $B$ , repeat the above argument and yet apply Theorem 5.2.

**Exercise 5.4.** Apply Exercise 5.3, Theorem 4.1 and Exercise 3.3.

**Exercise 5.8.** Choose arbitrary nondegenerate triangle  $\triangle ABC$ . Denote by  $\triangle \hat{A}\hat{B}\hat{C}$  its image after the motion.

If  $A \neq \hat{A}$ , apply the reflection in the perpendicular bisector of  $[A\hat{A}]$ . This reflection sends  $A$  to  $\hat{A}$ . Denote by  $B'$  and  $C'$  the reflections of  $B$  and  $C$  correspondingly.

If  $B' \neq \hat{B}$ , apply the reflection in the perpendicular bisector of  $[B'\hat{B}]$ . This reflection sends  $B'$  to  $\hat{B}$ . Note that  $\hat{A}\hat{B} = \hat{A}B'$ ; that is,  $\hat{A}$  lies on the bisector and therefore  $\hat{A}$  reflects to itself. Denote by  $C''$  the reflections of  $C'$ .

Finally if  $C'' \neq \hat{C}$  apply the reflection in  $(\hat{A}\hat{B})$ . Note that  $\hat{A}\hat{C} = \hat{A}C''$  and  $\hat{B}\hat{C} = \hat{B}C''$ ; that is,  $(AB)$  is the perpendicular bisector of  $[C''\hat{C}]$ . Therefore this reflection sends  $C''$  to  $\hat{C}$ .

Apply Exercise 4.8 to show that the composition of constructed reflections coincides with the given motion.



**Exercise 5.10.** Note that  $\angle XBA = \angle ABP$ ,  $\angle PBC = \angle CBY$ . Therefore

$$\begin{aligned}\angle XBY &\equiv \angle XBP + \angle PBY \equiv \\ &\equiv 2 \cdot (\angle ABP + \angle PBC) \equiv \\ &\equiv 2 \cdot \angle ABC.\end{aligned}$$

**Exercise 5.11.** Let  $(BX)$  and  $(BY)$  be internal and external bisectors of  $\angle ABC$ . Then

$$\begin{aligned}2 \cdot \angle XBY &\equiv 2 \cdot \angle XBA + 2 \cdot \angle ABY \equiv \\ &\equiv \angle CBA + \pi + 2 \cdot \angle ABC \equiv \\ &\equiv \pi + \angle CBC = \pi.\end{aligned}$$

Hence the result.

**Exercise 5.13.** Apply Theorem 5.2.

**Exercise 5.15.** Use Exercise 5.13 and the uniqueness of perpendicular (Theorem 5.5).

**Exercise 5.17.** Let  $P'$  be the reflection of  $P$  through  $(OO')$ . Note that  $P'$  lies on both circles and  $P' \neq P$  if and only if  $P \notin (OO')$ .

**Exercise 5.18.** To prove (a), apply Exercise 5.17.

To prove (b), apply Theorem 3.16.

**Exercise 5.19.** Let  $A$  and  $B$  be the points of intersection. Note that the centers lie on the perpendicular bisector of the segment  $[AB]$ .

## Chapter 6

**Exercise 6.4.** Show first that  $k \perp n$ .

**Exercise 6.7.** First show that  $\triangle AA'C \sim \triangle BB'C$ .

**Exercise 6.13.** If  $\triangle ABC$  is degenerate then one of the angle measures is  $\pi$  and the other two are 0. Hence the result follows.

Assume  $\triangle ABC$  is nondegenerate. Set  $\alpha = \angle CAB$ ,  $\beta = \angle ABC$  and  $\gamma = \angle BCA$ .

According to 3.11, we may assume that  $0 < \alpha, \beta, \gamma < \pi$ . Therefore

$$\textcircled{1} \quad 0 < \alpha + \beta + \gamma < 3 \cdot \pi.$$

By Theorem 6.11,

$$\textcircled{2} \quad \alpha + \beta + \gamma \equiv \pi.$$

From ❶ and ❷ the result follows.

**Exercise 6.16.** Apply Theorem 6.11 to  $\triangle ABC$  and  $\triangle BDA$ .

**Exercise 6.18.** Since  $\triangle ABC$  is isosceles,  $\angle CAB = \angle BCA$ .

By SSS,  $\triangle ABC \cong \triangle CDA$ . Therefore

$$\pm \angle DCA \equiv \angle BCA = \angle CAB.$$

Since  $D \neq C$  and we get “ $-$ ” in the last formula. In particular,

$$-\angle DCA \equiv \angle CAB.$$

It follows that  $(AB) \parallel (CD)$ .

**Exercise 6.19.** (a). Use the uniqueness of parallel line (Theorem 6.2).

(b) Use lemma about parallelogram (Lemma 6.17) and Pythagorean theorem (6.8).

**Exercise 6.20.** Set  $A = (0, 0)$ ,  $B = (c, 0)$  and  $C = (x, y)$ . Clearly  $AB = c$ ,  $AC^2 = x^2 + y^2$  and  $BC^2 = (c - x)^2 + y^2$ .

It remains to show that there is a pair of real numbers  $(x, y)$  which satisfy the following system of equations

$$\begin{cases} b^2 = x^2 + y^2 \\ a^2 = (c - x)^2 + y^2 \end{cases}$$

if  $0 < a \leq b \leq c \leq a + c$ . □

## Chapter 7

**Exercise 7.4.** Note that  $(AC) \perp (BH)$  and  $(BC) \perp (AH)$  and apply Theorem 7.3.

**Exercise 7.7.** If  $E$  is the point of intersection of  $(BC)$  with the external bisector of  $\angle BAC$  then

$$\frac{AB}{AC} = \frac{EB}{EC}.$$

It can be proved along the same lines as Lemma 7.6.

**Exercise 7.9.**<sup>1</sup> Apply Lemma 7.6.

**Exercise 7.10.** Apply ASA for the two triangles which bisector cuts from the original triangle.

---

<sup>1</sup>Check Exercise 10.2 for yet another solution.

**Exercise 7.11.** Let  $I$  be the incenter. By SAS, we get  $\triangle AIZ \cong \triangle AIY$  and therefore  $AY = AZ$ . The same way we get  $BX = BZ$  and  $CX = CY$ . Hence the result follows.

**Exercise 7.12.** Let  $\triangle ABC$  be the given acute triangle and  $\triangle A'B'C'$  be its orthic triangle. Apply Exercise 6.7 to show that  $\angle A'B'C \equiv \angle AB'C'$ . Conclude that  $(BB')$  is bisecting  $\angle A'B'C'$ .

For the triangle  $\triangle ABC$  is obtuse then orthocenter coincides with one of the excenters of  $\triangle ABC$ ; that is, the point of intersection of two external and one internal bisectors of  $\triangle ABC$ .

## Chapter 8

**Exercise 8.3.** (a). Apply Theorem 8.2 for  $\angle XX'Y$  and  $\angle X'YY'$  and Theorem 6.11 for  $\triangle PYX'$ .

(b) Note first that the angles  $\angle XPY$  and  $\angle X'PY'$  are vertical. Therefore  $\angle XPY = \angle X'PY'$ .

Applying Theorem 8.2 we get

$$2 \cdot \angle Y'X'P \equiv 2 \cdot \angle PYX.$$

According to Theorem 3.11,  $\angle Y'X'P$  and  $\angle PYX$  have the same sign; therefore

$$\angle Y'X'P \equiv \angle PYX.$$

It remains to apply the AA similarity condition.

(c) Apply (b) assuming  $[YY']$  is the diameter of  $\Gamma$ .

**Exercise 8.4.** Apply Exercise 8.3(b) three times.

**Exercise 8.5.** Let  $X$  any  $Y$  be the foot points of altitudes from  $A$  and  $B$ . Denote by  $O$  the circumcenter.

By angle-angle condition,  $\triangle AXC \sim \triangle BYC$ . Thus

$$\angle A'OC \equiv 2 \cdot \angle A'AC \equiv -2 \cdot \angle B'BC \equiv -\angle B'OC.$$

By SAS,  $\triangle A'OC \cong \triangle B'OC$ . Therefore  $A'C = B'C$ .

**Exercise 8.7.** Apply Theorem 8.6 twice for quadrilaterals  $ABYX$  and  $ABY'X'$  and use transversal property (6.15).

**Exercise 8.8.** Note that  $\angle AA'B = \pm \frac{\pi}{2}$  and  $\angle AB'B = \pm \frac{\pi}{2}$ . Then apply Theorem 8.6 to quadrilateral  $AA'BB'$ .

If  $O$  is the center of the circle then

$$\angle AOB \equiv 2 \cdot \angle AA'B \equiv \pi.$$

That is,  $O$  is the midpoint of  $[AB]$ .

**Exercise 8.11.** Note that by Theorem 6.11,

$$\angle ABC + \angle BCA + \angle CAB \equiv \pi.$$

Then apply Proposition 8.10 twice.

**Exercise 8.12.** If  $C \in (AX)$  then the arc is formed by  $[AC]$  or two half-lines of  $(AX)$  with vertices at  $A$  and  $C$ .

Assume  $C \notin (AX)$ . Let  $\ell$  be the line through  $A$  perpendicular to  $[AX]$  and  $m$  be the perpendicular bisector of  $[AC]$ . Note that  $\ell \nparallel m$ ; set  $O = \ell \cap m$ . Note that the circle with center  $O$  passing through  $A$  is also passing through  $C$  and tangent to  $(AX)$ . Note that one of the two arcs with endpoints  $A$  and  $C$  is tangent to  $[AX]$ .

The uniqueness follows from the propositions 8.9 and 8.10.

## Chapter 9

**Exercise 9.1.** By Lemma 5.16,  $\angle OTP'$  is right. Therefore  $\triangle OPT \sim \triangle OTP'$  and in particular

$$OP \cdot OP' = OT^2.$$

Hence the result follows.

**Exercise 9.3.** Suppose  $O$  is the center of the circle  $\Gamma$  and  $X, Y \in \Gamma$ ; in particular,  $OX = OY$ .

Note that each  $X$  and  $Y$  is self-inverse. By Lemma 9.2,

$$\triangle OPX \sim \triangle OXP' \quad \text{and} \quad \triangle OPY \sim \triangle OYP'.$$

Therefore

$$\frac{PX}{P'X} = \frac{OP}{OX} = \frac{OP}{OY} = \frac{PY}{P'Y}.$$

Hence the problem follows.

**Exercise 9.4.** By Lemma 9.2,

$$\begin{aligned} \angle IA'B' &\equiv -\angle IBA, & \angle IB'A' &\equiv -\angle IAB, \\ \angle IB'C' &\equiv -\angle ICB, & \angle IC'B' &\equiv -\angle IBC, \\ \angle IC'A' &\equiv -\angle IAC, & \angle IA'C' &\equiv -\angle ICA. \end{aligned}$$

It remains to apply the theorem on the sum of angles of triangle (Theorem 6.11) to show that  $(A'I) \perp (B'C')$ ,  $(B'I) \perp (C'A')$  and  $(C'I) \perp (B'A')$ .

**Exercise 9.7.** Show first that for any  $r > 0$  and any real numbers  $x, y$  distinct from 0, we have

$$\frac{r}{(x+y)/2} \neq \left( \frac{r}{x} + \frac{r}{y} \right) / 2.$$

Note that for appropriately chosen isometry  $(OO') \rightarrow \mathbb{R}$ , left hand side is the coordinate of the inversion of the center of  $\Gamma$  and right hand side is the coordinate of the center of inversion of  $\Gamma$ , assuming  $x$  and  $y$  are coordinates of the intersections  $(OO') \cap \Gamma$ .

**Exercise 9.8.** Apply an inversion in a circle with the center at the only point of intersection of the circles; then use Theorem 9.9.

**Exercise 9.15.** Let  $P_1$  and  $P_2$  be the inversions of  $P$  in  $\Omega_1$  and  $\Omega_2$ . Note that the points  $P, P_1$  and  $P_2$  are mutually distinct.

According to Theorem 7.1, there is unique cline  $\Gamma$  which pass through  $P, P_1$  and  $P_2$ .

By Corollary 9.13,  $\Gamma \perp \Omega_1$  and  $\Gamma \perp \Omega_2$ .

On the other hand if  $\Gamma' \ni P$  and  $\Gamma' \perp \Omega_1, \Gamma' \perp \Omega_2$  then by Theorem 9.11 we have  $\Gamma' \ni P_1, P_2$ . That is,  $\Gamma' = \Gamma$ .

**Exercise 9.16.** Apply Theorem 9.5(b), Exercise 6.16 and Theorem 8.2.

**Exercise 9.17.** Denote by  $T$  the point of intersection of  $\Omega_1$  and  $\Omega_2$ . Let  $P$  be the foot point of  $T$  on  $(O_1O_2)$ . Show first that

$$\triangle O_1PT \sim \triangle O_1TO_2 \sim \triangle TPO_2.$$

Conclude that  $P$  is the point of interest.

**Exercise 9.18.** Since  $\Gamma \perp \Omega_1$  and  $\Gamma \perp \Omega_2$ , Corollary 9.12 implies that the circles  $\Omega_1$  and  $\Omega_2$  are inverted in  $\Gamma$  to themselves.

Therefore the points  $A$  and  $B$  are inversions of each other.

Since  $\Omega_3 \ni A, B$ , Corollary 9.13 implies that  $\Omega_3 \perp \Gamma$ .

## Chapter 10

**Exercise 10.2.** Denote by  $D$  the midpoint of  $[BC]$ . Assume  $(AD)$  is the bisector of the angle at  $A$ .

Mark point  $A' \in [AD]$  which is distinct from  $A$  and  $AD = A'D$ . Note that  $\triangle CAD \cong \triangle BA'D$ . In particular  $\angle BAA' = \angle AA'B$ ; it remains to apply Theorem 4.2 for  $\triangle ABA'$ .

**Exercise 10.4.** Arguing by contradiction, assume

$$\angle ABC + \angle BCD \equiv \pi,$$

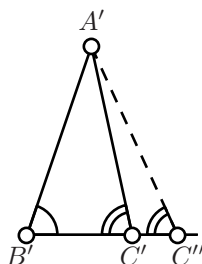
but  $(AB) \nparallel (CD)$ . Let  $Z$  be the point of intersection of  $(AB)$  and  $(CD)$ .

Note that

$$\angle ABC \equiv \angle ZBC \quad \text{or} \quad \pi + \angle ZBC$$

and

$$\angle BCD \equiv \angle BCZ \quad \text{or} \quad \pi + \angle BCZ.$$



Apply Proposition 10.3 to  $\triangle ZBC$  and try to arrive to a contradiction.

**Exercise 10.5.** Let  $C'' \in [B'C')$  be the point such that  $B'C'' = BC$ .

Note that by SAS,  $\triangle ABC \cong \triangle A'B'C''$ . Conclude that  $\angle B'C'A' \equiv \angle B'C''A'$ .

Therefore it is sufficient to show that  $C'' = C'$ . If  $C' \neq C''$  apply Proposition 10.3 to  $\triangle A'C'C''$  and try to arrive to a contradiction.

(The same proof is given in [1, Book I, Proposition 26].)

**Exercise 10.6.** Use Exercise 5.4 and Proposition 10.3.

**Exercise 10.9.** Note that

$$|\angle ADC| + |\angle CDB| = \pi.$$

Then apply the definition of defect.

**Exercise 10.10.** The statement is evident if  $A$ ,  $B$ ,  $C$  and  $D$  lie on one line.

In the remaining case, denote by  $O$  the center of the circumscribed circle. Apply theorem about isosceles triangle (4.2) to the triangles  $\triangle AOB$ ,  $\triangle BOC$ ,  $\triangle COD$ ,  $\triangle DOA$ .

(Note that in the Euclidean plane the statement follows from Theorem 8.6 and Exercise 6.16, but one can not use these statements in the absolute plane.)

## Chapter 12

**Exercise 12.3.** Note that the angle of parallelism of  $B$  to  $(CD)_h$  is bigger than  $\frac{\pi}{4}$ , and it converges to  $\frac{\pi}{4}$  as  $CD_h \rightarrow \infty$ .

Applying Proposition 12.1, we get

$$BC_h < \frac{1}{2} \cdot \ln \frac{1 + \frac{1}{\sqrt{2}}}{1 - \frac{1}{\sqrt{2}}} = \ln \left( 1 + \sqrt{2} \right).$$

The right hand side is the limit of  $BC_h$  if  $CD_h \rightarrow \infty$ . Therefore  $\ln(1 + \sqrt{2})$  is the optimal upper bound.

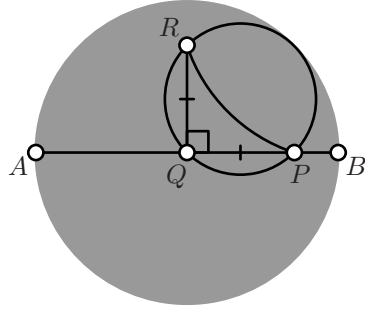
**Exercise 12.4.** Note that the center of the circle containing  $m$  lies on at the intersection of lines tangent to absolute at  $A$  and  $B$ .

**Exercise 12.5.** Consider hyperbolic triangle  $\triangle_h PQR$  with right angle at  $Q$ , such that  $PQ = QR$  and the vertices  $P$ ,  $Q$  and  $R$  lie on a horocycle.

Without loss of generality, we may assume that  $Q$  is the center of absolute. In this case  $\angle_h PQR = \angle PQR = \pm \frac{\pi}{2}$ .

The rest of proof should be easy to guess from the picture. The answer is

$$\begin{aligned} QP_h &= \ln \frac{AP}{PQ} \\ &= \ln \frac{1 + \frac{1}{\sqrt{2}}}{1 - \frac{1}{\sqrt{2}}} = \\ &= 2 \cdot \ln(1 + \sqrt{2}). \end{aligned}$$



**Exercise 12.10.** Let us apply Proposition 12.9.

$$\begin{aligned} \text{circum}_h(r+1) &= \pi \cdot (e^{r+1} - e^{-r-1}) = \\ &= \pi \cdot e \cdot (e^r - e^{-r-2}) > \\ &> \pi \cdot e \cdot (e^r - e^{-r}) = \\ &= e \cdot \text{circum}_h(r) \geq \\ &\geq 2 \cdot \text{circum}_h(r). \end{aligned}$$

## Chapter 14

**Exercise 14.1.** Let  $N$ ,  $O$ ,  $S$ ,  $P$ ,  $P'$  and  $\hat{P}$  be as on the diagram on page 123.

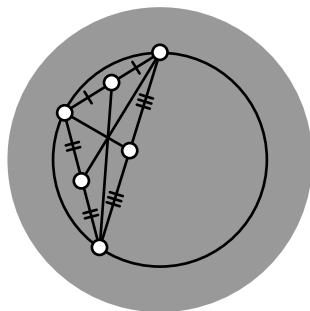
Notice that  $\triangle NOP \sim \triangle NP'S \sim \triangle P'\hat{P}P$  and  $2 \cdot NO = NS$ . It remains to do algebraic manipulations.

**Exercise 14.3.** Consider the bijection  $P \mapsto \hat{P}$  of the h-plane with absolute  $\Omega$ .

Note that  $\hat{P} \in [A_i B_i]$  if and only if  $P \in \Gamma_i$ .

**Exercise 14.4.** The observation follows since the reflection in the perpendicular bisector of  $[PQ]$  is a motion of Euclidean plane and h-plane at the same time.

Without loss of generality we may assume that the center of circumcircle coincides with the center of absolute. In this case the h-median of the triangle coincide with the Euclidean medians. It remains to apply Theorem 7.5

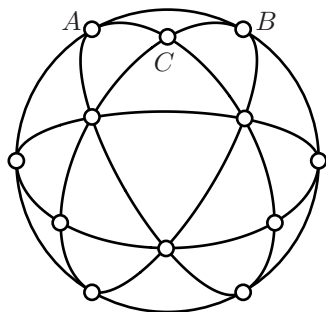


## Chapter 13

**Exercise 13.2.** Applying Pythagorean theorem, we get

$$\cos AB_s = \cos AC_s \cdot \cos BC_s = \frac{1}{2}.$$

Therefore  $AB_s = \frac{\pi}{3}$ .



To see this without Pythagorean theorem, look at the tessellation of the sphere on the picture; it is made from 24 copies of  $\triangle_s ABC$  and yet 8 equilateral triangles. From the symmetry of this tessellation, it follows that  $[AB]_s$  occupies  $\frac{1}{6}$  of the equator.

**Exercise 13.5.** Note that points on  $\Omega$  do not move. Moreover, the points inside  $\Omega$  are mapped outside of  $\Omega$  and the other way around.

Further note that this maps sends circles to circles; moreover the perpendicular circles are mapped to perpendicular circles. In particular the circle perpendicular to  $\Omega$  are mapped to itself.

Consider arbitrary point  $P \notin \Omega$ . Denote by  $P'$  the inversion of  $P$  in  $\Omega$ . Choose two distinct circles which pass through  $P$  and  $P'$ . According to Corollary 9.13,  $\Gamma_1 \perp \Omega$  and  $\Gamma_2 \perp \Omega$ .

Therefore the inversion in  $\Omega$  sends  $\Gamma_1$  to itself and the same holds for  $\Gamma_2$ .

The image of  $P$  has to lie on  $\Gamma_1$  and  $\Gamma_2$ . Since the image has to be distinct from  $P$ , we get that it has to be  $P'$ .



## Chapter 15

**Exercise 15.1.** Denote by  $z$ ,  $v$  and  $w$  the complex coordinates of  $Z$ ,  $V$  and  $W$  correspondingly. Then

$$\begin{aligned}\angle ZVW + \angle VWZ + \angle WZV &\equiv \arg \frac{w-v}{z-v} + \arg \frac{z-w}{v-w} + \arg \frac{v-z}{w-z} \equiv \\ &\equiv \arg \frac{(w-v) \cdot (z-w) \cdot (v-z)}{(z-v) \cdot (v-w) \cdot (w-z)} \equiv \\ &\equiv \arg(-1) \equiv \\ &\equiv \pi\end{aligned}$$

**Exercise 15.2.** Note that

$$\begin{aligned}\angle EOZ &= \angle WOZ = \arg v \\ \frac{OW}{OZ} &= \frac{OZ}{OW} = |v|.\end{aligned}$$

**Exercise 15.8.** Find the inverse of each elementary transformation and use Proposition 15.6.

**Exercise 15.9.** The Möbius transformation

$$f(z) = \frac{(z_1 - z_\infty) \cdot (z - z_0)}{(z_1 - z_0) \cdot (z - z_\infty)}$$

meets the conditions.

To show uniqueness, assume there is an other Möbius transformation  $g(z)$  which meets the conditions. Then the composition  $h = g \circ f^{-1}$  is a Möbius transformation; set

$$h(z) = \frac{a \cdot z + b}{c \cdot z + d}.$$

Note that  $h(\infty) = \infty$ ; therefore  $c = 0$ . Further  $h(0) = 0$  implies  $b = 0$ . Finally, since  $h(1) = 1$  we get  $\frac{a}{d} = 1$ . Therefore  $h$  is the *identity*; that is,  $h(z) = z$  for any  $z$ . It follows that  $g = f$ .

**Exercise 15.11.** Check the statement for each elementary transformation. Then apply Proposition 15.6.

# Index

- $(u, v; w, z)$ , 135
- $\cong$ , 19
- $\infty$ , 73
- $\parallel$ , 49
- $\perp$ , 39
- $\sim$ , 50
- $d_1$ , 13
- $d_2$ , 13
- $d_\infty$ , 13
- absolute, 94
- absolute plane, 83
- absolute value, 130
- acute
  - acute angle, 39
  - acute triangle, 52
- altitude, 57
- angle, 16
  - acute angle, 39
  - angle of parallelism, 103
  - negative angle, 29
  - obtuse angle, 39
  - positive angle, 29
  - right angle, 39
  - straight angle, 25
  - vertical angles, 26
- angle measure, 23
  - hyperbolic angle measure, 95
- angle-side-angle congruence condition, 35
- arc, 69
- area, 90
- ASA congruence condition, 35
- asymptotically parallel lines, 103
- base of isosceles triangle, 36
- between, 25
- bijection, 14
- bisector, 43
  - external bisector, 43
- center, 45
- centroid, 58
- chord, 45
- circle, 45, 46
- circle arc, 68
- cline, 74
- complex conjugate, 130
- conformal factor, 109
- congruent triangles, 19
- cross-ratio, 72
  - complex cross-ratio, 133, 135
- curvature, 90
- defect of triangle, 87
- diagonal
  - diagonals of quadrilateral, 55
- diameter, 45
- direct motio, 42
- discrete metric, 13
- distance, 13
- distance-preserving map, 14
- elementary transformation, 133
- endpoint, 69
- equidistant, 106

- equilateral triangle, 36
- equivalence relation, 51
- Euclidean metric, 13
- Euclidean plane, 23
- Euclidean space, 115
- Euler's formula, 131
  
- foot point, 40
  
- geometric construction, 46
- great circle, 116
  
- h-angle measure, 95
- h-circle, 97
- h-half-line, 94
- h-line, 94
- h-plane, 94
- h-point, 94
- h-radius, 97
- h-segment, 94
- half-plane, 31
- horocycle, 107
- hyperbolic angle measure, 95
- hyperbolic cosine, 125
- hyperbolic plane, 94
- hypotenuse, 52
  
- ideal point, 94
- imaginary complex number, 130
- imaginary line, 130
- incenter, 60
- incircle, 60
- indirect motion, 42
- inradius, 60
- inscribed triangle, 66
- intersecting lines, 49
- inverse, 14
- inversion, 71
  - center of inversion, 71, 117
  - circle of inversion, 71
  - inversion in a sphere, 117
  - sphere of inversion, 117
- inversive plane, 74
- inversive space, 117
  
- isometry, 14
- isosceles triangle, 36
  
- Klein model, 124
  
- leg, 52
- line, 15
  
- Möbius transformation, 133
  - elementary transformation, 133
- Manhattan metric, 13
- maximum metric, 13
- metric, 12
- metric space, 13
- motion, 14
  
- neutral plane, 83
  
- obtuse
  - obtuse angle, 39
- orthic triangle, 61
- orthocenter, 58
  
- parallel lines, 49
  - ultra parallel lines, 103
- parallel translation, 133
- parallelogram, 55
- perpendicular, 39
- perpendicular bisector, 39
- perpendicular circles, 76
- pint at infinity, 73
- plan
  - hyperbolic plane, 94
- plane
  - absolute plane, 83
  - Euclidean plane, 23
  - h-plane, 94
  - inversive plane, 74
  - neutral plane, 83
  - plane in the space, 115
- Poincaré disk model, 93
- point, 13
  - ideal point, 94
- polar coordinates, 132

- quadrilateral, 55
  - inscribed quadrilateral, 67
  - nondegenerate quadrilateral, 55
- radius, 45
- real complex number, 130
- real line, 13, 130
- reflection, 41
- rotational homothety, 134
- SAA condition, 85
- SAS condition, 35
- secant line, 45
- side
  - side of quadrilateral, 55
  - side of the triangle, 32
- side-angle-angle congruence condition, 85
- side-angle-side condition, 35
- side-side-side congruence condition, 37
- similar triangles, 50
- sphere, 116
- spherical distance, 116
- stereographic projection, 119
- tangent circles, 45
- tangent half-line, 69
- tangent line, 45
- transversal, 54
- triangle, 19
  - congruent triangles, 19
  - degenerate triangle, 26
  - ideal triangle, 105
  - orthic triangle, 61
  - right triangle, 52
  - similar triangles, 50
- unit complex number, 130
- vertex of the angle, 16
- vertical angles, 26

# Used resources

- [1] *Euclid's Elements*, a web version by David Joyce available at [aleph0.clarku.edu/~djoyce/java/elements/toc.html](http://aleph0.clarku.edu/~djoyce/java/elements/toc.html)
- [2] Eugenio Beltrami, *Teoria fondamentale degli spazii di curvatura costante*, Annali. di Mat., ser II, 2 (1868), 232–255
- [3] Birkhoff, George David, A Set of postulates for plane geometry, based on scale and protractors, *Annals of Mathematics* 33 (1932), 329–345.
- [4] Marvin J. Greenberg, *Euclidean and Non-Euclidean Geometries: Development and History*, 4th ed., New York: W. H. Freeman, 2007.
- [5] Lambert, Johann Heinrich, *Theorie der Parallellinien*, F. Engel, P. Stäckel (Eds.) (1786) Leipzig.
- [6] Legendre, Adrien-Marie, *Eléments de géométrie*, 1794.
- [7] Лобачевский, Никлай Иванович, О началах геометрии, *Казанский вестник*, вып. 25–28 (1829–1830 гг.).
- [8] Moise, Edwin. *Elementary Geometry From An Advanced Standpoint*, 3rd ed. Boston: Addison-Wesley. 1990
- [9] Saccheri, Giovanni Girolamo, *Euclides ab omni nævo vindicatus*, 1733
- [10] Шарыгин, Игорь Фёдорович, *Геометрия 7–9*, М.: Дрофа, 1997.
- [11] Kiselev, A. P., *Kiselev's Geometry. Book I. Planimetry*, Adapted from Russian by Alexander Givental.