

Can Separators Improve Chain-of-Thought Prompting?

Yoonjeong Park^{1*} Hyunjin Kim^{1*}
Chanyeol Choi² Junseong Kim^{2†} Jy-yong Sohn^{1,2†}

Yonsei University¹ Linq²
{dbw2140, hjhyunjinkim, jysohn1108}@yonsei.ac.kr
{jacob.choi, junseong.kim}@getlinq.com

Abstract

Chain-of-thought (CoT) prompting is a simple and effective method for improving the reasoning capabilities of Large Language Models (LLMs). The basic idea of CoT is to let LLMs break down their thought processes step-by-step by putting exemplars in the input prompt. However, the densely structured prompt exemplars of CoT may cause the cognitive overload of LLMs. Inspired by human cognition, we introduce CoT-SEP, a novel method that strategically employs separators at the end of each exemplar in CoT prompting. These separators are designed to help the LLMs understand their thought processes better while reasoning. It turns out that CoT-SEP significantly improves the LLMs’ performances on complex reasoning tasks (e.g., GSM8K, AQuA, CSQA), compared with the vanilla CoT, which does not use separators. We also study the effects of the type and the location of separators tested on multiple LLMs, including GPT-3.5-Turbo, GPT-4, and LLaMA-2 7B. Interestingly, the type/location of separators should be chosen *appropriately* to boost the reasoning capability of CoT.

1 Introduction

The use of large language models (LLMs) has significantly transformed our methods of processing information, enhancing performance across various fields. A key development in this area is Chain-of-Thought (CoT) prompting (Wei et al., 2022b), which enables LLMs to process complex reasoning. By outlining thought processes in a step-by-step manner, CoT prompting enables LLMs to demonstrate more sophisticated reasoning. By reasoning step-by-step, similar to the human cognition process, LLMs are able to tackle complicated problems with enhanced precision.

A noteworthy observation in the current implementation of CoT prompting is the densely structured few-shot exemplars within a single prompt (see the left column of Fig. 1). While this approach gives a broad context to the LLMs, it may also cause a cognitive overload, ultimately limiting the LLM’s capability to process and analyze information efficiently.

In human cognition, strategic separations and breaks in text, such as a linebreak, play an essential role in human comprehension and enhancing reasoning. Inspired by this observation, we present CoT-SEP, a novel and simple approach that strategically inserts separators at the optimal positions. Our method puts separators at the position where the LLM can segment information into manageable portions, therefore enabling better comprehension by the LLM. Our approach led to a significant improvement in the performance of LLMs over CoT prompting, underscoring the importance of structured formatting for optimizing LLM outputs. We conduct evaluations on multiple separators on arithmetic reasoning benchmarks and a commonsense reasoning benchmark, revealing that inserting separators at an adequate location and creating a pattern for LLMs to decipher outperforms the original CoT prompting technique.

Various prompting methods are proposed to improve the performance of CoT and its variants (Ling et al., 2023; Long, 2023; Besta et al., 2023; Weng et al., 2023b; Zhang et al., 2023), which introduce additional modules for iterative refinement and verification of intermediate thoughts. Another line of works proposes refining input questions (Xi et al., 2023; Deng et al., 2023) to let LLMs better interpret the target reasoning tasks. However, these existing methods require multiple iterations through LLMs, leading to increased expenses and extended timeframes. Additionally, their task-specific designs make practical applications challenging. Unlike these existing methods, CoT-SEP

* Equal Contribution. Work done while Yoonjeong and Hyunjin were interning at Linq.

† Corresponding Authors.

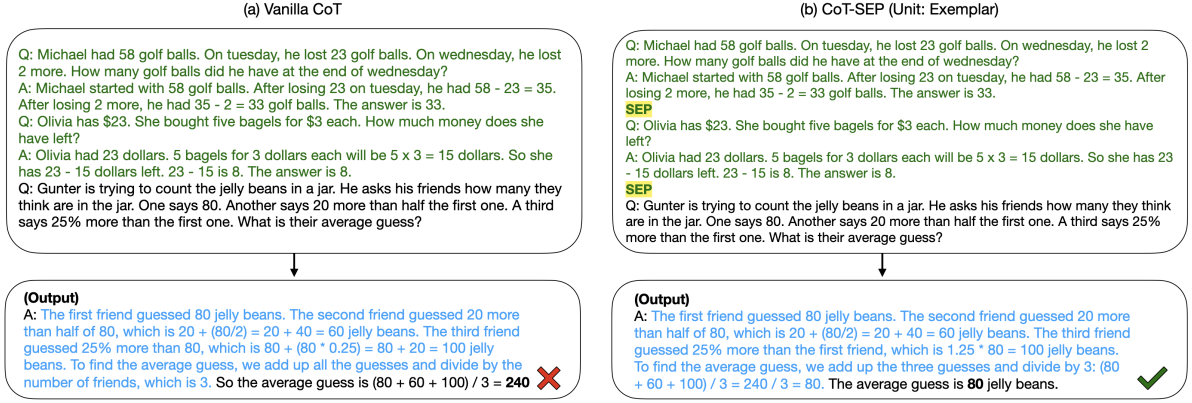


Figure 1: Comparison of the Vanilla CoT (Wei et al., 2022b) and our CoT-SEP for a test data sampled from the GSM8K benchmark (Cobbe et al., 2021), where two exemplars (colored as green texts) are provided in the input prompt. For CoT-SEP, a separator (denoted as SEP, usually chosen as ‘\n’ or ‘
’) is added at the end of each exemplar for better readability. Interestingly, adding the separators is enough to fix the issue of CoT.

is straightforward and effective in improving CoT prompting, by simply introducing a separator (SEP) between exemplars.

Our empirical results on CoT-SEP indicate that using separators between exemplars in CoT prompting significantly aids the reasoning process of LLMs. For example, adding separators increases the accuracy by 2.8% on AQuA dataset and by 1.3% on GSM8K dataset, when tested on GPT-3.5-Turbo model. Interestingly, we discover that the proper placement of separators in prompts considerably impacts the LLM’s reasoning capabilities, potentially setting a new standard in the design of prompts for LLMs.

2 Related Work

Large Language Model (LLM) Reasoning Complex tasks involving logical thinking, particularly in solving mathematical problems, are commonly challenging for natural language processing (NLP) models. (Cobbe et al., 2021; Koncel-Kedziorski et al., 2016; Patel et al., 2021). Recent progress in the development of LLMs (Touvron et al., 2023; Zhang et al., 2022; Chowdhery et al., 2022; Wei et al., 2022a; Brown et al., 2020) demonstrates remarkable capabilities in complex reasoning tasks. These works suggest that instead of directly generating final answers, LLMs perform better on reasoning tasks when guided through a step-by-step process. This approach involves using examples in few-shot settings and employing effective prompting strategies, such as the Chain-of-Thought (CoT) (Wei et al., 2023) prompting. To enhance the step-by-step reasoning process further, recent studies have employed external modules (Bostrom et al., 2022; Creswell and Shanahan,

2022; Tafjord et al., 2021; Lyu et al., 2023; Chen et al., 2023) to verify and refine intermediate thoughts. Similar to these previous work, our work uses the step-by-step reasoning process and focuses on aiding the process for enhanced reasoning.

In-Context Learning Large Language Models (LLMs) have demonstrated impressive abilities in few-shot learning (Lu et al., 2023; Qiao et al., 2023). In particular, by incorporating a few exemplars into the prompts, LLMs can show exceptional performance without the need for finetuning on a training dataset (Weng et al., 2023a; Wang et al., 2023a), and such LLMs’ ability is termed as in-context learning (ICL). However, these approaches face challenges when encountering tasks that demand complex reasoning. This led to the emergence of CoT (Wei et al., 2022b), which is an approach that generates a series of reasoning steps to arrive at the final answer and is highly effective in solving difficult tasks. Recent work has also highlighted the in-context abilities of LLMs when combined with CoT prompting (Wang et al., 2023b; Ling et al., 2023). Building upon in-context learning, we propose the first work using separators in exemplars to enhance complex reasoning.

3 CoT-SEP

Consider one’s ability to process complex information. It is common to break down the information into small parts for ease of processing, and using separators can significantly enhance one’s comprehension and readability by providing visual breaks. Inspired by this observation, we introduce CoT-SEP, a method that places separators at the

Method	Arithmetic Reasoning		Commonsense Reasoning
	GSM8K	AQuA	CSQA
Vanilla CoT (Wei et al., 2022b)	70.4 \pm 0.17	46.5 \pm 0.82	76.5 \pm 0.14
CoT-SEP (TripleSkip, i.e., <code>\n\n\n</code>)	71.7 \pm 0.26	49.3 \pm 0.19	77.4 \pm 0.16
CoT-SEP (TripleHash, i.e., <code>###</code>)	70.6 \pm 0.09	47.1 \pm 0.33	76.9 \pm 0.08
CoT-SEP (TripleStar, i.e., <code>***</code>)	70.9 \pm 0.14	46.3 \pm 0.78	76.7 \pm 0.24
CoT-SEP (<code>
</code>)	71.6 \pm 0.29	46.6 \pm 1.10	76.9 \pm 0.08
CoT-SEP (<code>
</code>)	70.0 \pm 0.43	45.8 \pm 0.94	76.5 \pm 0.24
Heterogeneous CoT-SEP	71.3 \pm 0.42	47.6 \pm 0.52	76.9 \pm 0.14

Table 1: Accuracies (%) of vanilla CoT, CoT-SEP, and Heterogeneous CoT-SEP, test on GPT-3.5-Turbo. For each task, CoT-SEP outperforms vanilla CoT. Here, the type of separator is written in the parenthesis, and Heterogeneous CoT-SEP uses different separators for different exemplars.

end of each prompt exemplar. Similar to Chain-of-Thought prompting, CoT-SEP generates a logical sequence of intermediate reasoning steps leading to the final answer. In contrast, as shown on the right of Fig. 1, when we include examples of chain-of-thought sequences into the prompt exemplars, we place separators at the end of each exemplar, which enables the LLMs to process a large amount of information in that manner.

4 Experiments

4.1 Experimental Settings

Our experiments are heavily based on the Vanilla CoT prompting (Wei et al., 2022b), and we use OpenAI’s gpt-3.5-turbo-0613¹ for the results in Table 1 and 3. For the results in Table 2, we use Meta’s llama-2-7b², OpenAI’s gpt-4-0613¹ and gpt-4-turbo, specifically the version of gpt-4-0125-preview¹. For our experiments, we use benchmarks where CoT prompting leads to substantial improvement over standard prompting. To be specific, we test on two challenging mathematical reasoning task benchmarks (GSM8K (Cobbe et al., 2021) with 1319 samples and AQuA (Ling et al., 2017) with 254 samples) and one commonsense reasoning benchmark (CSQA (Talmor et al., 2019) with 1221 samples). We follow the prompts designed by Wei et al. (2022b) and added separators to test CoT-SEP. More details regarding the exemplars used in our experiments are included in Sec. B in Appendix. We report the statistics of accuracy values obtained by running the experiments for 3 trials.

4.2 Results

Table 1 compares the performances of vanilla CoT and CoT-SEP tested on three reasoning tasks, for

GPT-3.5-Turbo. One can confirm that LLMs attain higher performances with the inclusion of separators (specifically, `\n\n\n`) at the end of each prompt exemplar. This validates that the insertion of separators after each exemplar significantly improves LLM reasoning.

Now, the follow-up question is, which separator is effective in improving reasoning? We test 5 different separators: (1) TripleSkip (`\n\n\n`) which uses three newline separators, (2) TripleHash (`###`), (3) TripleStar (`***`), and two versions of HTML line break tags: (4) `
` and (5) `
`. Table 1 shows that although the use of various separators in CoT-SEP improves LLM reasoning compared to the vanilla CoT, TripleSkip is the most effective separator for enhancing LLM reasoning for the tested datasets, on GPT-3.5-Turbo. It is true that some separators are hurting the accuracy (e.g., inserting `
` separator after exemplars is not desirable for GSM8K and AQuA datasets), which implies that it is necessary to appropriately choose separators.

In a situation when there is uncertainty about which separator is the appropriate choice in a specific task, one might wonder which separator should be chosen. To answer this question, we test with a variant of our method, dubbed as Heterogeneous CoT-SEP, which uses different separators for different exemplars within the prompt. Recall that we consider 5 different types of separators, TripleSkip, TripleHash, TripleStar, `
` and `
`. These types of separators are placed in turn after distinct exemplars. See Table 10 for an example prompt for Heterogeneous CoT-SEP. Our result in Table 1 shows that Heterogeneous CoT-SEP outperforms vanilla CoT, implying that even in the absence of a clear choice for the best separator, CoT-SEP improves LLM reasoning compared to vanilla CoT. Thus, Heterogeneous CoT-SEP can be used in practical scenarios where we do not have

¹<https://platform.openai.com/docs/models>

²<https://llama.meta.com/llama2>

Method	Llama2-7b			GPT-4-turbo			GPT-4		
	GSM8K	AQuA	CSQA	GSM8K	AQuA	CSQA	GSM8K	AQuA	CSQA
Vanilla CoT	14.7	19.3	62.2	63.0 \pm 0.95	31.4 \pm 1.32	86.4 \pm 0.31	89.4 \pm 0.19	71.1 \pm 0.78	86.4 \pm 0.14
CoT-SEP (TripleSkip)	13.4	19.3	62.4	68.1 \pm 0.45	34.0 \pm 0.65	86.0 \pm 0.65	88.6 \pm 0.29	71.5 \pm 0.82	86.5 \pm 0.24
CoT-SEP (TripleHash)	15.1	19.3	62.7	67.5 \pm 0.19	34.0 \pm 1.90	86.1 \pm 0.22	89.6 \pm 0.12	69.6 \pm 1.47	86.3 \pm 0.22

Table 2: Comparison of Vanilla CoT and CoT-SEP on various LLMs including Llama2-7b, GPT-4-turbo and GPT-4. Here, the number of maximum generated tokens is set to 128. In most cases, CoT-SEP outperforms vanilla CoT.

any prior knowledge on the optimal separator for our new target task.

We also test CoT-SEP on other models including Llama2-7b, GPT-4-turbo and GPT-4, in Table 2. It turns out that compared with vanilla CoT, adding separators (either TripleSkip or TripleHash) increases the accuracy on most cases. For example, in GPT-4-turbo model, CoT-SEP (TripleSkip) enjoys 5.1% and 2.6% gap for GSM8K and AQuA datasets, respectively.

We also explore whether the location/number of separators used in CoT-SEP contributes to enhancing CoT prompting. To check the effect of the location of separators, we experiment CoT-SEP with two versions, CoT-SEP (Unit: Exemplar) and CoT-SEP (Unit: Sentence), as shown in Fig. 2. The first version adds the separator at the end of each exemplar, while the second version adds the separator between sentences within each exemplar’s CoT. Table 3 shows that CoT-SEP (Unit: Exem-

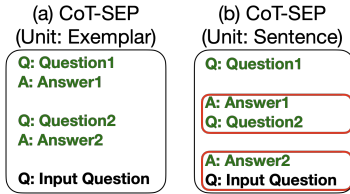


Figure 2: The prompts used for CoT-SEP (Unit: Exemplar) and CoT-SEP (Unit: Sentence). The former one is more interpretable, which provides a better performance in Table 3. See Fig. 3 for a detailed figure with exemplars.

plar) outperforms CoT-SEP (Unit: Sentence). This can be explained by the visualization in Fig. 2: in the prompt of CoT-SEP (Unit: Sentence), the next question (say Question2) and the answer of the previous question (say Answer1) appear as a set, making it difficult for not only LLMs but also humans to understand, which results in the performance worse than CoT-SEP and even vanilla CoT. This shows that the placement of separators is crucial. Table 3 also shows the effect of the number of separators. The result indicates that our CoT-SEP (TripleSkip) method, with its specific number of three newline separators, achieves the

best performance in GSM8K and AQuA benchmarks compared to the reduced number of separators. CoT-SEP (TripleSkip) is also on par with the highest performance for the CSQA benchmark.

Method	Arithmetic Reasoning		Commonsense Reasoning
	GSM8K	AQuA	CSQA
Vanilla CoT	70.4 \pm 0.17	46.5 \pm 0.82	76.5 \pm 0.14
CoT-SEP (Unit : Exemplar)			
\n	71.0 \pm 0.29	46.0 \pm 0.68	77.5 \pm 0.12
\n\n	70.5 \pm 0.22	47.6 \pm 0.83	77.0 \pm 0.12
\n\n\n (TripleSkip)	71.7 \pm 0.26	49.3 \pm 0.19	77.4 \pm 0.16
CoT-SEP (Unit : Sentence)			
\n	69.9 \pm 0.26	44.5 \pm 0.33	75.9 \pm 0.12
\n\n	70.2 \pm 0.22	44.2 \pm 0.19	74.5 \pm 0.12
\n\n\n	70.8 \pm 0.17	45.8 \pm 1.00	75.2 \pm 0.22

Table 3: The effect of location/number of separators in CoT-SEP for GPT-3.5-Turbo model, when the separator is ‘\n’. We consider two scenarios having different *units* of applying separators: the first scenario adds separators at the end of each exemplar, while the second one adds separators between sentences within each exemplar’s CoT. Note that adding the separator 3 times in the first scenario reduces to CoT-SEP(TripleSkip) in Table 1. Adding separators after each exemplars has up to 3.5% accuracy gain, compared with adding separators between sentences. This result is supported by our visualization in Fig. 2.

5 Conclusion

In this paper, we propose CoT-SEP, a novel method placing separators in a structured format to improve Chain-of-Thought (CoT) prompting popular in large language models. Within this framework, we place separators at the end of each prompt exemplar for better readability for LLMs. We demonstrate that CoT-SEP effectively improves CoT prompting in various LLMs across highly complex arithmetic and commonsense benchmarks through multiple experiments employing different separators and structural variations. While our experimental results are only focused on the CoT prompting scenarios, our idea of adding separators within the prompt can be easily plugged into various existing prompting techniques, such as Generated Knowledge Prompting (Liu et al., 2021), Self-Consistency (Wang et al., 2023b), Tree of Thought (Yao et al., 2023; Long, 2023) and GraphPrompt

(Liu et al., 2023). We look forward to applying our approach to different prompting strategies in a near future.

6 Limitations

Our research relies on CoT prompting (Wei et al., 2022b), which is based on in-context learning. Given CoT prompting, the model outputs a final answer along with a step-by-step reasoning process, allowing the generated CoT to validate the final answer. This process may cause users to excessively trust LLMs, which is critical, as LLMs may often generate incorrect outputs. This may ultimately lead to automation bias. Therefore, users should be aware of the need not to overly rely on LLMs for solving reasoning tasks or to make all decisions, despite receiving aid from them.

For our CoT-Sep framework, we utilize various separators, TripleSkip (`\n\n\n`), TripleHash (`###`), TripleStar (`***`), `
`, and `
`. However, as shown in our various experiments, the results of the LLMs depend greatly on where and how the separators are located within the prompts. Therefore, it is recommended to cautiously place separators in the precise location stated in our framework, otherwise, the accuracy of the outcome may be diminished.

Due to the limited access to computational resources, we conducted a single trial using Meta’s Llama-2-7b model, while carrying out three trials with OpenAI’s GPT models. For the same reason, we only focus on a few datasets to validate our method. We tested on two arithmetic reasoning datasets, GSM8K (Cobbe et al., 2021) and AQuA (Ling et al., 2017), as they are the most challenging arithmetic reasoning benchmarks available, and had the least impressive performance while using vanilla CoT prompting. For validation on another reasoning task, we selected the CSQA (Talmor et al., 2019) commonsense reasoning benchmark, as it is one of the most difficult commonsense reasoning benchmarks.

Ethics Statement

We foresee no ethical concerns that may arise from the findings of this work.

References

Maciej Besta, Nils Blach, Ales Kubicek, Robert Gerstenberger, Lukas Gianinazzi, Joanna Gajda, Tomasz

Lehmann, Michał Podstawski, Hubert Niewiadomski, Piotr Nyczyk, and Torsten Hoefer. 2023. [Graph of Thoughts: Solving Elaborate Problems with Large Language Models](#).

Kaj Bostrom, Zayne Sprague, Swarat Chaudhuri, and Greg Durrett. 2022. [Natural language deduction through search over statement compositions](#).

Tom B. Brown, Benjamin Mann, Nick Ryder, Melanie Subbiah, Jared Kaplan, Prafulla Dhariwal, Arvind Neelakantan, Pranav Shyam, Girish Sastry, Amanda Askell, Sandhini Agarwal, Ariel Herbert-Voss, Gretchen Krueger, Tom Henighan, Rewon Child, Aditya Ramesh, Daniel M. Ziegler, Jeffrey Wu, Clemens Winter, Christopher Hesse, Mark Chen, Eric Sigler, Mateusz Litwin, Scott Gray, Benjamin Chess, Jack Clark, Christopher Berner, Sam McCandlish, Alec Radford, Ilya Sutskever, and Dario Amodei. 2020. [Language models are few-shot learners](#).

Wenhu Chen, Xueguang Ma, Xinyi Wang, and William W. Cohen. 2023. [Program of thoughts prompting: Disentangling computation from reasoning for numerical reasoning tasks](#).

Aakanksha Chowdhery, Sharan Narang, Jacob Devlin, Maarten Bosma, Gaurav Mishra, Adam Roberts, Paul Barham, Hyung Won Chung, Charles Sutton, Sebastian Gehrmann, Parker Schuh, Kensen Shi, Sasha Tsvyashchenko, Joshua Maynez, Abhishek Rao, Parker Barnes, Yi Tay, Noam Shazeer, Vinodkumar Prabhakaran, Emily Reif, Nan Du, Ben Hutchinson, Reiner Pope, James Bradbury, Jacob Austin, Michael Isard, Guy Gur-Ari, Pengcheng Yin, Toju Duke, Anselm Levskaya, Sanjay Ghemawat, Sunipa Dev, Henryk Michalewski, Xavier Garcia, Vedant Misra, Kevin Robinson, Liam Fedus, Denny Zhou, Daphne Ippolito, David Luan, Hyeontaek Lim, Barret Zoph, Alexander Spiridonov, Ryan Sepassi, David Dohan, Shivani Agrawal, Mark Omernick, Andrew M. Dai, Thanumalayan Sankaranarayanan Pillai, Marie Pellat, Aitor Lewkowycz, Erica Moreira, Rewon Child, Oleksandr Polozov, Katherine Lee, Zongwei Zhou, Xuezhi Wang, Brennan Saeta, Mark Diaz, Orhan Firat, Michele Catasta, Jason Wei, Kathy Meier-Hellstern, Douglas Eck, Jeff Dean, Slav Petrov, and Noah Fiedel. 2022. [Palm: Scaling language modeling with pathways](#).

Karl Cobbe, Vineet Kosaraju, Mohammad Bavarian, Mark Chen, Heewoo Jun, Lukasz Kaiser, Matthias Plappert, Jerry Tworek, Jacob Hilton, Reiichiro Nakano, Christopher Hesse, and John Schulman. 2021. [Training verifiers to solve math word problems](#).

Antonia Creswell and Murray Shanahan. 2022. [Faithful reasoning using large language models](#).

Yihe Deng, Weitong Zhang, Zixiang Chen, and Quanquan Gu. 2023. [Rephrase and respond: Let large language models ask better questions for themselves](#).

Rik Koncel-Kedziorski, Subhro Roy, Aida Amini, Nate Kushman, and Hannaneh Hajishirzi. 2016. [MAWPS](#):

- A math word problem repository. In *Proceedings of the 2016 Conference of the North American Chapter of the Association for Computational Linguistics: Human Language Technologies*, pages 1152–1157, San Diego, California. Association for Computational Linguistics.
- Wang Ling, Dani Yogatama, Chris Dyer, and Phil Blunsom. 2017. Program induction by rationale generation: Learning to solve and explain algebraic word problems. *arXiv preprint arXiv:1705.04146*.
- Zhan Ling, Yunhao Fang, Xuanlin Li, Zhiao Huang, Mingu Lee, Roland Memisevic, and Hao Su. 2023. Deductive verification of chain-of-thought reasoning. *arXiv preprint arXiv:2306.03872*.
- Jiacheng Liu, Alisa Liu, Ximing Lu, Sean Welleck, Peter West, Ronan Le Bras, Yejin Choi, and Hannaneh Hajishirzi. 2021. Generated knowledge prompting for commonsense reasoning. *arXiv preprint arXiv:2110.08387*.
- Zemin Liu, Xingtong Yu, Yuan Fang, and Xinming Zhang. 2023. Graphprompt: Unifying pre-training and downstream tasks for graph neural networks. In *Proceedings of the ACM Web Conference 2023, WWW '23*, page 417–428, New York, NY, USA. Association for Computing Machinery.
- Jieyi Long. 2023. Large language model guided tree-of-thought.
- Jinghui Lu, Dongsheng Zhu, Weidong Han, Rui Zhao, Brian Mac Namee, and Fei Tan. 2023. What makes pre-trained language models better zero-shot learners? In *Proceedings of the 61st Annual Meeting of the Association for Computational Linguistics (Volume 1: Long Papers)*, pages 2288–2303, Toronto, Canada. Association for Computational Linguistics.
- Qing Lyu, Shreya Havaldar, Adam Stein, Li Zhang, Delip Rao, Eric Wong, Marianna Apidianaki, and Chris Callison-Burch. 2023. Faithful chain-of-thought reasoning.
- Arkil Patel, Satwik Bhattamishra, and Navin Goyal. 2021. Are NLP models really able to solve simple math word problems? In *Proceedings of the 2021 Conference of the North American Chapter of the Association for Computational Linguistics: Human Language Technologies*, pages 2080–2094, Online. Association for Computational Linguistics.
- Shuofei Qiao, Yixin Ou, Ningyu Zhang, Xiang Chen, Yunzhi Yao, Shumin Deng, Chuanqi Tan, Fei Huang, and Huajun Chen. 2023. Reasoning with language model prompting: A survey. In *Proceedings of the 61st Annual Meeting of the Association for Computational Linguistics (Volume 1: Long Papers)*, pages 5368–5393, Toronto, Canada. Association for Computational Linguistics.
- Oyvind Tafjord, Bhavana Dalvi Mishra, and Peter Clark. 2021. Proofwriter: Generating implications, proofs, and abductive statements over natural language.
- Alon Talmor, Jonathan Herzig, Nicholas Lourie, and Jonathan Berant. 2019. CommonsenseQA: A question answering challenge targeting commonsense knowledge. In *Proceedings of the 2019 Conference of the North American Chapter of the Association for Computational Linguistics: Human Language Technologies, Volume 1 (Long and Short Papers)*, pages 4149–4158, Minneapolis, Minnesota. Association for Computational Linguistics.
- Hugo Touvron, Thibaut Lavril, Gautier Izacard, Xavier Martinet, Marie-Anne Lachaux, Timothée Lacroix, Baptiste Rozière, Naman Goyal, Eric Hambro, Faisal Azhar, Aurelien Rodriguez, Armand Joulin, Edouard Grave, and Guillaume Lample. 2023. Llama: Open and efficient foundation language models.
- Boshi Wang, Sewon Min, Xiang Deng, Jiaming Shen, You Wu, Luke Zettlemoyer, and Huan Sun. 2023a. Towards understanding chain-of-thought prompting: An empirical study of what matters. In *Proceedings of the 61st Annual Meeting of the Association for Computational Linguistics (Volume 1: Long Papers)*, pages 2717–2739, Toronto, Canada. Association for Computational Linguistics.
- Xuezhi Wang, Jason Wei, Dale Schuurmans, Quoc V Le, Ed H. Chi, Sharan Narang, Aakanksha Chowdhery, and Denny Zhou. 2023b. Self-consistency improves chain of thought reasoning in language models. In *The Eleventh International Conference on Learning Representations*.
- Jason Wei, Yi Tay, Rishi Bommasani, Colin Raffel, Barret Zoph, Sebastian Borgeaud, Dani Yogatama, Maarten Bosma, Denny Zhou, Donald Metzler, Ed H. Chi, Tatsunori Hashimoto, Oriol Vinyals, Percy Liang, Jeff Dean, and William Fedus. 2022a. Emergent abilities of large language models.
- Jason Wei, Xuezhi Wang, Dale Schuurmans, Maarten Bosma, Brian Ichter, Fei Xia, Ed Chi, Quoc Le, and Denny Zhou. 2023. Chain-of-thought prompting elicits reasoning in large language models.
- Jason Wei, Xuezhi Wang, Dale Schuurmans, Maarten Bosma, Fei Xia, Ed Chi, Quoc V Le, Denny Zhou, et al. 2022b. Chain-of-thought prompting elicits reasoning in large language models. *Advances in Neural Information Processing Systems*, 35:24824–24837.
- Yixuan Weng, Bin Li, Fei Xia, Minjun Zhu, Bin Sun, Shizhu He, Kang Liu, and Jun Zhao. 2023a. Large language models need holistically thought in medical conversational qa.
- Yixuan Weng, Minjun Zhu, Fei Xia, Bin Li, Shizhu He, Shengping Liu, Bin Sun, Kang Liu, and Jun Zhao. 2023b. Large language models are better reasoners with self-verification.
- Zhiheng Xi, Senjie Jin, Yuhao Zhou, Rui Zheng, Songyang Gao, Tao Gui, Qi Zhang, and Xuanjing Huang. 2023. Self-polish: Enhance reasoning in large language models via problem refinement.

Shunyu Yao, Dian Yu, Jeffrey Zhao, Izhak Shafran, Thomas L. Griffiths, Yuan Cao, and Karthik R Narasimhan. 2023. [Tree of thoughts: Deliberate problem solving with large language models](#). In *Thirty-seventh Conference on Neural Information Processing Systems*.

Haodi Zhang, Min Cai, Xinhe Zhang, Chen Jason Zhang, Rui Mao, and Kaishun Wu. 2023. [Self-convinced prompting: Few-shot question answering with repeated introspection](#).

Susan Zhang, Stephen Roller, Naman Goyal, Mikel Artetxe, Moya Chen, Shuohui Chen, Christopher Dewan, Mona Diab, Xian Li, Xi Victoria Lin, Todor Mihaylov, Myle Ott, Sam Shleifer, Kurt Shuster, Daniel Simig, Punit Singh Koura, Anjali Sridhar, Tianlu Wang, and Luke Zettlemoyer. 2022. [Opt: Open pre-trained transformer language models](#).

A Experiment Details for Difference in Separator Location in CoT-SEP

In this section, we explain our experiment shown in Table 3 in more detail. We provide Fig. 3, which is a detailed figure of Fig. 2 with two exemplars.

B Full List of Prompt Exemplars

Our prompts are primarily based on the vanilla CoT prompts provided by (Wei et al., 2022b). Full prompts for our experimental setting are included in Table 4 - 24.

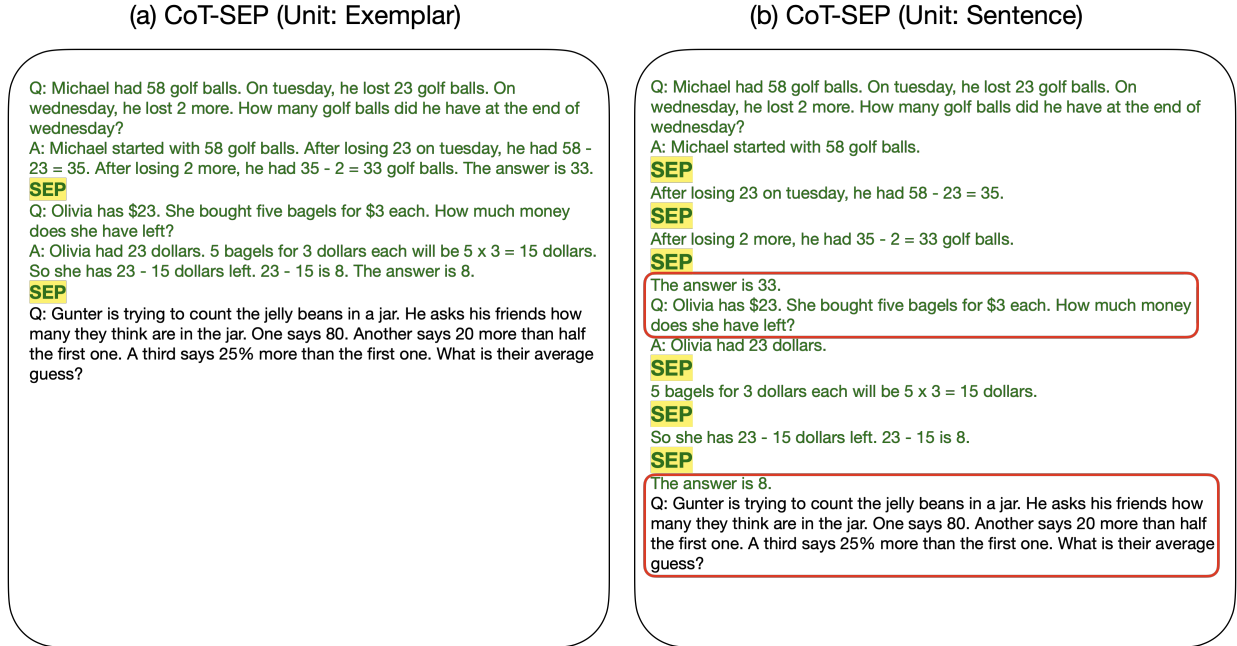


Figure 3: The prompts used for CoT-SEP (Unit: Exemplar) and CoT-SEP (Unit: Sentence) on GSM8K with two exemplars. In the first version, the separator (denoted as SEP in the above figure) is inserted after each exemplar, while in the second version, the separator is added between consecutive sentences of the Chain-of-Thought. The former one is more interpretable, which provides a better performance in Table 3.

Table 4: Full prompt for the Vanilla CoT used in our experiments on the GSM8K Arithmetic Reasoning Benchmark

Q: There are 15 trees in the grove. Grove workers will plant trees in the grove today. After they are done, there will be 21 trees. How many trees did the grove workers plant today?

A: There are 15 trees originally. Then there were 21 trees after some more were planted. So there must have been $21 - 15 = 6$. The answer is 6.

Q: If there are 3 cars in the parking lot and 2 more cars arrive, how many cars are in the parking lot?

A: There are originally 3 cars. 2 more cars arrive. $3 + 2 = 5$. The answer is 5.

Q: Leah had 32 chocolates and her sister had 42. If they ate 35, how many pieces do they have left in total?

A: Originally, Leah had 32 chocolates. Her sister had 42. So in total they had $32 + 42 = 74$. After eating 35, they had $74 - 35 = 39$. The answer is 39.

Q: Jason had 20 lollipops. He gave Denny some lollipops. Now Jason has 12 lollipops. How many lollipops did Jason give to Denny?

A: Jason started with 20 lollipops. Then he had 12 after giving some to Denny. So he gave Denny $20 - 12 = 8$. The answer is 8.

Q: Shawn has five toys. For Christmas, he got two toys each from his mom and dad. How many toys does he have now?

A: Shawn started with 5 toys. If he got 2 toys each from his mom and dad, then that is 4 more toys. $5 + 4 = 9$. The answer is 9.

Q: There were nine computers in the server room. Five more computers were installed each day, from monday to thursday. How many computers are now in the server room?

A: There were originally 9 computers. For each of 4 days, 5 more computers were added. So $5 * 4 = 20$ computers were added. $9 + 20$ is 29. The answer is 29.

Q: Michael had 58 golf balls. On tuesday, he lost 23 golf balls. On wednesday, he lost 2 more. How many golf balls did he have at the end of wednesday?

A: Michael started with 58 golf balls. After losing 23 on tuesday, he had $58 - 23 = 35$. After losing 2 more, he had $35 - 2 = 33$ golf balls. The answer is 33.

Q: Olivia has \$23. She bought five bagels for \$3 each. How much money does she have left?

A: Olivia had 23 dollars. 5 bagels for 3 dollars each will be $5 \times 3 = 15$ dollars. So she has $23 - 15$ dollars left. $23 - 15$ is 8. The answer is 8.

Table 5: Full prompt for COT-SEP (TripleSkip) used in our experiments on the GSM8K Arithmetic Reasoning Benchmark.

Q: There are 15 trees in the grove. Grove workers will plant trees in the grove today. After they are done, there will be 21 trees. How many trees did the grove workers plant today?
A: There are 15 trees originally. Then there were 21 trees after some more were planted. So there must have been $21 - 15 = 6$. The answer is 6.

␣
␣
␣

Q: If there are 3 cars in the parking lot and 2 more cars arrive, how many cars are in the parking lot?
A: There are originally 3 cars. 2 more cars arrive. $3 + 2 = 5$. The answer is 5.

␣
␣
␣

Q: Leah had 32 chocolates and her sister had 42. If they ate 35, how many pieces do they have left in total?
A: Originally, Leah had 32 chocolates. Her sister had 42. So in total they had $32 + 42 = 74$. After eating 35, they had $74 - 35 = 39$. The answer is 39.

␣
␣
␣

Q: Jason had 20 lollipops. He gave Denny some lollipops. Now Jason has 12 lollipops. How many lollipops did Jason give to Denny?
A: Jason started with 20 lollipops. Then he had 12 after giving some to Denny. So he gave Denny $20 - 12 = 8$. The answer is 8.

␣
␣
␣

Q: Shawn has five toys. For Christmas, he got two toys each from his mom and dad. How many toys does he have now?
A: Shawn started with 5 toys. If he got 2 toys each from his mom and dad, then that is 4 more toys. $5 + 4 = 9$. The answer is 9.

␣
␣
␣

Q: There were nine computers in the server room. Five more computers were installed each day, from monday to thursday. How many computers are now in the server room?
A: There were originally 9 computers. For each of 4 days, 5 more computers were added. So $5 * 4 = 20$ computers were added. $9 + 20$ is 29. The answer is 29.

␣
␣
␣

Q: Michael had 58 golf balls. On tuesday, he lost 23 golf balls. On wednesday, he lost 2 more. How many golf balls did he have at the end of wednesday?
A: Michael started with 58 golf balls. After losing 23 on tuesday, he had $58 - 23 = 35$. After losing 2 more, he had $35 - 2 = 33$ golf balls. The answer is 33.

␣
␣
␣

Q: Olivia has \$23. She bought five bagels for \$3 each. How much money does she have left?
A: Olivia had 23 dollars. 5 bagels for 3 dollars each will be $5 * 3 = 15$ dollars. So she has $23 - 15$ dollars left. $23 - 15$ is 8. The answer is 8.

␣
␣
␣

Table 6: Full prompt for COT-SEP (TripleStar) used in our experiments on the GSM8K Arithmetic Reasoning Benchmark.

Q: There are 15 trees in the grove. Grove workers will plant trees in the grove today. After they are done, there will be 21 trees. How many trees did the grove workers plant today?
A: There are 15 trees originally. Then there were 21 trees after some more were planted. So there must have been $21 - 15 = 6$. The answer is 6. ***
Q: If there are 3 cars in the parking lot and 2 more cars arrive, how many cars are in the parking lot?
A: There are originally 3 cars. 2 more cars arrive. $3 + 2 = 5$. The answer is 5. ***
Q: Leah had 32 chocolates and her sister had 42. If they ate 35, how many pieces do they have left in total?
A: Originally, Leah had 32 chocolates. Her sister had 42. So in total they had $32 + 42 = 74$. After eating 35, they had $74 - 35 = 39$. The answer is 39. ***
Q: Jason had 20 lollipops. He gave Denny some lollipops. Now Jason has 12 lollipops. How many lollipops did Jason give to Denny?
A: Jason started with 20 lollipops. Then he had 12 after giving some to Denny. So he gave Denny $20 - 12 = 8$. The answer is 8. ***
Q: Shawn has five toys. For Christmas, he got two toys each from his mom and dad. How many toys does he have now?
A: Shawn started with 5 toys. If he got 2 toys each from his mom and dad, then that is 4 more toys. $5 + 4 = 9$. The answer is 9. ***
Q: There were nine computers in the server room. Five more computers were installed each day, from monday to thursday. How many computers are now in the server room?
A: There were originally 9 computers. For each of 4 days, 5 more computers were added. So $5 * 4 = 20$ computers were added. $9 + 20$ is 29. The answer is 29. ***
Q: Michael had 58 golf balls. On tuesday, he lost 23 golf balls. On wednesday, he lost 2 more. How many golf balls did he have at the end of wednesday?
A: Michael started with 58 golf balls. After losing 23 on tuesday, he had $58 - 23 = 35$. After losing 2 more, he had $35 - 2 = 33$ golf balls. The answer is 33. ***
Q: Olivia has \$23. She bought five bagels for \$3 each. How much money does she have left?
A: Olivia had 23 dollars. 5 bagels for 3 dollars each will be $5 * 3 = 15$ dollars. So she has $23 - 15$ dollars left. $23 - 15$ is 8. The answer is 8. ***

Table 7: Full prompt for COT-SEP (TripleHash) used in our experiments on the GSM8K Arithmetic Reasoning Benchmark.

Q: There are 15 trees in the grove. Grove workers will plant trees in the grove today. After they are done, there will be 21 trees. How many trees did the grove workers plant today?
A: There are 15 trees originally. Then there were 21 trees after some more were planted. So there must have been $21 - 15 = 6$. The answer is 6. ###
Q: If there are 3 cars in the parking lot and 2 more cars arrive, how many cars are in the parking lot?
A: There are originally 3 cars. 2 more cars arrive. $3 + 2 = 5$. The answer is 5. ###
Q: Leah had 32 chocolates and her sister had 42. If they ate 35, how many pieces do they have left in total?
A: Originally, Leah had 32 chocolates. Her sister had 42. So in total they had $32 + 42 = 74$. After eating 35, they had $74 - 35 = 39$. The answer is 39. ###
Q: Jason had 20 lollipops. He gave Denny some lollipops. Now Jason has 12 lollipops. How many lollipops did Jason give to Denny?
A: Jason started with 20 lollipops. Then he had 12 after giving some to Denny. So he gave Denny $20 - 12 = 8$. The answer is 8. ###
Q: Shawn has five toys. For Christmas, he got two toys each from his mom and dad. How many toys does he have now?
A: Shawn started with 5 toys. If he got 2 toys each from his mom and dad, then that is 4 more toys. $5 + 4 = 9$. The answer is 9. ###
Q: There were nine computers in the server room. Five more computers were installed each day, from monday to thursday. How many computers are now in the server room?
A: There were originally 9 computers. For each of 4 days, 5 more computers were added. So $5 * 4 = 20$ computers were added. $9 + 20$ is 29. The answer is 29. ###
Q: Michael had 58 golf balls. On tuesday, he lost 23 golf balls. On wednesday, he lost 2 more. How many golf balls did he have at the end of wednesday?
A: Michael started with 58 golf balls. After losing 23 on tuesday, he had $58 - 23 = 35$. After losing 2 more, he had $35 - 2 = 33$ golf balls. The answer is 33. ###
Q: Olivia has \$23. She bought five bagels for \$3 each. How much money does she have left?
A: Olivia had 23 dollars. 5 bagels for 3 dollars each will be $5 * 3 = 15$ dollars. So she has $23 - 15$ dollars left. $23 - 15$ is 8. The answer is 8. ###

Table 8: Full prompt for COT-SEP (
) used in our experiments on the GSM8K Arithmetic Reasoning Benchmark.

Q: There are 15 trees in the grove. Grove workers will plant trees in the grove today. After they are done, there will be 21 trees. How many trees did the grove workers plant today?
A: There are 15 trees originally. Then there were 21 trees after some more were planted. So there must have been $21 - 15 = 6$. The answer is 6.
Q: If there are 3 cars in the parking lot and 2 more cars arrive, how many cars are in the parking lot?
A: There are originally 3 cars. 2 more cars arrive. $3 + 2 = 5$. The answer is 5.
Q: Leah had 32 chocolates and her sister had 42. If they ate 35, how many pieces do they have left in total?
A: Originally, Leah had 32 chocolates. Her sister had 42. So in total they had $32 + 42 = 74$. After eating 35, they had $74 - 35 = 39$. The answer is 39.
Q: Jason had 20 lollipops. He gave Denny some lollipops. Now Jason has 12 lollipops. How many lollipops did Jason give to Denny?
A: Jason started with 20 lollipops. Then he had 12 after giving some to Denny. So he gave Denny $20 - 12 = 8$. The answer is 8.
Q: Shawn has five toys. For Christmas, he got two toys each from his mom and dad. How many toys does he have now?
A: Shawn started with 5 toys. If he got 2 toys each from his mom and dad, then that is 4 more toys. $5 + 4 = 9$. The answer is 9.
Q: There were nine computers in the server room. Five more computers were installed each day, from monday to thursday. How many computers are now in the server room?
A: There were originally 9 computers. For each of 4 days, 5 more computers were added. So $5 * 4 = 20$ computers were added. $9 + 20 = 29$. The answer is 29.
Q: Michael had 58 golf balls. On tuesday, he lost 23 golf balls. On wednesday, he lost 2 more. How many golf balls did he have at the end of wednesday?
A: Michael started with 58 golf balls. After losing 23 on tuesday, he had $58 - 23 = 35$. After losing 2 more, he had $35 - 2 = 33$ golf balls. The answer is 33.
Q: Olivia has \$23. She bought five bagels for \$3 each. How much money does she have left?
A: Olivia had 23 dollars. 5 bagels for 3 dollars each will be $5 * 3 = 15$ dollars. So she has $23 - 15$ dollars left. $23 - 15$ is 8. The answer is 8.

Table 9: Full prompt for COT-SEP (
) used in our experiments on the GSM8K Arithmetic Reasoning Benchmark.

Q: There are 15 trees in the grove. Grove workers will plant trees in the grove today. After they are done, there will be 21 trees. How many trees did the grove workers plant today?
A: There are 15 trees originally. Then there were 21 trees after some more were planted. So there must have been $21 - 15 = 6$. The answer is 6.
Q: If there are 3 cars in the parking lot and 2 more cars arrive, how many cars are in the parking lot?
A: There are originally 3 cars. 2 more cars arrive. $3 + 2 = 5$. The answer is 5.
Q: Leah had 32 chocolates and her sister had 42. If they ate 35, how many pieces do they have left in total?
A: Originally, Leah had 32 chocolates. Her sister had 42. So in total they had $32 + 42 = 74$. After eating 35, they had $74 - 35 = 39$. The answer is 39.
Q: Jason had 20 lollipops. He gave Denny some lollipops. Now Jason has 12 lollipops. How many lollipops did Jason give to Denny?
A: Jason started with 20 lollipops. Then he had 12 after giving some to Denny. So he gave Denny $20 - 12 = 8$. The answer is 8.
Q: Shawn has five toys. For Christmas, he got two toys each from his mom and dad. How many toys does he have now?
A: Shawn started with 5 toys. If he got 2 toys each from his mom and dad, then that is 4 more toys. $5 + 4 = 9$. The answer is 9.
Q: There were nine computers in the server room. Five more computers were installed each day, from monday to thursday. How many computers are now in the server room?
A: There were originally 9 computers. For each of 4 days, 5 more computers were added. So $5 * 4 = 20$ computers were added. $9 + 20 = 29$. The answer is 29.
Q: Michael had 58 golf balls. On tuesday, he lost 23 golf balls. On wednesday, he lost 2 more. How many golf balls did he have at the end of wednesday?
A: Michael started with 58 golf balls. After losing 23 on tuesday, he had $58 - 23 = 35$. After losing 2 more, he had $35 - 2 = 33$ golf balls. The answer is 33.
Q: Olivia has \$23. She bought five bagels for \$3 each. How much money does she have left?
A: Olivia had 23 dollars. 5 bagels for 3 dollars each will be $5 * 3 = 15$ dollars. So she has $23 - 15$ dollars left. $23 - 15$ is 8. The answer is 8.

Table 10: Full prompt for Heterogeneous CoT-SEP used in our experiments on the GSM8K Arithmetic Reasoning Benchmark.

Q: There are 15 trees in the grove. Grove workers will plant trees in the grove today. After they are done, there will be 21 trees. How many trees did the grove workers plant today?
A: There are 15 trees originally. Then there were 21 trees after some more were planted. So there must have been $21 - 15 = 6$. The answer is 6.
Q: If there are 3 cars in the parking lot and 2 more cars arrive, how many cars are in the parking lot?
A: There are originally 3 cars. 2 more cars arrive. $3 + 2 = 5$. The answer is 5. ###
Q: Leah had 32 chocolates and her sister had 42. If they ate 35, how many pieces do they have left in total?
A: Originally, Leah had 32 chocolates. Her sister had 42. So in total they had $32 + 42 = 74$. After eating 35, they had $74 - 35 = 39$. The answer is 39. ***
Q: Jason had 20 lollipops. He gave Denny some lollipops. Now Jason has 12 lollipops. How many lollipops did Jason give to Denny?
A: Jason started with 20 lollipops. Then he had 12 after giving some to Denny. So he gave Denny $20 - 12 = 8$. The answer is 8.
Q: Shawn has five toys. For Christmas, he got two toys each from his mom and dad. How many toys does he have now?
A: Shawn started with 5 toys. If he got 2 toys each from his mom and dad, then that is 4 more toys. $5 + 4 = 9$. The answer is 9.
Q: There were nine computers in the server room. Five more computers were installed each day, from monday to thursday. How many computers are now in the server room?
A: There were originally 9 computers. For each of 4 days, 5 more computers were added. So $5 * 4 = 20$ computers were added. $9 + 20$ is 29. The answer is 29.
Q: Michael had 58 golf balls. On tuesday, he lost 23 golf balls. On wednesday, he lost 2 more. How many golf balls did he have at the end of wednesday?
A: Michael started with 58 golf balls. After losing 23 on tuesday, he had $58 - 23 = 35$. After losing 2 more, he had $35 - 2 = 33$ golf balls. The answer is 33. ###
Q: Olivia has \$23. She bought five bagels for \$3 each. How much money does she have left?
A: Olivia had 23 dollars. 5 bagels for 3 dollars each will be $5 * 3 = 15$ dollars. So she has $23 - 15$ dollars left. $23 - 15$ is 8. The answer is 8. ***

Table 11: Full prompt for the Vanilla CoT prompting used in our experiments on the AQuA Arithmetic Reasoning Benchmark.

Q: John found that the average of 15 numbers is 40. If 10 is added to each number then the mean of the numbers is? Answer Choices: (a) 50 (b) 45 (c) 65 (d) 78 (e) 64
A: If 10 is added to each number, then the mean of the numbers also increases by 10. So the new mean would be 50. The answer is (a).
Q: If $a / b = 3/4$ and $8a + 5b = 22$, then find the value of a. Answer Choices: (a) $1/2$ (b) $3/2$ (c) $5/2$ (d) $4/2$ (e) $7/2$
A: If $a / b = 3/4$, then $b = 4a / 3$. So $8a + 5(4a / 3) = 22$. This simplifies to $8a + 20a / 3 = 22$, which means $44a / 3 = 22$. So a is equal to $3/2$. The answer is (b).
Q: A person is traveling at 20 km/hr and reached his destiny in 2.5 hr then find the distance? Answer Choices: (a) 53 km (b) 55 km (c) 52 km (d) 60 km (e) 50 km
A: The distance that the person traveled would have been $20 \text{ km/hr} * 2.5 \text{ hrs} = 50 \text{ km}$. The answer is (e).
Q: How many keystrokes are needed to type the numbers from 1 to 500? Answer Choices: (a) 1156 (b) 1392 (c) 1480 (d) 1562 (e) 1788
A: There are 9 one-digit numbers from 1 to 9. There are 90 two-digit numbers from 10 to 99. There are 401 three-digit numbers from 100 to 500. $9 + 90(2) + 401(3) = 1392$. The answer is (b).

Table 12: Full prompt for COT-SEP (TripleSkip) used in our experiments on the AQUA Arithmetic Reasoning Benchmark.

<p>Q: John found that the average of 15 numbers is 40. If 10 is added to each number then the mean of the numbers is? Answer Choices: (a) 50 (b) 45 (c) 65 (d) 78 (e) 64</p> <p>A: If 10 is added to each number, then the mean of the numbers also increases by 10. So the new mean would be 50. The answer is (a).</p> <p>␣</p> <p>␣</p> <p>␣</p> <p>Q: If $a / b = 3/4$ and $8a + 5b = 22$, then find the value of a. Answer Choices: (a) $1/2$ (b) $3/2$ (c) $5/2$ (d) $4/2$ (e) $7/2$</p> <p>A: If $a / b = 3/4$, then $b = 4a / 3$. So $8a + 5(4a / 3) = 22$. This simplifies to $8a + 20a / 3 = 22$, which means $44a / 3 = 22$. So a is equal to $3/2$. The answer is (b).</p> <p>␣</p> <p>␣</p> <p>␣</p> <p>Q: A person is traveling at 20 km/hr and reached his destiny in 2.5 hr then find the distance? Answer Choices: (a) 53 km (b) 55 km (c) 52 km (d) 60 km (e) 50 km</p> <p>A: The distance that the person traveled would have been $20 \text{ km/hr} * 2.5 \text{ hrs} = 50 \text{ km}$. The answer is (e).</p> <p>␣</p> <p>␣</p> <p>␣</p> <p>Q: How many keystrokes are needed to type the numbers from 1 to 500? Answer Choices: (a) 1156 (b) 1392 (c) 1480 (d) 1562 (e) 1788</p> <p>A: There are 9 one-digit numbers from 1 to 9. There are 90 two-digit numbers from 10 to 99. There are 401 three-digit numbers from 100 to 500. $9 + 90(2) + 401(3) = 1392$. The answer is (b).</p> <p>␣</p> <p>␣</p> <p>␣</p>
--

Table 13: Full prompt for COT-SEP (TripleStar) used in our experiments on the AQUA Arithmetic Reasoning Benchmark.

<p>Q: John found that the average of 15 numbers is 40. If 10 is added to each number then the mean of the numbers is? Answer Choices: (a) 50 (b) 45 (c) 65 (d) 78 (e) 64</p> <p>A: If 10 is added to each number, then the mean of the numbers also increases by 10. So the new mean would be 50. The answer is (a). ***</p> <p>Q: If $a / b = 3/4$ and $8a + 5b = 22$, then find the value of a. Answer Choices: (a) $1/2$ (b) $3/2$ (c) $5/2$ (d) $4/2$ (e) $7/2$</p> <p>A: If $a / b = 3/4$, then $b = 4a / 3$. So $8a + 5(4a / 3) = 22$. This simplifies to $8a + 20a / 3 = 22$, which means $44a / 3 = 22$. So a is equal to $3/2$. The answer is (b). ***</p> <p>Q: A person is traveling at 20 km/hr and reached his destiny in 2.5 hr then find the distance? Answer Choices: (a) 53 km (b) 55 km (c) 52 km (d) 60 km (e) 50 km</p> <p>A: The distance that the person traveled would have been $20 \text{ km/hr} * 2.5 \text{ hrs} = 50 \text{ km}$. The answer is (e). ***</p> <p>Q: How many keystrokes are needed to type the numbers from 1 to 500? Answer Choices: (a) 1156 (b) 1392 (c) 1480 (d) 1562 (e) 1788</p> <p>A: There are 9 one-digit numbers from 1 to 9. There are 90 two-digit numbers from 10 to 99. There are 401 three-digit numbers from 100 to 500. $9 + 90(2) + 401(3) = 1392$. The answer is (b). ***</p>
--

Table 14: Full prompt for COT-SEP (TripleHash) used in our experiments on the AQUA Arithmetic Reasoning Benchmark.

<p>Q: John found that the average of 15 numbers is 40. If 10 is added to each number then the mean of the numbers is? Answer Choices: (a) 50 (b) 45 (c) 65 (d) 78 (e) 64</p> <p>A: If 10 is added to each number, then the mean of the numbers also increases by 10. So the new mean would be 50. The answer is (a). ###</p> <p>Q: If $a/b = 3/4$ and $8a + 5b = 22$, then find the value of a. Answer Choices: (a) $1/2$ (b) $3/2$ (c) $5/2$ (d) $4/2$ (e) $7/2$</p> <p>A: If $a/b = 3/4$, then $b = 4a/3$. So $8a + 5(4a/3) = 22$. This simplifies to $8a + 20a/3 = 22$, which means $44a/3 = 22$. So a is equal to $3/2$. The answer is (b). ###</p> <p>Q: A person is traveling at 20 km/hr and reached his destiny in 2.5 hr then find the distance? Answer Choices: (a) 53 km (b) 55 km (c) 52 km (d) 60 km (e) 50 km</p> <p>A: The distance that the person traveled would have been $20 \text{ km/hr} * 2.5 \text{ hrs} = 50 \text{ km}$. The answer is (e). ###</p> <p>Q: How many keystrokes are needed to type the numbers from 1 to 500? Answer Choices: (a) 1156 (b) 1392 (c) 1480 (d) 1562 (e) 1788</p> <p>A: There are 9 one-digit numbers from 1 to 9. There are 90 two-digit numbers from 10 to 99. There are 401 three-digit numbers from 100 to 500. $9 + 90(2) + 401(3) = 1392$. The answer is (b). ###</p>
--

Table 15: Full prompt for COT-SEP (
) used in our experiments on the AQUA Arithmetic Reasoning Benchmark.

<p>Q: John found that the average of 15 numbers is 40. If 10 is added to each number then the mean of the numbers is? Answer Choices: (a) 50 (b) 45 (c) 65 (d) 78 (e) 64</p> <p>A: If 10 is added to each number, then the mean of the numbers also increases by 10. So the new mean would be 50. The answer is (a).
</p> <p>Q: If $a/b = 3/4$ and $8a + 5b = 22$, then find the value of a. Answer Choices: (a) $1/2$ (b) $3/2$ (c) $5/2$ (d) $4/2$ (e) $7/2$</p> <p>A: If $a/b = 3/4$, then $b = 4a/3$. So $8a + 5(4a/3) = 22$. This simplifies to $8a + 20a/3 = 22$, which means $44a/3 = 22$. So a is equal to $3/2$. The answer is (b).
</p> <p>Q: A person is traveling at 20 km/hr and reached his destiny in 2.5 hr then find the distance? Answer Choices: (a) 53 km (b) 55 km (c) 52 km (d) 60 km (e) 50 km</p> <p>A: The distance that the person traveled would have been $20 \text{ km/hr} * 2.5 \text{ hrs} = 50 \text{ km}$. The answer is (e).
</p> <p>Q: How many keystrokes are needed to type the numbers from 1 to 500? Answer Choices: (a) 1156 (b) 1392 (c) 1480 (d) 1562 (e) 1788</p> <p>A: There are 9 one-digit numbers from 1 to 9. There are 90 two-digit numbers from 10 to 99. There are 401 three-digit numbers from 100 to 500. $9 + 90(2) + 401(3) = 1392$. The answer is (b).
</p>
--

Table 16: Full prompt for COT-SEP (
) used in our experiments on the AQUA Arithmetic Reasoning Benchmark.

<p>Q: John found that the average of 15 numbers is 40. If 10 is added to each number then the mean of the numbers is? Answer Choices: (a) 50 (b) 45 (c) 65 (d) 78 (e) 64</p> <p>A: If 10 is added to each number, then the mean of the numbers also increases by 10. So the new mean would be 50. The answer is (a).
</p> <p>Q: If $a/b = 3/4$ and $8a + 5b = 22$, then find the value of a. Answer Choices: (a) $1/2$ (b) $3/2$ (c) $5/2$ (d) $4/2$ (e) $7/2$</p> <p>A: If $a/b = 3/4$, then $b = 4a/3$. So $8a + 5(4a/3) = 22$. This simplifies to $8a + 20a/3 = 22$, which means $44a/3 = 22$. So a is equal to $3/2$. The answer is (b).
</p> <p>Q: A person is traveling at 20 km/hr and reached his destiny in 2.5 hr then find the distance? Answer Choices: (a) 53 km (b) 55 km (c) 52 km (d) 60 km (e) 50 km</p> <p>A: The distance that the person traveled would have been $20 \text{ km/hr} * 2.5 \text{ hrs} = 50 \text{ km}$. The answer is (e).
</p> <p>Q: How many keystrokes are needed to type the numbers from 1 to 500? Answer Choices: (a) 1156 (b) 1392 (c) 1480 (d) 1562 (e) 1788</p> <p>A: There are 9 one-digit numbers from 1 to 9. There are 90 two-digit numbers from 10 to 99. There are 401 three-digit numbers from 100 to 500. $9 + 90(2) + 401(3) = 1392$. The answer is (b).
</p>
--

Table 17: Full prompt for Heterogeneous CoT-SEP used in our experiments on the AQuA Arithmetic Reasoning Benchmark.

<p>Q: John found that the average of 15 numbers is 40. If 10 is added to each number then the mean of the numbers is? Answer Choices: (a) 50 (b) 45 (c) 65 (d) 78 (e) 64</p> <p>A: If 10 is added to each number, then the mean of the numbers also increases by 10. So the new mean would be 50. The answer is (a).</p> <p>␣</p> <p>␣</p> <p>␣</p> <p>Q: If $a/b = 3/4$ and $8a + 5b = 22$, then find the value of a. Answer Choices: (a) $1/2$ (b) $3/2$ (c) $5/2$ (d) $4/2$ (e) $7/2$</p> <p>A: If $a/b = 3/4$, then $b = 4a/3$. So $8a + 5(4a/3) = 22$. This simplifies to $8a + 20a/3 = 22$, which means $44a/3 = 22$. So a is equal to $3/2$. The answer is (b). ####</p> <p>Q: A person is traveling at 20 km/hr and reached his destiny in 2.5 hr then find the distance? Answer Choices: (a) 53 km (b) 55 km (c) 52 km (d) 60 km (e) 50 km</p> <p>A: The distance that the person traveled would have been $20 \text{ km/hr} * 2.5 \text{ hrs} = 50 \text{ km}$. The answer is (e).</p> <p>***</p> <p>Q: How many keystrokes are needed to type the numbers from 1 to 500? Answer Choices: (a) 1156 (b) 1392 (c) 1480 (d) 1562 (e) 1788</p> <p>A: There are 9 one-digit numbers from 1 to 9. There are 90 two-digit numbers from 10 to 99. There are 401 three-digit numbers from 100 to 500. $9 + 90(2) + 401(3) = 1392$. The answer is (b).
</p>
--

Table 18: Full prompt for the Vanilla CoT prompting used in our experiments on the CSQA Commonsense Reasoning Benchmark. There are newlines between the answer choices that are omitted in the table for space reasons as (Wei et al., 2022b)

<p>Q: What do people use to absorb extra ink from a fountain pen? Answer Choices: (a) shirt pocket (b) calligrapher's hand (c) inkwell (d) desk drawer (e) blotter</p> <p>A: The answer must be an item that can absorb ink. Of the above choices, only blotters are used to absorb ink. So the answer is (e).</p> <p>Q: What home entertainment equipment requires cable? Answer Choices: (a) radio shack (b) substation (c) television (d) cabinet</p> <p>A: The answer must require cable. Of the above choices, only television requires cable. So the answer is (c).</p> <p>Q: The fox walked from the city into the forest, what was it looking for? Answer Choices: (a) pretty flowers (b) hen house (c) natural habitat (d) storybook</p> <p>A: The answer must be something in the forest. Of the above choices, only natural habitat is in the forest. So the answer is (b).</p> <p>Q: Sammy wanted to go to where the people were. Where might he go? Answer Choices: (a) populated areas (b) race track (c) desert (d) apartment (e) roadblock</p> <p>A: The answer must be a place with a lot of people. Of the above choices, only populated areas have a lot of people. So the answer is (a).</p> <p>Q: Where do you put your grapes just before checking out? Answer Choices: (a) mouth (b) grocery cart (c)super market (d) fruit basket (e) fruit market</p> <p>A: The answer should be the place where grocery items are placed before checking out. Of the above choices, grocery cart makes the most sense for holding grocery items. So the answer is (b).</p> <p>Q: Google Maps and other highway and street GPS services have replaced what? Answer Choices: (a) united states (b) mexico (c) countryside (d) atlas</p> <p>A: The answer must be something that used to do what Google Maps and GPS services do, which is to give directions. Of the above choices, only atlases are used to give directions. So the answer is (d).</p> <p>Q: Before getting a divorce, what did the wife feel who was doing all the work? Answer Choices: (a) harder (b) anguish (c) bitterness (d) tears (e) sadness</p> <p>A: The answer should be the feeling of someone getting divorced who was doing all the work. Of the above choices, the closest feeling is bitterness. So the answer is (c).</p>
--

Table 19: Full prompt for COT-SEP (TripleSkip) used in our experiments on the CSQA Commonsense Reasoning Benchmark.



















Q: What do people use to absorb extra ink from a fountain pen? Answer Choices: (a) shirt pocket (b) calligrapher’s hand (c) inkwell (d) desk drawer (e) blotter
A: The answer must be an item that can absorb ink. Of the above choices, only blotters are used to absorb ink. So the answer is (e).



Q: What home entertainment equipment requires cable? Answer Choices: (a) radio shack (b) substation (c) television (d) cabinet
A: The answer must require cable. Of the above choices, only television requires cable. So the answer is (c).
Q: The fox walked from the city into the forest, what was it looking for? Answer Choices: (a) pretty flowers (b) hen house (c) natural habitat (d) storybook
A: The answer must be something in the forest. Of the above choices, only natural habitat is in the forest. So the answer is (b).



Q: Sammy wanted to go to where the people were. Where might he go? Answer Choices: (a) populated areas (b) race track (c) desert (d) apartment (e) roadblock
A: The answer must be a place with a lot of people. Of the above choices, only populated areas have a lot of people. So the answer is (a).



Q: Where do you put your grapes just before checking out? Answer Choices: (a) mouth (b) grocery cart (c)super market (d) fruit basket (e) fruit market
A: The answer should be the place where grocery items are placed before checking out. Of the above choices, grocery cart makes the most sense for holding grocery items. So the answer is (b).



Q: Google Maps and other highway and street GPS services have replaced what? Answer Choices: (a) united states (b) mexico (c) countryside (d) atlas
A: The answer must be something that used to do what Google Maps and GPS services do, which is to give directions. Of the above choices, only atlases are used to give directions. So the answer is (d).



Q: Before getting a divorce, what did the wife feel who was doing all the work? Answer Choices: (a) harder (b) anguish (c) bitterness (d) tears (e) sadness
A: The answer should be the feeling of someone getting divorced who was doing all the work. Of the above choices, the closest feeling is bitterness. So the answer is (c).




Table 20: Full prompt for COT-SEP (TripleStar) used in our experiments on the CSQA Commonsense Reasoning Benchmark.

Q: What do people use to absorb extra ink from a fountain pen? Answer Choices: (a) shirt pocket (b) calligrapher's hand (c) inkwell (d) desk drawer (e) blotter
A: The answer must be an item that can absorb ink. Of the above choices, only blotters are used to absorb ink. So the answer is (e). ***
Q: What home entertainment equipment requires cable? Answer Choices: (a) radio shack (b) substation (c) television (d) cabinet
A: The answer must require cable. Of the above choices, only television requires cable. So the answer is (c). ***
Q: The fox walked from the city into the forest, what was it looking for? Answer Choices: (a) pretty flowers (b) hen house (c) natural habitat (d) storybook
A: The answer must be something in the forest. Of the above choices, only natural habitat is in the forest. So the answer is (b). ***
Q: Sammy wanted to go to where the people were. Where might he go? Answer Choices: (a) populated areas (b) race track (c) desert (d) apartment (e) roadblock
A: The answer must be a place with a lot of people. Of the above choices, only populated areas have a lot of people. So the answer is (a). ***
Q: Where do you put your grapes just before checking out? Answer Choices: (a) mouth (b) grocery cart (c)super market (d) fruit basket (e) fruit market
A: The answer should be the place where grocery items are placed before checking out. Of the above choices, grocery cart makes the most sense for holding grocery items. So the answer is (b). ***
Q: Google Maps and other highway and street GPS services have replaced what? Answer Choices: (a) united states (b) mexico (c) countryside (d) atlas
A: The answer must be something that used to do what Google Maps and GPS services do, which is to give directions. Of the above choices, only atlases are used to give directions. So the answer is (d). ***
Q: Before getting a divorce, what did the wife feel who was doing all the work? Answer Choices: (a) harder (b) anguish (c) bitterness (d) tears (e) sadness
A: The answer should be the feeling of someone getting divorced who was doing all the work. Of the above choices, the closest feeling is bitterness. So the answer is (c). ***

Table 21: Full prompt for COT-SEP (TripleHash) used in our experiments on the CSQA Commonsense Reasoning Benchmark.

Q: What do people use to absorb extra ink from a fountain pen? Answer Choices: (a) shirt pocket (b) calligrapher's hand (c) inkwell (d) desk drawer (e) blotter
A: The answer must be an item that can absorb ink. Of the above choices, only blotters are used to absorb ink. So the answer is (e). ###
Q: What home entertainment equipment requires cable? Answer Choices: (a) radio shack (b) substation (c) television (d) cabinet
A: The answer must require cable. Of the above choices, only television requires cable. So the answer is (c). ###
Q: The fox walked from the city into the forest, what was it looking for? Answer Choices: (a) pretty flowers (b) hen house (c) natural habitat (d) storybook
A: The answer must be something in the forest. Of the above choices, only natural habitat is in the forest. So the answer is (b). ###
Q: Sammy wanted to go to where the people were. Where might he go? Answer Choices: (a) populated areas (b) race track (c) desert (d) apartment (e) roadblock
A: The answer must be a place with a lot of people. Of the above choices, only populated areas have a lot of people. So the answer is (a). ###
Q: Where do you put your grapes just before checking out? Answer Choices: (a) mouth (b) grocery cart (c)super market (d) fruit basket (e) fruit market
A: The answer should be the place where grocery items are placed before checking out. Of the above choices, grocery cart makes the most sense for holding grocery items. So the answer is (b). ###
Q: Google Maps and other highway and street GPS services have replaced what? Answer Choices: (a) united states (b) mexico (c) countryside (d) atlas
A: The answer must be something that used to do what Google Maps and GPS services do, which is to give directions. Of the above choices, only atlases are used to give directions. So the answer is (d). ###
Q: Before getting a divorce, what did the wife feel who was doing all the work? Answer Choices: (a) harder (b) anguish (c) bitterness (d) tears (e) sadness
A: The answer should be the feeling of someone getting divorced who was doing all the work. Of the above choices, the closest feeling is bitterness. So the answer is (c). ###

Table 22: Full prompt for COT-SEP (
) used in our experiments on the CSQA Commonsense Reasoning Benchmark.

Q: What do people use to absorb extra ink from a fountain pen? Answer Choices: (a) shirt pocket (b) calligrapher’s hand (c) inkwell (d) desk drawer (e) blotter
A: The answer must be an item that can absorb ink. Of the above choices, only blotters are used to absorb ink. So the answer is (e).
Q: What home entertainment equipment requires cable? Answer Choices: (a) radio shack (b) substation (c) television (d) cabinet
A: The answer must require cable. Of the above choices, only television requires cable. So the answer is (c).
Q: The fox walked from the city into the forest, what was it looking for? Answer Choices: (a) pretty flowers (b) hen house (c) natural habitat (d) storybook
A: The answer must be something in the forest. Of the above choices, only natural habitat is in the forest. So the answer is (b).
Q: Sammy wanted to go to where the people were. Where might he go? Answer Choices: (a) populated areas (b) race track (c) desert (d) apartment (e) roadblock
A: The answer must be a place with a lot of people. Of the above choices, only populated areas have a lot of people. So the answer is (a).
Q: Where do you put your grapes just before checking out? Answer Choices: (a) mouth (b) grocery cart (c)super market (d) fruit basket (e) fruit market
A: The answer should be the place where grocery items are placed before checking out. Of the above choices, grocery cart makes the most sense for holding grocery items. So the answer is (b).
Q: Google Maps and other highway and street GPS services have replaced what? Answer Choices: (a) united states (b) mexico (c) countryside (d) atlas
A: The answer must be something that used to do what Google Maps and GPS services do, which is to give directions. Of the above choices, only atlases are used to give directions. So the answer is (d).
Q: Before getting a divorce, what did the wife feel who was doing all the work? Answer Choices: (a) harder (b) anguish (c) bitterness (d) tears (e) sadness
A: The answer should be the feeling of someone getting divorced who was doing all the work. Of the above choices, the closest feeling is bitterness. So the answer is (c).

Table 23: Full prompt for COT-SEP (
) used in our experiments on the CSQA Commonsense Reasoning Benchmark.

Q: What do people use to absorb extra ink from a fountain pen? Answer Choices: (a) shirt pocket (b) calligrapher’s hand (c) inkwell (d) desk drawer (e) blotter
A: The answer must be an item that can absorb ink. Of the above choices, only blotters are used to absorb ink. So the answer is (e).
Q: What home entertainment equipment requires cable? Answer Choices: (a) radio shack (b) substation (c) television (d) cabinet
A: The answer must require cable. Of the above choices, only television requires cable. So the answer is (c).
Q: The fox walked from the city into the forest, what was it looking for? Answer Choices: (a) pretty flowers (b) hen house (c) natural habitat (d) storybook
A: The answer must be something in the forest. Of the above choices, only natural habitat is in the forest. So the answer is (b).
Q: Sammy wanted to go to where the people were. Where might he go? Answer Choices: (a) populated areas (b) race track (c) desert (d) apartment (e) roadblock
A: The answer must be a place with a lot of people. Of the above choices, only populated areas have a lot of people. So the answer is (a).
Q: Where do you put your grapes just before checking out? Answer Choices: (a) mouth (b) grocery cart (c)super market (d) fruit basket (e) fruit market
A: The answer should be the place where grocery items are placed before checking out. Of the above choices, grocery cart makes the most sense for holding grocery items. So the answer is (b).
Q: Google Maps and other highway and street GPS services have replaced what? Answer Choices: (a) united states (b) mexico (c) countryside (d) atlas
A: The answer must be something that used to do what Google Maps and GPS services do, which is to give directions. Of the above choices, only atlases are used to give directions. So the answer is (d).
Q: Before getting a divorce, what did the wife feel who was doing all the work? Answer Choices: (a) harder (b) anguish (c) bitterness (d) tears (e) sadness
A: The answer should be the feeling of someone getting divorced who was doing all the work. Of the above choices, the closest feeling is bitterness. So the answer is (c).

Table 24: Full prompt for Heterogeneous CoT-SEP used in our experiments on the CSQA Commonsense Reasoning Benchmark.

Q: What do people use to absorb extra ink from a fountain pen? Answer Choices: (a) shirt pocket (b) calligrapher’s hand (c) inkwell (d) desk drawer (e) blotter
A: The answer must be an item that can absorb ink. Of the above choices, only blotters are used to absorb ink. So the answer is (e).

Q: What home entertainment equipment requires cable? Answer Choices: (a) radio shack (b) substation (c) television (d) cabinet
A: The answer must require cable. Of the above choices, only television requires cable. So the answer is (c). ###
Q: The fox walked from the city into the forest, what was it looking for? Answer Choices: (a) pretty flowers (b) hen house (c) natural habitat (d) storybook
A: The answer must be something in the forest. Of the above choices, only natural habitat is in the forest. So the answer is (b). ***
Q: Sammy wanted to go to where the people were. Where might he go? Answer Choices: (a) populated areas (b) race track (c) desert (d) apartment (e) roadblock
A: The answer must be a place with a lot of people. Of the above choices, only populated areas have a lot of people. So the answer is (a).

Q: Where do you put your grapes just before checking out? Answer Choices: (a) mouth (b) grocery cart (c)super market (d) fruit basket (e) fruit market
A: The answer should be the place where grocery items are placed before checking out. Of the above choices, grocery cart makes the most sense for holding grocery items. So the answer is (b).

Q: Google Maps and other highway and street GPS services have replaced what? Answer Choices: (a) united states (b) mexico (c) countryside (d) atlas
A: The answer must be something that used to do what Google Maps and GPS services do, which is to give directions. Of the above choices, only atlases are used to give directions. So the answer is (d).

Q: Before getting a divorce, what did the wife feel who was doing all the work? Answer Choices: (a) harder (b) anguish (c) bitterness (d) tears (e) sadness
A: The answer should be the feeling of someone getting divorced who was doing all the work. Of the above choices, the closest feeling is bitterness. So the answer is (c). ###
