

ISOGONAL CONJUGATION IN ISOSCELES TETRAHEDRON

SARO HARUTYUNYAN

ABSTRACT. In this article we investigate the properties of isogonal conjugation in isosceles tetrahedron. Particularly we reveal three hyperbolic paraboloids each of which is formed by pairs of isogonal conjugate points symmetric in the respective bimedian, as well as we prove that the circumsphere of an isosceles tetrahedron is invariant under isogonal conjugation in that tetrahedron.

1. INTRODUCTION

Tetrahedron $ABCD$ is called *isosceles* (or *equihedral*) if its opposite edges are equal, i.e. $AB = CD$, $BC = AD$, $AC = BD$. This type of tetrahedron is already well-investigated. One may refer to [3] for a list of its known properties. For the purposes of this paper we will need only a few of these properties which will be discussed in Section 2.

One may note that the isosceles tetrahedron is kind of a generalization of the equilateral triangle and is inherently “symmetric” so it should have a “center” that will coincide with its circumcenter, incenter and centroid. Actually this is true for the high-dimensional analogue of isosceles tetrahedron too, see [1] and [2].

We will need the notion of *isogonal conjugation* with respect to a polyhedron. This is the natural generalization of this transformation for polygons. First, for a given dihedron \mathcal{D} with edgeline e and a point P define the *isogonal plane* of Pe in \mathcal{D} as the plane symmetric to Pe with respect to the bisector plane of \mathcal{D} (if P lies on e then the plane Pe , as well as its isogonal can be any plane through e). Then, for a given polyhedron \mathcal{P} and a point P define the *isogonal conjugate* of P in \mathcal{P} as the point Q (in case of existence) so that P and Q lie in isogonal planes in each dihedron of \mathcal{P} . Obviously if P is the isogonal conjugate of Q , then Q is the isogonal conjugate of P .

Isogonal conjugation is well-defined for an arbitrary tetrahedron, that is, any point of space has an isogonal conjugate with respect to tetrahedron. On the other hand this is not the case with other polyhedra, there might be only a few or not even a single point which have

2020 *Mathematics Subject Classification.* 51M04, 51M20.

Key words and phrases. isosceles tetrahedron, isogonal conjugate, inversion, angle between circles/spheres, hyperbolic paraboloid.

isogonal conjugates. Anyway we will only work with tetrahedron and will give a proof of the first sentence of this paragraph in Section 3.

Section 4 will address several auxiliary facts, mainly concerning circles and spheres, which will be leveraged later.

One of the main results of this paper will be presented in Section 5 where we consider isogonal conjugate pairs symmetric in bimedians of isosceles tetrahedron. We prove that they lie on three hyperbolic paraboloids. This is the only section where we will utilize coordinate bashing opposed to the geometric techniques used elsewhere.

The other major result of this paper is that the circumsphere (except for the vertices) of isosceles tetrahedron is invariant with respect to isogonal conjugation. In other words, the isogonal conjugate of any point of the circumsphere of an isosceles tetrahedron other than a vertex lies on its circumsphere. This will be proved in Section 6.

Interestingly, the two-dimensional case of isosceles tetrahedron, namely the equilateral triangle, does not have any similar property. Moreover, the isogonal conjugate of any point $P \notin \{A, B, C\}$ of the circumcircle of *any* triangle ABC is “infinite”, i.e. the isogonals of AP, BP, CP are parallel.

2. PROPERTIES OF ISOSCELES TETRAHEDRON

Proposition 2.1. *Isosceles tetrahedron has the following properties:*

- (i) *any of its edges is seen in equal angles from the other two vertices and its faces are congruent triangles (hence the name equihedral);*
- (ii) *its circumcenter and incenter coincide;*
- (iii) *its faces are acute triangles.*

Proof. (i) Obvious by the equality of opposite edges.

- (ii) Let O be the center of circumsphere Ω of isosceles tetrahedron $ABCD$. The locus of points $Z \in \Omega$ such that $\angle AZB = \angle ACB$ is a union of two circular arcs which are symmetric with respect to the plane ABO . This means that the planes ADB and ACB are symmetric with respect to ABO for $\angle ADB = \angle ACB$, which follows from (i). So O lies on the bisector plane of dihedral AB . Similarly O lies on the bisector planes of the other dihedral angles and thus coincides with the incenter.

- (iii) Assume for the sake of contradiction that $\angle ABC \geq 90^\circ$, for example. Choose the point D' in such a way that $ABCD'$ is a parallelogram. Then if M is the midpoint of AC , we have $\triangle ADC = \triangle AD'C$ and

$$BD < BM + MD = BM + MD' = BD' \leq AC$$

which is obviously false (the last inequality follows from the fact that BD' lies inside the circle with diameter AC). Thus the faces of $ABCD$ are acute angled.

□

3. ISOGONAL CONJUGATION IN TETRAHEDRON

Here we will work out a proof of the correctness of isogonal conjugation in tetrahedron. Note that by definition if P is a vertex of the tetrahedron then for any Q lying in the opposite faceplane P and Q are isogonal conjugates. Note as well that any two points on the opposite edgelines of the tetrahedron are isogonal conjugates too. Thus we may proceed assuming that P does not lie on the surface of the tetrahedron.

Theorem 3.1. *For arbitrary tetrahedron $ABCD$ and point P not lying on its surface exists its isogonal conjugate Q with respect to $ABCD$.*

Proof. Let P_A, P_B, P_C, P_D be the reflections of P in the respective faces of $ABCD$. Since $DP_A = DP_B = DP_C$, the line through D perpendicular to $P_AP_BP_C$ passes through the circumcenter Q of $P_AP_BP_CP_D$. The lines through A, B, C defined similarly pass through Q too.

Now let us show that, for example, the planes ABP and ABQ are isogonal in dihedron AB , i.e. they make equal angles with its bisector plane; see Figure 1 for a perspective in the direction of edge AB . Choose a positive direction of rotation around AB and define $\angle(ABX, ABY)$ for X and Y not lying on AB as the minimal angle of rotation in that positive direction that sends the plane ABX to ABY . Then

$$\begin{aligned} \angle(ABP, ABD) &= \frac{\angle(ABP, ABP_C)}{2} \\ &= \frac{\angle(ABP_D, ABP_C) - \angle(ABP_D, ABP)}{2} \\ &= \angle(ABP_D, ABQ) - \angle(ABP_D, ABC) \\ &= \angle(ABC, ABQ). \end{aligned}$$

Similarly planes eP and eQ are isogonal in dihedron e for any other edge e of $ABCD$. Hence P and Q are isogonal conjugates.

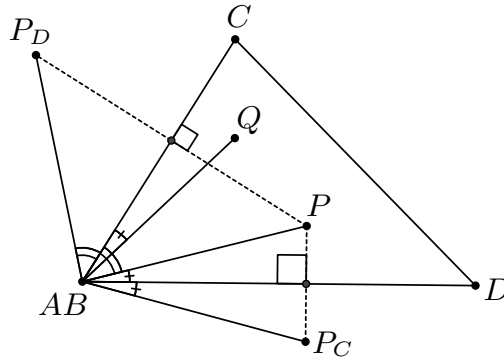


FIGURE 1.

□

Recall that for a given tetrahedron $ABCD$ and point P the sphere passing through the projections of P onto the faces of $ABCD$ is called the *pedal sphere* of P . For degenerated cases, i.e. when the set of projections contains less than four points, the pedal sphere can be defined via limit.

Remark 3.1. Note that in the proof of Theorem 3.1 the homothety with coefficient $1/2$ centered at P sends the vertices of $P_AP_BP_CP_D$ and its circumcenter Q to the projections of P on the faces of $ABCD$ and the midpoint M_{PQ} of PQ , respectively. So the resulting sphere centered at M_{PQ} passes through the projections of P . Similarly it passes through the projections of Q too. Hence we may formulate the following proposition which is the generalization of the respective result for the triangle:

Corollary 3.1. *The eight projections of two isogonal conjugate points in a tetrahedron onto its faces lie on a (pedal) sphere centered at the midpoint of the segment joining the two isogonal conjugate points. Moreover, the projections on the same face are diametrically opposite in the intersection circle of the sphere and the face.*

It is not difficult to see that the reasoning in the proof of Theorem 3.1 and Remark 3.1 are reversible. This lets us formulate the following corollary:

Corollary 3.2. *Points P and Q are isogonal conjugates in a tetrahedron iff their pedal spheres coincide.*

4. AUXILIARY FACTS

When working with spheres it is useful to study the analogous configurations (if existing) for circles on the plane. Many properties of circles on the plane are valid for spheres too. Particularly, this concerns to inversion.

Define the *angle between two intersecting spheres* as the angle between their tangent planes in a point of their intersection. This definition can be extended for a sphere and a plane too. Indeed, one may think of the plane as a special case of a sphere whose center is at infinity.

It is well-known that angles between circles are preserved under inversion. Naturally, this is the case with spheres too.

Proposition 4.1. *Angles between spheres are preserved under inversion.*

Proof. Let us be given two intersecting spheres γ_1, γ_2 and an inversion sphere Ω . Consider their section with the plane π through their centers. Then the angle between γ_1 and γ_2 is equal to the angle between the

circles $\gamma_1 \cap \pi$ and $\gamma_2 \cap \pi$. Also note that for these two circles inversion in Ω is equivalent to inversion in $\Omega \cap \pi$. Thus, since the angles between circles are preserved under inversion on plane, the angles between the spheres constructed on these circles having the same center and radius are also preserved. \square

The second fact that will come handy for the proof of the main result is as well a generalization of a plane construction:

Proposition 4.2. *Let us be given a sphere Ω and a circle σ on it, as well as a sphere Γ passing through σ . Suppose that Γ makes equal angles with Ω and the plane of σ . Then the center of Γ lies on Ω .*

Proof. Let Q be the center of Γ . Consider a section of the construction with a plane through the centers of Γ and Ω . Let the sections of these spheres be the circles γ and ω respectively, and let S_1, S_2 be the points of intersection of σ with the secant plane; see Figure 2. Let also UV be the diameter in ω perpendicular to S_1S_2 and t be the tangent at S_2 to ω . Without loss of generality we may assume that Q and V lie in the same side of S_1S_2 .

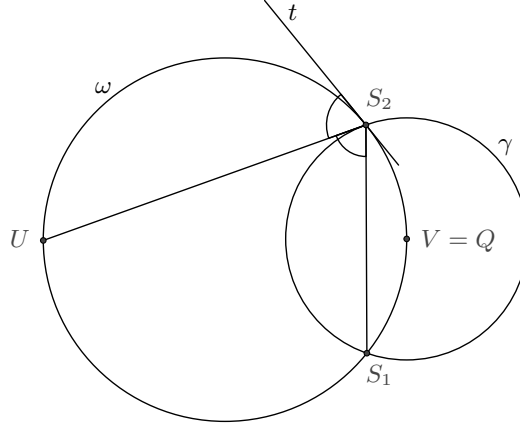


FIGURE 2.

By simple angle chasing one may check that US_2 bisects the angle between t and S_1S_2 . This means that γ should touch US_2 . Similarly γ should touch US_1 too so the center of γ coincides with V and thus lies on Ω . \square

We will utilize the following property of isogonal conjugate points in a triangle as well:

Proposition 4.3. *Let X and Y be isogonal conjugate points in the triangle ABC . Let M and N be the midpoints of arcs AB not containing and containing C , respectively. Let γ_M and γ_N be the circles centered at M and N , respectively, passing through A, B . Then*

- (i) each of the circles γ_M and γ_N makes equal angles with (bisects) the circles ABX and ABY ;
- (ii) N and M are respectively the external and internal homothety centers of the circles ABX and ABY .

Proof. Let I be the incenter of ABC , and S, T be the circumcenters of ABX, ABY , respectively; see Figure 3. Recall that I lies on γ_M .

Since AI bisects $\angle XAY$ and BI bisects $\angle XBY$, easy angle chasing yields that AM bisects $\angle TAS$. Hence γ_M bisects the circles ABX and ABY . But $AN \perp AM$ so AN bisects $\angle TAS$ too and γ_N also bisects the circles ABX and ABY . Thus part (i) is proved.

By the bisector property $\frac{SM}{MT} = \frac{SA}{AT} = \frac{SN}{NT}$. This proves part (ii).

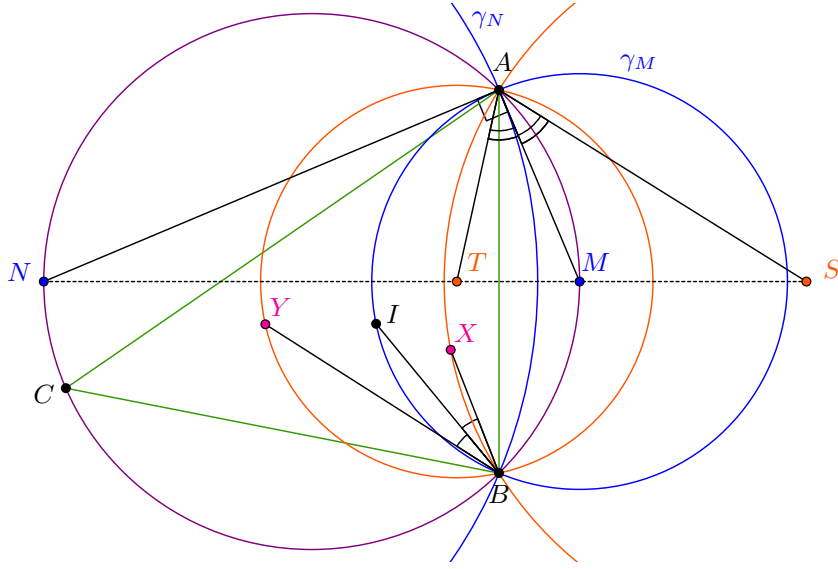


FIGURE 3.

□

Proposition 4.4. *Let us be given two spheres Ω_1 and Ω_2 intersecting each other through the circle σ . Let S be the center of their external homothety. Then the sphere Γ centered at S and passing through σ bisects the spheres Ω_1 and Ω_2 .*

Proof. Consider a section of the construction by any plane π passing through the centers of Ω_1 and Ω_2 ; see Figure 4. Let $\omega_i = \Omega_i \cap \pi, i \in \{1, 2\}$ and $\gamma = \Gamma \cap \pi$. Let A be one of the points of intersection of ω_1 and ω_2 . Let SA intersect ω_1 second time at B .

In force of homothety the tangents of ω_1 at B and of ω_2 at A are parallel. On the other hand, SA makes equal angles with the tangents of ω_1 at A and B . Thus SA bisects the angle between the tangents of ω_1 and ω_2 at A . Equivalently, this angle is bisected by the tangent at A to γ , as needed.

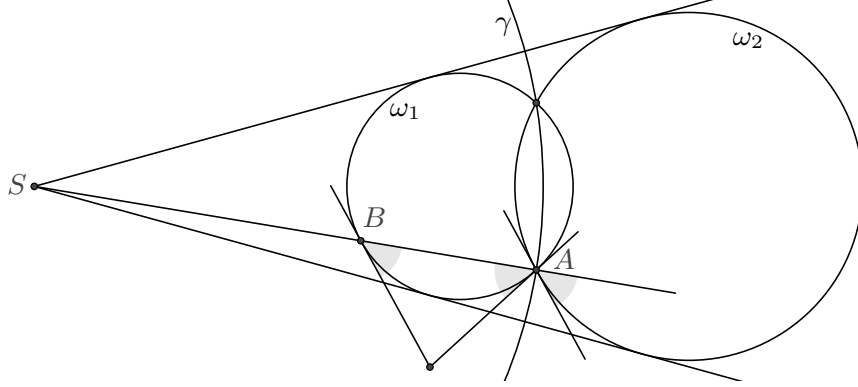


FIGURE 4.

□

5. ISOGONAL CONJUGATES SYMMETRIC IN BIMEDIANS

From here on we will denote by $ABCD$ our isosceles tetrahedron, by Ω its circumsphere and by O its center.

In this section we will heavily rely on coordinate bashing (though incorporating it with some crucial geometric reasoning) and will use several quantitative characteristics of the tetrahedron in terms of its coordinates. Namely, embed $ABCD$ into the Cartesian coordinate system $Oxyz$ so that

$$(1) \quad A = (-a, b, c), \quad B = (a, -b, c), \quad C = (a, b, -c), \quad D = (-a, -b, -c)$$

for some $a, b, c \in \mathbb{R} \setminus \{0\}$.

The following proposition defines pretty much all the values that we need:

Proposition 5.1. *In $ABCD$*

(i) *if S is the area of a face then*

$$S = 2\sqrt{a^2b^2 + b^2c^2 + c^2a^2};$$

(ii) *if d is the distance from O to a face then*

$$d = \frac{2|abc|}{S};$$

(iii) *if θ is half the angle of dihedron CD (or equivalently AB) then*

$$\sin \theta = \frac{d}{|c|}.$$

Proof. (i) Taking into account that the sides of ABC are equal to $AB = 2\sqrt{a^2 + b^2}$ etc. and utilizing Heron's formula, after some manipulations we find the presented formula for S .

(ii) Note that the volume of $ABCD$ is equal to $[ABCD] = \frac{4dS}{3}$.

On the other hand $[ABCD]$ is third the volume of the circumscribed parallelepiped which is rectangular in case of isosceles tetrahedron, i.e. $[ABCD] = \frac{8|abc|}{3}$. Hence we find the presented value for d .

(iii) Let M be the midpoint of CD and Q be the circumcenter of ACD . Then $\theta = \angle OMQ$ so

$$\sin \theta = \frac{OQ}{OM} = \frac{d}{|c|}.$$

□

Recall that a *bimedian* of tetrahedron is a line joining midpoints of opposite edges. We will denote by ℓ_A, ℓ_B, ℓ_C the bimedians of $ABCD$ joining the midpoints of edges DA and BC , DB and AC , DC and AB , respectively.

We will need the following fact too to prove the upcoming theorem:

Lemma 5.1. *Let X be any point of the space. Let P and Q be its projections on ACD and BCD , respectively. Also let R be its projection on ℓ_C . Then $PR = RQ$.*

Proof. Let S be the projection of X on the bisector plane of dihedron CD and let T be the projection of S on CD ; see Figure 5. Then X, P, S, Q, T lie on a circle with diameter XT . Since TS bisects $\angle PTQ$ we get that $PS = SQ$. Hence in force of $RS \perp PQS$ we deduce that $PR = RQ$.

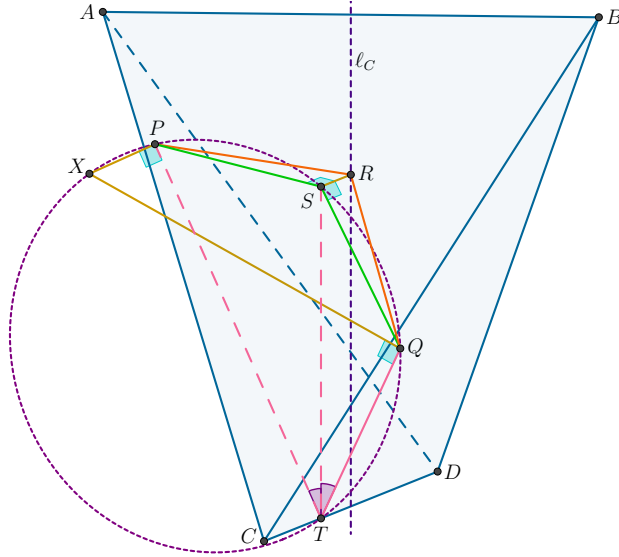


FIGURE 5.

□

Theorem 5.1. *Let ℓ be a bimedial of $ABCD$. Then the pairs of isogonal conjugate points in $ABCD$ which are symmetric with respect to ℓ form a hyperbolic paraboloid.*

Proof. Without loss of generality we may assume that $\ell = \ell_C$. Let P and Q be isogonal conjugate points symmetric in ℓ . Then their midpoint M lies on ℓ . According to Corollary 3.1 the pedal spheres of P and Q coincide and have the center M . Denote this sphere by Γ .

Since M lies on the bisector of dihedral CD the circles γ_A and γ_B cut from Γ by the planes BCD and ACD , respectively, are symmetric in the bisector of dihedral CD .

The projections of P and Q on BCD lie on γ_A so P and Q lie on the straight cylinder \mathfrak{C}_A based on γ_A . Similarly P and Q lie on the straight cylinder \mathfrak{C}_B based on γ_B . On the other hand P and Q lie on a plane π perpendicular to ℓ . Thus P and Q lie on the ellipses $\pi \cap \mathfrak{C}_A$ and $\pi \cap \mathfrak{C}_B$. However these ellipses coincide since they are symmetric in M , both of them have the center M and minor axes parallel to CD . Name this ellipse ε_1 .

Repeating the reasoning above for the dihedral AB we find out that P and Q lie on the ellipse ε_2 defined similarly. Hence P and Q are an opposite pair of the points of intersection $\varepsilon_1 \cap \varepsilon_2$.

Now recall the embedding (1). Then $M = (0, 0, z_0)$ for some $z_0 \in \mathbb{R}$. Note that ℓ coincides with Oz and the other two bimedians of $ABCD$ coincide with Ox and Oy .

Let d be the distance from O to faces of $ABCD$. Then it is easy to see that the distances d_1 and d_2 from M to ACD and ABC , respectively, are $\left| \frac{z_0 + c}{c} \right| d$ and $\left| \frac{z_0 - c}{c} \right| d$.

If r_1 and r_2 are the radii of γ_B and $\gamma_C = \Gamma \cap ABD$, respectively, then

$$r_1 = \sqrt{r^2 - d_1^2}, \quad r_2 = \sqrt{r^2 - d_2^2}.$$

Clearly the minor axis of ε_1 is equal to r_1 , while its major axis is $\frac{r_1}{\sin \theta}$ where θ is half the angle of dihedral CD (or equivalently AB).

Note that the minor axis of ε_1 is parallel to CD . Thus ε_1 can be obtained from the ellipse

$$\begin{cases} \frac{x^2}{r_1^2 / \sin^2 \theta} + \frac{y^2}{r_1^2} = 1 \\ z = z_0 \end{cases}$$

by rotating it around Oz in the negative direction (from y to x) in the angle $\varphi = \arctan \left(\frac{a}{b} \right)$. This gives the following equations for ε_1 :

$$\begin{cases} (x \cos \varphi - y \sin \varphi)^2 \sin^2 \theta + (x \sin \varphi + y \cos \varphi)^2 = r_1^2 \\ z = z_0 \end{cases}.$$

Similarly ε_2 is given by

$$\begin{cases} (x \cos \varphi + y \sin \varphi)^2 \sin^2 \theta + (-x \sin \varphi + y \cos \varphi)^2 = r_2^2 \\ z = z_0 \end{cases}.$$

Subtracting these equations we get the following equations which hold for the points of $\varepsilon_1 \cap \varepsilon_2$:

$$(2) \quad \begin{cases} -4xy \sin \varphi \cos \varphi \cos^2 \theta = r_2^2 - r_1^2 \\ z = z_0 \end{cases}.$$

We have

$$\begin{aligned} \sin \varphi &= \frac{a}{\sqrt{a^2 + b^2}}, \quad \cos \varphi = \frac{b}{\sqrt{a^2 + b^2}} \\ r_2^2 - r_1^2 &= d_1^2 - d_2^2 \\ &= \frac{(z_0 + c)^2 - (z_0 - c)^2}{c^2} d^2 = \frac{4z_0}{c} d^2. \end{aligned}$$

Using these, as well as our calculated values in Proposition 5.1 we get

$$\cos^2 \theta = 1 - \frac{d^2}{c^2} = \frac{c^2(a^2 + b^2)}{a^2b^2 + b^2c^2 + c^2a^2}$$

and (2) simplifies to

$$\begin{cases} -xy = \frac{ab}{c} z_0 \\ z = z_0 \end{cases}.$$

Now letting z_0 vary we get the hyperbolic paraboloid \mathcal{H} containing all the isogonal conjugate pairs P and Q symmetric in ℓ :

$$z = -\frac{c}{ab}xy.$$

However we still need to show that any pair of points P' and Q' on \mathcal{H} symmetric in ℓ are isogonal conjugates. To this end we will use the equivalence of isogonal conjugate points from Corollary 3.2.

Let P_A, P_B, P_C, P_D be the projections of P' on BCD, CDA, DAB, ABC , respectively. Similarly define Q_A, Q_B, Q_C, Q_D . Also let M' be the projection of P' (or equivalently of Q') on ℓ .

According to Lemma 5.1 $P_A M' = M' P_B$. In force of symmetry in ℓ_C we get that all the four points P_A, P_B, Q_A, Q_B are equidistant from M' . Similarly P_C, P_D, Q_C, Q_D are equidistant from M' too. So if we prove that $P_B M' = P_C M'$ then the pedal spheres of P' and Q' will coincide and we will be done by Corollary 3.2.

We have the following equations for the faceplanes:

$$ACD : \frac{x}{a} - \frac{y}{b} + \frac{z}{c} + 1 = 0, \quad ABD : \frac{x}{a} + \frac{y}{b} - \frac{z}{c} + 1 = 0.$$

If $P' = (x_0, y_0, z_0)$ then

$$M'P_B^2 = \left(x_0 - \frac{p+q}{ar}\right)^2 + \left(y_0 + \frac{p+q}{br}\right)^2 + \left(\frac{p+q}{cr}\right)^2,$$

$$M'P_C^2 = \left(x_0 - \frac{-p+q}{ar}\right)^2 + \left(y_0 - \frac{-p+q}{br}\right)^2 + \left(\frac{-p+q}{cr}\right)^2,$$

where

$$p = -\frac{y_0}{b} + \frac{z_0}{c}, \quad q = \frac{x_0}{a} + 1, \quad r = \frac{1}{a^2} + \frac{1}{b^2} + \frac{1}{c^2}.$$

Then

$$\begin{aligned} \frac{M'P_B^2 - M'P_C^2}{4} &= -\frac{p}{a} \left(x_0 - \frac{q}{ar}\right) + \frac{q}{b} \left(y_0 + \frac{p}{br}\right) + \frac{p}{c} \cdot \frac{q}{cr} \\ &= -\frac{x_0}{a}p + \frac{y_0}{b}q + pq \\ &= -\frac{x_0}{a} \left(-\frac{y_0}{b} + \frac{z_0}{c}\right) + \frac{y_0}{b} \left(\frac{x_0}{a} + 1\right) + \left(-\frac{y_0}{b} + \frac{z_0}{c}\right) \left(\frac{x_0}{a} + 1\right) \\ &= \frac{x_0 y_0}{ab} + \frac{z_0}{c}. \end{aligned}$$

Since $P' = (x_0, y_0, z_0)$ lies on \mathcal{H} the last expression is zero, as needed. \square

Remark 5.1. Note that the other two bimedians different from ℓ lie on \mathcal{H} ($z = 0$ yields $x = 0$ or $y = 0$). Also note that the vertices of $ABCD$ lie on \mathcal{H} as well.

Denote by $\mathcal{H}_A, \mathcal{H}_B, \mathcal{H}_C$ the hyperbolic paraboloids defined above corresponding to bimedians ℓ_A, ℓ_B, ℓ_C .

Proposition 5.2. *For any point $P \in \Omega$ the circles ABP and CDP touch iff $P \in \mathcal{H}_C$.*

Proof. Recall the embedding (1). Let $P = (x, y, z)$.

We need to check if the line $ABP \cap CDP$ touches Ω , i.e. is perpendicular to OP . Or, equivalently, whether (x, y, z) lies in the linear span of the normal vectors of ABP and CDP . It is not hard to check that these normals are

$$\begin{bmatrix} b(z-c) \\ a(z-c) \\ -(bx+ay) \end{bmatrix} \quad \text{and} \quad \begin{bmatrix} b(z+c) \\ -a(z+c) \\ -bx+ay \end{bmatrix}.$$

Their linear span coincides with the linear span of their half-sum and half-difference:

$$\begin{bmatrix} bz \\ -ac \\ -bx \end{bmatrix}, \quad \begin{bmatrix} bc \\ -az \\ ay \end{bmatrix}.$$

We need to check the singularity of matrix

$$M = \begin{pmatrix} bz & bc & x \\ -ac & -az & y \\ -bx & ay & z \end{pmatrix}.$$

Taking into account the fact that $P \in \Omega$, i.e. $x^2 + y^2 + z^2 = a^2 + b^2 + c^2$ we get

$$\begin{aligned} \det(M) &= -abz(x^2 + y^2 + z^2 - c^2) - xyc(a^2 + b^2) \\ &= -(a^2 + b^2)(abz + xyc) \end{aligned}$$

which is zero iff $abz + xyc = 0$, that is when $P \in \mathcal{H}_C$. \square

Remark 5.2. Obviously, similar results hold for \mathcal{H}_A and \mathcal{H}_B too.

6. ISOGONAL CONJUGATION ON THE CIRCUMSPHERE

In this section too $ABCD$ is an isosceles tetrahedron. All the notations are preserved.

Theorem 6.1. *Let $X \notin \{A, B, C, D\}$ be a point on Ω . Then the isogonal conjugate of X with respect to $ABCD$ lies on Ω .*

Proof. Let Y be the second intersection point of Ω and the line joining D with the isogonal conjugate of X . Points X and Y lie in isogonal planes with respect to each of the dihedrons DA, DB, DC . We need to prove that they lie in isogonal planes in the dihedrons AB, BC, CA as well.

Invert with center D ; see Figure 6. For any point Z of space denote its image by Z_1 .

Clearly A_1, B_1, C_1, X_1, Y_1 are coplanar (they lie in the image plane of Ω). By property (i) of isosceles tetrahedron we get

$$(*) \quad \angle B_1 A_1 D = \angle ABD = \angle ACD = \angle C_1 A_1 D$$

and two other similar equalities. Taking into account this, as well as the fact that X_1 and Y_1 lie in isogonal planes in dihedrons DA_1, DB_1, DC_1 , we deduce that X_1 and Y_1 are isogonal conjugates in $A_1 B_1 C_1$.

Recall that by property (ii) O is also the incenter of $ABCD$. This means that the plane eO is the bisector of the dihedron e for any edge e of $ABCD$.

It is easy to see that O_1 is the reflection of D in $A_1 B_1 C_1$ (consider the diametrically opposite point to D). Angles between spheres are preserved under inversion (Proposition 4.1) so since the plane ABO makes equal angles with ABD and ABC , the sphere $A_1 B_1 O_1 D$ makes equal angles with the plane $A_1 B_1 D$ and the sphere $A_1 B_1 C_1 D$. According to Proposition 4.2 this is possible only in the case when the circumcenter N of $A_1 B_1 O_1 D$ lies on the sphere $A_1 B_1 C_1 D$. Tetrahedron $A_1 B_1 O_1 D$

Note that N is the midpoint of arc $A_1C_1B_1$. Indeed, $NA_1 = NB_1$ so N is the midpoint of either one of the two arcs A_1B_1 . By property (iii) the angles in (*) are acute. This means that the projection of D on $A_1B_1C_1$ lies on the triangle $A_1B_1C_1$ so the dihedrons A_1B_1 , B_1C_1 and C_1A_1 in $DA_1B_1C_1$ are acute. Thus N and C_1 lie in the same side of A_1B_1 and N is on the arc $A_1B_1C_1$.

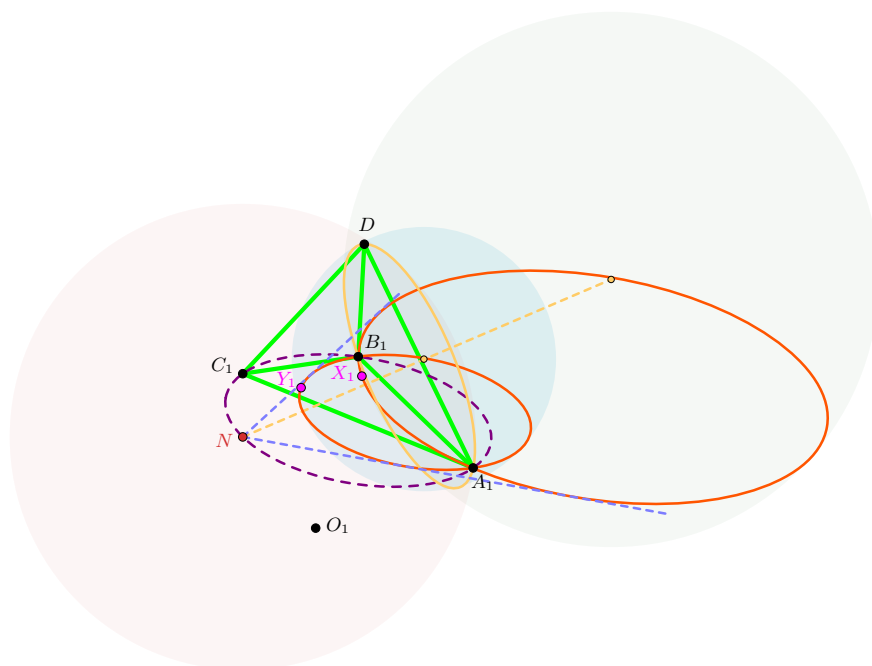


FIGURE 6.

In force of Proposition 4.4 the sphere $A_1B_1O_1D$ with center N passing through A_1 makes equal angles with the spheres $A_1B_1DX_1$ and $A_1B_1DY_1$. Therefore its preimage plane ABO also makes equal angles with the planes ABX and ABY .

Similarly X and Y are in isogonal planes with respect to the dihedrons BC and AC too, whence the conclusion follows. \square

In his proof of Theorem 6.1 Ilya Bogdanov, professor at Moscow Institute of Physics and Technology, found the following interesting construction of isogonal conjugate points on the circumsphere of isosceles tetrahedron (I. Bogdanov, personal communication, January 17, 2020):

Proposition 6.1. *Let $X \notin \{A, B, C, D\}$ be a point on Ω . Let X_A, X_B, X_C be the second intersection points of circles XDA and XBC , XDB and XCA , XDC and XAB , respectively. Then the reflections of X_A in ℓ_A , X_B in ℓ_B and X_C in ℓ_C coincide with the isogonal conjugate of X .*

Proof. Let Y be the isogonal conjugate of X . Let X' and X'_A be the reflections of X and X_A , respectively, in ℓ_A . We will prove that $Y = X'_A$. Similarly the reflections of X in ℓ_B and ℓ_C will coincide with Y too.

Note that the planes $DAXX_A$ and $DAX'X'_A$, as well as $BCXX_A$ and $BCX'X'_A$ are pairs of isogonals. This means that Y lies on $X'X'_A$. According to Theorem 6.1 Y also lies on Ω . Hence Y should coincide either with X' or X'_A .

If $Y = X'_A$ then there is nothing to prove. Else $Y = X'$. This means that Y and X lie on \mathcal{H}_A . According to Proposition 5.2 $X = X_A$ and $Y = X' = X'_A$ as desired. \square

Remark 6.1. To prove this result Bogdanov used inversion with respect to one of the points $\ell_A \cap \Omega$. Points A, B, C, D were mapped to the vertices of a parallelogram and angle chasing finished the proof. However we chose a different approach based on the results already proven.

REFERENCES

- [1] Allan L. Edmonds. *The Geometry of an Equifacetal Simplex*. In: *Mathematika* 52.1-2 (2005), pp. 31–45.
- [2] Allan L. Edmonds, Mowaffaq Hajja, and Horst Martini. *Coincidences of simplex centers and related facial structures*. In: *Beiträge zur Algebra und Geometrie / Contributions to Algebra and Geometry* 46.2 (2005), pp. 491–512.
- [3] Eric W. Weisstein. “*Isosceles Tetrahedron*.” *From MathWorld—A Wolfram Web Resource*. <https://mathworld.wolfram.com/IsoscelesTetrahedron.html>.

SARO HARUTYUNYAN, YEREVAN, ARMENIA 0012
Email address: saro.harutyunyan@gmail.com